




Measure each of the bars (in centimeters) and then generate a line plot based on the information.

Answers


















- 1. _____
- 2. _____
- 3. _____
- 4. _____
- 5. _____
- 6. _____
- 7. _____
- 8. _____
- 9. _____
- 10. _____
- 11. _____
- 12. _____
- 13. _____
- 14. _____
- 15. _____

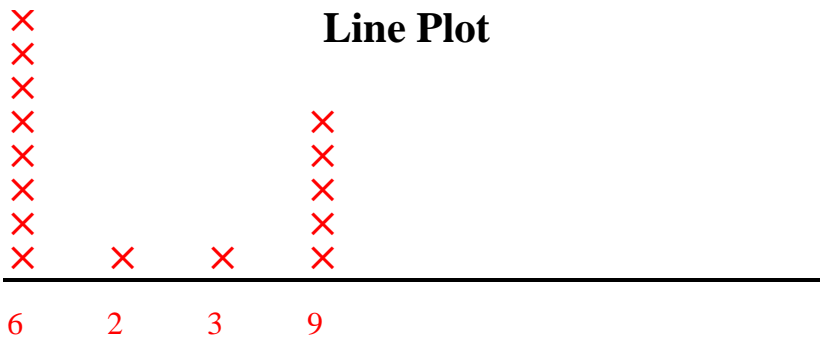
Line Plot



Measure each of the bars (in centimeters) and then generate a line plot based on the information.

- 1)  6
- 2)  6
- 3)  9
- 4)  6
- 5)  6
- 6)  6
- 7)  6
- 8)  9
- 9)  9
- 10)  9
- 11)  6
- 12)  6
- 13)  2
- 14)  9
- 15)  3

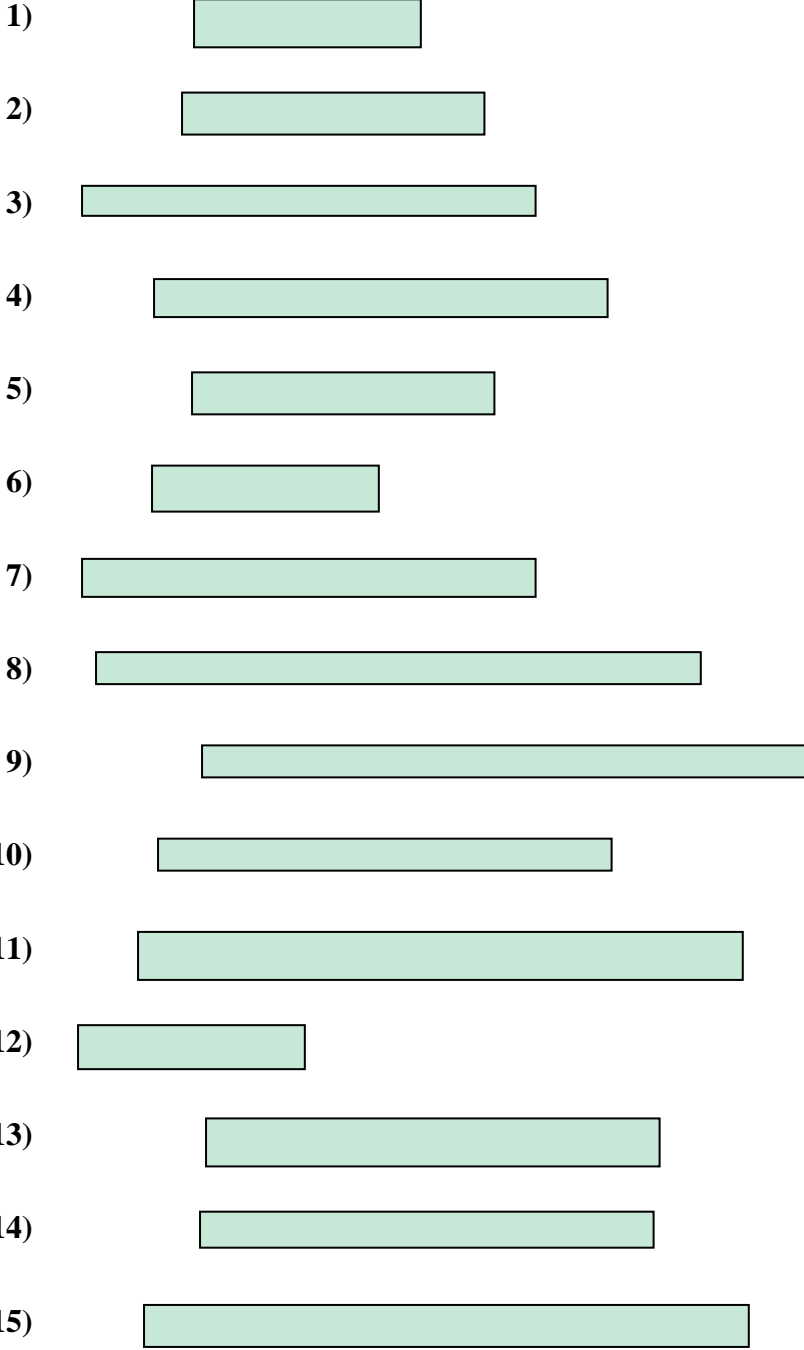
- Answers
- 1. 6
 - 2. 6
 - 3. 9
 - 4. 6
 - 5. 6
 - 6. 6
 - 7. 6
 - 8. 9
 - 9. 9
 - 10. 9
 - 11. 6
 - 12. 6
 - 13. 2
 - 14. 9
 - 15. 3





Measure each of the bars (in centimeters) and then generate a line plot based on the information.

Answers


















- 1. _____
- 2. _____
- 3. _____
- 4. _____
- 5. _____
- 6. _____
- 7. _____
- 8. _____
- 9. _____
- 10. _____
- 11. _____
- 12. _____
- 13. _____
- 14. _____
- 15. _____

Line Plot

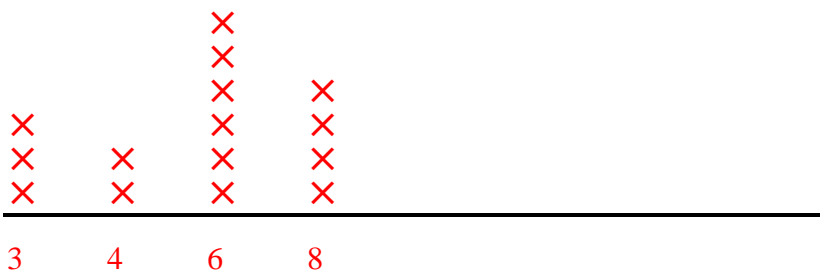


Measure each of the bars (in centimeters) and then generate a line plot based on the information.

- 1)  3
- 2)  4
- 3)  6
- 4)  6
- 5)  4
- 6)  3
- 7)  6
- 8)  8
- 9)  8
- 10)  6
- 11)  8
- 12)  3
- 13)  6
- 14)  6
- 15)  8

- Answers
- 1. 3
 - 2. 4
 - 3. 6
 - 4. 6
 - 5. 4
 - 6. 3
 - 7. 6
 - 8. 8
 - 9. 8
 - 10. 6
 - 11. 8
 - 12. 3
 - 13. 6
 - 14. 6
 - 15. 8

Line Plot





Measure each of the bars (in centimeters) and then generate a line plot based on the information.

Answers



1. _____



2. _____




3. _____



4. _____



5. _____



6. _____



7. _____




8. _____




9. _____



10. _____



11. _____



12. _____



13. _____



14. _____

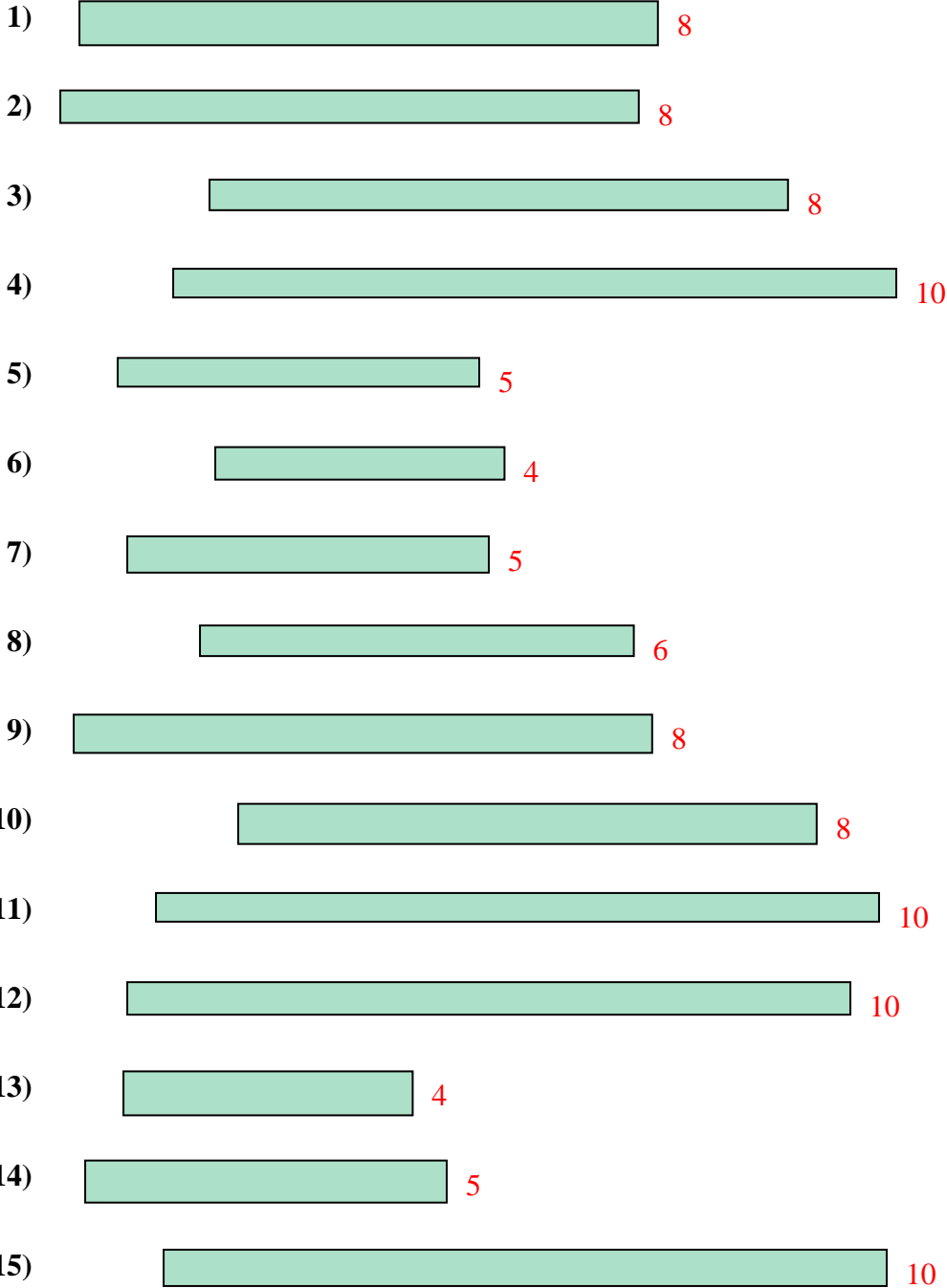


15. _____

Line Plot

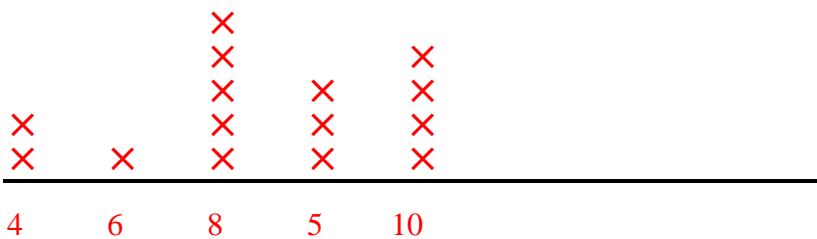


Measure each of the bars (in centimeters) and then generate a line plot based on the information.



- Answers
1. 8
 2. 8
 3. 8
 4. 10
 5. 5
 6. 4
 7. 5
 8. 6
 9. 8
 10. 8
 11. 10
 12. 10
 13. 4
 14. 5
 15. 10

Line Plot





Measure each of the bars (in centimeters) and then generate a line plot based on the information.

Answers



1. _____



2. _____



3. _____




4. _____



5. _____



6. _____



7. _____



8. _____



9. _____



10. _____



11. _____



12. _____



13. _____

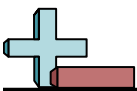


14. _____





15. _____

Line Plot



Measure each of the bars (in centimeters) and then generate a line plot based on the information.



Answers

1. 4

2. 2

3. 10

4. 2

5. 2

6. 4

7. 2

8. 7

9. 10

10. 7

11. 6

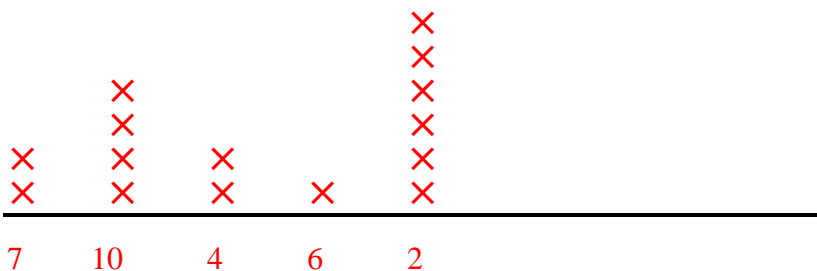
12. 10

13. 2

14. 10

15. 2

Line Plot





Measure each of the bars (in centimeters) and then generate a line plot based on the information.

Answers



1. _____



2. _____



3. _____



4. _____



5. _____



6. _____



7. _____



8. _____



9. _____



10. _____



11. _____



12. _____



13. _____



14. _____



15. _____

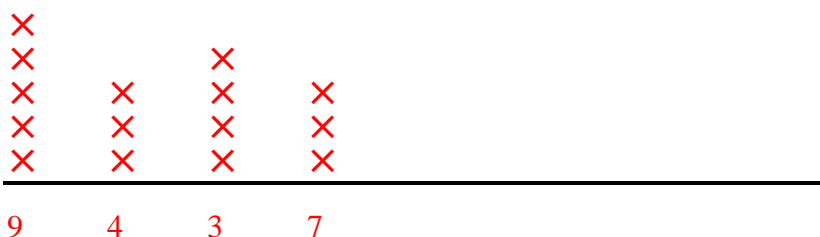
Line Plot



Measure each of the bars (in centimeters) and then generate a line plot based on the information.



Line Plot



Answers

1. 9

2. 3

3. 3

4. 3

5. 7

6. 9

7. 3

8. 9

9. 4

10. 9

11. 7

12. 7

13. 4

14. 9

15. 4



Measure each of the bars (in centimeters) and then generate a line plot based on the information.

Answers



1. _____



2. _____



3. _____



4. _____



5. _____



6. _____



7. _____



8. _____



9. _____



10. _____



11. _____



12. _____



13. _____



14. _____



15. _____

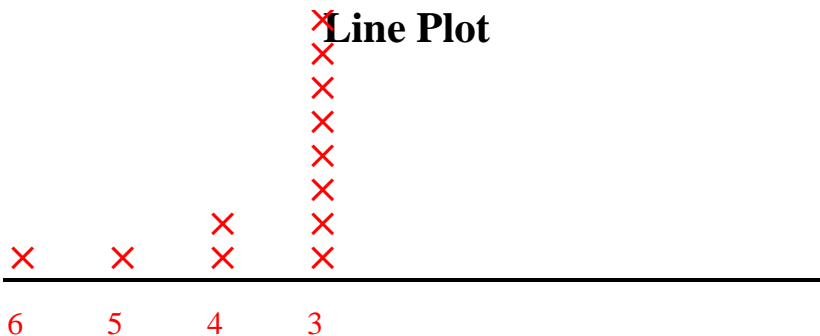
Line Plot



Measure each of the bars (in centimeters) and then generate a line plot based on the information.



Line Plot



Answers

1. 3

2. 3

3. 3

4. 3

5. 4

6. 3

7. 3

8. 5

9. 3

10. 3

11. 6

12. 3

13. 3

14. 3

15. 4



Measure each of the bars (in centimeters) and then generate a line plot based on the information.

Answers



1. _____



2. _____



3. _____



4. _____



5. _____



6. _____



7. _____



8. _____



9. _____



10. _____



11. _____



12. _____



13. _____



14. _____



15. _____

Line Plot

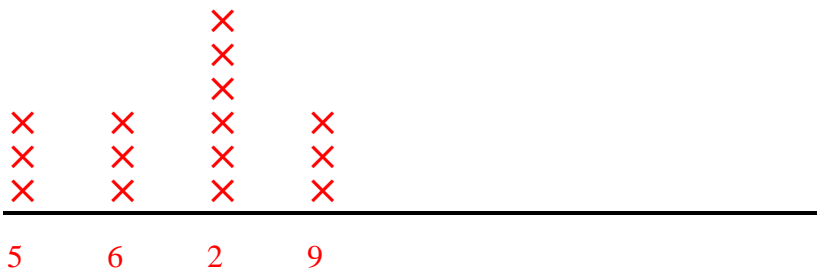


Measure each of the bars (in centimeters) and then generate a line plot based on the information.

- 1) 9
- 2) 2
- 3) 9
- 4) 6
- 5) 5
- 6) 2
- 7) 2
- 8) 5
- 9) 2
- 10) 9
- 11) 5
- 12) 6
- 13) 2
- 14) 6
- 15) 2

- Answers
- 1. 9
 - 2. 2
 - 3. 9
 - 4. 6
 - 5. 5
 - 6. 2
 - 7. 2
 - 8. 5
 - 9. 2
 - 10. 9
 - 11. 5
 - 12. 6
 - 13. 2
 - 14. 6
 - 15. 2

Line Plot





Measure each of the bars (in centimeters) and then generate a line plot based on the information.

Answers



1. _____



2. _____



3. _____




4. _____



5. _____



6. _____



7. _____



8. _____



9. _____



10. _____



11. _____



12. _____



13. _____



14. _____


















15. _____

Line Plot



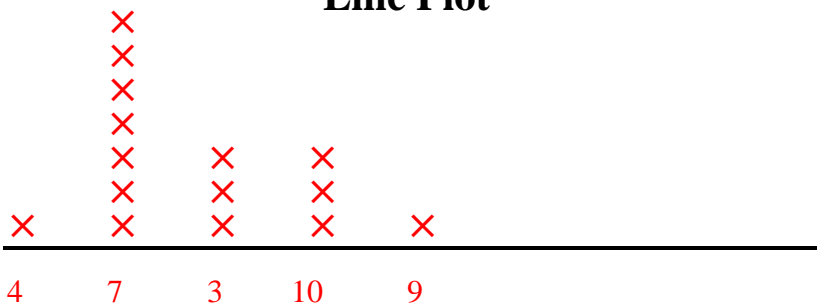
Measure each of the bars (in centimeters) and then generate a line plot based on the information.

Answers

- 1)  3
- 2)  7
- 3)  7
- 4)  4
- 5)  7
- 6)  7
- 7)  3
- 8)  10
- 9)  7
- 10)  7
- 11)  7
- 12)  10
- 13)  9
- 14)  3
- 15)  10

- 1. 3
- 2. 7
- 3. 7
- 4. 4
- 5. 7
- 6. 7
- 7. 3
- 8. 10
- 9. 7
- 10. 7
- 11. 7
- 12. 10
- 13. 9
- 14. 3
- 15. 10

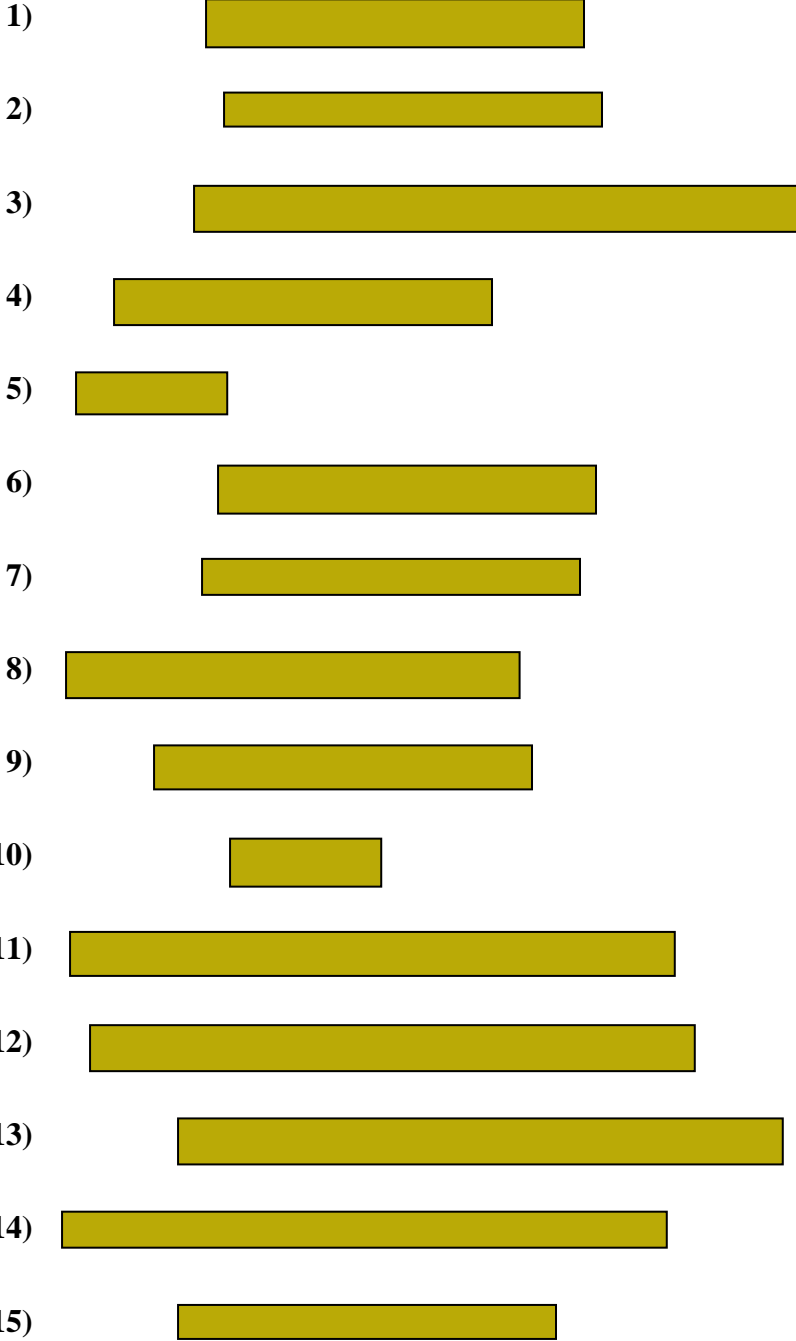
Line Plot





Measure each of the bars (in centimeters) and then generate a line plot based on the information.

Answers



- 1. _____
- 2. _____
- 3. _____
- 4. _____
- 5. _____
- 6. _____
- 7. _____
- 8. _____
- 9. _____
- 10. _____
- 11. _____
- 12. _____
- 13. _____
- 14. _____
- 15. _____

Line Plot

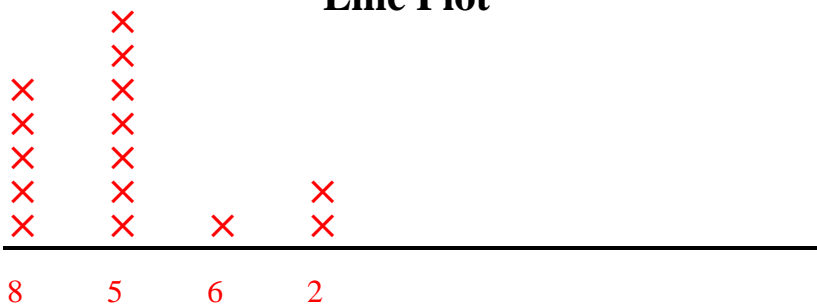


Measure each of the bars (in centimeters) and then generate a line plot based on the information.

- 1) 5
- 2) 5
- 3) 8
- 4) 5
- 5) 2
- 6) 5
- 7) 5
- 8) 6
- 9) 5
- 10) 2
- 11) 8
- 12) 8
- 13) 8
- 14) 8
- 15) 5

- Answers
- 1. 5
 - 2. 5
 - 3. 8
 - 4. 5
 - 5. 2
 - 6. 5
 - 7. 5
 - 8. 6
 - 9. 5
 - 10. 2
 - 11. 8
 - 12. 8
 - 13. 8
 - 14. 8
 - 15. 5

Line Plot





Measure each of the bars (in centimeters) and then generate a line plot based on the information.

Answers



1. _____



2. _____



3. _____



4. _____



5. _____



6. _____



7. _____



8. _____



9. _____



10. _____



11. _____



12. _____



13. _____



14. _____


















15. _____

Line Plot



Measure each of the bars (in centimeters) and then generate a line plot based on the information.

- 1)  9
- 2)  8
- 3)  9
- 4)  2
- 5)  2
- 6)  5
- 7)  8
- 8)  8
- 9)  8
- 10)  10
- 11)  10
- 12)  8
- 13)  9
- 14)  8
- 15)  9

- Answers
- 1. 9
 - 2. 8
 - 3. 9
 - 4. 2
 - 5. 2
 - 6. 5
 - 7. 8
 - 8. 8
 - 9. 8
 - 10. 10
 - 11. 10
 - 12. 8
 - 13. 9
 - 14. 8
 - 15. 9

Line Plot

