


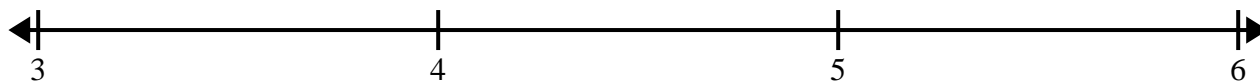


Create and label the line plot using the set of numbers provided.

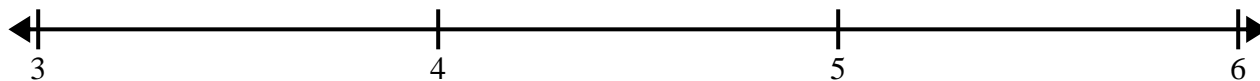
- 1) $6\frac{2}{4}$ $7\frac{1}{4}$ $8\frac{2}{4}$ 7 $8\frac{2}{4}$ 8 $8\frac{1}{4}$ $6\frac{1}{4}$
 $8\frac{1}{4}$ $6\frac{1}{4}$ $6\frac{2}{4}$ $8\frac{2}{4}$ $6\frac{1}{4}$ $7\frac{1}{4}$ $7\frac{2}{4}$ 6




- 2) 3 $5\frac{1}{2}$ $4\frac{1}{2}$ $4\frac{1}{2}$ 4 $4\frac{1}{2}$ $3\frac{1}{2}$ 3
 $3\frac{1}{2}$ $5\frac{1}{2}$ $5\frac{1}{2}$ 5 5 3 $3\frac{1}{2}$ 4




- 3) $3\frac{2}{4}$ $5\frac{2}{4}$ $5\frac{1}{4}$ 5 5 $5\frac{1}{4}$ $4\frac{2}{4}$ $5\frac{2}{4}$
 $4\frac{3}{4}$ $4\frac{2}{4}$ $3\frac{1}{4}$ $5\frac{2}{4}$ $5\frac{3}{4}$ 5 $5\frac{3}{4}$ 4



- 4) $7\frac{5}{8}$ $8\frac{4}{8}$ $7\frac{5}{8}$ $8\frac{1}{8}$ $8\frac{2}{8}$ $7\frac{4}{8}$ $8\frac{6}{8}$ $7\frac{7}{8}$
 $8\frac{7}{8}$ $8\frac{7}{8}$ $6\frac{7}{8}$ 6 $8\frac{5}{8}$ $8\frac{2}{8}$ $6\frac{5}{8}$ $8\frac{2}{8}$



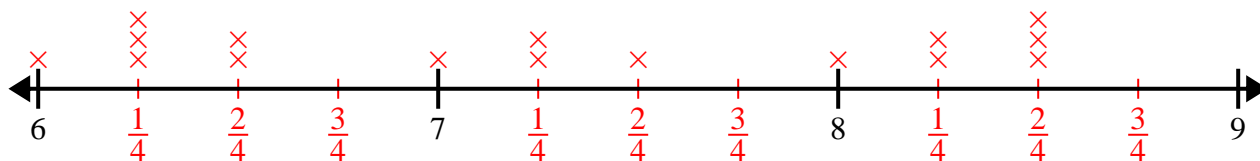
- 5) $2\frac{2}{8}$ $4\frac{5}{8}$ $3\frac{4}{8}$ $3\frac{5}{8}$ $3\frac{1}{8}$ $4\frac{3}{8}$ $4\frac{1}{8}$ $3\frac{2}{8}$
 $3\frac{1}{8}$ $3\frac{4}{8}$ $2\frac{5}{8}$ $2\frac{3}{8}$ $3\frac{6}{8}$ $2\frac{6}{8}$ $2\frac{2}{8}$ 4



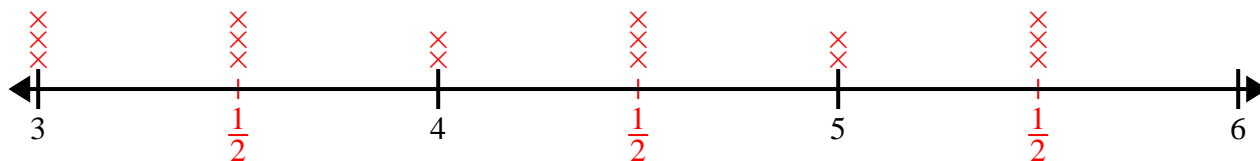


Create and label the line plot using the set of numbers provided.

- 1) $6\frac{2}{4}$ $7\frac{1}{4}$ $8\frac{2}{4}$ 7 $8\frac{2}{4}$ 8 $8\frac{1}{4}$ $6\frac{1}{4}$
 $8\frac{1}{4}$ $6\frac{1}{4}$ $6\frac{2}{4}$ $8\frac{2}{4}$ $6\frac{1}{4}$ $7\frac{1}{4}$ $7\frac{2}{4}$ 6



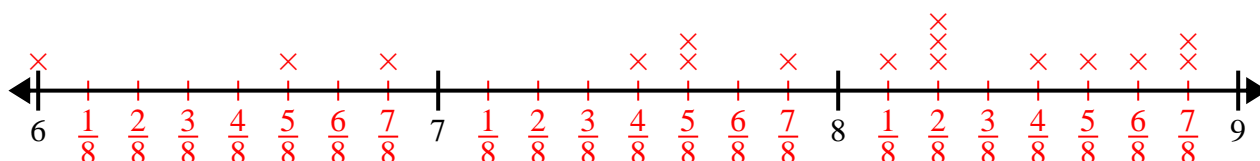
- 2) 3 $5\frac{1}{2}$ $4\frac{1}{2}$ $4\frac{1}{2}$ 4 $4\frac{1}{2}$ $3\frac{1}{2}$ 3
 $3\frac{1}{2}$ $5\frac{1}{2}$ $5\frac{1}{2}$ 5 5 3 $3\frac{1}{2}$ 4



- 3) $3\frac{2}{4}$ $5\frac{2}{4}$ $5\frac{1}{4}$ 5 5 $5\frac{1}{4}$ $4\frac{2}{4}$ $5\frac{2}{4}$
 $4\frac{3}{4}$ $4\frac{2}{4}$ $3\frac{1}{4}$ $5\frac{2}{4}$ $5\frac{3}{4}$ 5 $5\frac{3}{4}$ 4



- 4) $7\frac{5}{8}$ $8\frac{4}{8}$ $7\frac{5}{8}$ $8\frac{1}{8}$ $8\frac{2}{8}$ $7\frac{4}{8}$ $8\frac{6}{8}$ $7\frac{7}{8}$
 $8\frac{7}{8}$ $8\frac{7}{8}$ $6\frac{7}{8}$ 6 $8\frac{5}{8}$ $8\frac{2}{8}$ $6\frac{5}{8}$ $8\frac{2}{8}$



- 5) $2\frac{2}{8}$ $4\frac{5}{8}$ $3\frac{4}{8}$ $3\frac{5}{8}$ $3\frac{1}{8}$ $4\frac{3}{8}$ $4\frac{1}{8}$ $3\frac{2}{8}$
 $3\frac{1}{8}$ $3\frac{4}{8}$ $2\frac{5}{8}$ $2\frac{3}{8}$ $3\frac{6}{8}$ $2\frac{6}{8}$ $2\frac{2}{8}$ 4

