


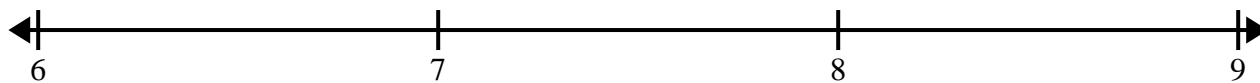


Create and label the line plot using the set of numbers provided.


- 1) $7\frac{3}{8}$ $8\frac{3}{8}$ $9\frac{2}{8}$ $7\frac{3}{8}$ 9 $9\frac{5}{8}$ $7\frac{1}{8}$ $8\frac{4}{8}$
 $8\frac{7}{8}$ $7\frac{2}{8}$ $9\frac{4}{8}$ $7\frac{2}{8}$ $7\frac{2}{8}$ $7\frac{1}{8}$ $9\frac{1}{8}$ $8\frac{7}{8}$



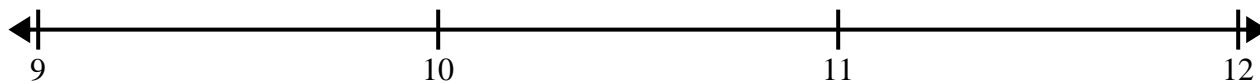
- 2) 7 $7\frac{4}{8}$ $8\frac{3}{8}$ $7\frac{7}{8}$ $8\frac{2}{8}$ $8\frac{1}{8}$ $7\frac{4}{8}$ $8\frac{5}{8}$
 $8\frac{7}{8}$ $8\frac{5}{8}$ 8 8 $7\frac{3}{8}$ $8\frac{2}{8}$ $6\frac{6}{8}$ $8\frac{5}{8}$




- 3) 6 $4\frac{1}{2}$ $5\frac{1}{2}$ 6 4 $6\frac{1}{2}$ 6 $5\frac{1}{2}$
 $6\frac{1}{2}$ $4\frac{1}{2}$ 5 $6\frac{1}{2}$ $5\frac{1}{2}$ 4 4 $4\frac{1}{2}$



- 4) $10\frac{3}{4}$ $10\frac{3}{4}$ 11 $9\frac{1}{4}$ $9\frac{2}{4}$ 11 $10\frac{2}{4}$ $11\frac{2}{4}$
 $11\frac{1}{4}$ $11\frac{1}{4}$ $9\frac{3}{4}$ $9\frac{2}{4}$ $11\frac{1}{4}$ $9\frac{3}{4}$ 10 $10\frac{2}{4}$



- 5) $8\frac{1}{4}$ $7\frac{3}{4}$ $6\frac{3}{4}$ $7\frac{2}{4}$ $6\frac{1}{4}$ $8\frac{2}{4}$ $6\frac{3}{4}$ $7\frac{3}{4}$
 $7\frac{2}{4}$ $8\frac{2}{4}$ $7\frac{3}{4}$ $6\frac{2}{4}$ $7\frac{1}{4}$ 6 $6\frac{1}{4}$ $6\frac{3}{4}$





Create and label the line plot using the set of numbers provided.

