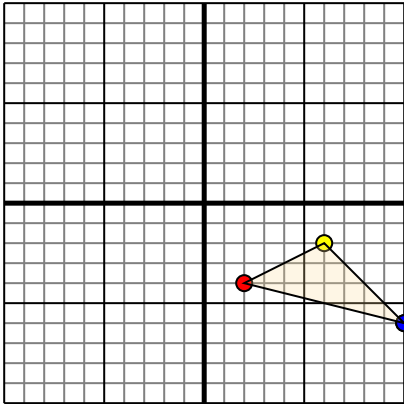




Translate each shape as described.

1)

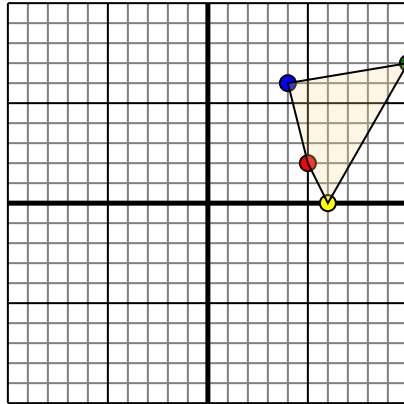


The shape above has the following coordinates:

- A. (2,-4)
- B. (6,-2)
- C. (10,-6)

Move the shape 4 units left and 3 units up.

2)

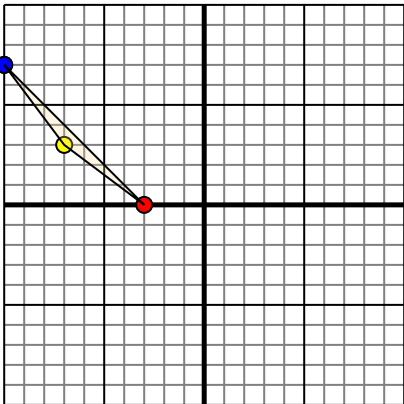


The shape above has the following coordinates:

- A. (5,2)
- B. (6,0)
- C. (10,7)
- D. (4,6)

Move the shape 4 units left and 3 units down.

3)

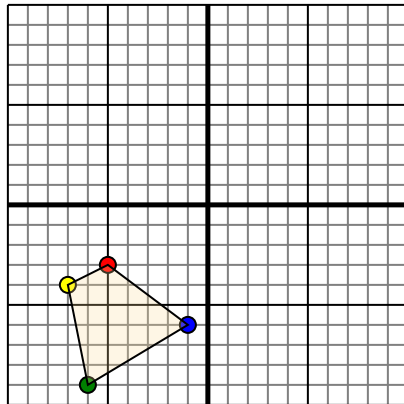


The shape above has the following coordinates:

- A. (-3,0)
- B. (-7,3)
- C. (-10,7)

Move the shape 3 units right and 7 units down.

4)



The shape above has the following coordinates:

- A. (-5,-3)
- B. (-7,-4)
- C. (-6,-9)
- D. (-1,-6)

Move the shape 7 units right and 5 units up.

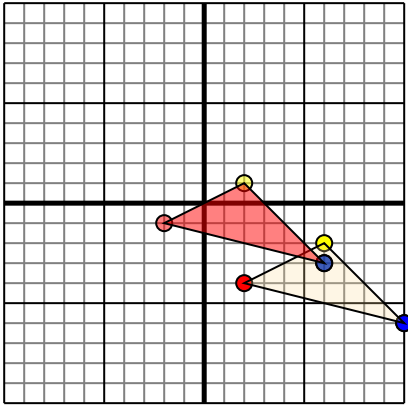
Answers

- 1. _____ [Graph](#)
- 2. _____ [Graph](#)
- 3. _____ [Graph](#)
- 4. _____ [Graph](#)



Translate each shape as described.

1)

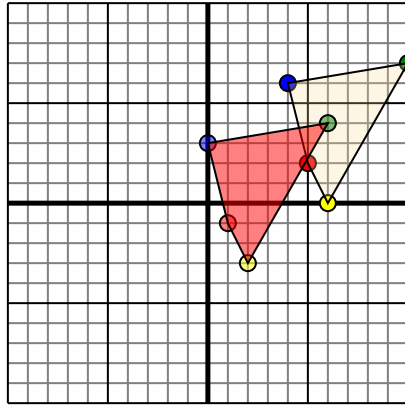


The shape above has the following coordinates:

- A. (2,-4)
- B. (6,-2)
- C. (10,-6)

Move the shape 4 units left and 3 units up.

2)

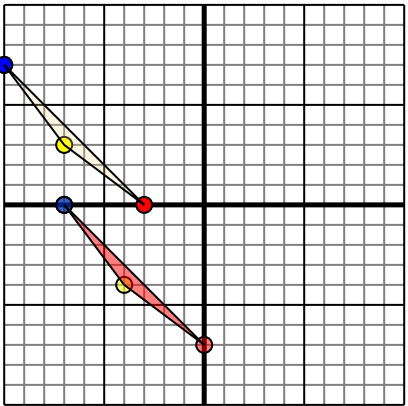


The shape above has the following coordinates:

- A. (5,2)
- B. (6,0)
- C. (10,7)
- D. (4,6)

Move the shape 4 units left and 3 units down.

3)

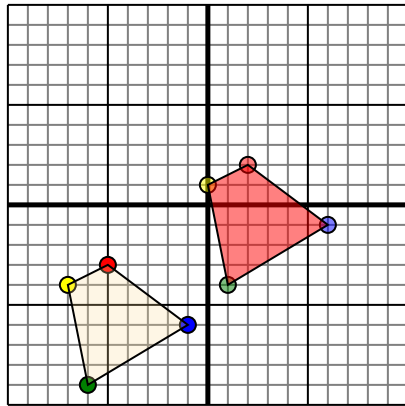


The shape above has the following coordinates:

- A. (-3,0)
- B. (-7,3)
- C. (-10,7)

Move the shape 3 units right and 7 units down.

4)



The shape above has the following coordinates:

- A. (-5,-3)
- B. (-7,-4)
- C. (-6,-9)
- D. (-1,-6)

Move the shape 7 units right and 5 units up.

Answers

1. -2,-1 **2,1** 6,-3 [Graph](#)
2. 1,-1 2,-3 6,4 **0,3** [Graph](#)
3. 0,-7 -4,-4 -7,0 [Graph](#)
4. **2,2** 0,1 1,-4 6,-1 [Graph](#)