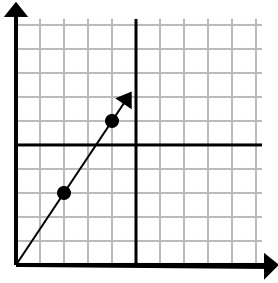




Determine which choice represents a point on the line if it were to continue.

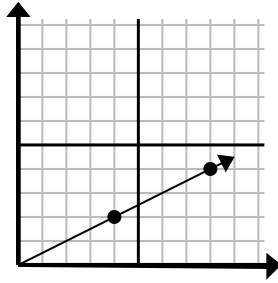
Answers

1)



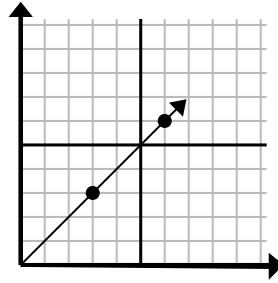
- A. (6, 9)
- B. (8, 6)
- C. (5, 8)
- D. (5, 5)

2)



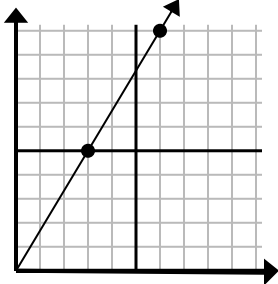
- A. (12, 7)
- B. (12, 6)
- C. (24, 12)
- D. (20, 10)

3)



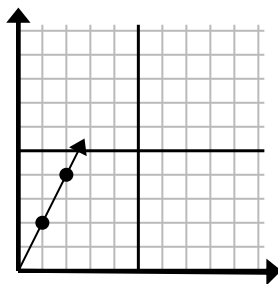
- A. (11, 5)
- B. (9, 9)
- C. (18, 18)
- D. (11, 8)

4)



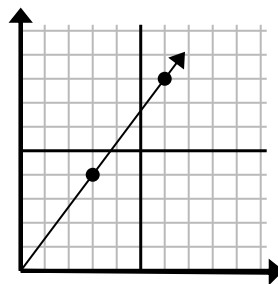
- A. (8, 9)
- B. (12, 20)
- C. (9, 15)
- D. (11, 6)

5)



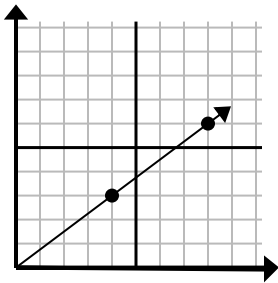
- A. (7, 14)
- B. (7, 7)
- C. (3, 6)
- D. (6, 12)

6)



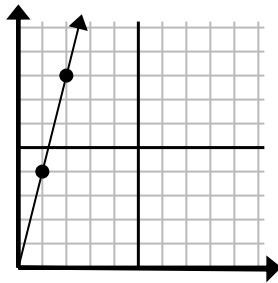
- A. (18, 24)
- B. (21, 28)
- C. (9, 12)
- D. (11, 9)

7)



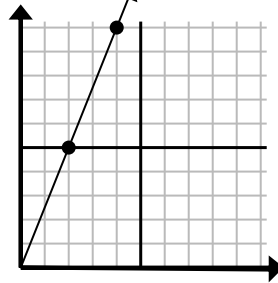
- A. (12, 9)
- B. (28, 21)
- C. (24, 18)
- D. (11, 8)

8)



- A. (3, 12)
- B. (4, 6)
- C. (4, 16)
- D. (7, 28)

9)



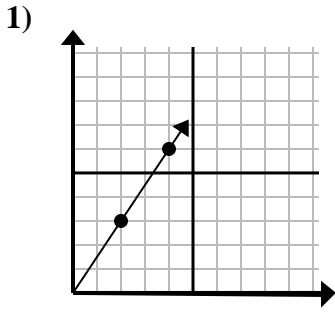
- A. (8, 20)
- B. (14, 35)
- C. (5, 9)
- D. (6, 15)

1. _____
2. _____
3. _____
4. _____
5. _____
6. _____
7. _____
8. _____
9. _____

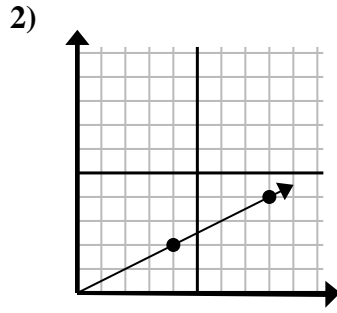


Determine which choice represents a point on the line if it were to continue.

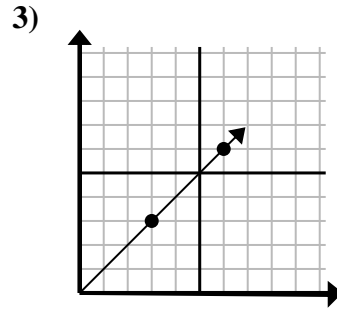
Answers



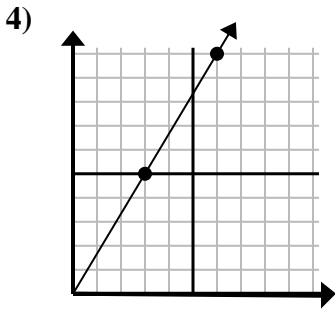
- A. (6, 9)
- B. (8, 6)
- C. (5, 8)
- D. (5, 5)



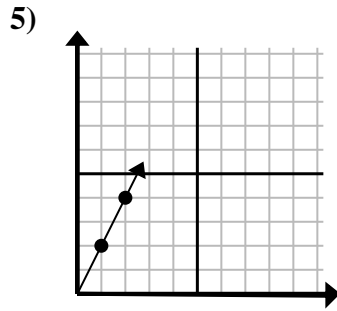
- A. (12, 7)
- B. (12, 6)
- C. (24, 12)
- D. (20, 10)



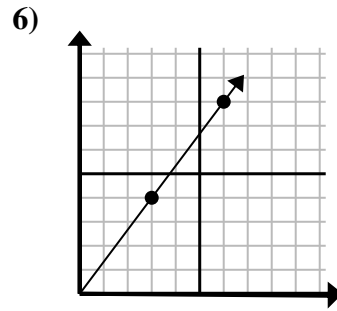
- A. (11, 5)
- B. (9, 9)
- C. (18, 18)
- D. (11, 8)



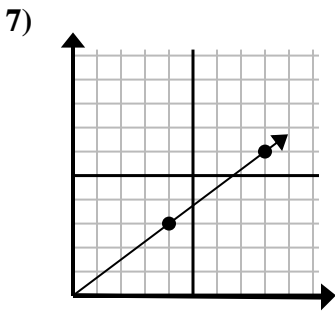
- A. (8, 9)
- B. (12, 20)
- C. (9, 15)
- D. (11, 6)



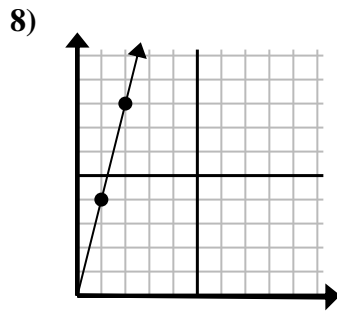
- A. (7, 14)
- B. (7, 7)
- C. (3, 6)
- D. (6, 12)



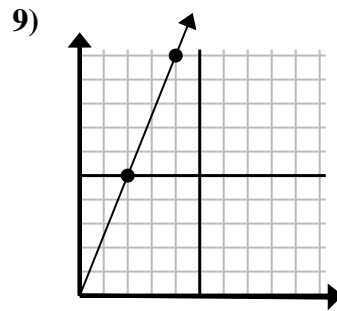
- A. (18, 24)
- B. (21, 28)
- C. (9, 12)
- D. (11, 9)



- A. (12, 9)
- B. (28, 21)
- C. (24, 18)
- D. (11, 8)



- A. (3, 12)
- B. (4, 6)
- C. (4, 16)
- D. (7, 28)



- A. (8, 20)
- B. (14, 35)
- C. (5, 9)
- D. (6, 15)

- 1. **A**
- 2. **B**
- 3. **B**
- 4. **C**
- 5. **C**
- 6. **C**
- 7. **A**
- 8. **A**
- 9. **D**