



Use the visual model to solve each problem.

$$4\frac{3}{5} - 2\frac{4}{5} = ?$$

To solve a fraction subtraction problem one strategy is to shade in the starting amount first

($4\frac{3}{5}$)



Next mark off the wholes (2).



Finally mark off the fraction $\frac{4}{5}$.



Now we can see that $4\frac{3}{5} - 2\frac{4}{5} = 1\frac{4}{5}$

1) $6\frac{2}{3} - 3\frac{1}{3} =$

2) $7\frac{4}{5} - 5\frac{3}{5} =$

3) $3\frac{10}{12} - 1\frac{1}{12} =$

4) $7\frac{1}{5} - 1\frac{2}{5} =$

5) $4\frac{10}{12} - 2\frac{3}{12} =$

6) $3\frac{3}{4} - 1\frac{2}{4} =$

7) $5\frac{4}{5} - 1\frac{4}{5} =$

8) $7\frac{2}{4} - 1\frac{1}{4} =$

9) $5\frac{1}{6} - 2\frac{1}{6} =$

10) $5\frac{3}{10} - 3\frac{6}{10} =$

Answers

1. _____

2. _____

3. _____

4. _____

5. _____

6. _____

7. _____

8. _____

9. _____

10. _____



Use the visual model to solve each problem.

$$4\frac{3}{5} - 2\frac{4}{5} = ?$$

To solve a fraction subtraction problem one strategy is to shade in the starting amount first

$$(4\frac{3}{5})$$



Next mark off the wholes (2).



Finally mark off the fraction 4/5.



$$\text{Now we can see that } 4\frac{3}{5} - 2\frac{4}{5} = 1\frac{4}{5}$$

1) $6\frac{2}{3} - 3\frac{1}{3} =$

2) $7\frac{4}{5} - 5\frac{3}{5} =$

3) $3\frac{10}{12} - 1\frac{1}{12} =$

4) $7\frac{1}{5} - 1\frac{2}{5} =$

5) $4\frac{10}{12} - 2\frac{3}{12} =$

6) $3\frac{3}{4} - 1\frac{2}{4} =$

7) $5\frac{4}{5} - 1\frac{4}{5} =$

8) $7\frac{2}{4} - 1\frac{1}{4} =$

9) $5\frac{1}{6} - 2\frac{1}{6} =$

10) $5\frac{3}{10} - 3\frac{6}{10} =$

Answers

1. $3\frac{1}{3}$

2. $2\frac{1}{5}$

3. $2\frac{9}{12}$

4. $5\frac{4}{5}$

5. $2\frac{7}{12}$

6. $2\frac{1}{4}$

7. $4\frac{0}{5}$

8. $6\frac{1}{4}$

9. $3\frac{0}{6}$

10. $1\frac{7}{10}$



Use the visual model to solve each problem.

$$4 \frac{3}{5} - 2 \frac{4}{5} = ?$$

To solve a fraction subtraction problem one strategy is to shade in the starting amount first

(4 $\frac{3}{5}$)



Next mark off the wholes (2).



Finally mark off the fraction $\frac{4}{5}$.



Now we can see that $4 \frac{3}{5} - 2 \frac{4}{5} = 1 \frac{4}{5}$

1) $7 \frac{2}{3} - 3 \frac{2}{3} =$

2) $7 \frac{4}{6} - 5 \frac{4}{6} =$

3) $5 \frac{6}{8} - 2 \frac{7}{8} =$

4) $4 \frac{2}{5} - 1 \frac{1}{5} =$

5) $7 \frac{6}{10} - 2 \frac{3}{10} =$

6) $7 \frac{2}{4} - 4 \frac{2}{4} =$

7) $6 \frac{2}{4} - 2 \frac{2}{4} =$

8) $6 \frac{5}{12} - 3 \frac{4}{12} =$

9) $6 \frac{1}{6} - 3 \frac{4}{6} =$

10) $6 \frac{5}{10} - 3 \frac{7}{10} =$

Answers

1. _____

2. _____

3. _____

4. _____

5. _____

6. _____

7. _____

8. _____

9. _____

10. _____



Use the visual model to solve each problem.

$$4 \frac{3}{5} - 2 \frac{4}{5} = ?$$

To solve a fraction subtraction problem one strategy is to shade in the starting amount first

(4 $\frac{3}{5}$)



Next mark off the wholes (2).



Finally mark off the fraction $\frac{4}{5}$.



Now we can see that $4 \frac{3}{5} - 2 \frac{4}{5} = 1 \frac{4}{5}$

1) $7 \frac{2}{3} - 3 \frac{2}{3} =$

2) $7 \frac{4}{6} - 5 \frac{4}{6} =$

3) $5 \frac{6}{8} - 2 \frac{7}{8} =$

4) $4 \frac{2}{5} - 1 \frac{1}{5} =$

5) $7 \frac{6}{10} - 2 \frac{3}{10} =$

6) $7 \frac{2}{4} - 4 \frac{2}{4} =$

7) $6 \frac{2}{4} - 2 \frac{2}{4} =$

8) $6 \frac{5}{12} - 3 \frac{4}{12} =$

9) $6 \frac{1}{6} - 3 \frac{4}{6} =$

10) $6 \frac{5}{10} - 3 \frac{7}{10} =$

Answers

1. $4 \frac{0}{3}$

2. $2 \frac{0}{6}$

3. $2 \frac{7}{8}$

4. $3 \frac{1}{5}$

5. $5 \frac{3}{10}$

6. $3 \frac{0}{4}$

7. $4 \frac{0}{4}$

8. $3 \frac{1}{12}$

9. $2 \frac{3}{6}$

10. $2 \frac{8}{10}$



Use the visual model to solve each problem.

$$4 \frac{3}{5} - 2 \frac{4}{5} = ?$$

To solve a fraction subtraction problem one strategy is to shade in the starting amount first

(4 ³/₅)



Next mark off the wholes (2).



Finally mark off the fraction ⁴/₅.



Now we can see that $4 \frac{3}{5} - 2 \frac{4}{5} = 1 \frac{4}{5}$

Answers

1. _____
2. _____
3. _____
4. _____
5. _____
6. _____
7. _____
8. _____
9. _____
10. _____

1) $6 \frac{5}{6} - 1 \frac{5}{6} =$

2) $7 \frac{2}{10} - 3 \frac{7}{10} =$

3) $4 \frac{9}{10} - 1 \frac{1}{10} =$

4) $6 \frac{7}{8} - 4 \frac{1}{8} =$

5) $4 \frac{5}{12} - 1 \frac{8}{12} =$

6) $5 \frac{4}{10} - 3 \frac{2}{10} =$

7) $4 \frac{8}{12} - 1 \frac{8}{12} =$

8) $4 \frac{7}{8} - 2 \frac{4}{8} =$

9) $3 \frac{2}{3} - 1 \frac{2}{3} =$

10) $3 \frac{1}{3} - 1 \frac{2}{3} =$



Use the visual model to solve each problem.

$$4 \frac{3}{5} - 2 \frac{4}{5} = ?$$

To solve a fraction subtraction problem one strategy is to shade in the starting amount first

(4 ³/₅)



Next mark off the wholes (2).



Finally mark off the fraction ⁴/₅.



$$\text{Now we can see that } 4 \frac{3}{5} - 2 \frac{4}{5} = 1 \frac{4}{5}$$

1) $6 \frac{5}{6} - 1 \frac{5}{6} =$

2) $7 \frac{2}{10} - 3 \frac{7}{10} =$

3) $4 \frac{9}{10} - 1 \frac{1}{10} =$

4) $6 \frac{7}{8} - 4 \frac{1}{8} =$

5) $4 \frac{5}{12} - 1 \frac{8}{12} =$

6) $5 \frac{4}{10} - 3 \frac{2}{10} =$

7) $4 \frac{8}{12} - 1 \frac{8}{12} =$

8) $4 \frac{7}{8} - 2 \frac{4}{8} =$

9) $3 \frac{2}{3} - 1 \frac{2}{3} =$

10) $3 \frac{1}{3} - 1 \frac{2}{3} =$

Answers

1. $5 \frac{0}{6}$

2. $3 \frac{5}{10}$

3. $3 \frac{8}{10}$

4. $2 \frac{6}{8}$

5. $2 \frac{9}{12}$

6. $2 \frac{2}{10}$

7. $3 \frac{0}{12}$

8. $2 \frac{3}{8}$

9. $2 \frac{0}{3}$

10. $1 \frac{2}{3}$



Use the visual model to solve each problem.

$4 \frac{3}{5} - 2 \frac{4}{5} = ?$

To solve a fraction subtraction problem one strategy is to shade in the starting amount first

($4 \frac{3}{5}$)



Next mark off the wholes (2).



Finally mark off the fraction $\frac{4}{5}$.



Now we can see that $4 \frac{3}{5} - 2 \frac{4}{5} = 1 \frac{4}{5}$

Answers

1. _____
2. _____
3. _____
4. _____
5. _____
6. _____
7. _____
8. _____
9. _____
10. _____

1) $6 \frac{1}{6} - 3 \frac{5}{6} =$

2) $4 \frac{1}{4} - 2 \frac{2}{4} =$

3) $6 \frac{1}{5} - 2 \frac{2}{5} =$

4) $5 \frac{2}{4} - 1 \frac{3}{4} =$

5) $7 \frac{7}{10} - 5 \frac{3}{10} =$

6) $7 \frac{11}{12} - 3 \frac{5}{12} =$

7) $6 \frac{1}{8} - 3 \frac{3}{8} =$

8) $6 \frac{3}{4} - 3 \frac{3}{4} =$

9) $6 \frac{2}{4} - 1 \frac{1}{4} =$

10) $6 \frac{2}{12} - 4 \frac{5}{12} =$



Use the visual model to solve each problem.

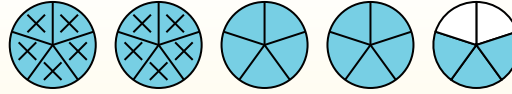
$$4 \frac{3}{5} - 2 \frac{4}{5} = ?$$

To solve a fraction subtraction problem one strategy is to shade in the starting amount first

(4 ³/₅)



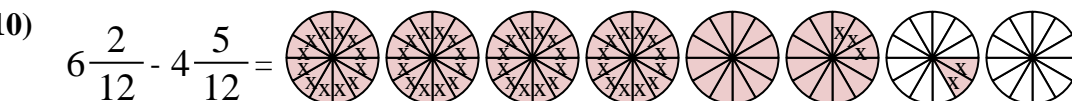
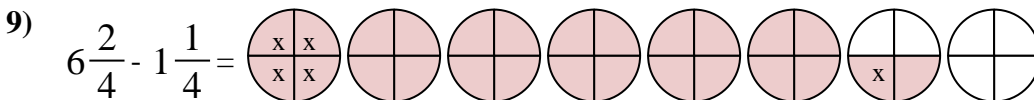
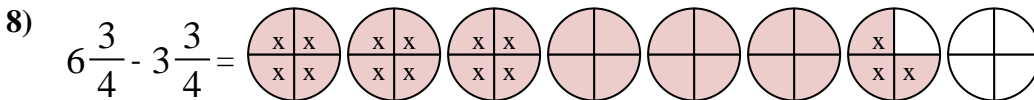
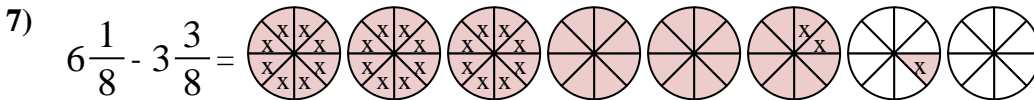
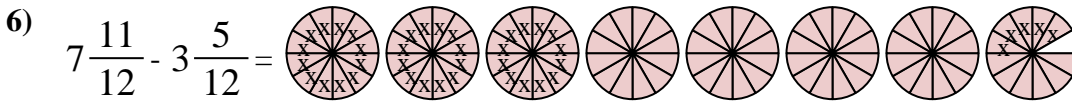
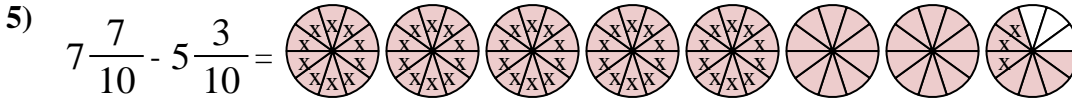
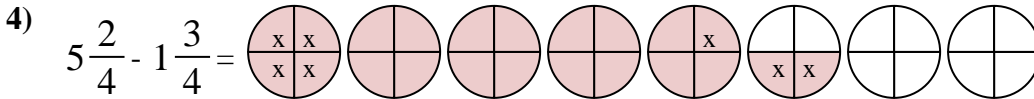
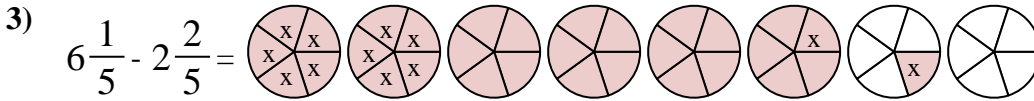
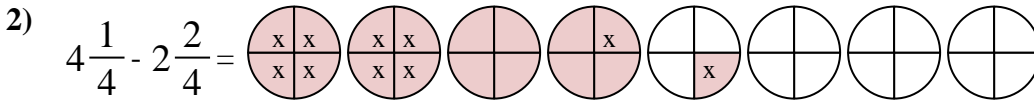
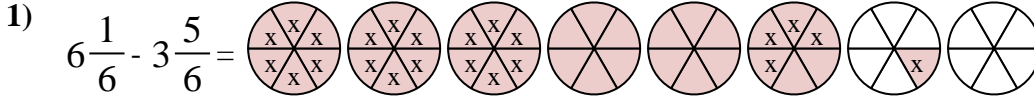
Next mark off the wholes (2).



Finally mark off the fraction ⁴/₅.



Now we can see that $4 \frac{3}{5} - 2 \frac{4}{5} = 1 \frac{4}{5}$



Answers

1. 2²/₆

2. 1³/₄

3. 3⁴/₅

4. 3³/₄

5. 2⁴/₁₀

6. 4⁶/₁₂

7. 2⁶/₈

8. 3⁰/₄

9. 5¹/₄

10. 1⁹/₁₂



Use the visual model to solve each problem.

$$4 \frac{3}{5} - 2 \frac{4}{5} = ?$$

To solve a fraction subtraction problem one strategy is to shade in the starting amount first

(4 $\frac{3}{5}$)



Next mark off the wholes (2).



Finally mark off the fraction $\frac{4}{5}$.



Now we can see that $4 \frac{3}{5} - 2 \frac{4}{5} = 1 \frac{4}{5}$

Answers

1. _____
2. _____
3. _____
4. _____
5. _____
6. _____
7. _____
8. _____
9. _____
10. _____

1) $5 \frac{2}{3} - 3 \frac{2}{3} =$

2) $3 \frac{1}{4} - 1 \frac{1}{4} =$

3) $7 \frac{2}{5} - 2 \frac{4}{5} =$

4) $4 \frac{4}{5} - 2 \frac{3}{5} =$

5) $3 \frac{5}{10} - 1 \frac{6}{10} =$

6) $6 \frac{8}{10} - 4 \frac{3}{10} =$

7) $4 \frac{3}{4} - 1 \frac{1}{4} =$

8) $5 \frac{1}{3} - 2 \frac{1}{3} =$

9) $5 \frac{2}{4} - 3 \frac{3}{4} =$

10) $4 \frac{1}{3} - 1 \frac{1}{3} =$



Use the visual model to solve each problem.

$$4 \frac{3}{5} - 2 \frac{4}{5} = ?$$

To solve a fraction subtraction problem one strategy is to shade in the starting amount first

(4 ³/₅)



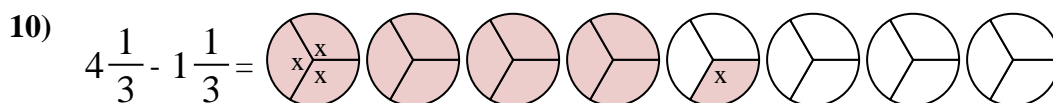
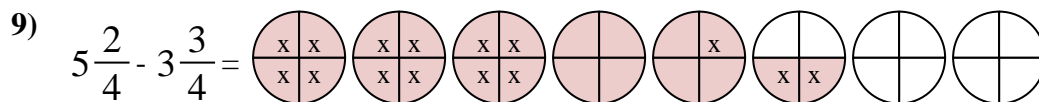
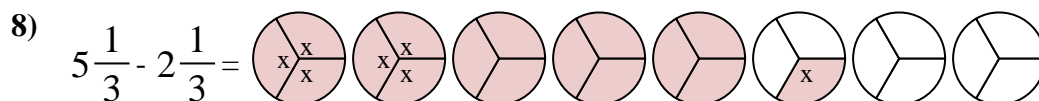
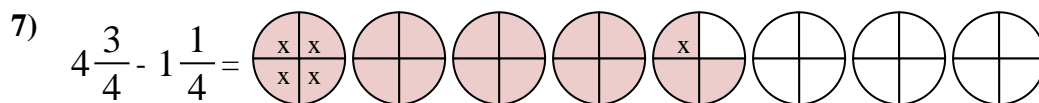
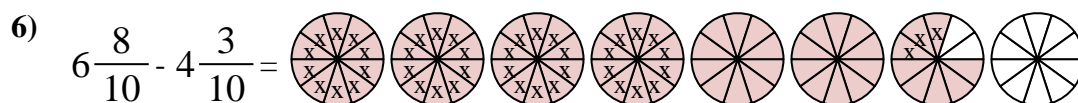
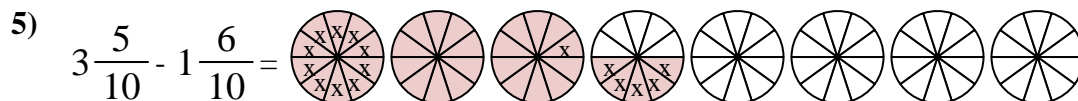
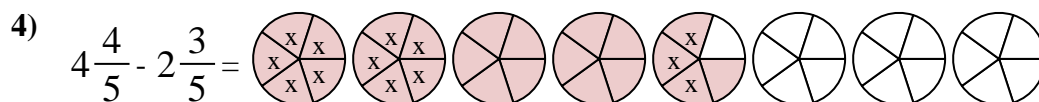
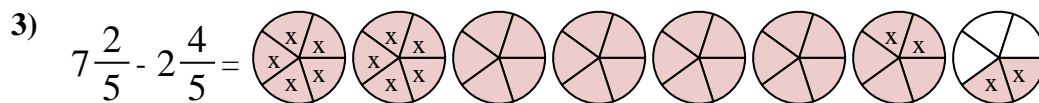
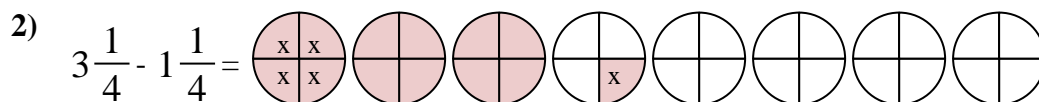
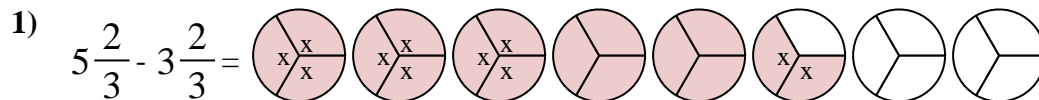
Next mark off the wholes (2).



Finally mark off the fraction ⁴/₅.



$$\text{Now we can see that } 4 \frac{3}{5} - 2 \frac{4}{5} = 1 \frac{4}{5}$$



Answers

1. $2 \frac{0}{3}$

2. $2 \frac{0}{4}$

3. $4 \frac{3}{5}$

4. $2 \frac{1}{5}$

5. $1 \frac{9}{10}$

6. $2 \frac{5}{10}$

7. $3 \frac{2}{4}$

8. $3 \frac{0}{3}$

9. $1 \frac{3}{4}$

10. $3 \frac{0}{3}$



Use the visual model to solve each problem.

$$4 \frac{3}{5} - 2 \frac{4}{5} = ?$$

To solve a fraction subtraction problem one strategy is to shade in the starting amount first

(4 $\frac{3}{5}$)



Next mark off the wholes (2).



Finally mark off the fraction $\frac{4}{5}$.



Now we can see that $4 \frac{3}{5} - 2 \frac{4}{5} = 1 \frac{4}{5}$

1) $7 \frac{5}{6} - 2 \frac{1}{6} =$

2) $6 \frac{2}{4} - 1 \frac{2}{4} =$

3) $4 \frac{4}{5} - 2 \frac{3}{5} =$

4) $4 \frac{5}{10} - 1 \frac{7}{10} =$

5) $4 \frac{3}{12} - 2 \frac{6}{12} =$

6) $4 \frac{1}{3} - 1 \frac{1}{3} =$

7) $6 \frac{1}{4} - 4 \frac{1}{4} =$

8) $3 \frac{2}{5} - 1 \frac{4}{5} =$

9) $3 \frac{8}{10} - 1 \frac{1}{10} =$

10) $3 \frac{3}{6} - 1 \frac{3}{6} =$

Answers

1. _____

2. _____

3. _____

4. _____

5. _____

6. _____

7. _____

8. _____

9. _____

10. _____



Use the visual model to solve each problem.

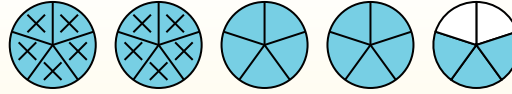
$$4 \frac{3}{5} - 2 \frac{4}{5} = ?$$

To solve a fraction subtraction problem one strategy is to shade in the starting amount first

(4 ³/₅)



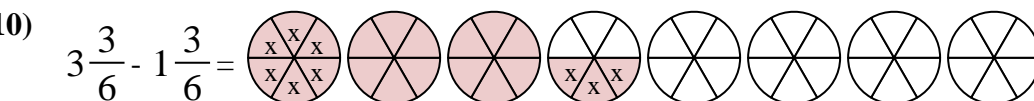
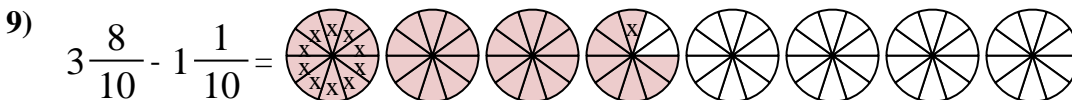
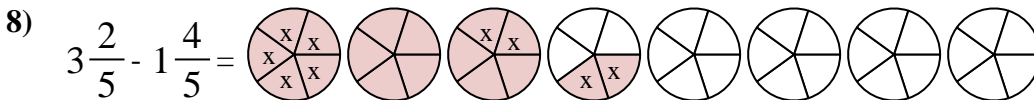
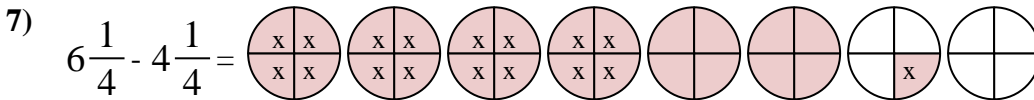
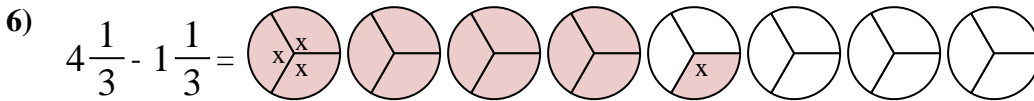
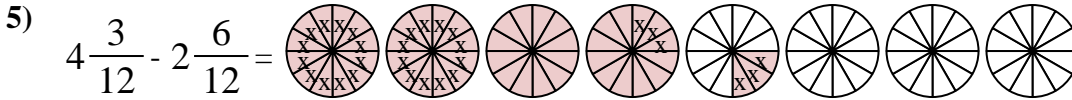
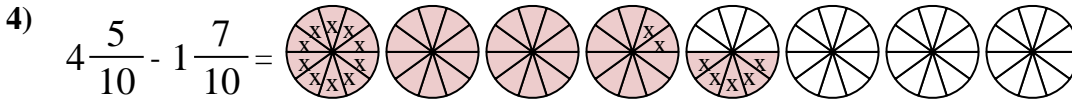
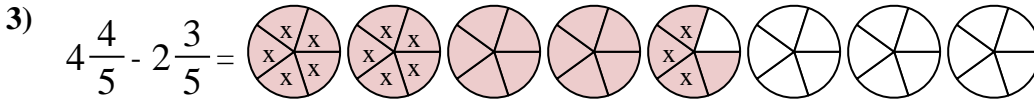
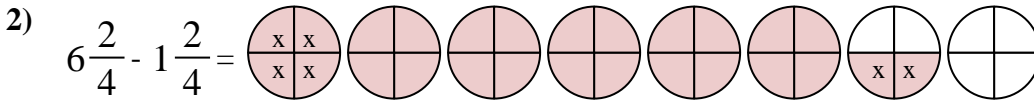
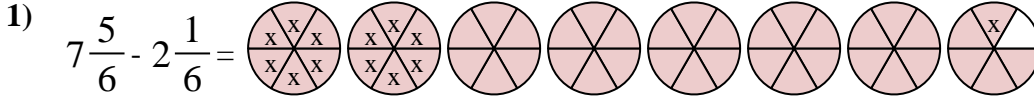
Next mark off the wholes (2).



Finally mark off the fraction ⁴/₅.



Now we can see that $4 \frac{3}{5} - 2 \frac{4}{5} = 1 \frac{4}{5}$



Answers

1. 5⁴/₆

2. 5⁰/₄

3. 2¹/₅

4. 2⁸/₁₀

5. 1⁹/₁₂

6. 3⁰/₃

7. 2⁰/₄

8. 1³/₅

9. 2⁷/₁₀

10. 2⁰/₆



Use the visual model to solve each problem.

$4 \frac{3}{5} - 2 \frac{4}{5} = ?$

To solve a fraction subtraction problem one strategy is to shade in the starting amount first

($4 \frac{3}{5}$)



Next mark off the wholes (2).



Finally mark off the fraction $\frac{4}{5}$.



Now we can see that $4 \frac{3}{5} - 2 \frac{4}{5} = 1 \frac{4}{5}$

Answers

1. _____
2. _____
3. _____
4. _____
5. _____
6. _____
7. _____
8. _____
9. _____
10. _____

1) $5 \frac{1}{5} - 2 \frac{4}{5} =$

2) $5 \frac{1}{5} - 3 \frac{3}{5} =$

3) $3 \frac{1}{4} - 1 \frac{1}{4} =$

4) $6 \frac{9}{12} - 3 \frac{2}{12} =$

5) $4 \frac{7}{10} - 1 \frac{1}{10} =$

6) $6 \frac{1}{4} - 1 \frac{3}{4} =$

7) $5 \frac{7}{8} - 1 \frac{2}{8} =$

8) $4 \frac{3}{5} - 1 \frac{2}{5} =$

9) $4 \frac{11}{12} - 1 \frac{10}{12} =$

10) $3 \frac{7}{10} - 1 \frac{4}{10} =$



Use the visual model to solve each problem.

$$4\frac{3}{5} - 2\frac{4}{5} = ?$$

To solve a fraction subtraction problem one strategy is to shade in the starting amount first

$$(4\frac{3}{5})$$



Next mark off the wholes (2).



Finally mark off the fraction 4/5.



$$\text{Now we can see that } 4\frac{3}{5} - 2\frac{4}{5} = 1\frac{4}{5}$$

1) $5\frac{1}{5} - 2\frac{4}{5} =$

2) $5\frac{1}{5} - 3\frac{3}{5} =$

3) $3\frac{1}{4} - 1\frac{1}{4} =$

4) $6\frac{9}{12} - 3\frac{2}{12} =$

5) $4\frac{7}{10} - 1\frac{1}{10} =$

6) $6\frac{1}{4} - 1\frac{3}{4} =$

7) $5\frac{7}{8} - 1\frac{2}{8} =$

8) $4\frac{3}{5} - 1\frac{2}{5} =$

9) $4\frac{11}{12} - 1\frac{10}{12} =$

10) $3\frac{7}{10} - 1\frac{4}{10} =$

Answers

1. $2\frac{2}{5}$

2. $1\frac{3}{5}$

3. $2\frac{0}{4}$

4. $3\frac{7}{12}$

5. $3\frac{6}{10}$

6. $4\frac{2}{4}$

7. $4\frac{5}{8}$

8. $3\frac{1}{5}$

9. $3\frac{1}{12}$

10. $2\frac{3}{10}$



Use the visual model to solve each problem.

$$4 \frac{3}{5} - 2 \frac{4}{5} = ?$$

To solve a fraction subtraction problem one strategy is to shade in the starting amount first

(4 $\frac{3}{5}$)



Next mark off the wholes (2).



Finally mark off the fraction $\frac{4}{5}$.



Now we can see that $4 \frac{3}{5} - 2 \frac{4}{5} = 1 \frac{4}{5}$

1) $6 \frac{8}{10} - 4 \frac{1}{10} =$

2) $6 \frac{6}{8} - 1 \frac{4}{8} =$

3) $4 \frac{2}{8} - 2 \frac{4}{8} =$

4) $3 \frac{9}{12} - 1 \frac{5}{12} =$

5) $4 \frac{5}{8} - 1 \frac{5}{8} =$

6) $4 \frac{6}{8} - 2 \frac{6}{8} =$

7) $4 \frac{4}{5} - 2 \frac{4}{5} =$

8) $3 \frac{1}{8} - 1 \frac{3}{8} =$

9) $3 \frac{2}{6} - 1 \frac{5}{6} =$

10) $3 \frac{2}{8} - 1 \frac{2}{8} =$

Answers

1. _____
2. _____
3. _____
4. _____
5. _____
6. _____
7. _____
8. _____
9. _____
10. _____



Use the visual model to solve each problem.

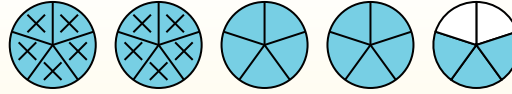
$$4 \frac{3}{5} - 2 \frac{4}{5} = ?$$

To solve a fraction subtraction problem one strategy is to shade in the starting amount first

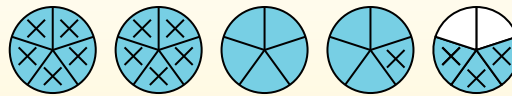
$$(4 \frac{3}{5})$$



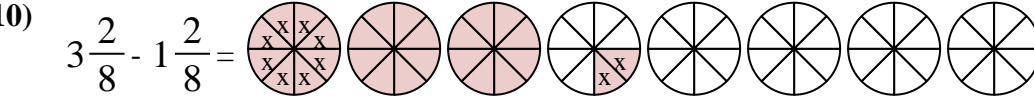
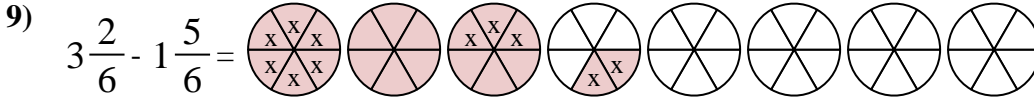
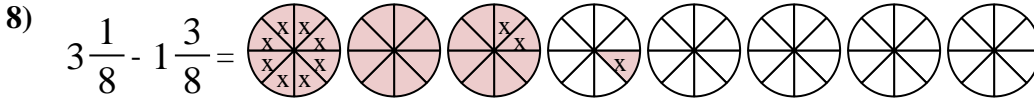
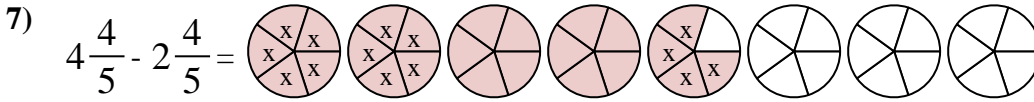
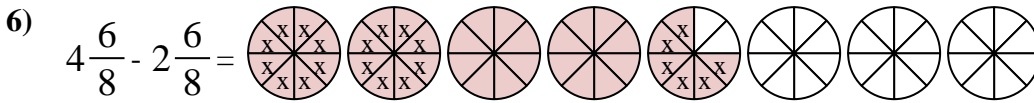
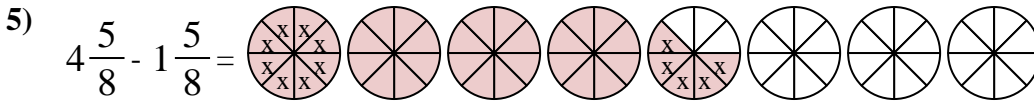
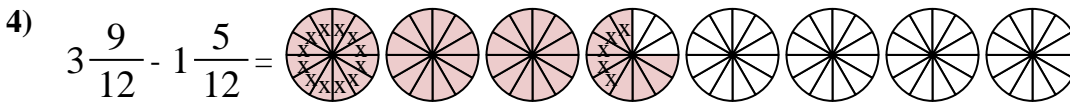
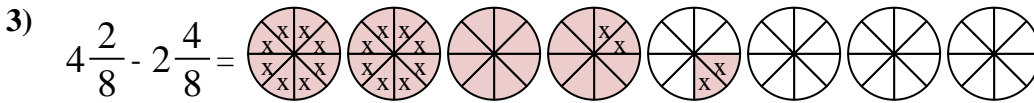
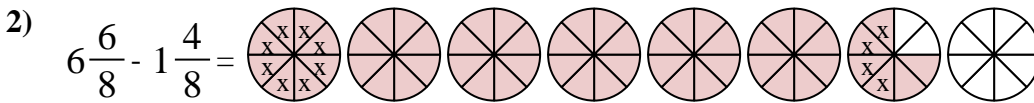
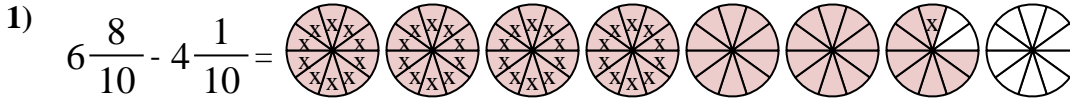
Next mark off the wholes (2).



Finally mark off the fraction 4/5.



$$\text{Now we can see that } 4 \frac{3}{5} - 2 \frac{4}{5} = 1 \frac{4}{5}$$



Answers

1. $2 \frac{7}{10}$

2. $5 \frac{2}{8}$

3. $1 \frac{6}{8}$

4. $2 \frac{4}{12}$

5. $3 \frac{0}{8}$

6. $2 \frac{0}{8}$

7. $2 \frac{0}{5}$

8. $1 \frac{6}{8}$

9. $1 \frac{3}{6}$

10. $2 \frac{0}{8}$



Use the visual model to solve each problem.

$$4 \frac{3}{5} - 2 \frac{4}{5} = ?$$

To solve a fraction subtraction problem one strategy is to shade in the starting amount first

($4 \frac{3}{5}$)



Next mark off the wholes (2).



Finally mark off the fraction $\frac{4}{5}$.



Now we can see that $4 \frac{3}{5} - 2 \frac{4}{5} = 1 \frac{4}{5}$

Answers

1. _____
2. _____
3. _____
4. _____
5. _____
6. _____
7. _____
8. _____
9. _____
10. _____

1) $6 \frac{7}{8} - 2 \frac{3}{8} =$

2) $5 \frac{2}{3} - 3 \frac{1}{3} =$

3) $4 \frac{3}{6} - 2 \frac{4}{6} =$

4) $3 \frac{1}{5} - 1 \frac{4}{5} =$

5) $3 \frac{4}{5} - 1 \frac{3}{5} =$

6) $7 \frac{1}{3} - 4 \frac{1}{3} =$

7) $6 \frac{3}{4} - 4 \frac{2}{4} =$

8) $6 \frac{3}{4} - 3 \frac{1}{4} =$

9) $3 \frac{10}{12} - 1 \frac{10}{12} =$

10) $7 \frac{1}{10} - 2 \frac{1}{10} =$



Use the visual model to solve each problem.

$$4 \frac{3}{5} - 2 \frac{4}{5} = ?$$

To solve a fraction subtraction problem one strategy is to shade in the starting amount first

$$(4 \frac{3}{5})$$



Next mark off the wholes (2).



Finally mark off the fraction 4/5.



$$\text{Now we can see that } 4 \frac{3}{5} - 2 \frac{4}{5} = 1 \frac{4}{5}$$

1) $6 \frac{7}{8} - 2 \frac{3}{8} =$

2) $5 \frac{2}{3} - 3 \frac{1}{3} =$

3) $4 \frac{3}{6} - 2 \frac{4}{6} =$

4) $3 \frac{1}{5} - 1 \frac{4}{5} =$

5) $3 \frac{4}{5} - 1 \frac{3}{5} =$

6) $7 \frac{1}{3} - 4 \frac{1}{3} =$

7) $6 \frac{3}{4} - 4 \frac{2}{4} =$

8) $6 \frac{3}{4} - 3 \frac{1}{4} =$

9) $3 \frac{10}{12} - 1 \frac{10}{12} =$

10) $7 \frac{1}{10} - 2 \frac{1}{10} =$

Answers

1. $4 \frac{4}{8}$

2. $2 \frac{1}{3}$

3. $1 \frac{5}{6}$

4. $1 \frac{2}{5}$

5. $2 \frac{1}{5}$

6. $3 \frac{0}{3}$

7. $2 \frac{1}{4}$

8. $3 \frac{2}{4}$

9. $2 \frac{0}{12}$

10. $5 \frac{0}{10}$



Use the visual model to solve each problem.

$4 \frac{3}{5} - 2 \frac{4}{5} = ?$

To solve a fraction subtraction problem one strategy is to shade in the starting amount first

($4 \frac{3}{5}$)



Next mark off the wholes (2).



Finally mark off the fraction $\frac{4}{5}$.



Now we can see that $4 \frac{3}{5} - 2 \frac{4}{5} = 1 \frac{4}{5}$

Answers

1. _____
2. _____
3. _____
4. _____
5. _____
6. _____
7. _____
8. _____
9. _____
10. _____

1) $4 \frac{2}{8} - 2 \frac{7}{8} =$

2) $4 \frac{2}{4} - 1 \frac{2}{4} =$

3) $4 \frac{1}{5} - 1 \frac{2}{5} =$

4) $4 \frac{2}{6} - 2 \frac{5}{6} =$

5) $7 \frac{1}{12} - 1 \frac{10}{12} =$

6) $6 \frac{1}{4} - 3 \frac{1}{4} =$

7) $7 \frac{1}{3} - 4 \frac{2}{3} =$

8) $5 \frac{6}{10} - 2 \frac{4}{10} =$

9) $7 \frac{2}{3} - 2 \frac{2}{3} =$

10) $7 \frac{2}{4} - 1 \frac{1}{4} =$



Use the visual model to solve each problem.

$$4\frac{3}{5} - 2\frac{4}{5} = ?$$

To solve a fraction subtraction problem one strategy is to shade in the starting amount first

$$(4\frac{3}{5})$$



Next mark off the wholes (2).



Finally mark off the fraction 4/5.



$$\text{Now we can see that } 4\frac{3}{5} - 2\frac{4}{5} = 1\frac{4}{5}$$

1) $4\frac{2}{8} - 2\frac{7}{8} =$

2) $4\frac{2}{4} - 1\frac{2}{4} =$

3) $4\frac{1}{5} - 1\frac{2}{5} =$

4) $4\frac{2}{6} - 2\frac{5}{6} =$

5) $7\frac{1}{12} - 1\frac{10}{12} =$

6) $6\frac{1}{4} - 3\frac{1}{4} =$

7) $7\frac{1}{3} - 4\frac{2}{3} =$

8) $5\frac{6}{10} - 2\frac{4}{10} =$

9) $7\frac{2}{3} - 2\frac{2}{3} =$

10) $7\frac{2}{4} - 1\frac{1}{4} =$

Answers

1. $1\frac{3}{8}$

2. $3\frac{0}{4}$

3. $2\frac{4}{5}$

4. $1\frac{3}{6}$

5. $5\frac{3}{12}$

6. $3\frac{0}{4}$

7. $2\frac{2}{3}$

8. $3\frac{2}{10}$

9. $5\frac{0}{3}$

10. $6\frac{1}{4}$