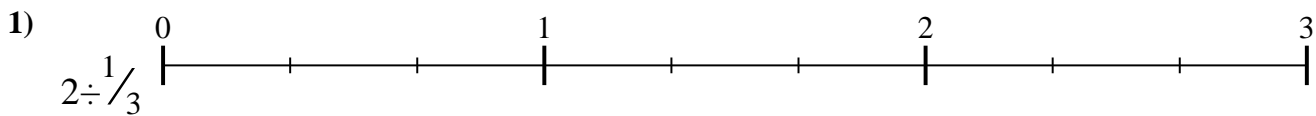


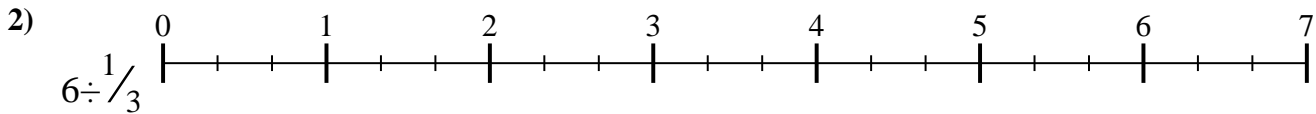


Use the numberline to solve each problem. The first is marked for you.

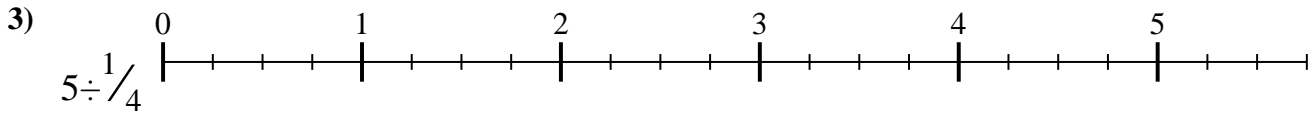
Answers



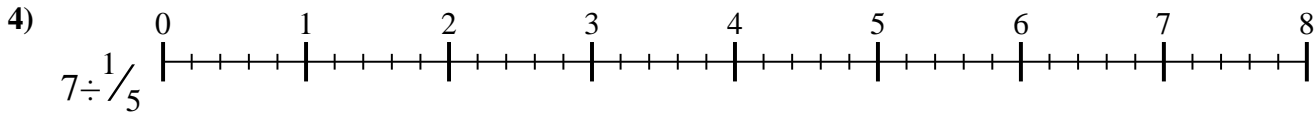
1. _____



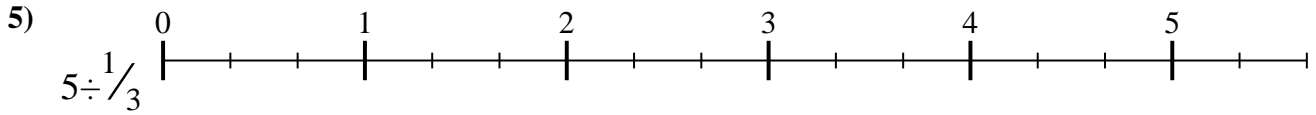
2. _____



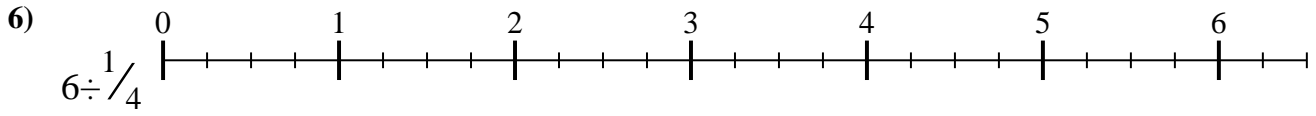
3. _____



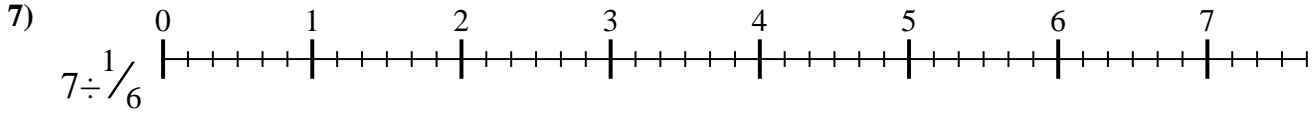
4. _____



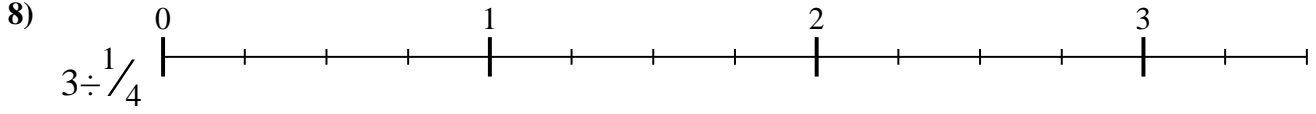
5. _____



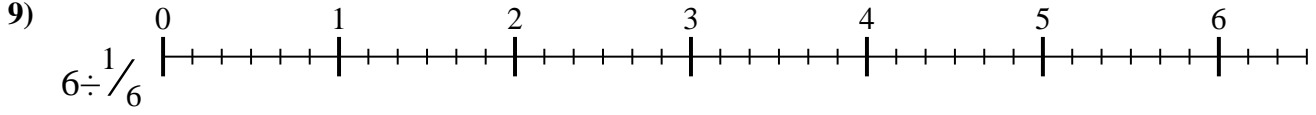
6. _____



7. _____



8. _____



9. _____



Use the numberline to solve each problem. The first is marked for you.

1) $2 \div \frac{1}{3}$

2) $6 \div \frac{1}{3}$

3) $5 \div \frac{1}{4}$

4) $7 \div \frac{1}{5}$

5) $5 \div \frac{1}{3}$

6) $6 \div \frac{1}{4}$

7) $7 \div \frac{1}{6}$

8) $3 \div \frac{1}{4}$

9) $6 \div \frac{1}{6}$

Answers

1. $\frac{6}{1}$
2. $\frac{18}{1}$
3. $\frac{20}{1}$
4. $\frac{35}{1}$
5. $\frac{15}{1}$
6. $\frac{24}{1}$
7. $\frac{42}{1}$
8. $\frac{12}{1}$
9. $\frac{36}{1}$



Use the numberline to solve each problem. The first is marked for you.

Answers

$6/1$

$36/1$

$42/1$

$12/1$

$20/1$

$35/1$

$18/1$

$15/1$

$24/1$

- 1. _____
- 2. _____
- 3. _____
- 4. _____
- 5. _____
- 6. _____
- 7. _____
- 8. _____
- 9. _____

