





Use the numberline to solve each problem. The first is marked for you.

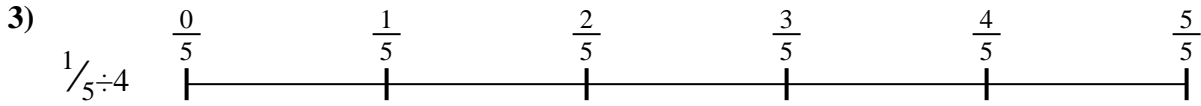
**Answers**



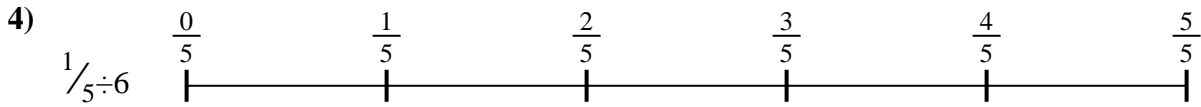
1. \_\_\_\_\_




2. \_\_\_\_\_



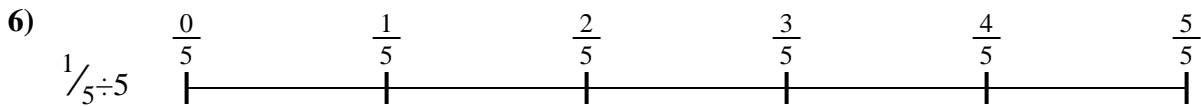
3. \_\_\_\_\_




4. \_\_\_\_\_



5. \_\_\_\_\_



6. \_\_\_\_\_



7. \_\_\_\_\_



8. \_\_\_\_\_

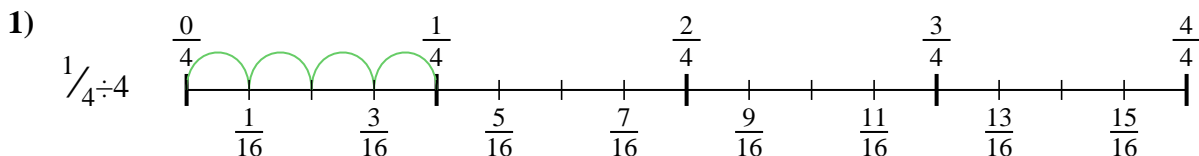


9. \_\_\_\_\_

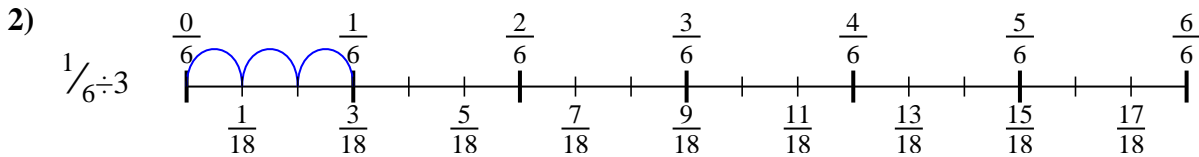


Use the numberline to solve each problem. The first is marked for you.

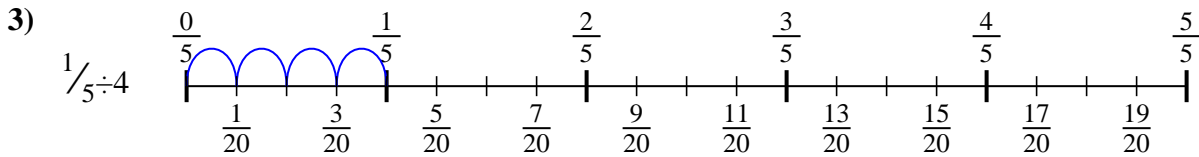
**Answers**



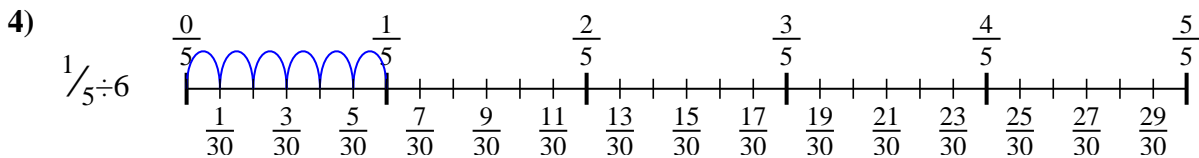
1.  $\frac{1}{16}$



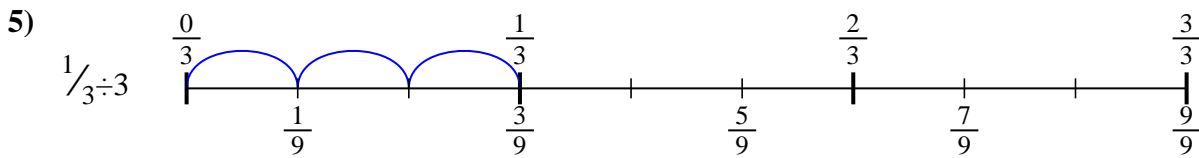
2.  $\frac{1}{18}$



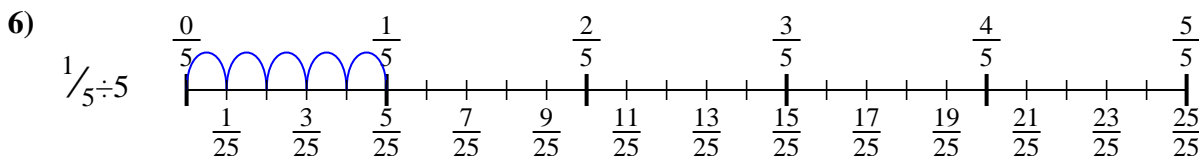
3.  $\frac{1}{20}$



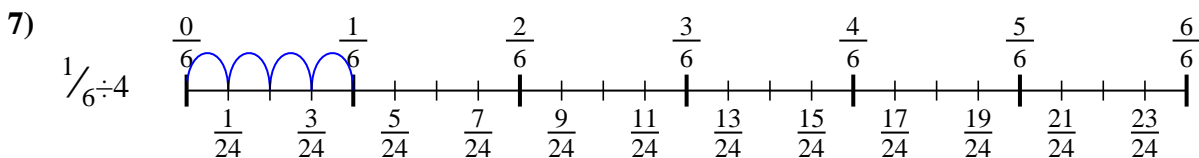
4.  $\frac{1}{30}$



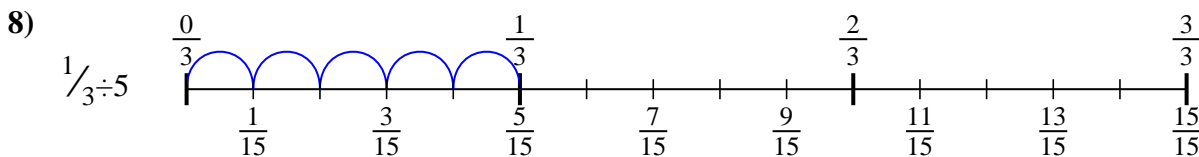
5.  $\frac{1}{9}$



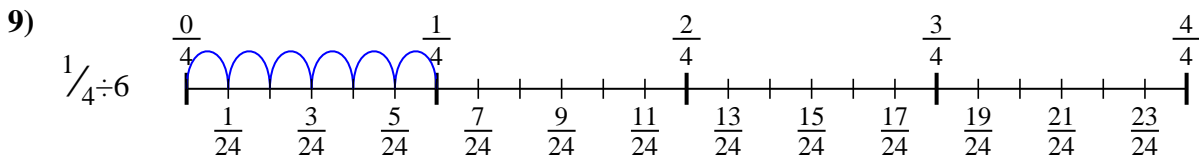
6.  $\frac{1}{25}$



7.  $\frac{1}{24}$



8.  $\frac{1}{15}$



9.  $\frac{1}{24}$



Use the numberline to solve each problem. The first is marked for you.

**Answers**

$\frac{1}{30}$

$\frac{1}{9}$

$\frac{1}{20}$

$\frac{1}{24}$

$\frac{1}{25}$

$\frac{1}{24}$

$\frac{1}{18}$

$\frac{1}{16}$

$\frac{1}{15}$

1. \_\_\_\_\_

2. \_\_\_\_\_

3. \_\_\_\_\_

4. \_\_\_\_\_

5. \_\_\_\_\_

6. \_\_\_\_\_

7. \_\_\_\_\_

8. \_\_\_\_\_

9. \_\_\_\_\_

