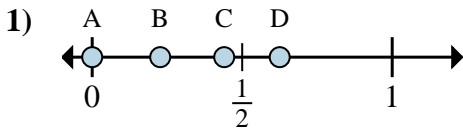


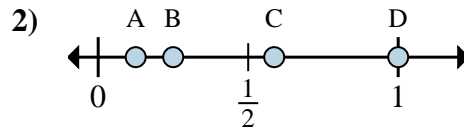


Determine which letter best shows the location of the fraction.

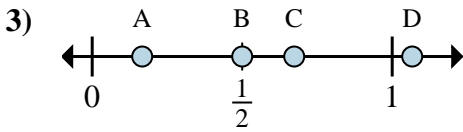
Answers



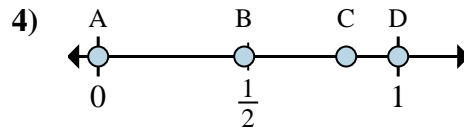
- a. Which letter best shows $\frac{0}{8}$?
 b. Which letter best shows $\frac{5}{8}$?



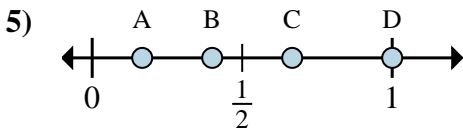
- a. Which letter best shows $\frac{1}{8}$?
 b. Which letter best shows $\frac{2}{8}$?



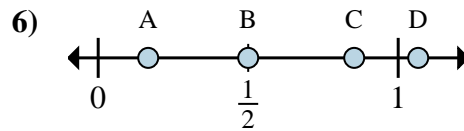
- a. Which letter best shows $\frac{1}{6}$?
 b. Which letter best shows $\frac{3}{6}$?



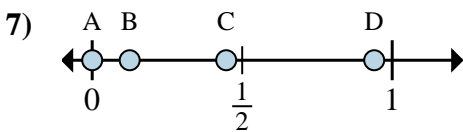
- a. Which letter best shows $\frac{0}{2}$?
 b. Which letter best shows $\frac{2}{2}$?



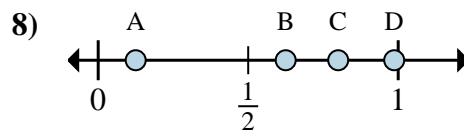
- a. Which letter best shows $\frac{3}{3}$?
 b. Which letter best shows $\frac{2}{3}$?



- a. Which letter best shows $\frac{3}{6}$?
 b. Which letter best shows $\frac{1}{6}$?



- a. Which letter best shows $\frac{0}{8}$?
 b. Which letter best shows $\frac{1}{8}$?



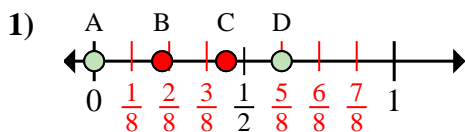
- a. Which letter best shows $\frac{5}{8}$?
 b. Which letter best shows $\frac{1}{8}$?

1. _____
 2. _____
 3. _____
 4. _____
 5. _____
 6. _____
 7. _____
 8. _____

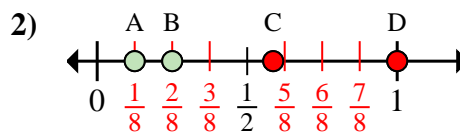


Determine which letter best shows the location of the fraction.

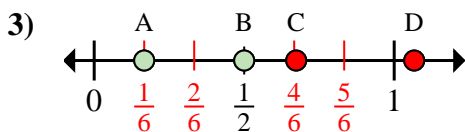
Answers



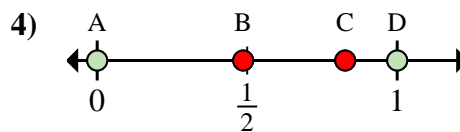
- a. Which letter best shows $\frac{0}{8}$?
- b. Which letter best shows $\frac{5}{8}$?



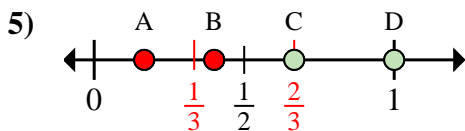
- a. Which letter best shows $\frac{1}{8}$?
- b. Which letter best shows $\frac{2}{8}$?



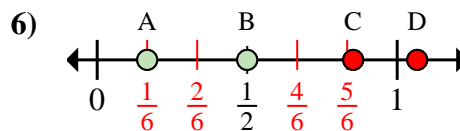
- a. Which letter best shows $\frac{1}{6}$?
- b. Which letter best shows $\frac{3}{6}$?



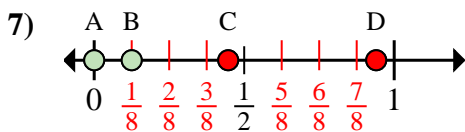
- a. Which letter best shows $\frac{0}{2}$?
- b. Which letter best shows $\frac{2}{2}$?



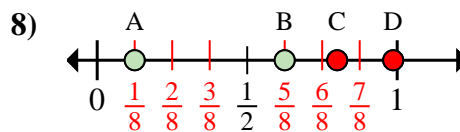
- a. Which letter best shows $\frac{3}{3}$?
- b. Which letter best shows $\frac{2}{3}$?



- a. Which letter best shows $\frac{3}{6}$?
- b. Which letter best shows $\frac{1}{6}$?



- a. Which letter best shows $\frac{0}{8}$?
- b. Which letter best shows $\frac{1}{8}$?



- a. Which letter best shows $\frac{5}{8}$?
- b. Which letter best shows $\frac{1}{8}$?

- 1. A D
- 2. A B
- 3. A B
- 4. A D
- 5. D C
- 6. B A
- 7. A B
- 8. B A