



Determine which letter best describes the shaded portion.

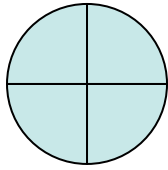
**Answers**

1)



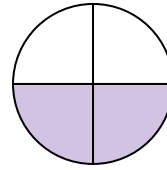
- A. two-fourths
- B. one-half
- C. one-fourth

2)



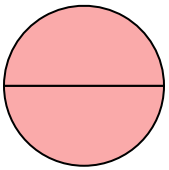
- A. two-halves
- B. four-fourths
- C. one-half

3)



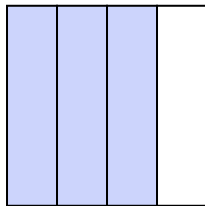
- A. two-fourths
- B. three-fourths
- C. one-quarter

4)




- A. four-quarters
- B. two-quarters
- C. two-halves

5)




- A. three-fourths
- B. two-fourths
- C. four-fourths

6)



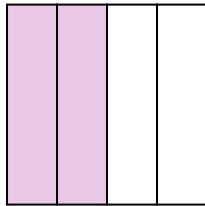
- A. one-fourth
- B. two-halves
- C. one-half

7)



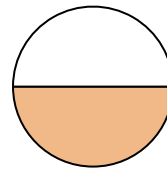
- A. two-fourths
- B. four-quarters
- C. three-quarters

8)



- A. one-half
- B. two-fourths
- C. three-quarters

9)

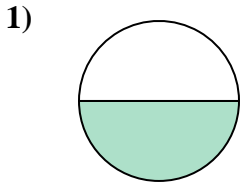


- A. two-halves
- B. two-fourths
- C. one-half

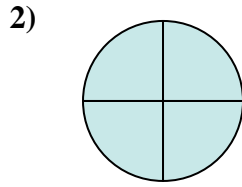
- 1. \_\_\_\_\_
- 2. \_\_\_\_\_
- 3. \_\_\_\_\_
- 4. \_\_\_\_\_
- 5. \_\_\_\_\_
- 6. \_\_\_\_\_
- 7. \_\_\_\_\_
- 8. \_\_\_\_\_
- 9. \_\_\_\_\_



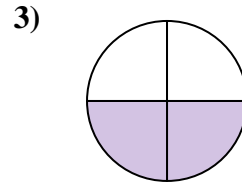
Determine which letter best describes the shaded portion.



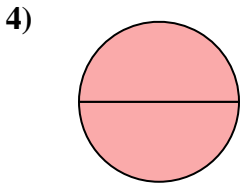
- A. two-fourths
- B. one-half
- C. one-fourth



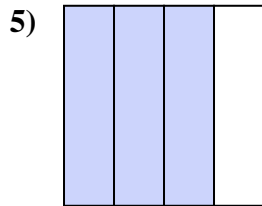
- A. two-halves
- B. four-fourths
- C. one-half



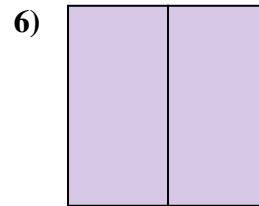
- A. two-fourths
- B. three-fourths
- C. one-quarter



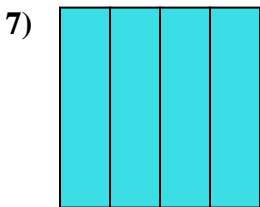
- A. four-quarters
- B. two-quarters
- C. two-halves



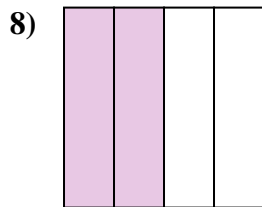
- A. three-fourths
- B. two-fourths
- C. four-fourths



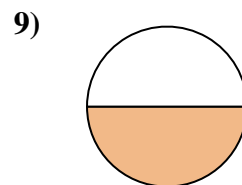
- A. one-fourth
- B. two-halves
- C. one-half



- A. two-fourths
- B. four-quarters
- C. three-quarters



- A. one-half
- B. two-fourths
- C. three-quarters



- A. two-halves
- B. two-fourths
- C. one-half

**Answers**

- 1.     **B**
- 2.     **B**
- 3.     **A**
- 4.     **C**
- 5.     **A**
- 6.     **B**
- 7.     **B**
- 8.     **B**
- 9.     **C**