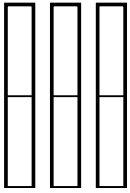


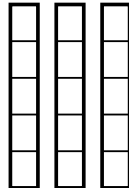


Use the visual models to solve.

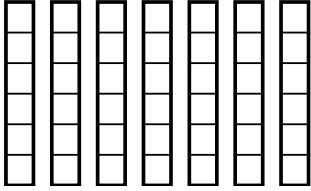
1) $\frac{1}{2} \times 3 =$



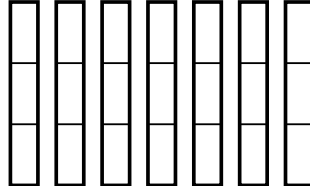
2) $\frac{3}{5} \times 3 =$



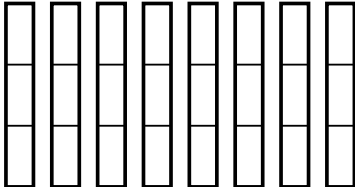
3) $\frac{5}{6} \times 7 =$



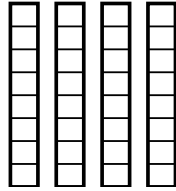
4) $\frac{2}{3} \times 7 =$



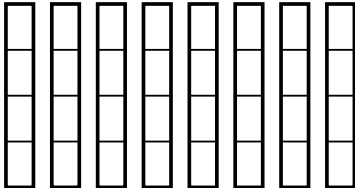
5) $\frac{2}{3} \times 8 =$



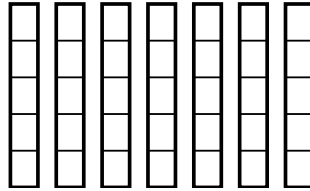
6) $\frac{7}{8} \times 4 =$



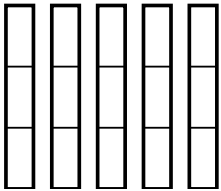
7) $\frac{1}{4} \times 8 =$



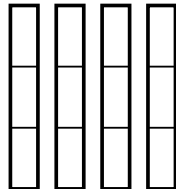
8) $\frac{3}{5} \times 7 =$



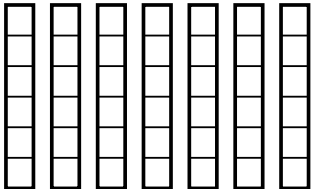
9) $\frac{2}{3} \times 5 =$



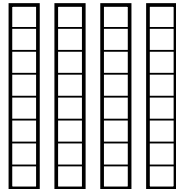
10) $\frac{2}{3} \times 4 =$



11) $\frac{2}{6} \times 7 =$



12) $\frac{6}{8} \times 4 =$



Answers

1. _____

2. _____

3. _____

4. _____

5. _____

6. _____

7. _____

8. _____

9. _____

10. _____

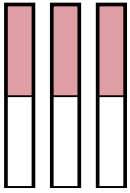
11. _____

12. _____

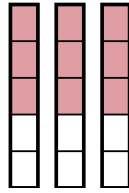


Use the visual models to solve.

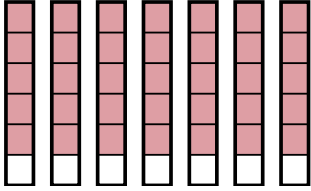
1) $\frac{1}{2} \times 3 =$



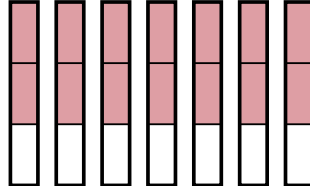
2) $\frac{3}{5} \times 3 =$



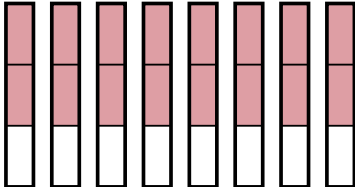
3) $\frac{5}{6} \times 7 =$



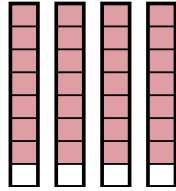
4) $\frac{2}{3} \times 7 =$



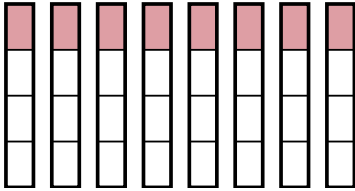
5) $\frac{2}{3} \times 8 =$



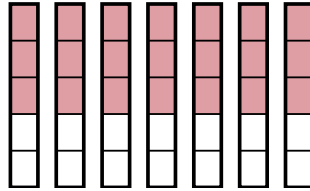
6) $\frac{7}{8} \times 4 =$



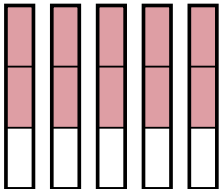
7) $\frac{1}{4} \times 8 =$



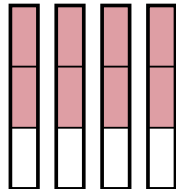
8) $\frac{3}{5} \times 7 =$



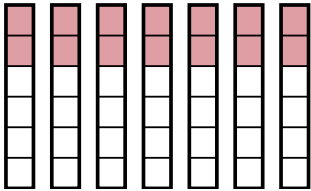
9) $\frac{2}{3} \times 5 =$



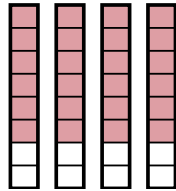
10) $\frac{2}{3} \times 4 =$



11) $\frac{2}{6} \times 7 =$



12) $\frac{6}{8} \times 4 =$



Answers

1. $\frac{3}{2}$

2. $\frac{9}{5}$

3. $\frac{35}{6}$

4. $\frac{14}{3}$

5. $\frac{16}{3}$

6. $\frac{28}{8}$

7. $\frac{8}{4}$

8. $\frac{21}{5}$

9. $\frac{10}{3}$

10. $\frac{8}{3}$

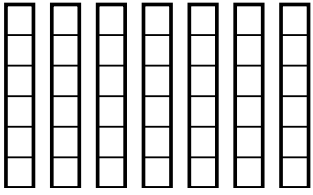
11. $\frac{14}{6}$

12. $\frac{24}{8}$

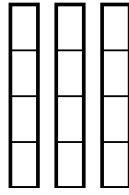


Use the visual models to solve.

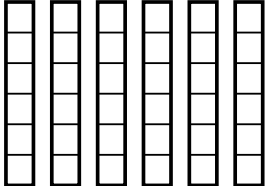
1) $\frac{4}{6} \times 7 =$



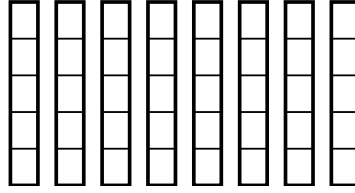
2) $\frac{1}{4} \times 3 =$



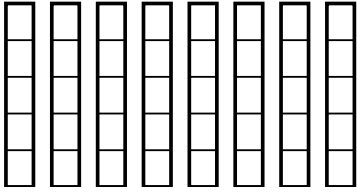
3) $\frac{4}{6} \times 6 =$



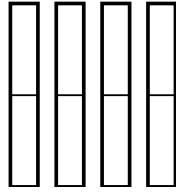
4) $\frac{1}{5} \times 8 =$



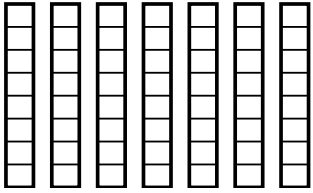
5) $\frac{4}{5} \times 8 =$



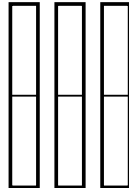
6) $\frac{1}{2} \times 4 =$



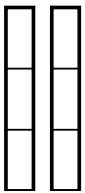
7) $\frac{1}{8} \times 7 =$



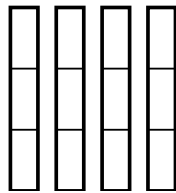
8) $\frac{1}{2} \times 3 =$



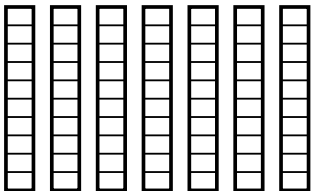
9) $\frac{1}{3} \times 2 =$



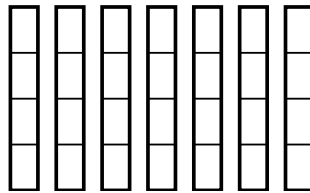
10) $\frac{2}{3} \times 4 =$



11) $\frac{3}{10} \times 7 =$



12) $\frac{2}{4} \times 7 =$



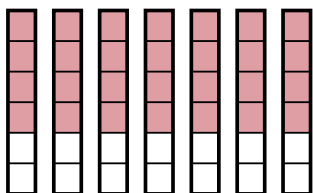
Answers

1. _____
2. _____
3. _____
4. _____
5. _____
6. _____
7. _____
8. _____
9. _____
10. _____
11. _____
12. _____

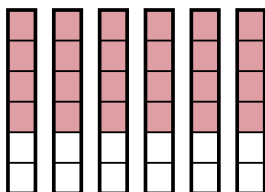


Use the visual models to solve.

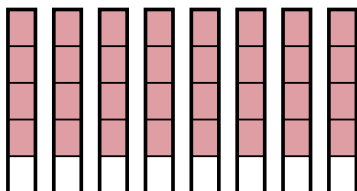
1) $\frac{4}{6} \times 7 =$



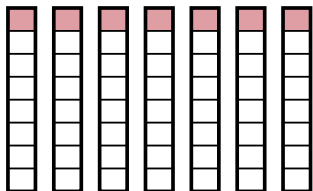
3) $\frac{4}{6} \times 6 =$



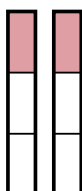
5) $\frac{4}{5} \times 8 =$



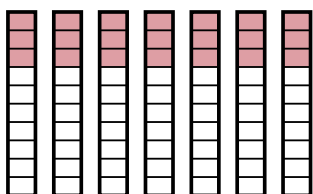
7) $\frac{1}{8} \times 7 =$



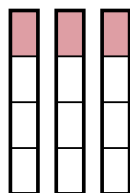
9) $\frac{1}{3} \times 2 =$



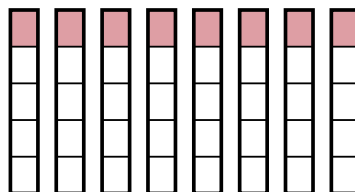
11) $\frac{3}{10} \times 7 =$



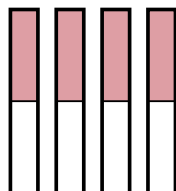
2) $\frac{1}{4} \times 3 =$



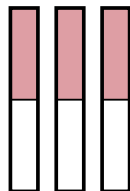
4) $\frac{1}{5} \times 8 =$



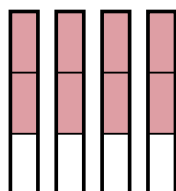
6) $\frac{1}{2} \times 4 =$



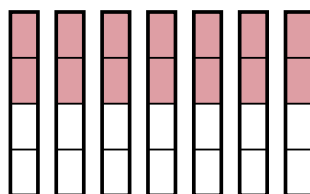
8) $\frac{1}{2} \times 3 =$



10) $\frac{2}{3} \times 4 =$



12) $\frac{2}{4} \times 7 =$



Answers

1. $\frac{28}{6}$

2. $\frac{3}{4}$

3. $\frac{24}{6}$

4. $\frac{8}{5}$

5. $\frac{32}{5}$

6. $\frac{4}{2}$

7. $\frac{7}{8}$

8. $\frac{3}{2}$

9. $\frac{2}{3}$

10. $\frac{8}{3}$

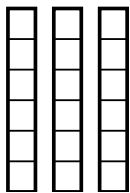
11. $\frac{21}{10}$

12. $\frac{14}{4}$

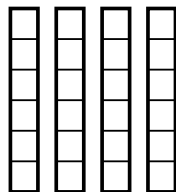


Use the visual models to solve.

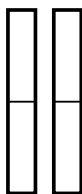
1) $\frac{5}{6} \times 3 =$



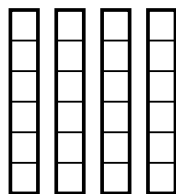
2) $\frac{5}{6} \times 4 =$



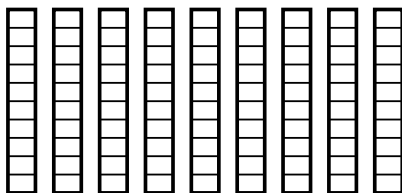
3) $\frac{1}{2} \times 2 =$



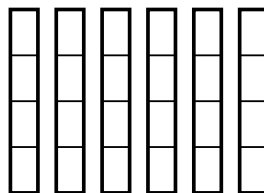
4) $\frac{4}{6} \times 4 =$



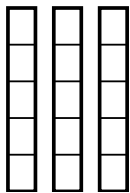
5) $\frac{7}{10} \times 9 =$



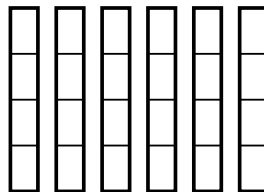
6) $\frac{2}{4} \times 6 =$



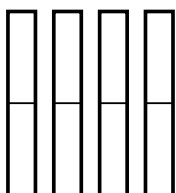
7) $\frac{2}{5} \times 3 =$



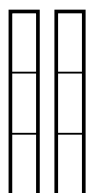
8) $\frac{3}{4} \times 6 =$



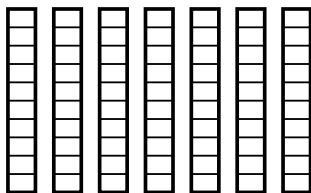
9) $\frac{1}{2} \times 4 =$



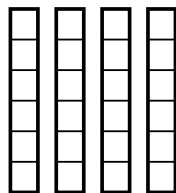
10) $\frac{2}{3} \times 2 =$



11) $\frac{8}{10} \times 7 =$



12) $\frac{3}{6} \times 4 =$



Answers

1. _____

2. _____

3. _____

4. _____

5. _____

6. _____

7. _____

8. _____

9. _____

10. _____

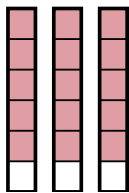
11. _____

12. _____

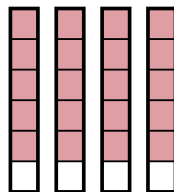


Use the visual models to solve.

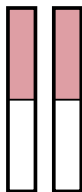
1) $\frac{5}{6} \times 3 =$



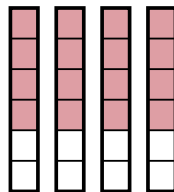
2) $\frac{5}{6} \times 4 =$



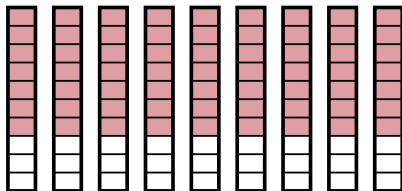
3) $\frac{1}{2} \times 2 =$



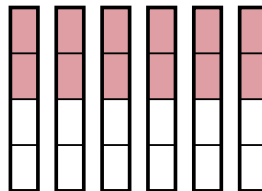
4) $\frac{4}{6} \times 4 =$



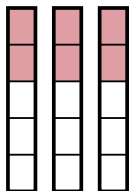
5) $\frac{7}{10} \times 9 =$



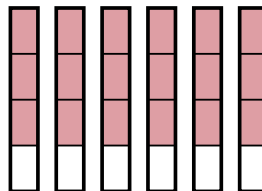
6) $\frac{2}{4} \times 6 =$



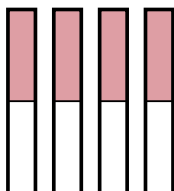
7) $\frac{2}{5} \times 3 =$



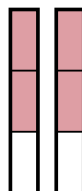
8) $\frac{3}{4} \times 6 =$



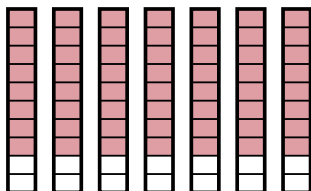
9) $\frac{1}{2} \times 4 =$



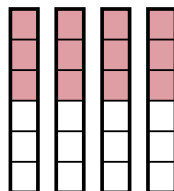
10) $\frac{2}{3} \times 2 =$



11) $\frac{8}{10} \times 7 =$



12) $\frac{3}{6} \times 4 =$



Answers

1. $\frac{15}{6}$

2. $\frac{20}{6}$

3. $\frac{2}{2}$

4. $\frac{16}{6}$

5. $\frac{63}{10}$

6. $\frac{12}{4}$

7. $\frac{6}{5}$

8. $\frac{18}{4}$

9. $\frac{4}{2}$

10. $\frac{4}{3}$

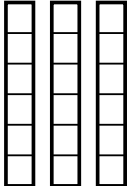
11. $\frac{56}{10}$

12. $\frac{12}{6}$

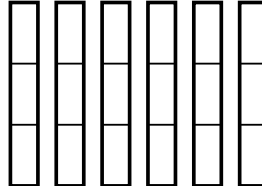


Use the visual models to solve.

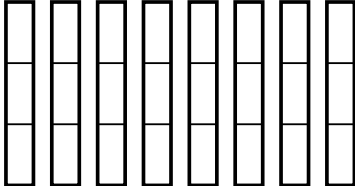
1) $\frac{5}{6} \times 3 =$



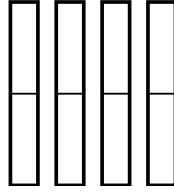
2) $\frac{1}{3} \times 6 =$



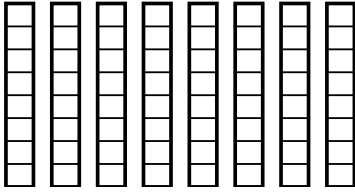
3) $\frac{2}{3} \times 8 =$



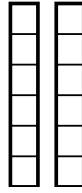
4) $\frac{1}{2} \times 4 =$



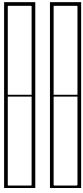
5) $\frac{4}{8} \times 8 =$



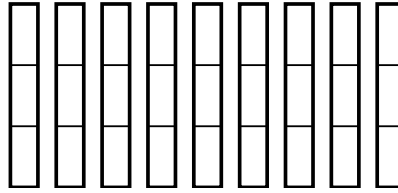
6) $\frac{5}{6} \times 2 =$



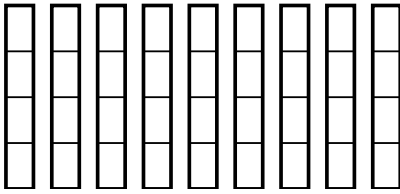
7) $\frac{1}{2} \times 2 =$



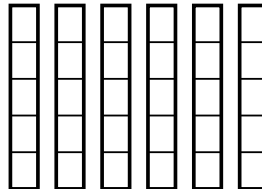
8) $\frac{2}{3} \times 9 =$



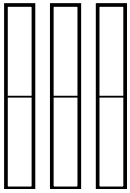
9) $\frac{1}{4} \times 9 =$



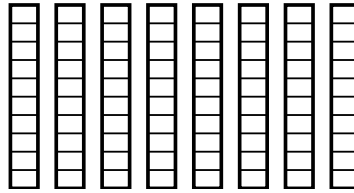
10) $\frac{4}{5} \times 6 =$



11) $\frac{1}{2} \times 3 =$



12) $\frac{3}{10} \times 8 =$



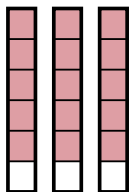
Answers

1. _____
2. _____
3. _____
4. _____
5. _____
6. _____
7. _____
8. _____
9. _____
10. _____
11. _____
12. _____

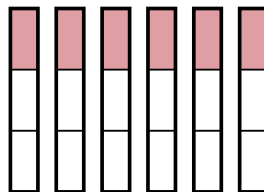


Use the visual models to solve.

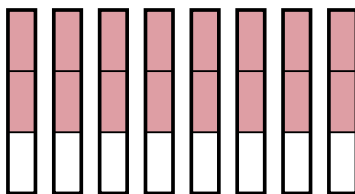
1) $\frac{5}{6} \times 3 =$



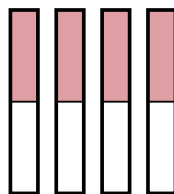
2) $\frac{1}{3} \times 6 =$



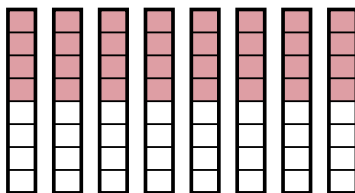
3) $\frac{2}{3} \times 8 =$



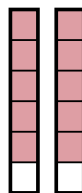
4) $\frac{1}{2} \times 4 =$



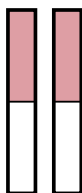
5) $\frac{4}{8} \times 8 =$



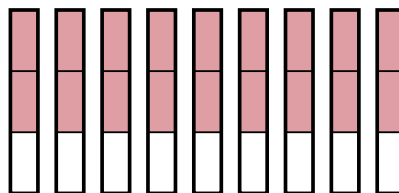
6) $\frac{5}{6} \times 2 =$



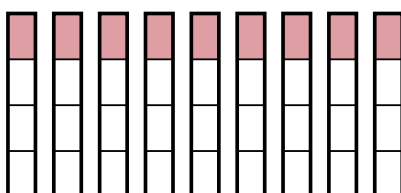
7) $\frac{1}{2} \times 2 =$



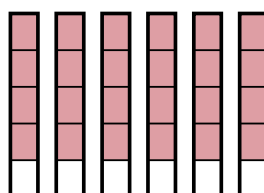
8) $\frac{2}{3} \times 9 =$



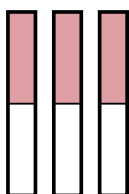
9) $\frac{1}{4} \times 9 =$



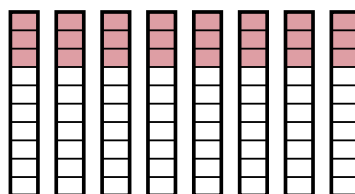
10) $\frac{4}{5} \times 6 =$



11) $\frac{1}{2} \times 3 =$



12) $\frac{3}{10} \times 8 =$



Answers

1. $\frac{15}{6}$

2. $\frac{6}{3}$

3. $\frac{16}{3}$

4. $\frac{4}{2}$

5. $\frac{32}{8}$

6. $\frac{10}{6}$

7. $\frac{2}{2}$

8. $\frac{18}{3}$

9. $\frac{9}{4}$

10. $\frac{24}{5}$

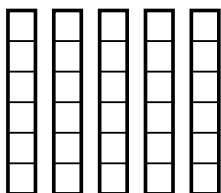
11. $\frac{3}{2}$

12. $\frac{24}{10}$

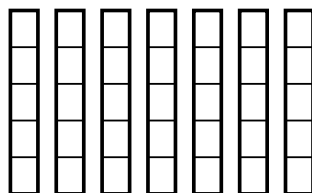


Use the visual models to solve.

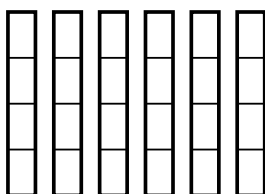
1) $\frac{2}{6} \times 5 =$



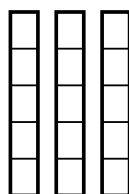
2) $\frac{3}{5} \times 7 =$



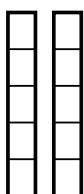
3) $\frac{1}{4} \times 6 =$



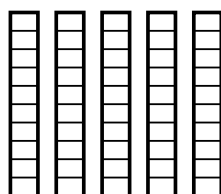
4) $\frac{3}{5} \times 3 =$



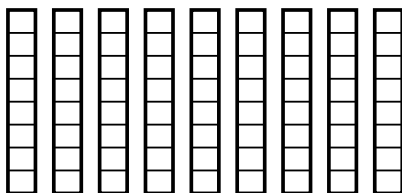
5) $\frac{2}{5} \times 2 =$



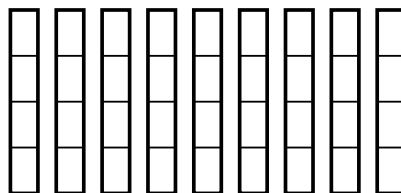
6) $\frac{3}{10} \times 5 =$



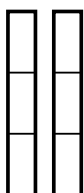
7) $\frac{2}{8} \times 9 =$



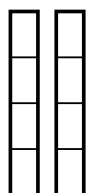
8) $\frac{3}{4} \times 9 =$



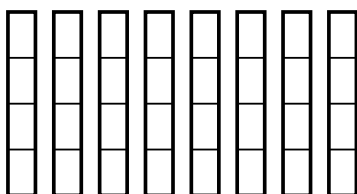
9) $\frac{2}{3} \times 2 =$



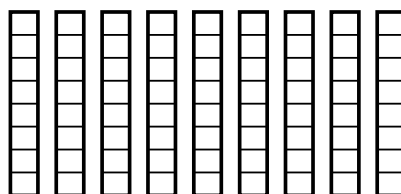
10) $\frac{1}{4} \times 2 =$



11) $\frac{1}{4} \times 8 =$



12) $\frac{6}{8} \times 9 =$



Answers

1. _____

2. _____

3. _____

4. _____

5. _____

6. _____

7. _____

8. _____

9. _____

10. _____

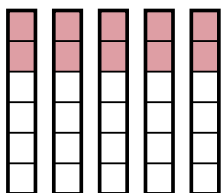
11. _____

12. _____

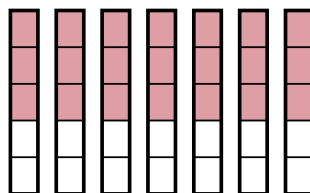


Use the visual models to solve.

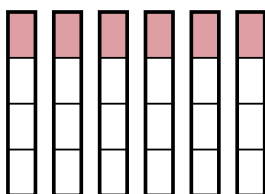
1) $\frac{2}{6} \times 5 =$



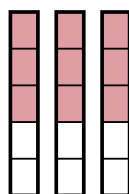
2) $\frac{3}{5} \times 7 =$



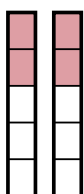
3) $\frac{1}{4} \times 6 =$



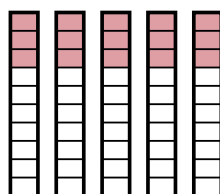
4) $\frac{3}{5} \times 3 =$



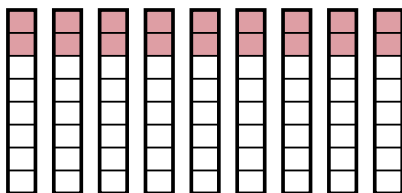
5) $\frac{2}{5} \times 2 =$



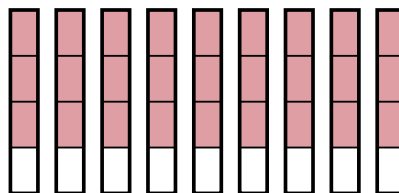
6) $\frac{3}{10} \times 5 =$



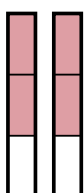
7) $\frac{2}{8} \times 9 =$



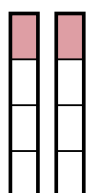
8) $\frac{3}{4} \times 9 =$



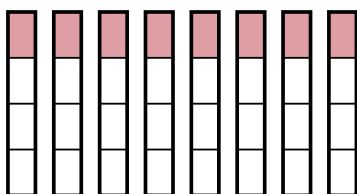
9) $\frac{2}{3} \times 2 =$



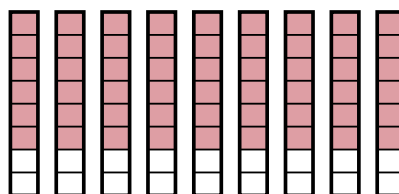
10) $\frac{1}{4} \times 2 =$



11) $\frac{1}{4} \times 8 =$



12) $\frac{6}{8} \times 9 =$



Answers

1. $\frac{10}{6}$

2. $\frac{21}{5}$

3. $\frac{6}{4}$

4. $\frac{9}{5}$

5. $\frac{4}{5}$

6. $\frac{15}{10}$

7. $\frac{18}{8}$

8. $\frac{27}{4}$

9. $\frac{4}{3}$

10. $\frac{2}{4}$

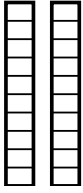
11. $\frac{8}{4}$

12. $\frac{54}{8}$

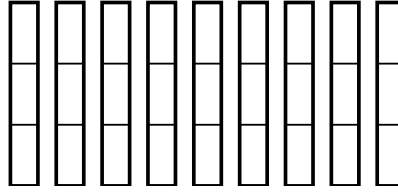


Use the visual models to solve.

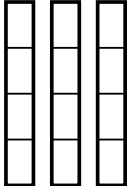
1) $\frac{7}{10} \times 2 =$



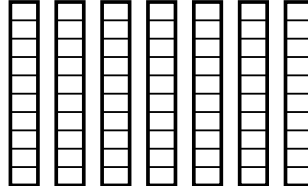
2) $\frac{2}{3} \times 9 =$



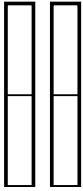
3) $\frac{2}{4} \times 3 =$



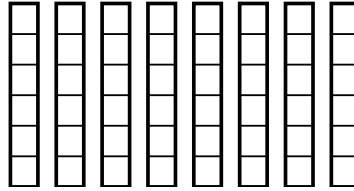
4) $\frac{7}{10} \times 7 =$



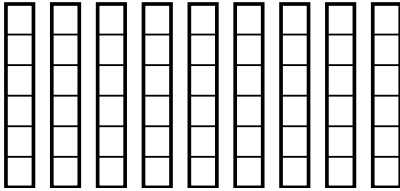
5) $\frac{1}{2} \times 2 =$



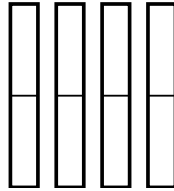
6) $\frac{2}{6} \times 8 =$



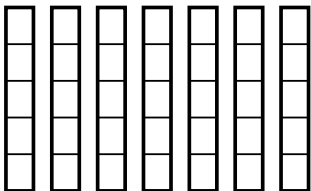
7) $\frac{3}{6} \times 9 =$



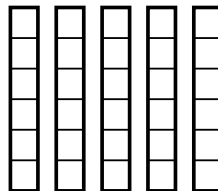
8) $\frac{1}{2} \times 4 =$



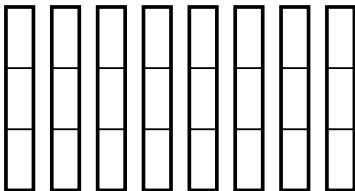
9) $\frac{1}{5} \times 7 =$



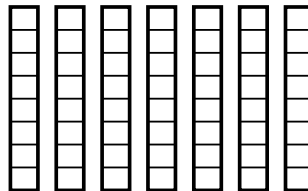
10) $\frac{3}{6} \times 5 =$



11) $\frac{2}{3} \times 8 =$



12) $\frac{6}{8} \times 7 =$



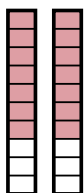
Answers

1. _____
2. _____
3. _____
4. _____
5. _____
6. _____
7. _____
8. _____
9. _____
10. _____
11. _____
12. _____

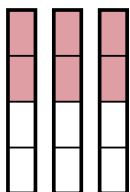


Use the visual models to solve.

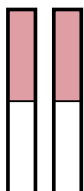
1) $\frac{7}{10} \times 2 =$



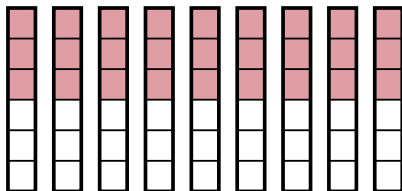
3) $\frac{2}{4} \times 3 =$



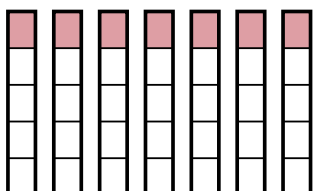
5) $\frac{1}{2} \times 2 =$



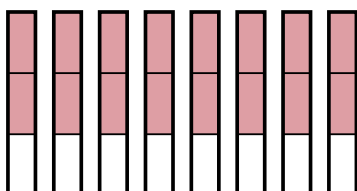
7) $\frac{3}{6} \times 9 =$



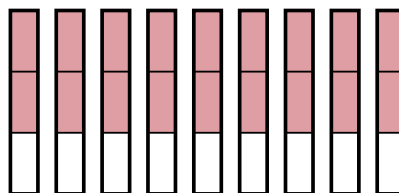
9) $\frac{1}{5} \times 7 =$



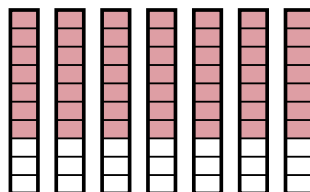
11) $\frac{2}{3} \times 8 =$



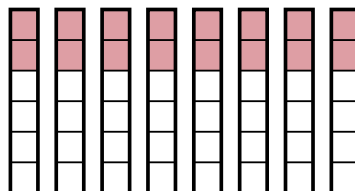
2) $\frac{2}{3} \times 9 =$



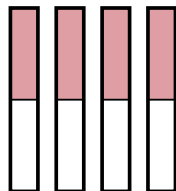
4) $\frac{7}{10} \times 7 =$



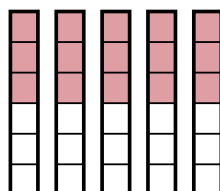
6) $\frac{2}{6} \times 8 =$



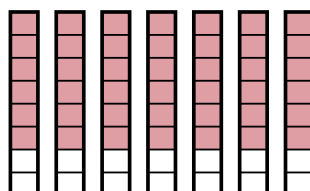
8) $\frac{1}{2} \times 4 =$



10) $\frac{3}{6} \times 5 =$



12) $\frac{6}{8} \times 7 =$



Answers

1. $\frac{14}{10}$

2. $\frac{18}{3}$

3. $\frac{6}{4}$

4. $\frac{49}{10}$

5. $\frac{2}{2}$

6. $\frac{16}{6}$

7. $\frac{27}{6}$

8. $\frac{4}{2}$

9. $\frac{7}{5}$

10. $\frac{15}{6}$

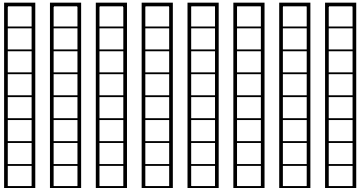
11. $\frac{16}{3}$

12. $\frac{42}{8}$

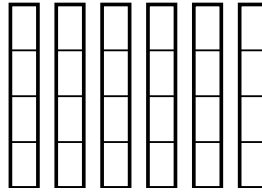


Use the visual models to solve.

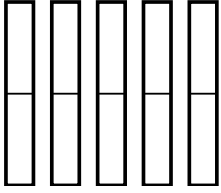
1) $\frac{7}{8} \times 8 =$



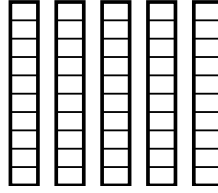
2) $\frac{1}{4} \times 6 =$



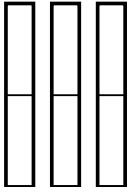
3) $\frac{1}{2} \times 5 =$



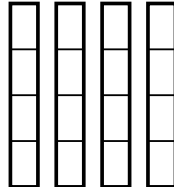
4) $\frac{3}{10} \times 5 =$



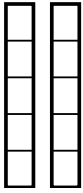
5) $\frac{1}{2} \times 3 =$



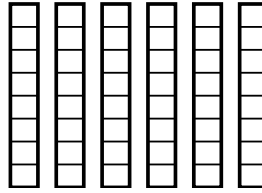
6) $\frac{3}{4} \times 4 =$



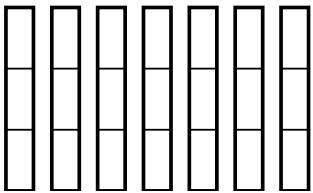
7) $\frac{1}{5} \times 2 =$



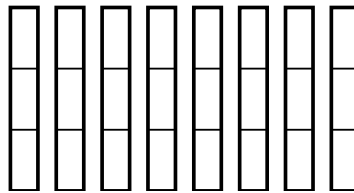
8) $\frac{2}{8} \times 6 =$



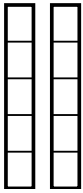
9) $\frac{2}{3} \times 7 =$



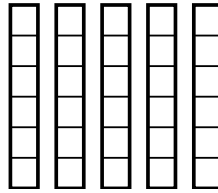
10) $\frac{1}{3} \times 8 =$



11) $\frac{2}{5} \times 2 =$



12) $\frac{5}{6} \times 5 =$



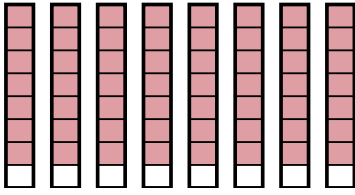
Answers

1. _____
2. _____
3. _____
4. _____
5. _____
6. _____
7. _____
8. _____
9. _____
10. _____
11. _____
12. _____

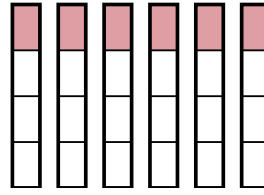


Use the visual models to solve.

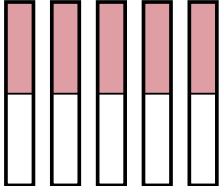
1) $\frac{7}{8} \times 8 =$



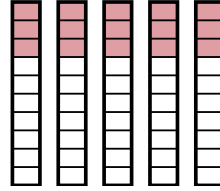
2) $\frac{1}{4} \times 6 =$



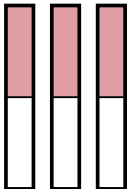
3) $\frac{1}{2} \times 5 =$



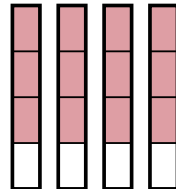
4) $\frac{3}{10} \times 5 =$



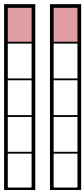
5) $\frac{1}{2} \times 3 =$



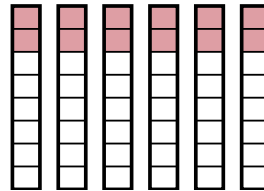
6) $\frac{3}{4} \times 4 =$



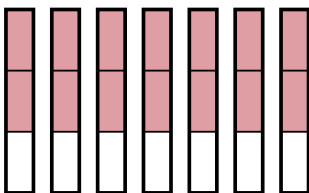
7) $\frac{1}{5} \times 2 =$



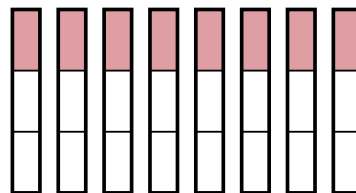
8) $\frac{2}{8} \times 6 =$



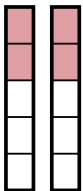
9) $\frac{2}{3} \times 7 =$



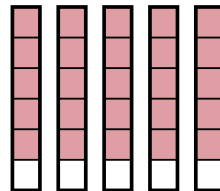
10) $\frac{1}{3} \times 8 =$



11) $\frac{2}{5} \times 2 =$



12) $\frac{5}{6} \times 5 =$



Answers

1. $\frac{56}{8}$

2. $\frac{6}{4}$

3. $\frac{5}{2}$

4. $\frac{15}{10}$

5. $\frac{3}{2}$

6. $\frac{12}{4}$

7. $\frac{2}{5}$

8. $\frac{12}{8}$

9. $\frac{14}{3}$

10. $\frac{8}{3}$

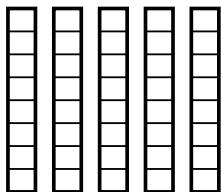
11. $\frac{4}{5}$

12. $\frac{25}{6}$

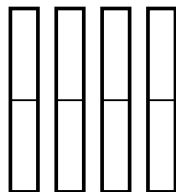


Use the visual models to solve.

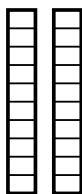
1) $\frac{1}{8} \times 5 =$



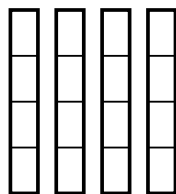
2) $\frac{1}{2} \times 4 =$



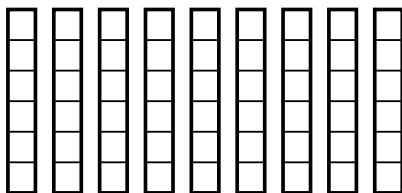
3) $\frac{1}{10} \times 2 =$



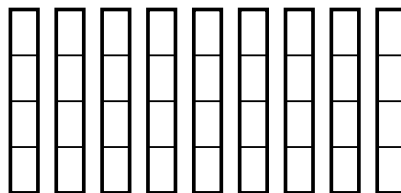
4) $\frac{3}{4} \times 4 =$



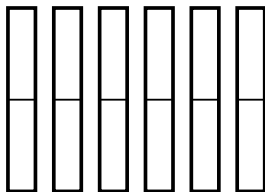
5) $\frac{1}{6} \times 9 =$



6) $\frac{1}{4} \times 9 =$



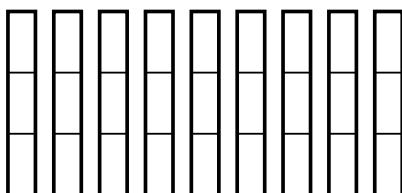
7) $\frac{1}{2} \times 6 =$



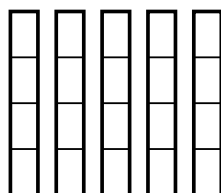
8) $\frac{1}{2} \times 2 =$



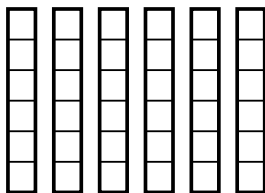
9) $\frac{2}{3} \times 9 =$



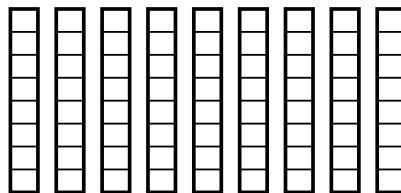
10) $\frac{3}{4} \times 5 =$



11) $\frac{1}{6} \times 6 =$



12) $\frac{2}{8} \times 9 =$



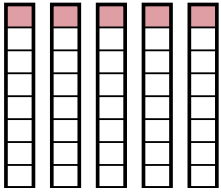
Answers

1. _____
2. _____
3. _____
4. _____
5. _____
6. _____
7. _____
8. _____
9. _____
10. _____
11. _____
12. _____

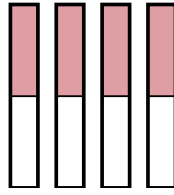


Use the visual models to solve.

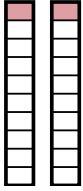
1) $\frac{1}{8} \times 5 =$



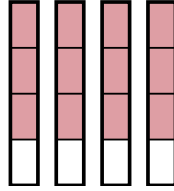
2) $\frac{1}{2} \times 4 =$



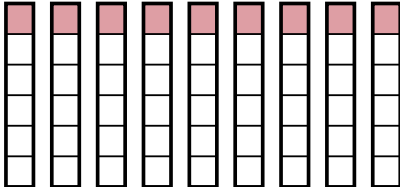
3) $\frac{1}{10} \times 2 =$



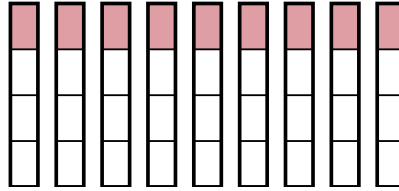
4) $\frac{3}{4} \times 4 =$




5) $\frac{1}{6} \times 9 =$



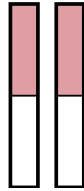
6) $\frac{1}{4} \times 9 =$



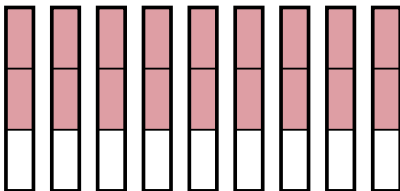
7) $\frac{1}{2} \times 6 =$



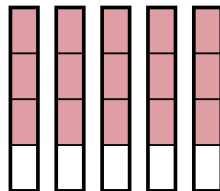
8) $\frac{1}{2} \times 2 =$



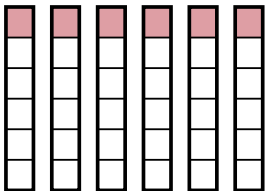
9) $\frac{2}{3} \times 9 =$



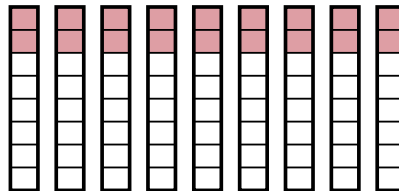
10) $\frac{3}{4} \times 5 =$



11) $\frac{1}{6} \times 6 =$



12) $\frac{2}{8} \times 9 =$



Answers

1. $\frac{5}{8}$

2. $\frac{4}{2}$

3. $\frac{2}{10}$

4. $\frac{12}{4}$

5. $\frac{9}{6}$

6. $\frac{9}{4}$

7. $\frac{6}{2}$

8. $\frac{2}{2}$

9. $\frac{18}{3}$

10. $\frac{15}{4}$

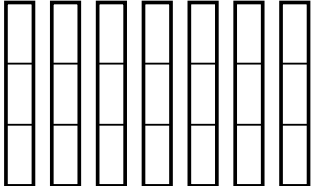
11. $\frac{6}{6}$

12. $\frac{18}{8}$

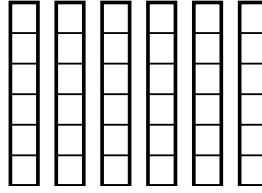


Use the visual models to solve.

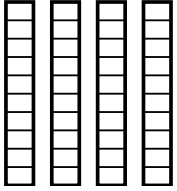
1) $\frac{1}{3} \times 7 =$



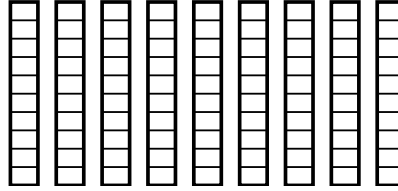
2) $\frac{5}{6} \times 6 =$



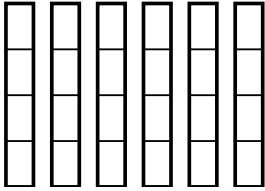
3) $\frac{9}{10} \times 4 =$



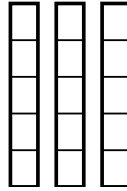
4) $\frac{7}{10} \times 9 =$



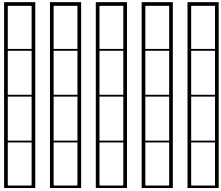
5) $\frac{2}{4} \times 6 =$



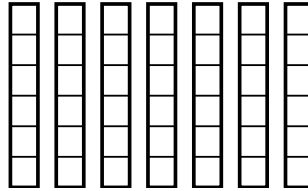
6) $\frac{3}{5} \times 3 =$



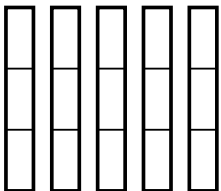
7) $\frac{2}{4} \times 5 =$



8) $\frac{3}{6} \times 7 =$



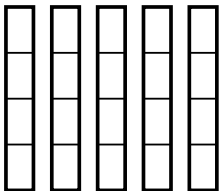
9) $\frac{1}{3} \times 5 =$



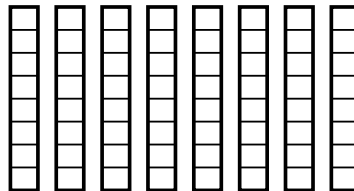
10) $\frac{1}{4} \times 2 =$



11) $\frac{3}{4} \times 5 =$



12) $\frac{1}{8} \times 8 =$



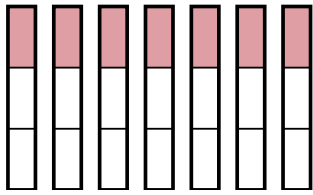
Answers

1. _____
2. _____
3. _____
4. _____
5. _____
6. _____
7. _____
8. _____
9. _____
10. _____
11. _____
12. _____

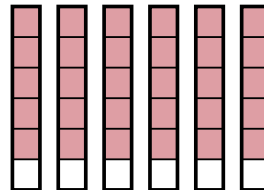


Use the visual models to solve.

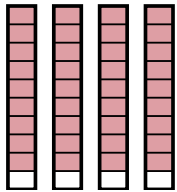
1) $\frac{1}{3} \times 7 =$



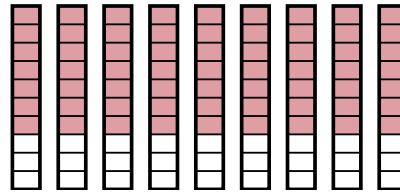
2) $\frac{5}{6} \times 6 =$



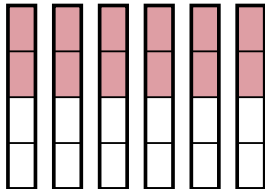
3) $\frac{9}{10} \times 4 =$



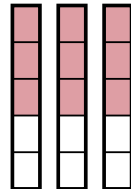
4) $\frac{7}{10} \times 9 =$



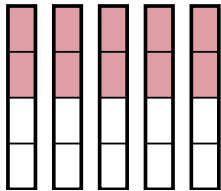
5) $\frac{2}{4} \times 6 =$



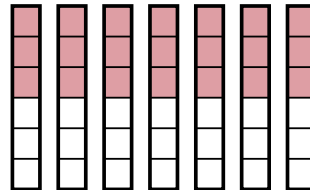
6) $\frac{3}{5} \times 3 =$



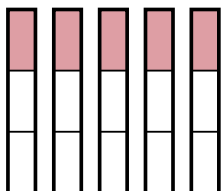
7) $\frac{2}{4} \times 5 =$



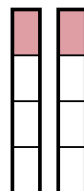
8) $\frac{3}{6} \times 7 =$



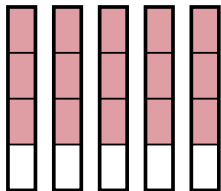
9) $\frac{1}{3} \times 5 =$



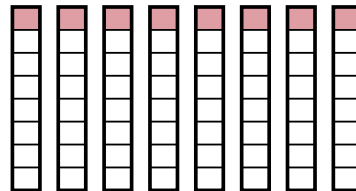
10) $\frac{1}{4} \times 2 =$



11) $\frac{3}{4} \times 5 =$



12) $\frac{1}{8} \times 8 =$



Answers

1. $\frac{7}{3}$

2. $\frac{30}{6}$

3. $\frac{36}{10}$

4. $\frac{63}{10}$

5. $\frac{12}{4}$

6. $\frac{9}{5}$

7. $\frac{10}{4}$

8. $\frac{21}{6}$

9. $\frac{5}{3}$

10. $\frac{2}{4}$

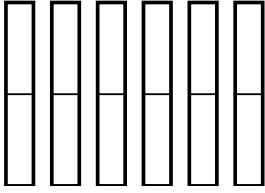
11. $\frac{15}{4}$

12. $\frac{8}{8}$

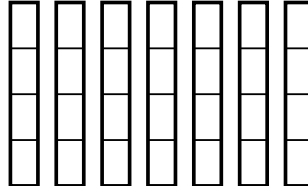


Use the visual models to solve.

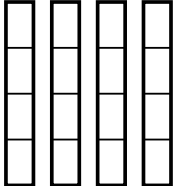
1) $\frac{1}{2} \times 6 =$



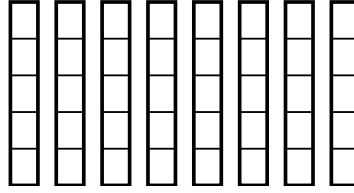
2) $\frac{2}{4} \times 7 =$



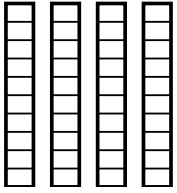
3) $\frac{2}{4} \times 4 =$



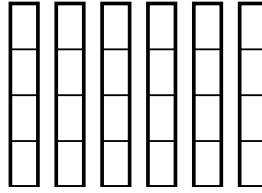
4) $\frac{1}{5} \times 8 =$



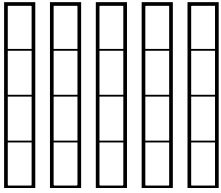
5) $\frac{5}{10} \times 4 =$



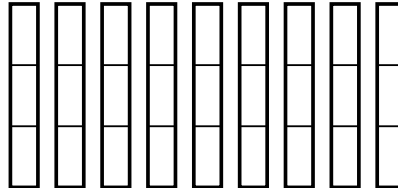
6) $\frac{1}{4} \times 6 =$



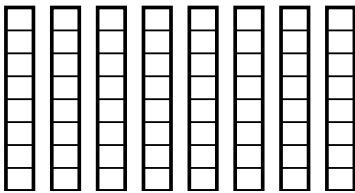
7) $\frac{1}{4} \times 5 =$



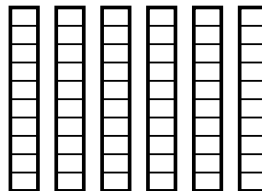
8) $\frac{2}{3} \times 9 =$



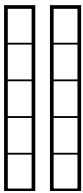
9) $\frac{1}{8} \times 8 =$



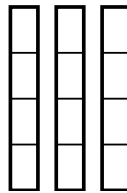
10) $\frac{4}{10} \times 6 =$



11) $\frac{4}{5} \times 2 =$



12) $\frac{1}{4} \times 3 =$



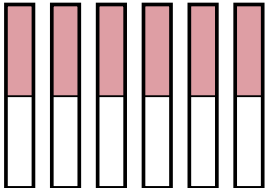
Answers

1. _____
2. _____
3. _____
4. _____
5. _____
6. _____
7. _____
8. _____
9. _____
10. _____
11. _____
12. _____

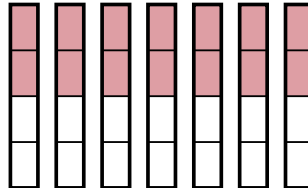


Use the visual models to solve.

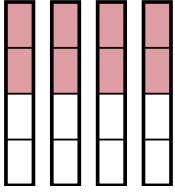
1) $\frac{1}{2} \times 6 =$



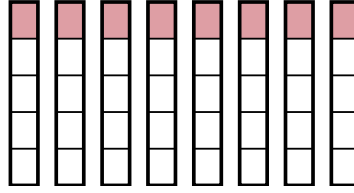
2) $\frac{2}{4} \times 7 =$



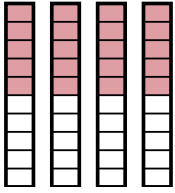
3) $\frac{2}{4} \times 4 =$



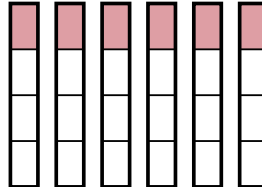
4) $\frac{1}{5} \times 8 =$



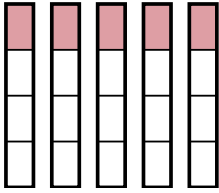
5) $\frac{5}{10} \times 4 =$



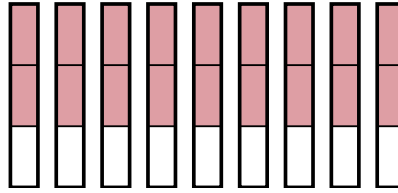
6) $\frac{1}{4} \times 6 =$



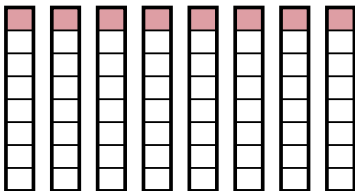
7) $\frac{1}{4} \times 5 =$



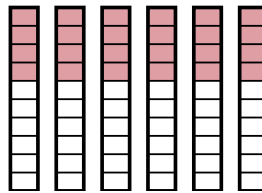
8) $\frac{2}{3} \times 9 =$



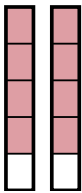
9) $\frac{1}{8} \times 8 =$



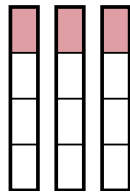
10) $\frac{4}{10} \times 6 =$



11) $\frac{4}{5} \times 2 =$



12) $\frac{1}{4} \times 3 =$



Answers

1. $\frac{6}{2}$

2. $\frac{14}{4}$

3. $\frac{8}{4}$

4. $\frac{8}{5}$

5. $\frac{20}{10}$

6. $\frac{6}{4}$

7. $\frac{5}{4}$

8. $\frac{18}{3}$

9. $\frac{8}{8}$

10. $\frac{24}{10}$

11. $\frac{8}{5}$

12. $\frac{3}{4}$