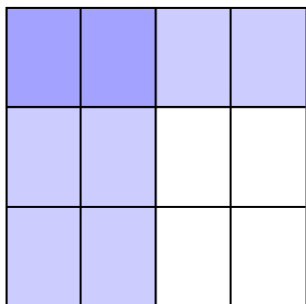




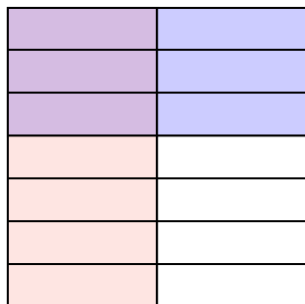


Use the box provided to show a visual example of how to multiply two fractions.

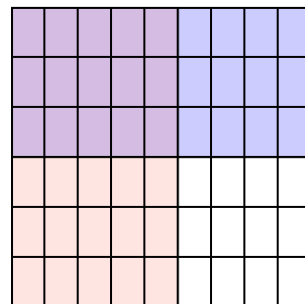
Ex)  $\frac{2}{4} \times \frac{1}{3} =$



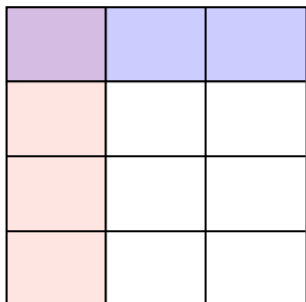
1)  $\frac{1}{2} \times \frac{3}{7} =$



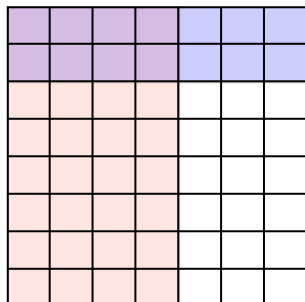
2)  $\frac{5}{9} \times \frac{3}{6} =$



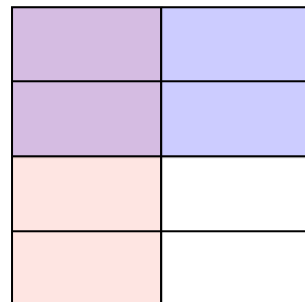
3)  $\frac{1}{3} \times \frac{1}{4} =$



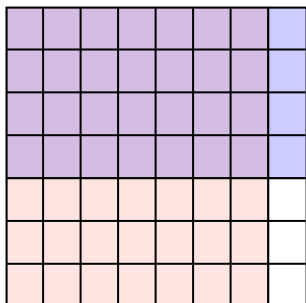
4)  $\frac{4}{7} \times \frac{2}{8} =$



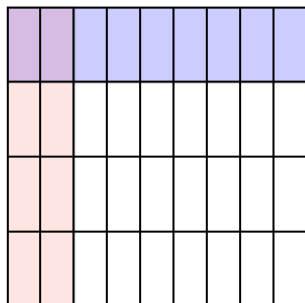
5)  $\frac{1}{2} \times \frac{2}{4} =$



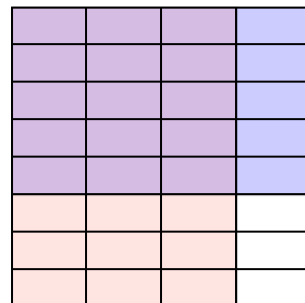
6)  $\frac{7}{8} \times \frac{4}{7} =$



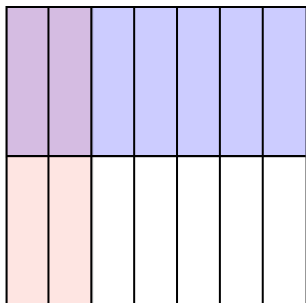
7)  $\frac{2}{9} \times \frac{1}{4} =$



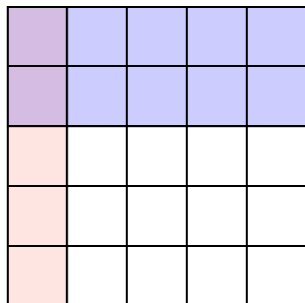
8)  $\frac{3}{4} \times \frac{5}{8} =$



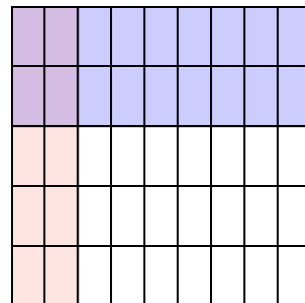
9)  $\frac{2}{7} \times \frac{1}{2} =$



10)  $\frac{1}{5} \times \frac{2}{5} =$



11)  $\frac{2}{9} \times \frac{2}{5} =$



**Answers**

Ex.  $\frac{2}{12}$

1.  $\frac{3}{14}$

2.  $\frac{15}{54}$

3.  $\frac{1}{12}$

4.  $\frac{8}{56}$

5.  $\frac{2}{8}$

6.  $\frac{28}{56}$

7.  $\frac{2}{36}$

8.  $\frac{15}{32}$

9.  $\frac{2}{14}$

10.  $\frac{2}{25}$

11.  $\frac{4}{45}$