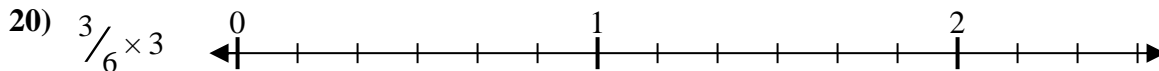
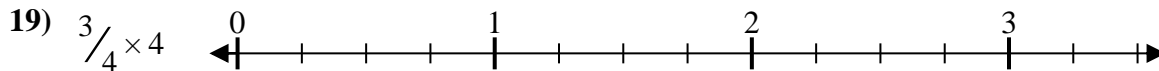
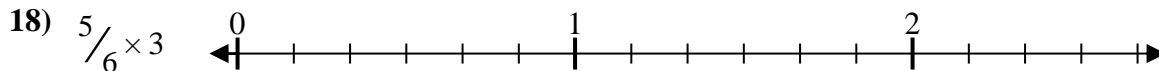
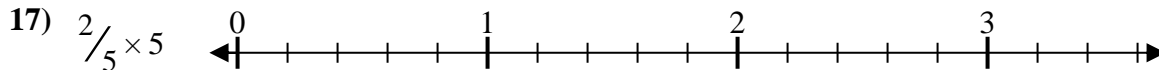
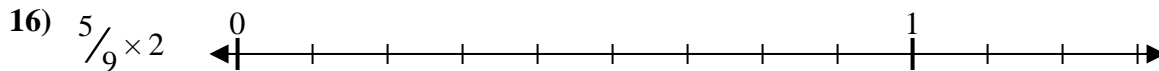
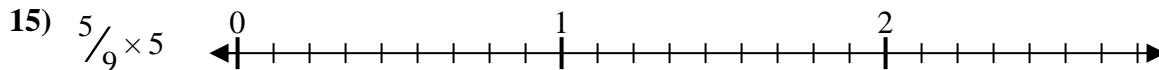
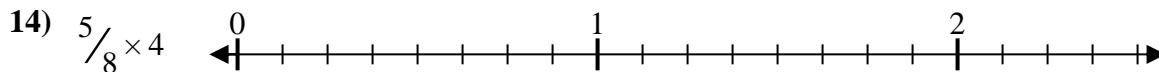

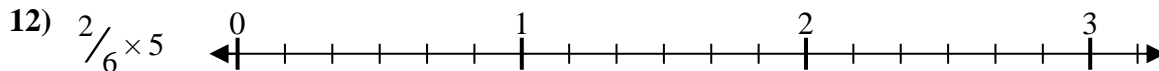
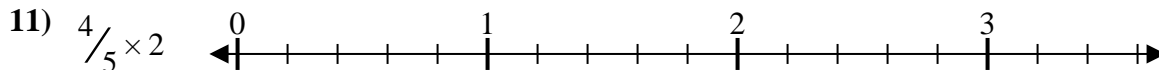
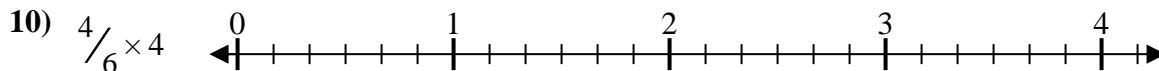
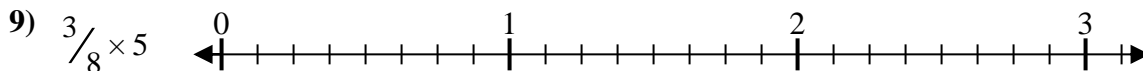
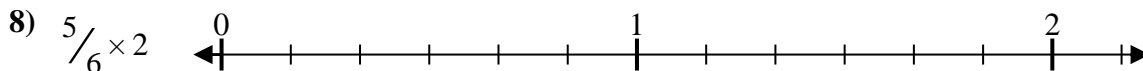
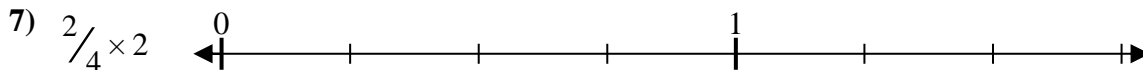
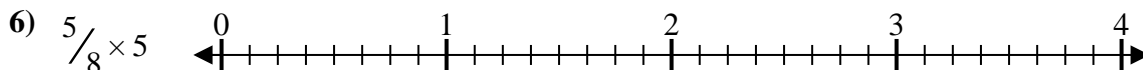

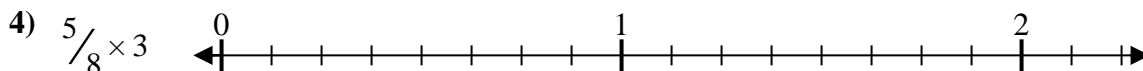
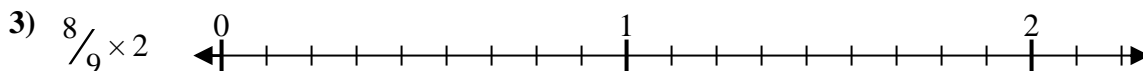
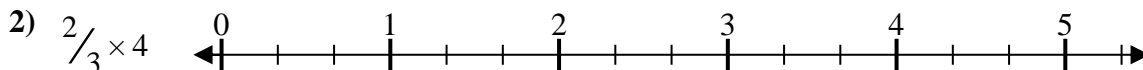
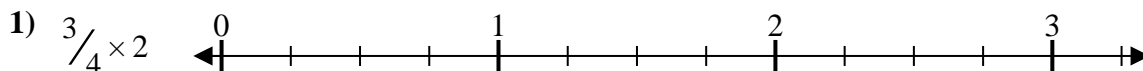




Solve each problem.

## Answers



1. \_\_\_\_\_

2. \_\_\_\_\_

3. \_\_\_\_\_

4. \_\_\_\_\_

5. \_\_\_\_\_

6. \_\_\_\_\_

7. \_\_\_\_\_

8. \_\_\_\_\_

9. \_\_\_\_\_

10. \_\_\_\_\_

11. \_\_\_\_\_

12. \_\_\_\_\_

13. \_\_\_\_\_

14. \_\_\_\_\_

15. \_\_\_\_\_

16. \_\_\_\_\_

17. \_\_\_\_\_

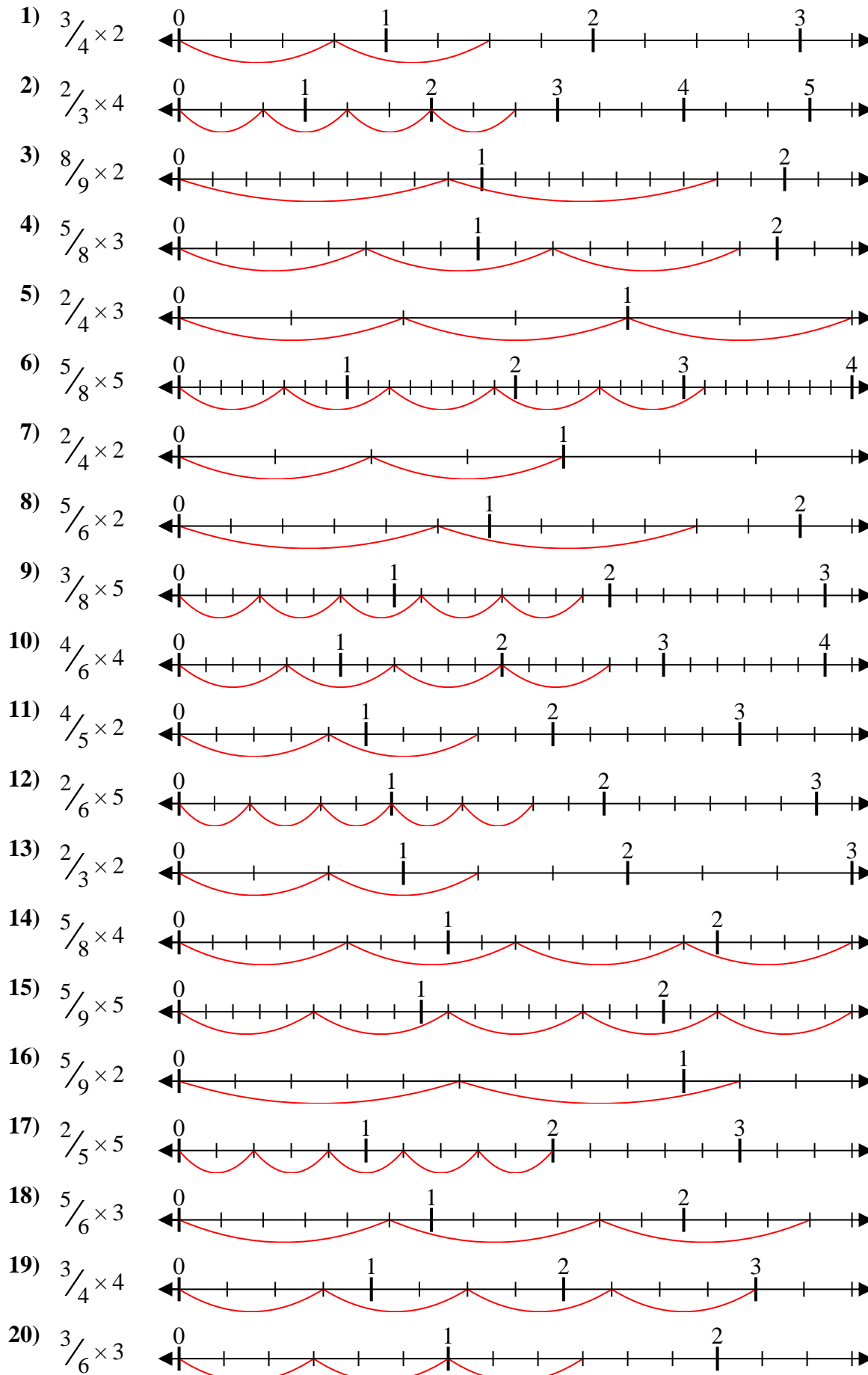
18. \_\_\_\_\_

19. \_\_\_\_\_

20. \_\_\_\_\_



Solve each problem.



**Answers**

1.  $\frac{6}{4} = 1\frac{1}{2}$
2.  $\frac{8}{3} = 2\frac{2}{3}$
3.  $\frac{16}{9} = 1\frac{7}{9}$
4.  $\frac{15}{8} = 1\frac{7}{8}$
5.  $\frac{6}{4} = 1\frac{1}{2}$
6.  $\frac{25}{8} = 3\frac{1}{8}$
7.  $\frac{4}{4} = 1$
8.  $\frac{10}{6} = 1\frac{2}{3}$
9.  $\frac{15}{8} = 1\frac{7}{8}$
10.  $\frac{16}{6} = 2\frac{2}{3}$
11.  $\frac{8}{5} = 1\frac{3}{5}$
12.  $\frac{10}{6} = 1\frac{2}{3}$
13.  $\frac{4}{3} = 1\frac{1}{3}$
14.  $\frac{20}{8} = 2\frac{1}{2}$
15.  $\frac{25}{9} = 2\frac{7}{9}$
16.  $\frac{10}{9} = 1\frac{1}{9}$
17.  $\frac{10}{5} = 2$
18.  $\frac{15}{6} = 2\frac{1}{2}$
19.  $\frac{12}{4} = 3$
20.  $\frac{9}{6} = 1\frac{1}{2}$