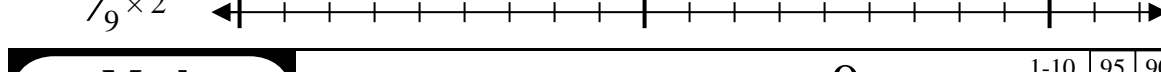
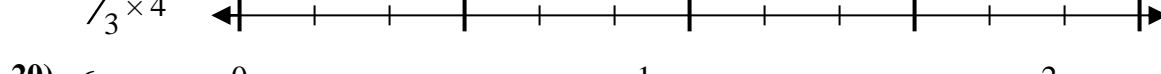
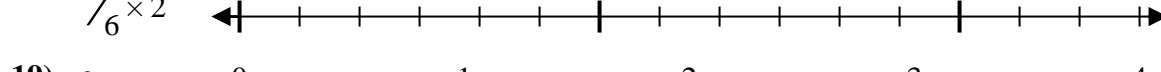
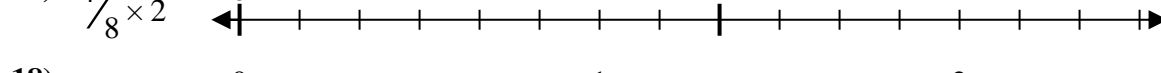
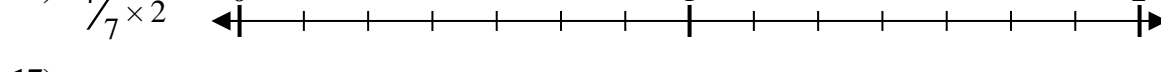
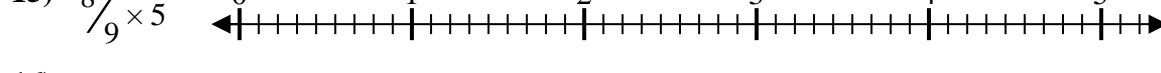
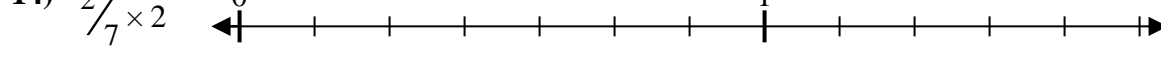
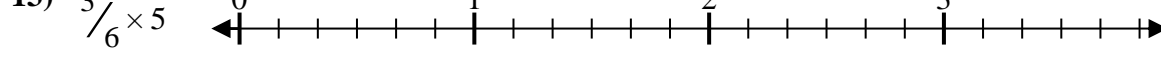
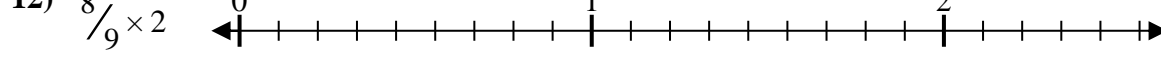
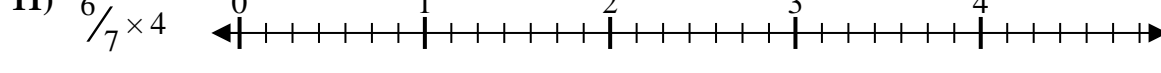
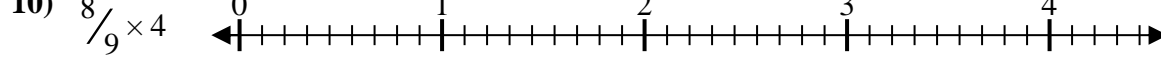
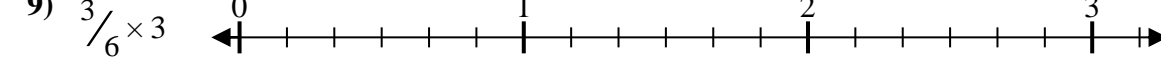
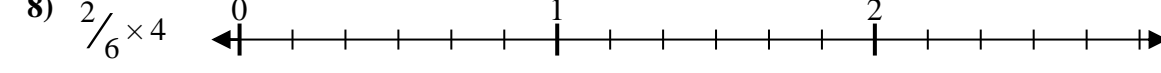
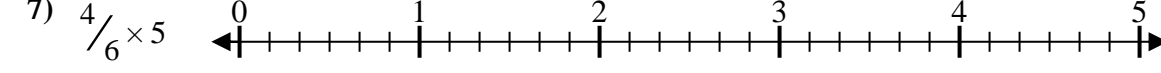
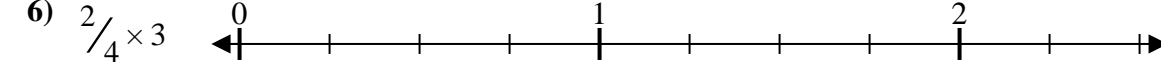
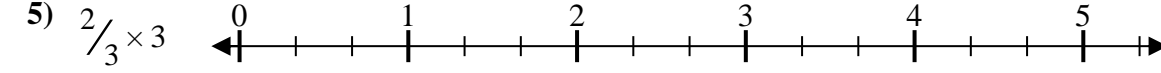
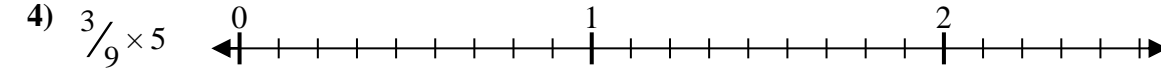
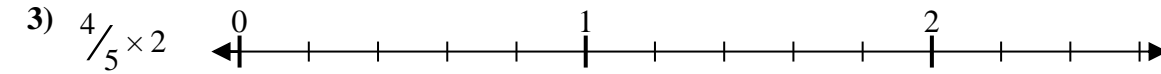

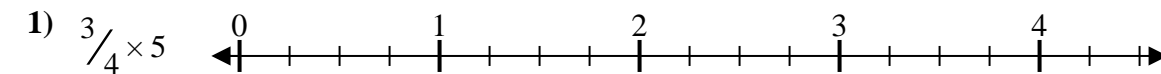




Solve each problem.

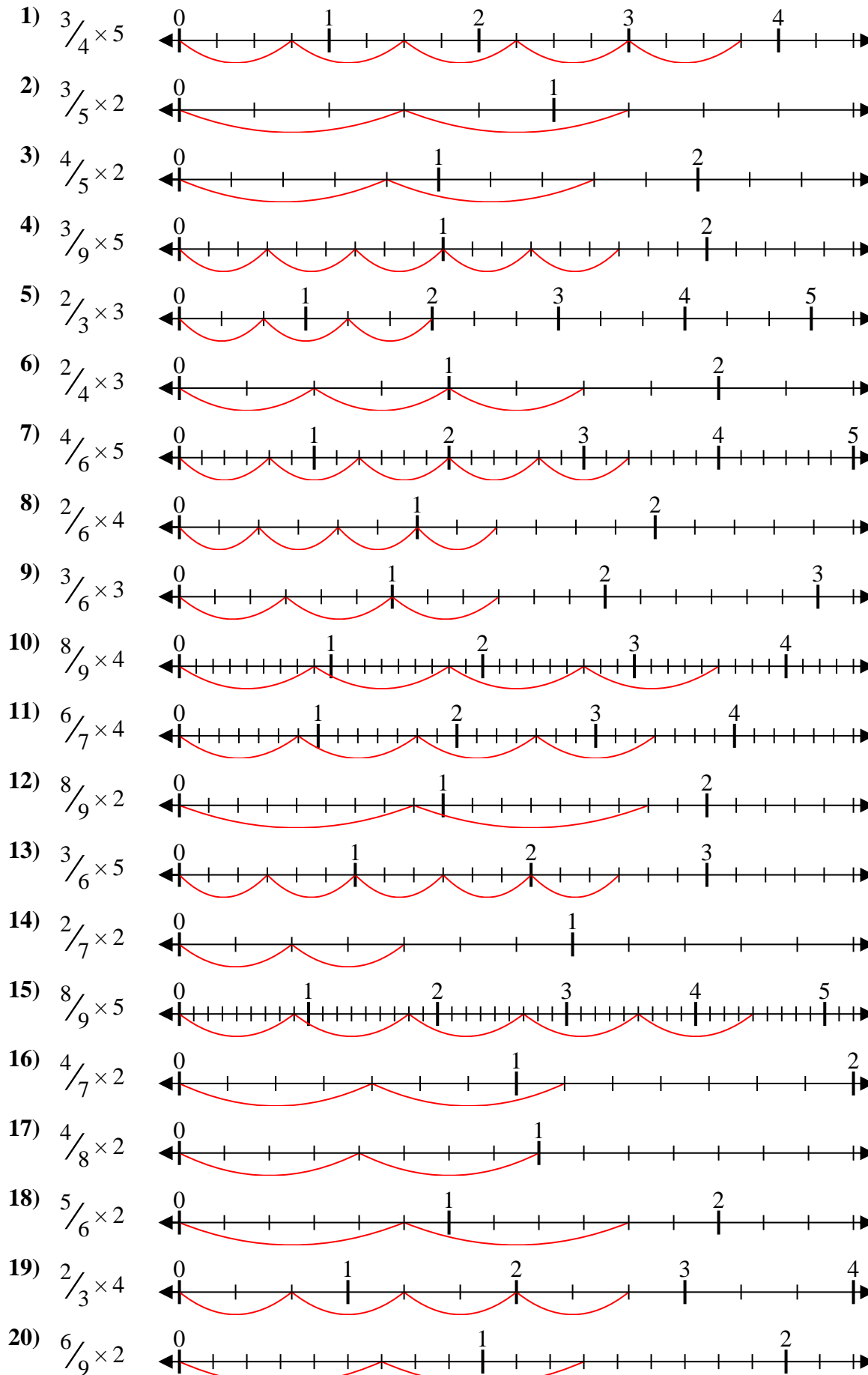
Answers



1. _____
2. _____
3. _____
4. _____
5. _____
6. _____
7. _____
8. _____
9. _____
10. _____
11. _____
12. _____
13. _____
14. _____
15. _____
16. _____
17. _____
18. _____
19. _____
20. _____



Solve each problem.



Answers

1. $\frac{15}{4} = 3\frac{3}{4}$
2. $\frac{6}{5} = 1\frac{1}{5}$
3. $\frac{8}{5} = 1\frac{3}{5}$
4. $\frac{15}{9} = 1\frac{2}{3}$
5. $\frac{6}{3} = 2$
6. $\frac{6}{4} = 1\frac{1}{2}$
7. $\frac{20}{6} = 3\frac{1}{3}$
8. $\frac{8}{6} = 1\frac{1}{3}$
9. $\frac{9}{6} = 1\frac{1}{2}$
10. $\frac{32}{9} = 3\frac{5}{9}$
11. $\frac{24}{7} = 3\frac{3}{7}$
12. $\frac{16}{9} = 1\frac{7}{9}$
13. $\frac{15}{6} = 2\frac{1}{2}$
14. $\frac{4}{7} = \frac{4}{7}$
15. $\frac{40}{9} = 4\frac{4}{9}$
16. $\frac{8}{7} = 1\frac{1}{7}$
17. $\frac{8}{8} = 1$
18. $\frac{10}{6} = 1\frac{2}{3}$
19. $\frac{8}{3} = 2\frac{2}{3}$
20. $\frac{12}{9} = 1\frac{1}{3}$