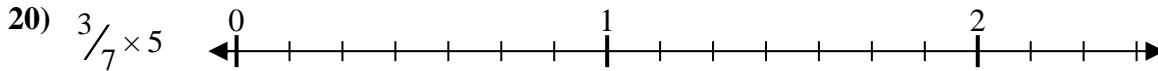
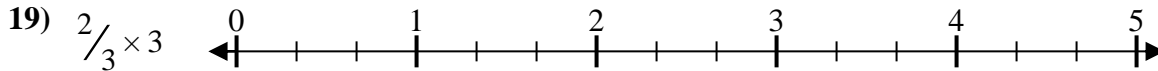

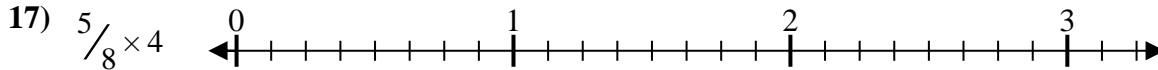
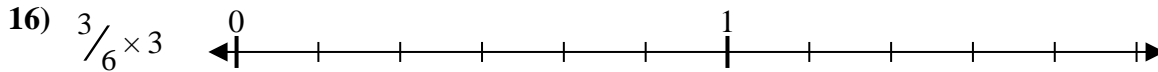
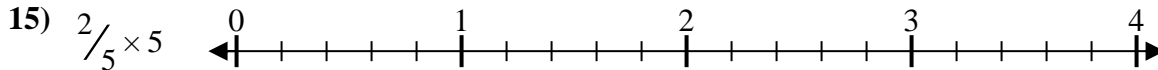
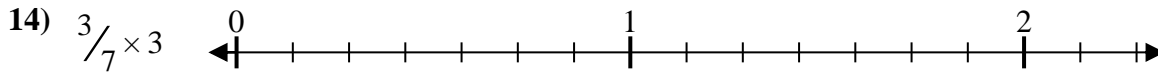
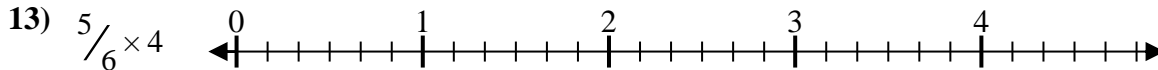

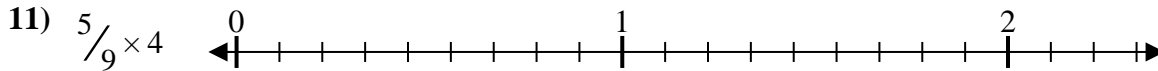
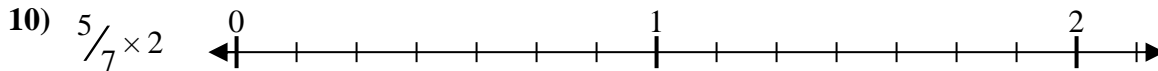
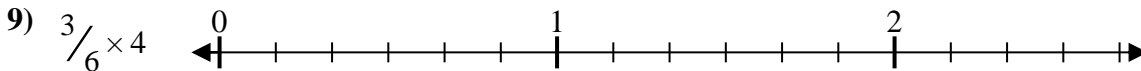
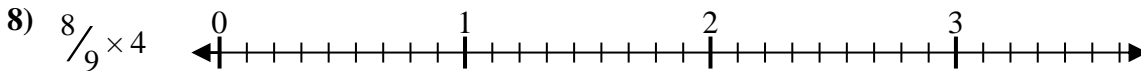
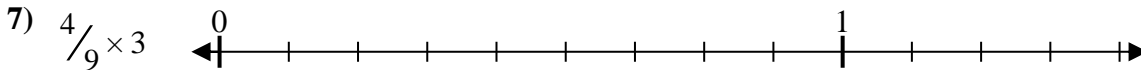
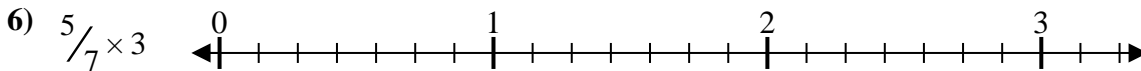

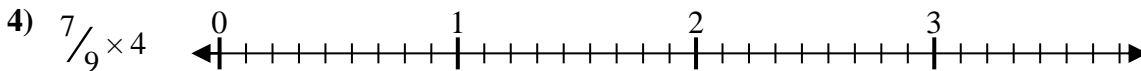
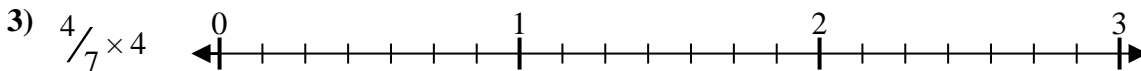
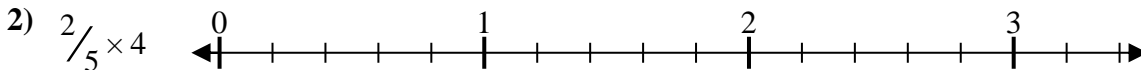
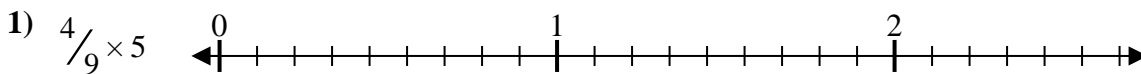




Solve each problem.

Answers



1. _____

2. _____

3. _____

4. _____

5. _____

6. _____

7. _____

8. _____

9. _____

10. _____

11. _____

12. _____

13. _____

14. _____

15. _____

16. _____

17. _____

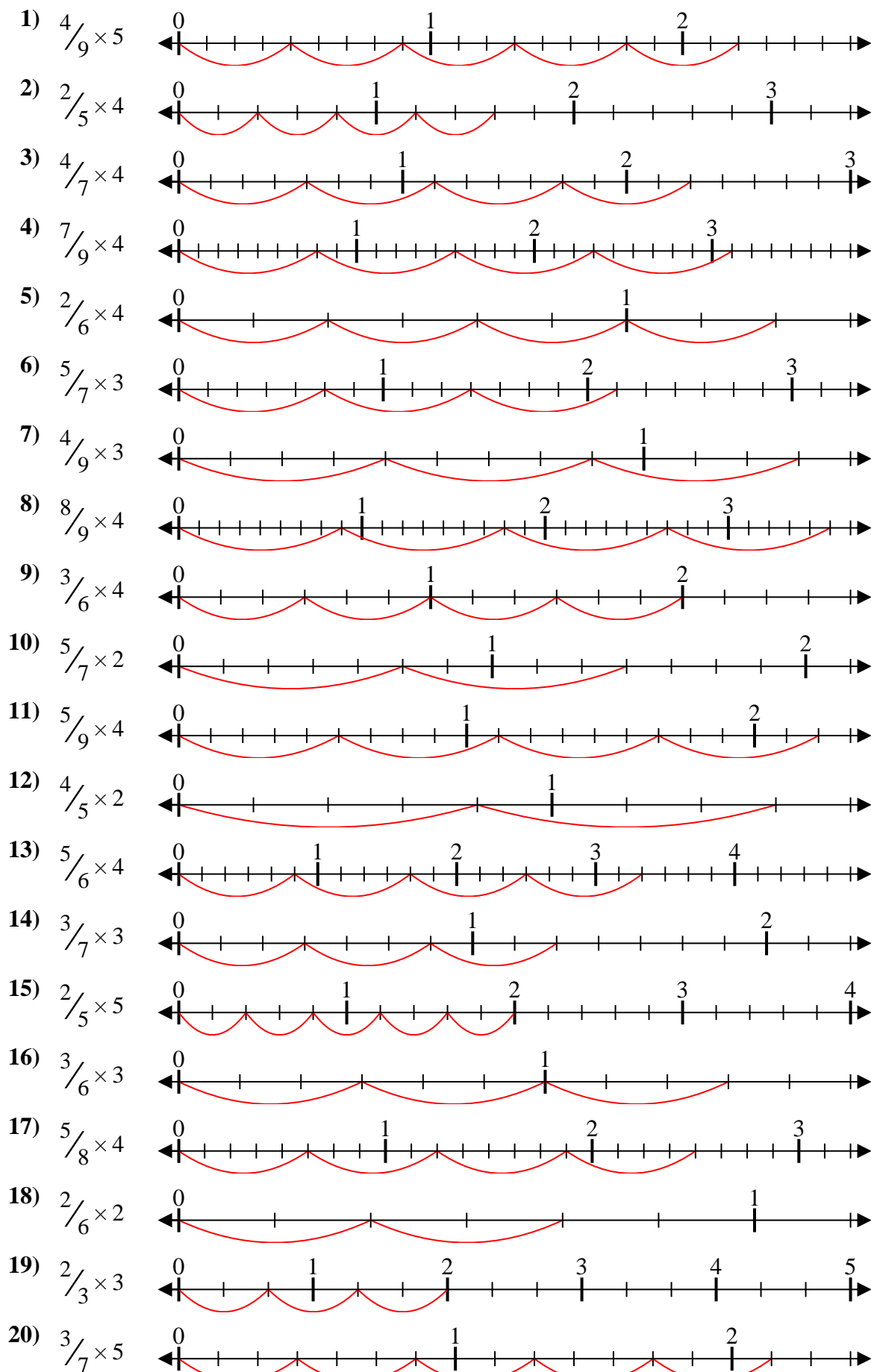
18. _____

19. _____

20. _____



Solve each problem.



Answers

1. $\frac{20}{9} = 2\frac{2}{9}$
2. $\frac{8}{5} = 1\frac{3}{5}$
3. $\frac{16}{7} = 2\frac{2}{7}$
4. $\frac{28}{9} = 3\frac{1}{9}$
5. $\frac{8}{6} = 1\frac{1}{3}$
6. $\frac{15}{7} = 2\frac{1}{7}$
7. $\frac{12}{9} = 1\frac{1}{3}$
8. $\frac{32}{9} = 3\frac{5}{9}$
9. $\frac{12}{6} = 2$
10. $\frac{10}{7} = 1\frac{3}{7}$
11. $\frac{20}{9} = 2\frac{2}{9}$
12. $\frac{8}{5} = 1\frac{3}{5}$
13. $\frac{20}{6} = 3\frac{1}{3}$
14. $\frac{9}{7} = 1\frac{2}{7}$
15. $\frac{10}{5} = 2$
16. $\frac{9}{6} = 1\frac{1}{2}$
17. $\frac{20}{8} = 2\frac{1}{2}$
18. $\frac{4}{6} = \frac{2}{3}$
19. $\frac{6}{3} = 2$
20. $\frac{15}{7} = 2\frac{1}{7}$