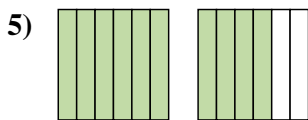

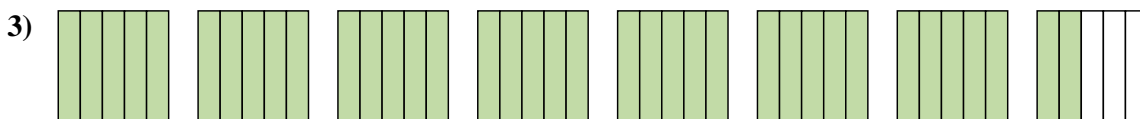
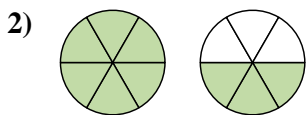
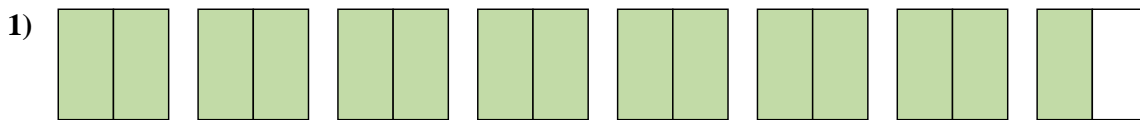
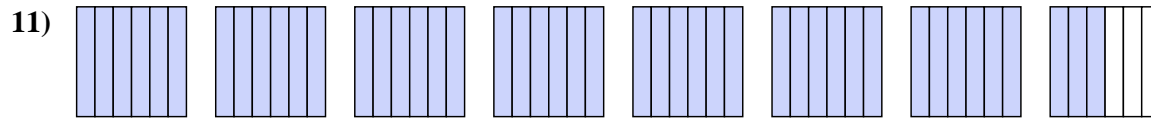
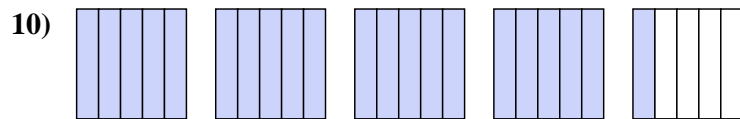
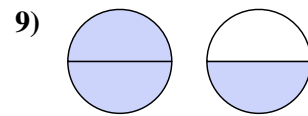
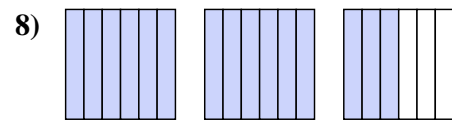
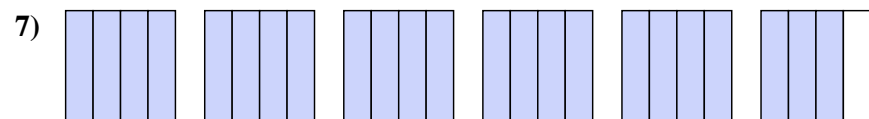
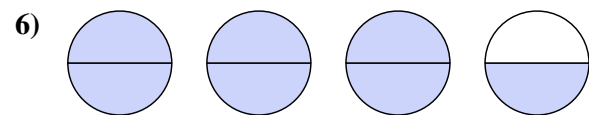




Write each amount as a mixed number.



Write each amount as an improper fraction.



Answers

1. $7\frac{1}{2}$

2. $1\frac{3}{6}$

3. $7\frac{2}{5}$

4. $3\frac{1}{3}$

5. $1\frac{4}{6}$

6. $\frac{7}{2}$

7. $\frac{23}{4}$

8. $\frac{15}{6}$

9. $\frac{3}{2}$

10. $\frac{21}{5}$

11. $\frac{45}{6}$