

































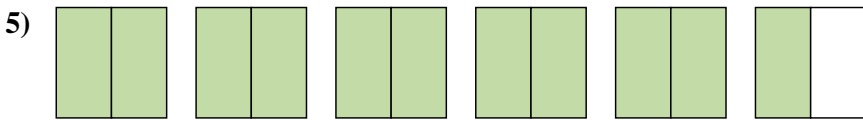
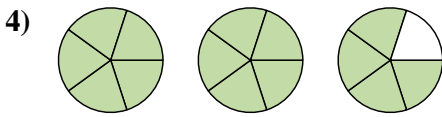
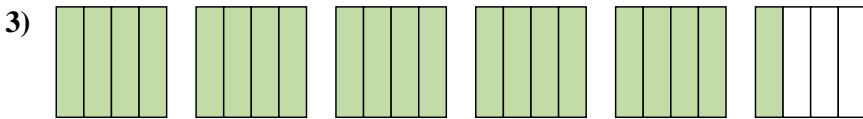
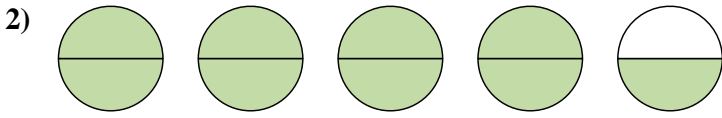
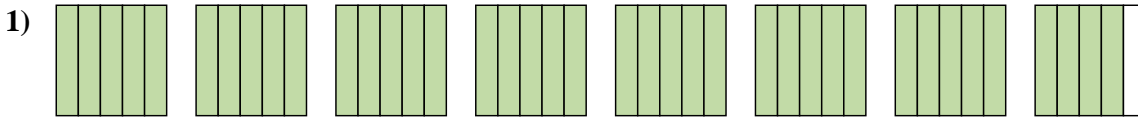




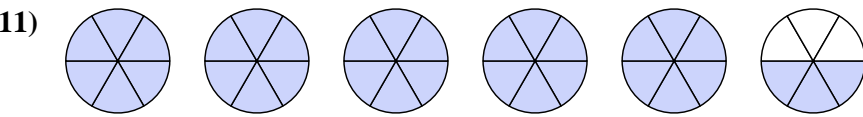
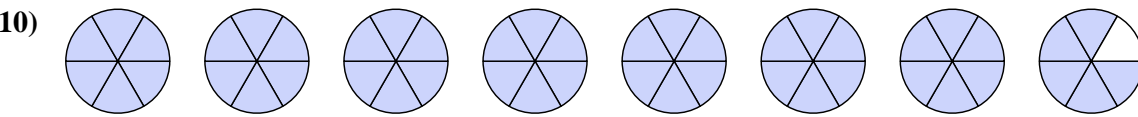
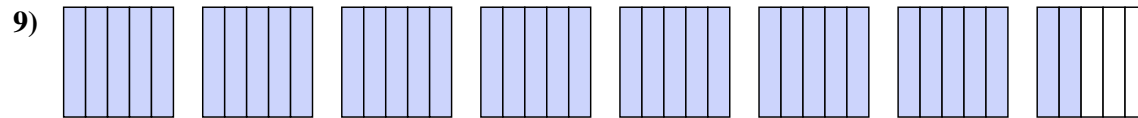
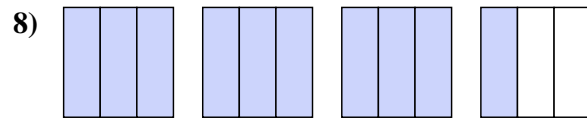
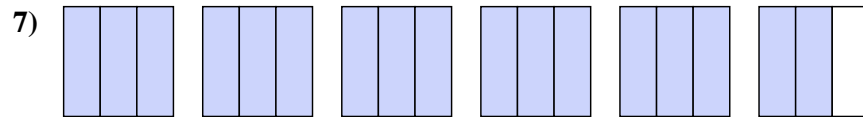
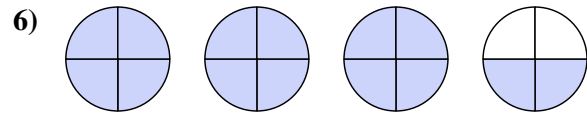




Write each amount as a mixed number.



Write each amount as an improper fraction.



Answers

1.  $7\frac{4}{5}$

2.  $4\frac{1}{2}$

3.  $5\frac{1}{5}$

4.  $2\frac{4}{5}$

5.  $5\frac{1}{2}$

6.  $\frac{14}{4}$

7.  $\frac{17}{3}$

8.  $\frac{10}{3}$

9.  $\frac{37}{5}$

10.  $\frac{47}{6}$

11.  $\frac{33}{6}$



