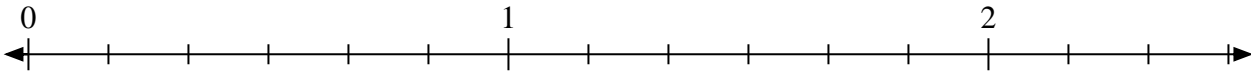


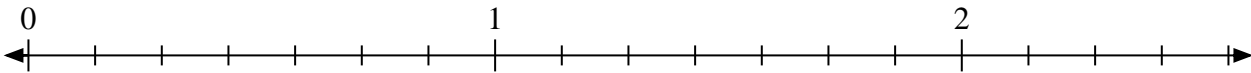


Solve each problem.


- 1) Mark the location of
- $\frac{11}{6}$



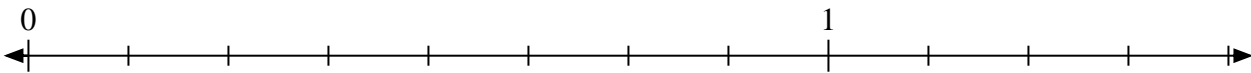
- 2) Mark the location of
- $\frac{14}{7}$



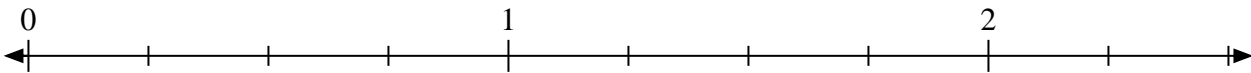
- 3) Mark the location of
- $\frac{6}{4}$



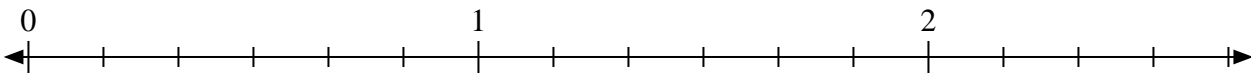
- 4) Mark the location of
- $\frac{11}{8}$



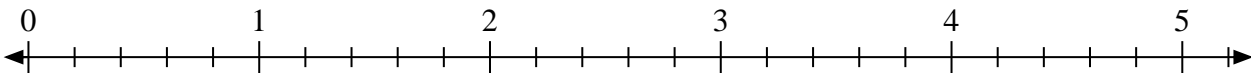
- 5) Mark the location of
- $\frac{8}{4}$



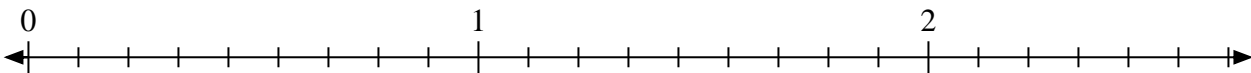
- 6) Mark the location of
- $\frac{15}{6}$



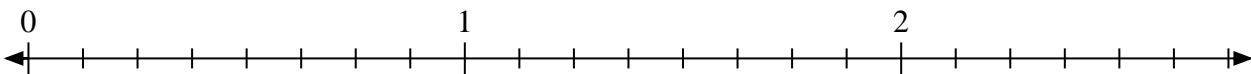
- 7) Mark the location of
- $\frac{12}{5}$



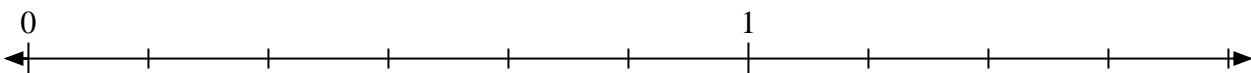
- 8) Mark the location of
- $\frac{11}{9}$



- 9) Mark the location of
- $\frac{14}{8}$



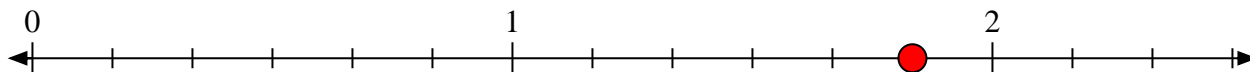
- 10) Mark the location of
- $\frac{9}{6}$



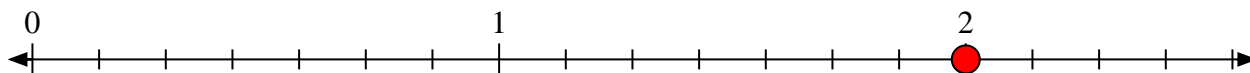


Solve each problem.

- 1) Mark the location of
- $\frac{11}{6}$



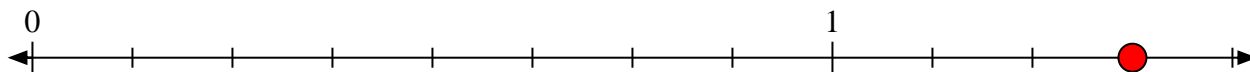
- 2) Mark the location of
- $\frac{14}{7}$



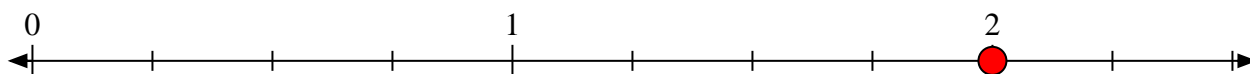
- 3) Mark the location of
- $\frac{6}{4}$



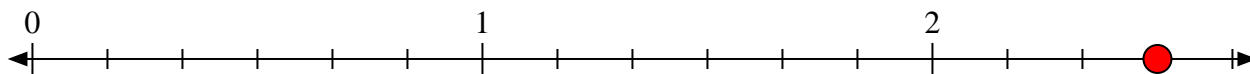
- 4) Mark the location of
- $\frac{11}{8}$



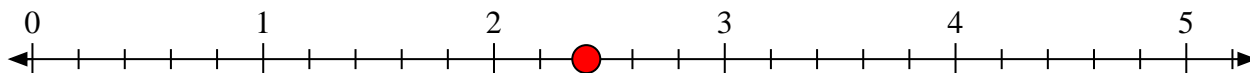
- 5) Mark the location of
- $\frac{8}{4}$



- 6) Mark the location of
- $\frac{15}{6}$



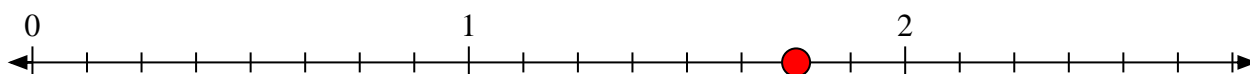
- 7) Mark the location of
- $\frac{12}{5}$



- 8) Mark the location of
- $\frac{11}{9}$



- 9) Mark the location of
- $\frac{14}{8}$



- 10) Mark the location of
- $\frac{9}{6}$

