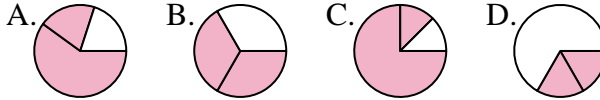




Determine which letter best represents each fraction.

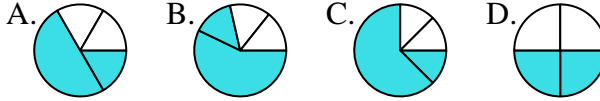
**Answers**

1) Which choice best represents  $\frac{2}{3}$ ?



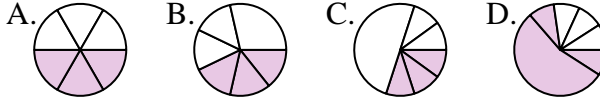
1. \_\_\_\_\_

2) Which choice best represents  $\frac{2}{4}$ ?



2. \_\_\_\_\_

3) Which choice best represents  $\frac{3}{6}$ ?



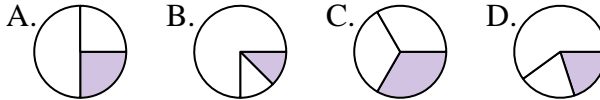
3. \_\_\_\_\_

4) Which choice best represents  $\frac{6}{8}$ ?



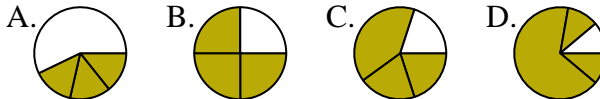
4. \_\_\_\_\_

5) Which choice best represents  $\frac{1}{3}$ ?



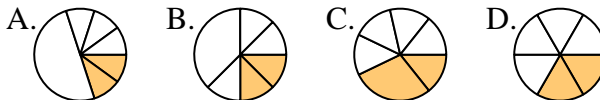
5. \_\_\_\_\_

6) Which choice best represents  $\frac{3}{4}$ ?



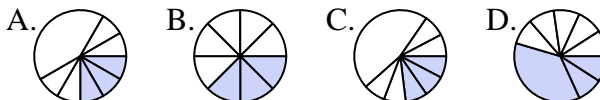
6. \_\_\_\_\_

7) Which choice best represents  $\frac{2}{6}$ ?



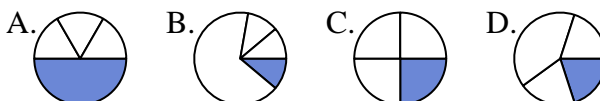
7. \_\_\_\_\_

8) Which choice best represents  $\frac{3}{8}$ ?



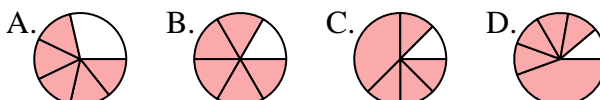
8. \_\_\_\_\_

9) Which choice best represents  $\frac{1}{4}$ ?



9. \_\_\_\_\_

10) Which choice best represents  $\frac{5}{6}$ ?



10. \_\_\_\_\_

11) Which choice best represents  $\frac{2}{8}$ ?



11. \_\_\_\_\_

12) Which choice best represents  $\frac{4}{6}$ ?



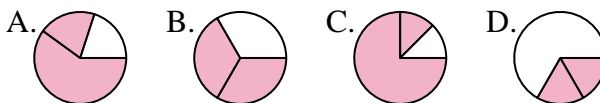
12. \_\_\_\_\_



Determine which letter best represents each fraction.

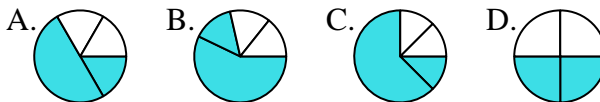
**Answers**

1) Which choice best represents  $\frac{2}{3}$ ?



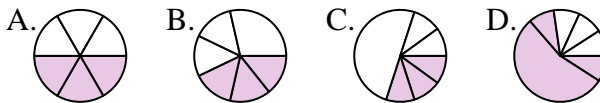
1. **B**

2) Which choice best represents  $\frac{2}{4}$ ?



2. **D**

3) Which choice best represents  $\frac{3}{6}$ ?



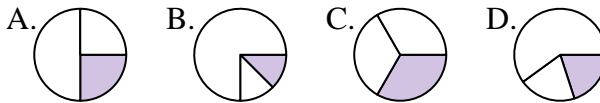
3. **A**

4) Which choice best represents  $\frac{6}{8}$ ?



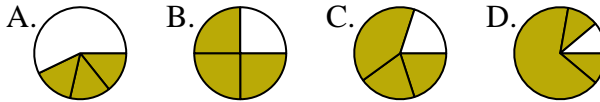
4. **A**

5) Which choice best represents  $\frac{1}{3}$ ?



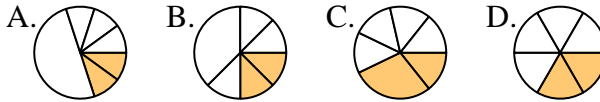
5. **C**

6) Which choice best represents  $\frac{3}{4}$ ?



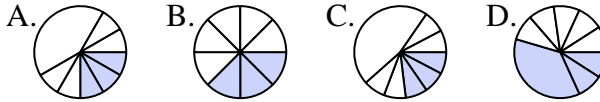
6. **B**

7) Which choice best represents  $\frac{2}{6}$ ?



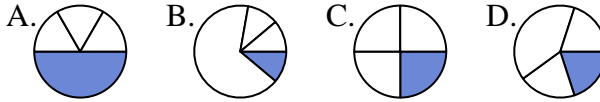
7. **D**

8) Which choice best represents  $\frac{3}{8}$ ?



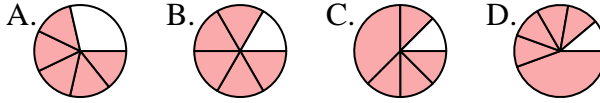
8. **B**

9) Which choice best represents  $\frac{1}{4}$ ?



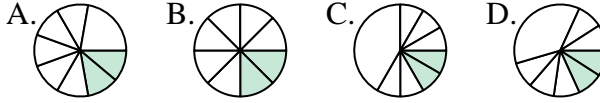
9. **C**

10) Which choice best represents  $\frac{5}{6}$ ?



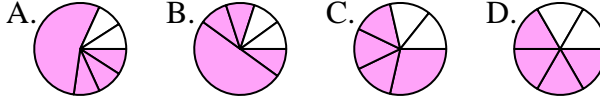
10. **B**

11) Which choice best represents  $\frac{2}{8}$ ?



11. **B**

12) Which choice best represents  $\frac{4}{6}$ ?



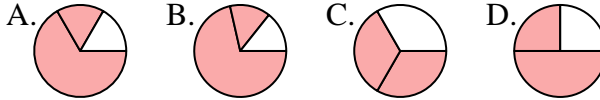
12. **D**



Determine which letter best represents each fraction.

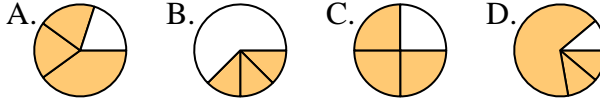
**Answers**

1) Which choice best represents  $\frac{2}{3}$ ?



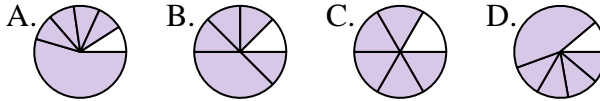
1. \_\_\_\_\_

2) Which choice best represents  $\frac{3}{4}$ ?



2. \_\_\_\_\_

3) Which choice best represents  $\frac{5}{6}$ ?



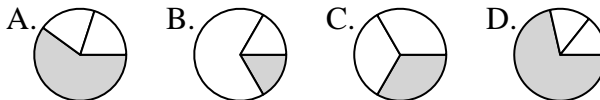
4. \_\_\_\_\_

4) Which choice best represents  $\frac{6}{8}$ ?



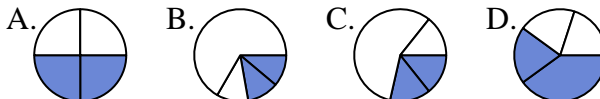
6. \_\_\_\_\_

5) Which choice best represents  $\frac{1}{3}$ ?



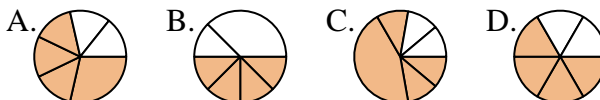
7. \_\_\_\_\_

6) Which choice best represents  $\frac{2}{4}$ ?



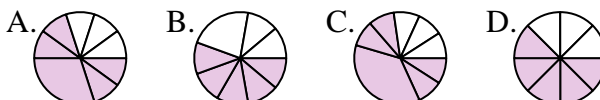
9. \_\_\_\_\_

7) Which choice best represents  $\frac{4}{6}$ ?



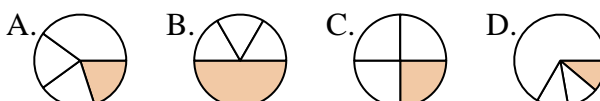
11. \_\_\_\_\_

8) Which choice best represents  $\frac{5}{8}$ ?



12. \_\_\_\_\_

9) Which choice best represents  $\frac{1}{4}$ ?



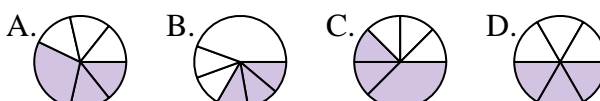
10) Which choice best represents  $\frac{1}{6}$ ?



11) Which choice best represents  $\frac{4}{8}$ ?



12) Which choice best represents  $\frac{3}{6}$ ?

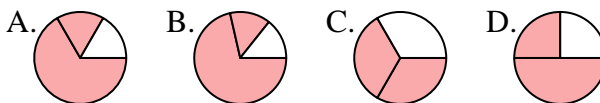




Determine which letter best represents each fraction.

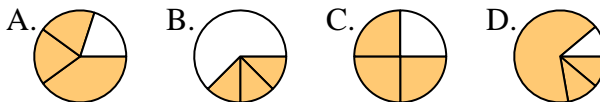
**Answers**

1) Which choice best represents  $\frac{2}{3}$ ?



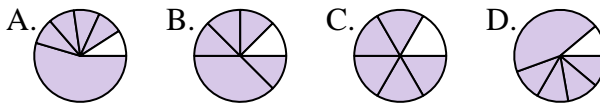
1.     **C**    

2) Which choice best represents  $\frac{3}{4}$ ?



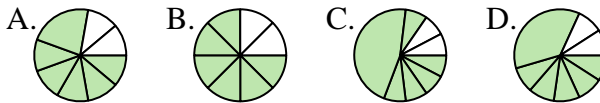
2.     **C**    

3) Which choice best represents  $\frac{5}{6}$ ?



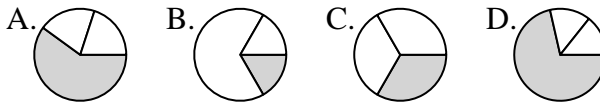
3.     **C**    

4) Which choice best represents  $\frac{6}{8}$ ?



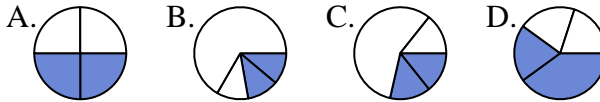
4.     **B**    

5) Which choice best represents  $\frac{1}{3}$ ?



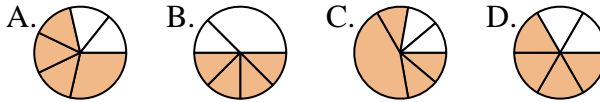
5.     **C**    

6) Which choice best represents  $\frac{2}{4}$ ?



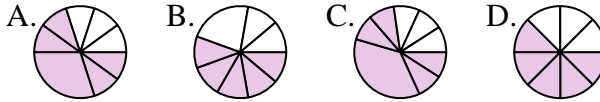
6.     **A**    

7) Which choice best represents  $\frac{4}{6}$ ?



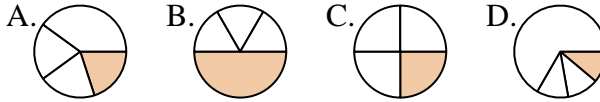
7.     **D**    

8) Which choice best represents  $\frac{5}{8}$ ?



8.     **D**    

9) Which choice best represents  $\frac{1}{4}$ ?



9.     **C**    

10) Which choice best represents  $\frac{1}{6}$ ?



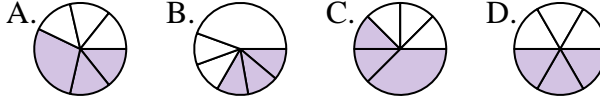
10.     **A**    

11) Which choice best represents  $\frac{4}{8}$ ?



11.     **A**    

12) Which choice best represents  $\frac{3}{6}$ ?



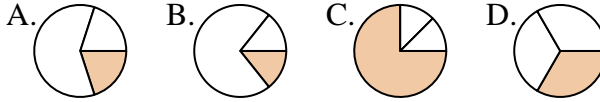
12.     **D**



Determine which letter best represents each fraction.

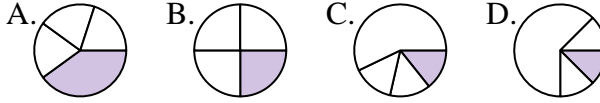
**Answers**

1) Which choice best represents  $\frac{1}{3}$ ?



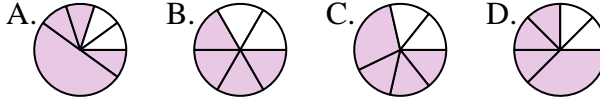
1. \_\_\_\_\_

2) Which choice best represents  $\frac{1}{4}$ ?



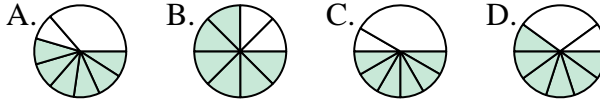
2. \_\_\_\_\_

3) Which choice best represents  $\frac{4}{6}$ ?



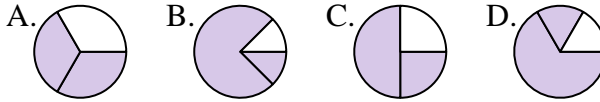
3. \_\_\_\_\_

4) Which choice best represents  $\frac{6}{8}$ ?



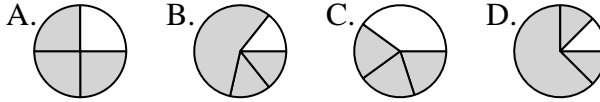
4. \_\_\_\_\_

5) Which choice best represents  $\frac{2}{3}$ ?



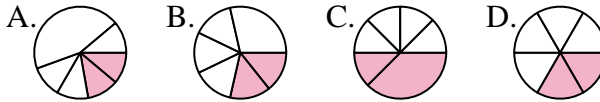
5. \_\_\_\_\_

6) Which choice best represents  $\frac{3}{4}$ ?



6. \_\_\_\_\_

7) Which choice best represents  $\frac{2}{6}$ ?



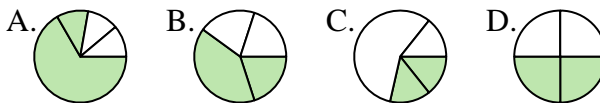
7. \_\_\_\_\_

8) Which choice best represents  $\frac{1}{8}$ ?



8. \_\_\_\_\_

9) Which choice best represents  $\frac{2}{4}$ ?



9. \_\_\_\_\_

10) Which choice best represents  $\frac{1}{6}$ ?



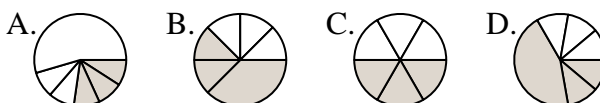
10. \_\_\_\_\_

11) Which choice best represents  $\frac{4}{8}$ ?



11. \_\_\_\_\_

12) Which choice best represents  $\frac{3}{6}$ ?



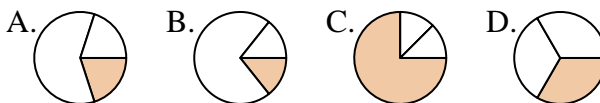
12. \_\_\_\_\_



Determine which letter best represents each fraction.

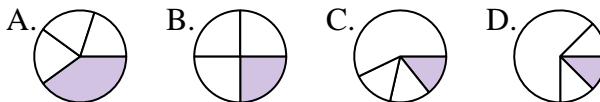
**Answers**

1) Which choice best represents  $\frac{1}{3}$ ?



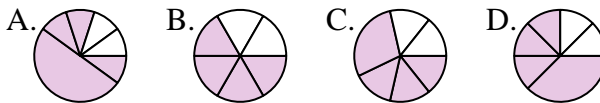
1.     **D**    

2) Which choice best represents  $\frac{1}{4}$ ?



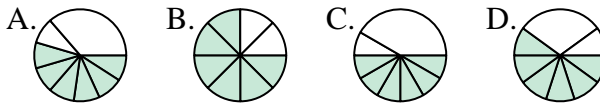
2.     **B**    

3) Which choice best represents  $\frac{4}{6}$ ?



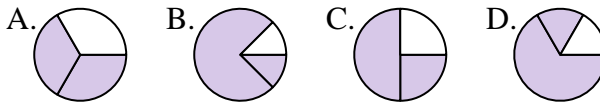
3.     **B**    

4) Which choice best represents  $\frac{6}{8}$ ?



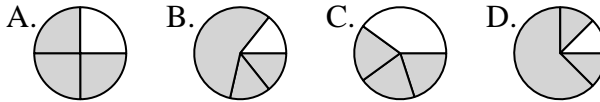
4.     **B**    

5) Which choice best represents  $\frac{2}{3}$ ?



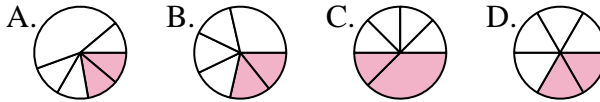
5.     **A**    

6) Which choice best represents  $\frac{3}{4}$ ?



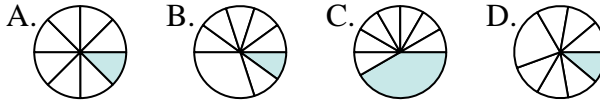
6.     **A**    

7) Which choice best represents  $\frac{2}{6}$ ?



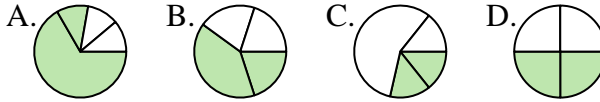
7.     **D**    

8) Which choice best represents  $\frac{1}{8}$ ?



8.     **A**    

9) Which choice best represents  $\frac{2}{4}$ ?



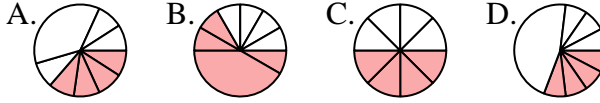
9.     **D**    

10) Which choice best represents  $\frac{1}{6}$ ?



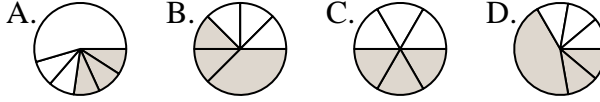
10.     **D**    

11) Which choice best represents  $\frac{4}{8}$ ?



11.     **C**    

12) Which choice best represents  $\frac{3}{6}$ ?



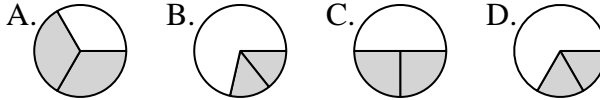
12.     **C**



Determine which letter best represents each fraction.

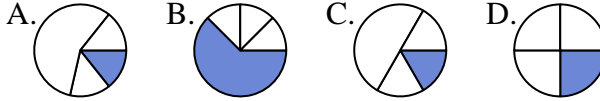
**Answers**

1) Which choice best represents  $\frac{2}{3}$ ?



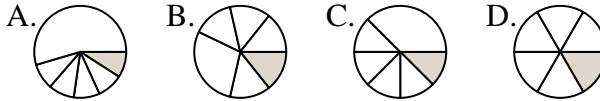
1. \_\_\_\_\_

2) Which choice best represents  $\frac{1}{4}$ ?



2. \_\_\_\_\_

3) Which choice best represents  $\frac{1}{6}$ ?



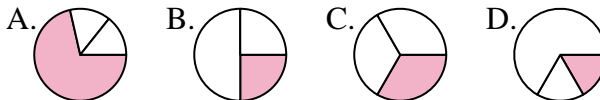
3. \_\_\_\_\_

4) Which choice best represents  $\frac{5}{8}$ ?



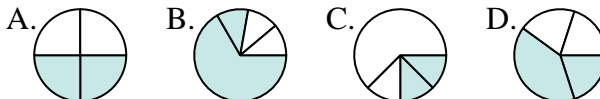
4. \_\_\_\_\_

5) Which choice best represents  $\frac{1}{3}$ ?



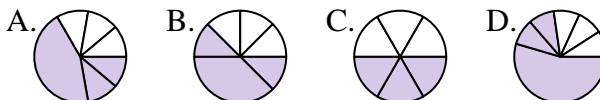
5. \_\_\_\_\_

6) Which choice best represents  $\frac{2}{4}$ ?



6. \_\_\_\_\_

7) Which choice best represents  $\frac{3}{6}$ ?



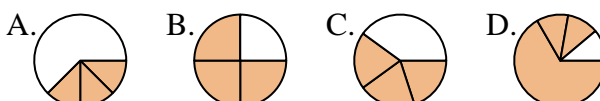
7. \_\_\_\_\_

8) Which choice best represents  $\frac{7}{8}$ ?



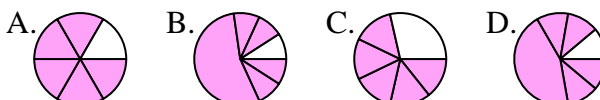
8. \_\_\_\_\_

9) Which choice best represents  $\frac{3}{4}$ ?



9. \_\_\_\_\_

10) Which choice best represents  $\frac{5}{6}$ ?



10. \_\_\_\_\_

11) Which choice best represents  $\frac{6}{8}$ ?



11. \_\_\_\_\_

12) Which choice best represents  $\frac{4}{6}$ ?



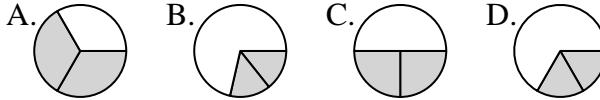
12. \_\_\_\_\_



Determine which letter best represents each fraction.

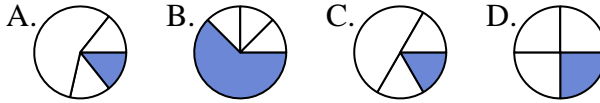
**Answers**

1) Which choice best represents  $\frac{2}{3}$ ?



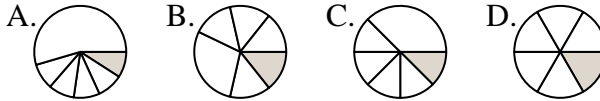
1. **A**

2) Which choice best represents  $\frac{1}{4}$ ?



2. **D**

3) Which choice best represents  $\frac{1}{6}$ ?



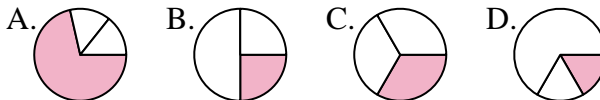
3. **D**

4) Which choice best represents  $\frac{5}{8}$ ?



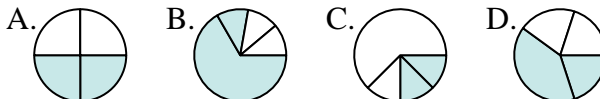
4. **D**

5) Which choice best represents  $\frac{1}{3}$ ?



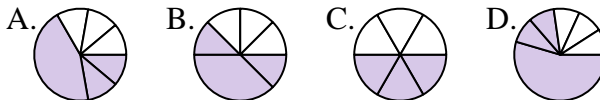
5. **C**

6) Which choice best represents  $\frac{2}{4}$ ?



6. **A**

7) Which choice best represents  $\frac{3}{6}$ ?



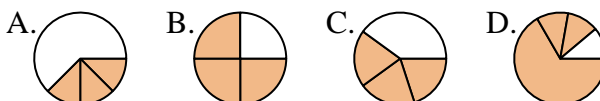
7. **C**

8) Which choice best represents  $\frac{7}{8}$ ?



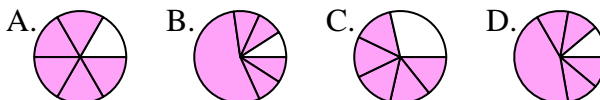
8. **D**

9) Which choice best represents  $\frac{3}{4}$ ?



9. **B**

10) Which choice best represents  $\frac{5}{6}$ ?



10. **A**

11) Which choice best represents  $\frac{6}{8}$ ?



11. **B**

12) Which choice best represents  $\frac{4}{6}$ ?



12. **B**

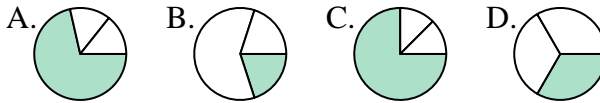




Determine which letter best represents each fraction.

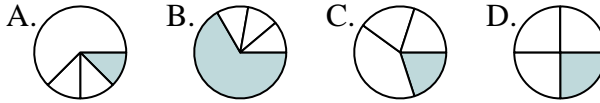
**Answers**

1) Which choice best represents  $\frac{1}{3}$ ?



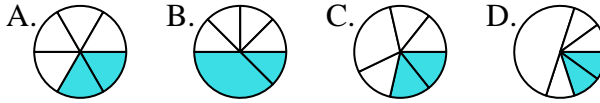
1. \_\_\_\_\_

2) Which choice best represents  $\frac{1}{4}$ ?



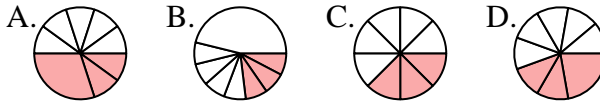
2. \_\_\_\_\_

3) Which choice best represents  $\frac{2}{6}$ ?



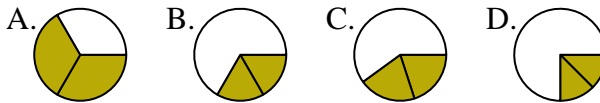
3. \_\_\_\_\_

4) Which choice best represents  $\frac{3}{8}$ ?



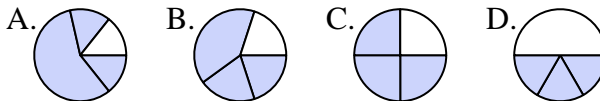
4. \_\_\_\_\_

5) Which choice best represents  $\frac{2}{3}$ ?



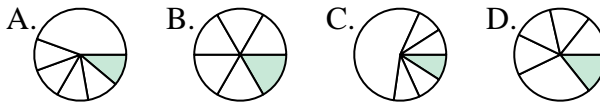
5. \_\_\_\_\_

6) Which choice best represents  $\frac{3}{4}$ ?



6. \_\_\_\_\_

7) Which choice best represents  $\frac{1}{6}$ ?



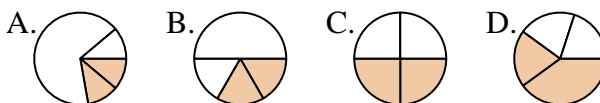
7. \_\_\_\_\_

8) Which choice best represents  $\frac{1}{8}$ ?



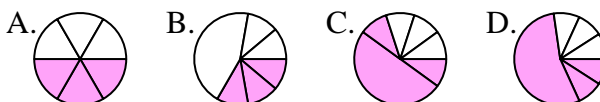
8. \_\_\_\_\_

9) Which choice best represents  $\frac{2}{4}$ ?



9. \_\_\_\_\_

10) Which choice best represents  $\frac{3}{6}$ ?



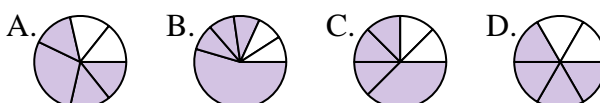
10. \_\_\_\_\_

11) Which choice best represents  $\frac{5}{8}$ ?



11. \_\_\_\_\_

12) Which choice best represents  $\frac{4}{6}$ ?



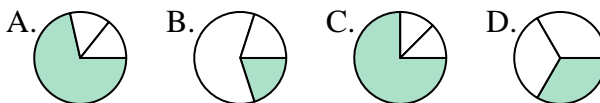
12. \_\_\_\_\_



Determine which letter best represents each fraction.

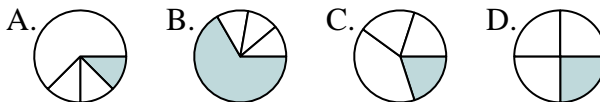
**Answers**

1) Which choice best represents  $\frac{1}{3}$ ?



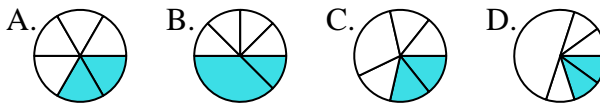
1.   **D**  

2) Which choice best represents  $\frac{1}{4}$ ?



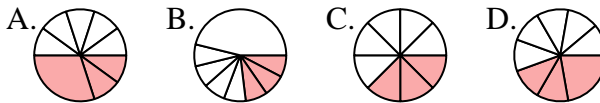
2.   **D**  

3) Which choice best represents  $\frac{2}{6}$ ?



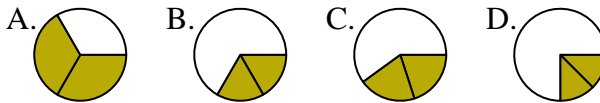
3.   **A**  

4) Which choice best represents  $\frac{3}{8}$ ?



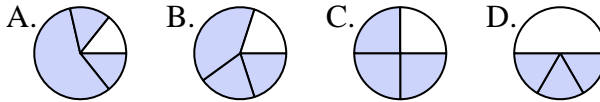
4.   **C**  

5) Which choice best represents  $\frac{2}{3}$ ?



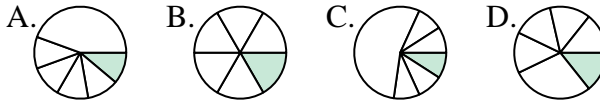
5.   **A**  

6) Which choice best represents  $\frac{3}{4}$ ?



6.   **C**  

7) Which choice best represents  $\frac{1}{6}$ ?



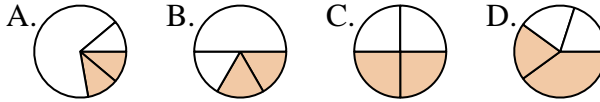
7.   **B**  

8) Which choice best represents  $\frac{1}{8}$ ?



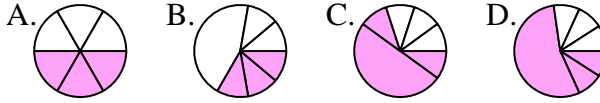
8.   **A**  

9) Which choice best represents  $\frac{2}{4}$ ?



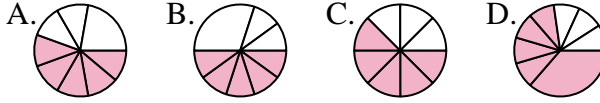
9.   **C**  

10) Which choice best represents  $\frac{3}{6}$ ?



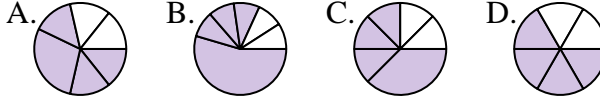
10.   **A**  

11) Which choice best represents  $\frac{5}{8}$ ?



11.   **C**  

12) Which choice best represents  $\frac{4}{6}$ ?



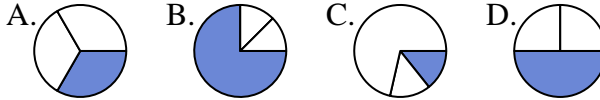
12.   **D**



Determine which letter best represents each fraction.

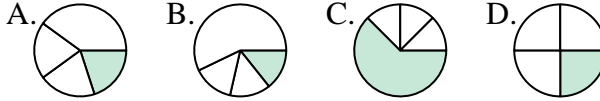
**Answers**

1) Which choice best represents  $\frac{1}{3}$ ?



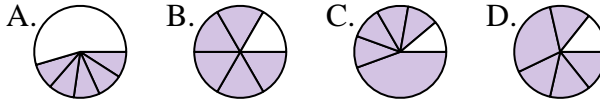
1. \_\_\_\_\_

2) Which choice best represents  $\frac{1}{4}$ ?



2. \_\_\_\_\_

3) Which choice best represents  $\frac{5}{6}$ ?



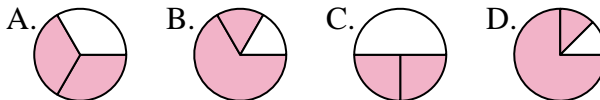
3. \_\_\_\_\_

4) Which choice best represents  $\frac{1}{8}$ ?



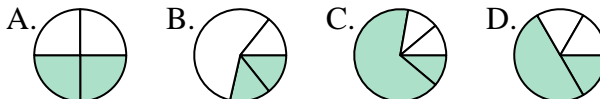
4. \_\_\_\_\_

5) Which choice best represents  $\frac{2}{3}$ ?



5. \_\_\_\_\_

6) Which choice best represents  $\frac{2}{4}$ ?



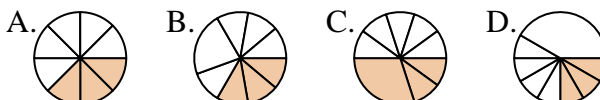
6. \_\_\_\_\_

7) Which choice best represents  $\frac{1}{6}$ ?



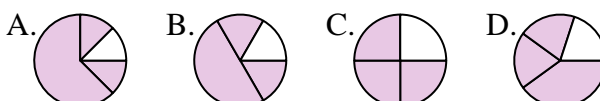
7. \_\_\_\_\_

8) Which choice best represents  $\frac{3}{8}$ ?



8. \_\_\_\_\_

9) Which choice best represents  $\frac{3}{4}$ ?



9. \_\_\_\_\_

10) Which choice best represents  $\frac{4}{6}$ ?



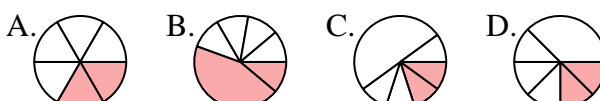
10. \_\_\_\_\_

11) Which choice best represents  $\frac{6}{8}$ ?



11. \_\_\_\_\_

12) Which choice best represents  $\frac{2}{6}$ ?



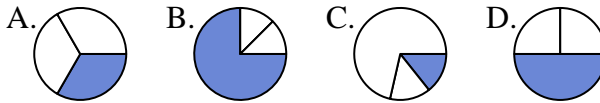
12. \_\_\_\_\_



Determine which letter best represents each fraction.

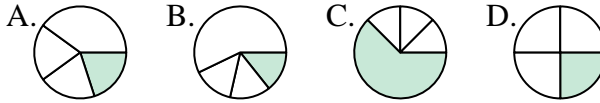
**Answers**

1) Which choice best represents  $\frac{1}{3}$ ?



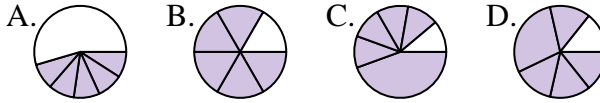
1. **A**

2) Which choice best represents  $\frac{1}{4}$ ?



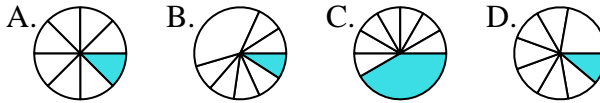
2. **D**

3) Which choice best represents  $\frac{5}{6}$ ?



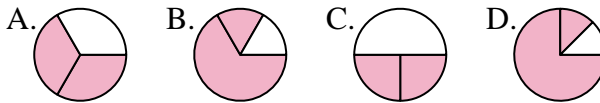
3. **B**

4) Which choice best represents  $\frac{1}{8}$ ?



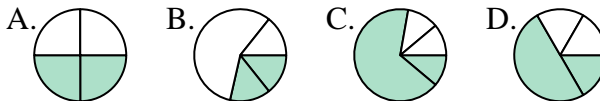
4. **A**

5) Which choice best represents  $\frac{2}{3}$ ?



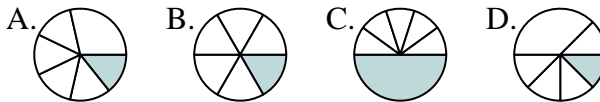
5. **A**

6) Which choice best represents  $\frac{2}{4}$ ?



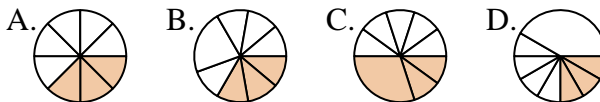
6. **A**

7) Which choice best represents  $\frac{1}{6}$ ?



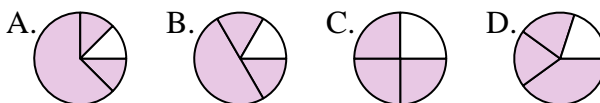
7. **B**

8) Which choice best represents  $\frac{3}{8}$ ?



8. **A**

9) Which choice best represents  $\frac{3}{4}$ ?



9. **C**

10) Which choice best represents  $\frac{4}{6}$ ?



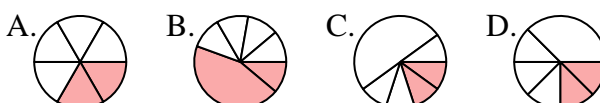
10. **B**

11) Which choice best represents  $\frac{6}{8}$ ?



11. **D**

12) Which choice best represents  $\frac{2}{6}$ ?



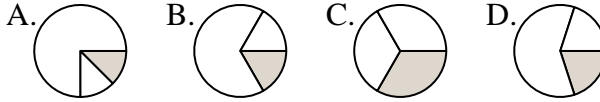
12. **A**



Determine which letter best represents each fraction.

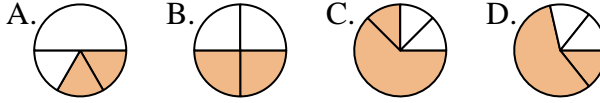
**Answers**

1) Which choice best represents  $\frac{1}{3}$ ?



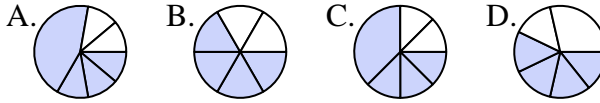
1. \_\_\_\_\_

2) Which choice best represents  $\frac{2}{4}$ ?



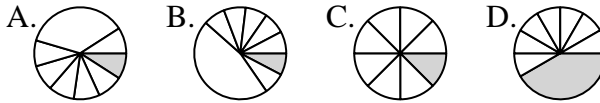
2. \_\_\_\_\_

3) Which choice best represents  $\frac{4}{6}$ ?



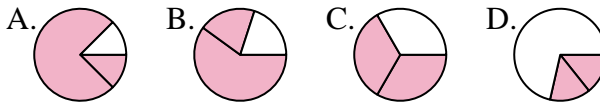
3. \_\_\_\_\_

4) Which choice best represents  $\frac{1}{8}$ ?



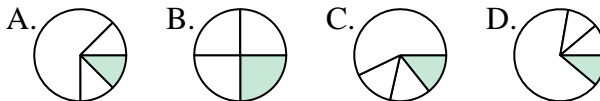
4. \_\_\_\_\_

5) Which choice best represents  $\frac{2}{3}$ ?



5. \_\_\_\_\_

6) Which choice best represents  $\frac{1}{4}$ ?



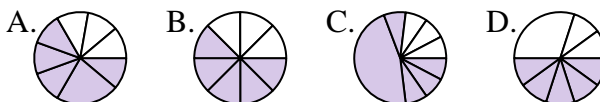
6. \_\_\_\_\_

7) Which choice best represents  $\frac{3}{6}$ ?



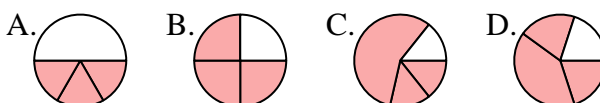
7. \_\_\_\_\_

8) Which choice best represents  $\frac{5}{8}$ ?



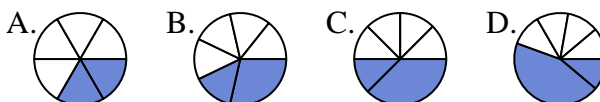
8. \_\_\_\_\_

9) Which choice best represents  $\frac{3}{4}$ ?



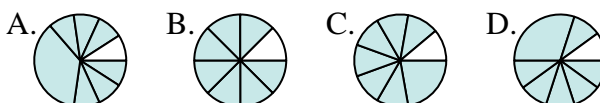
9. \_\_\_\_\_

10) Which choice best represents  $\frac{2}{6}$ ?



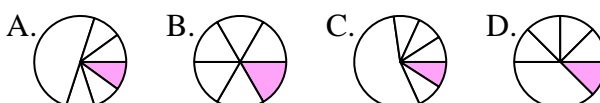
10. \_\_\_\_\_

11) Which choice best represents  $\frac{7}{8}$ ?



11. \_\_\_\_\_

12) Which choice best represents  $\frac{1}{6}$ ?



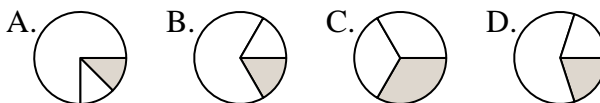
12. \_\_\_\_\_



Determine which letter best represents each fraction.

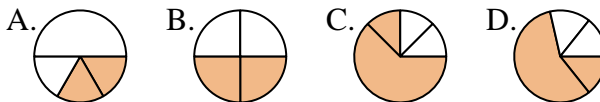
**Answers**

1) Which choice best represents  $\frac{1}{3}$ ?



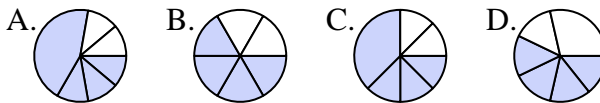
1.     **C**    

2) Which choice best represents  $\frac{2}{4}$ ?



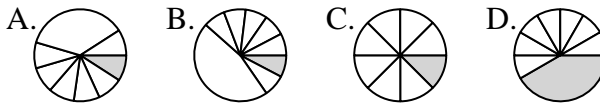
2.     **B**    

3) Which choice best represents  $\frac{4}{6}$ ?



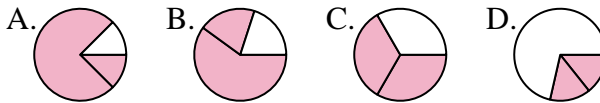
3.     **B**    

4) Which choice best represents  $\frac{1}{8}$ ?



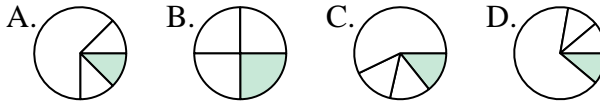
4.     **C**    

5) Which choice best represents  $\frac{2}{3}$ ?



5.     **C**    

6) Which choice best represents  $\frac{1}{4}$ ?



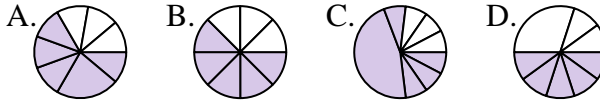
6.     **B**    

7) Which choice best represents  $\frac{3}{6}$ ?



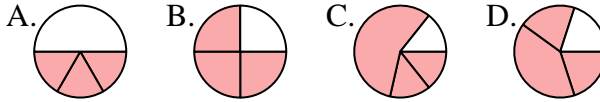
7.     **A**    

8) Which choice best represents  $\frac{5}{8}$ ?



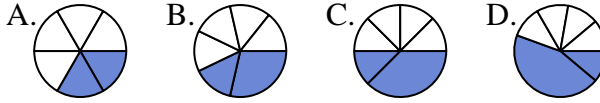
8.     **B**    

9) Which choice best represents  $\frac{3}{4}$ ?



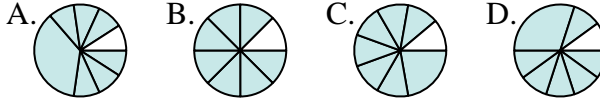
9.     **B**    

10) Which choice best represents  $\frac{2}{6}$ ?



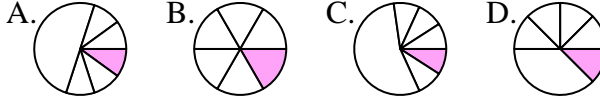
10.     **A**    

11) Which choice best represents  $\frac{7}{8}$ ?



11.     **B**    

12) Which choice best represents  $\frac{1}{6}$ ?



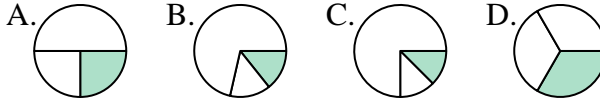
12.     **B**



Determine which letter best represents each fraction.

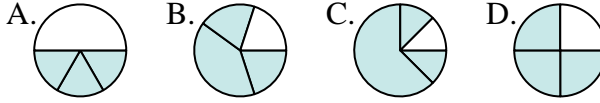
**Answers**

1) Which choice best represents  $\frac{1}{3}$ ?



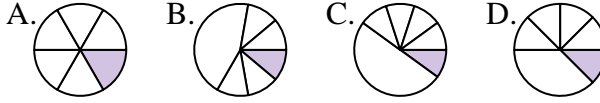
1. \_\_\_\_\_

2) Which choice best represents  $\frac{3}{4}$ ?



2. \_\_\_\_\_

3) Which choice best represents  $\frac{1}{6}$ ?



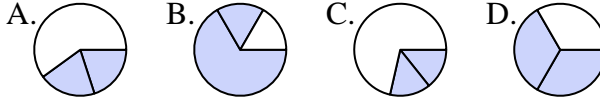
3. \_\_\_\_\_

4) Which choice best represents  $\frac{5}{8}$ ?



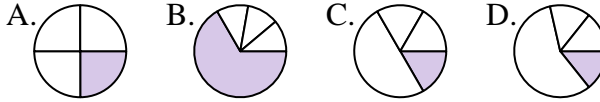
4. \_\_\_\_\_

5) Which choice best represents  $\frac{2}{3}$ ?



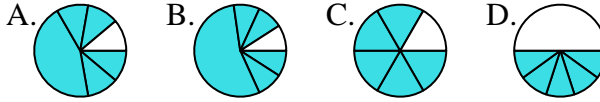
5. \_\_\_\_\_

6) Which choice best represents  $\frac{1}{4}$ ?



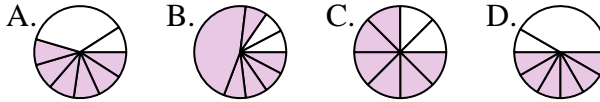
6. \_\_\_\_\_

7) Which choice best represents  $\frac{5}{6}$ ?



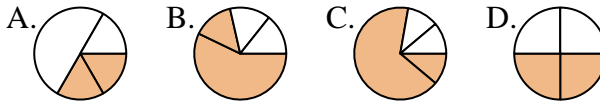
7. \_\_\_\_\_

8) Which choice best represents  $\frac{6}{8}$ ?



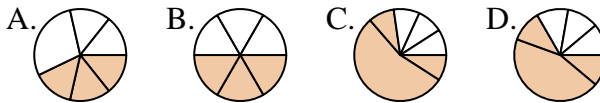
8. \_\_\_\_\_

9) Which choice best represents  $\frac{2}{4}$ ?



9. \_\_\_\_\_

10) Which choice best represents  $\frac{3}{6}$ ?



10. \_\_\_\_\_

11) Which choice best represents  $\frac{2}{8}$ ?



11. \_\_\_\_\_

12) Which choice best represents  $\frac{4}{6}$ ?



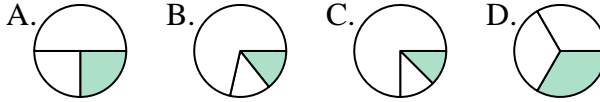
12. \_\_\_\_\_



Determine which letter best represents each fraction.

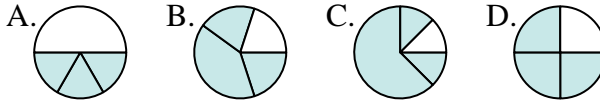
**Answers**

1) Which choice best represents  $\frac{1}{3}$ ?



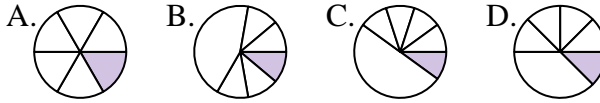
1.     **D**    

2) Which choice best represents  $\frac{3}{4}$ ?



2.     **D**    

3) Which choice best represents  $\frac{1}{6}$ ?



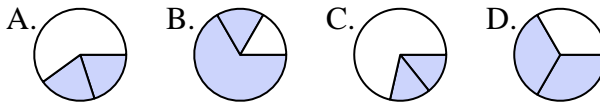
3.     **A**    

4) Which choice best represents  $\frac{5}{8}$ ?



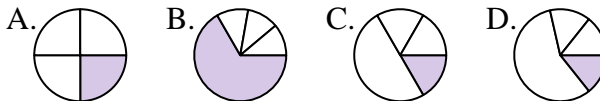
4.     **A**    

5) Which choice best represents  $\frac{2}{3}$ ?



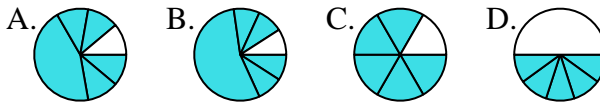
5.     **D**    

6) Which choice best represents  $\frac{1}{4}$ ?



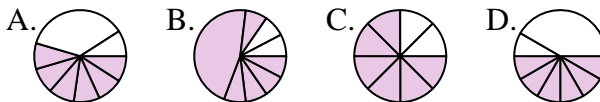
6.     **A**    

7) Which choice best represents  $\frac{5}{6}$ ?



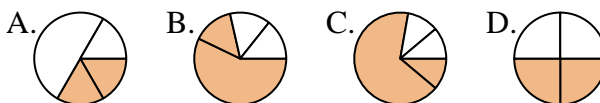
7.     **C**    

8) Which choice best represents  $\frac{6}{8}$ ?



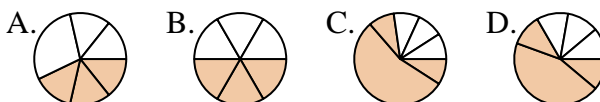
8.     **C**    

9) Which choice best represents  $\frac{2}{4}$ ?



9.     **D**    

10) Which choice best represents  $\frac{3}{6}$ ?



10.     **B**    

11) Which choice best represents  $\frac{2}{8}$ ?



11.     **C**    

12) Which choice best represents  $\frac{4}{6}$ ?



12.     **C**

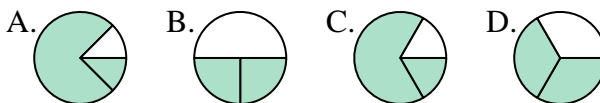




Determine which letter best represents each fraction.

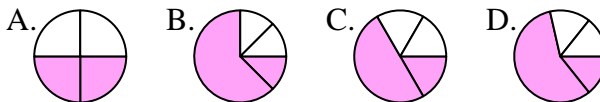
**Answers**

1) Which choice best represents  $\frac{2}{3}$ ?



1. \_\_\_\_\_

2) Which choice best represents  $\frac{2}{4}$ ?



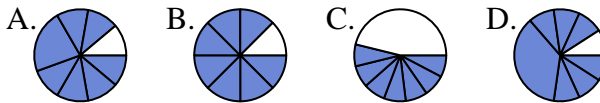
2. \_\_\_\_\_

3) Which choice best represents  $\frac{4}{6}$ ?



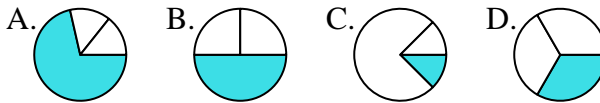
3. \_\_\_\_\_

4) Which choice best represents  $\frac{7}{8}$ ?



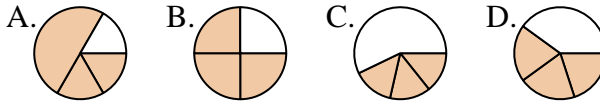
4. \_\_\_\_\_

5) Which choice best represents  $\frac{1}{3}$ ?



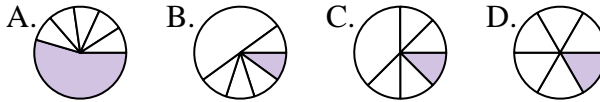
5. \_\_\_\_\_

6) Which choice best represents  $\frac{3}{4}$ ?



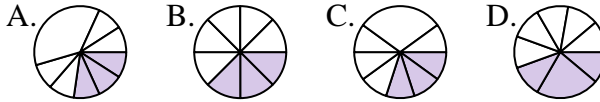
6. \_\_\_\_\_

7) Which choice best represents  $\frac{1}{6}$ ?



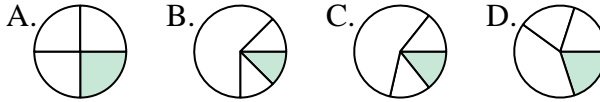
7. \_\_\_\_\_

8) Which choice best represents  $\frac{3}{8}$ ?



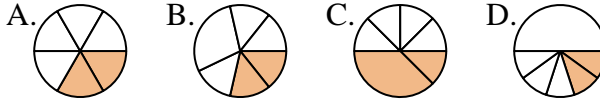
8. \_\_\_\_\_

9) Which choice best represents  $\frac{1}{4}$ ?



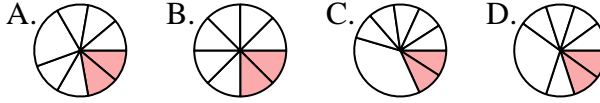
9. \_\_\_\_\_

10) Which choice best represents  $\frac{2}{6}$ ?



10. \_\_\_\_\_

11) Which choice best represents  $\frac{2}{8}$ ?



11. \_\_\_\_\_

12) Which choice best represents  $\frac{5}{6}$ ?



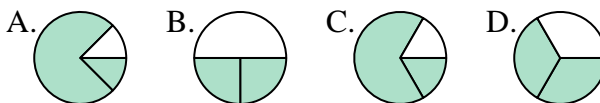
12. \_\_\_\_\_



Determine which letter best represents each fraction.

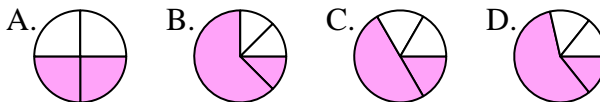
**Answers**

1) Which choice best represents  $\frac{2}{3}$ ?



1. **D**

2) Which choice best represents  $\frac{2}{4}$ ?



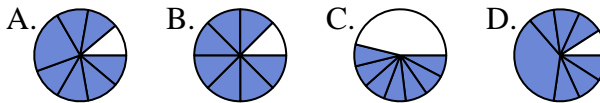
2. **A**

3) Which choice best represents  $\frac{4}{6}$ ?



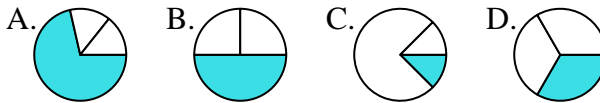
3. **D**

4) Which choice best represents  $\frac{7}{8}$ ?



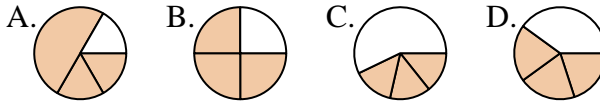
4. **B**

5) Which choice best represents  $\frac{1}{3}$ ?



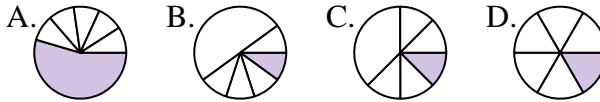
5. **D**

6) Which choice best represents  $\frac{3}{4}$ ?



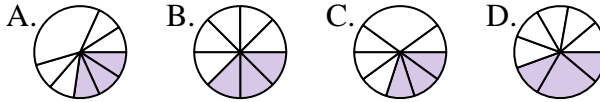
6. **B**

7) Which choice best represents  $\frac{1}{6}$ ?



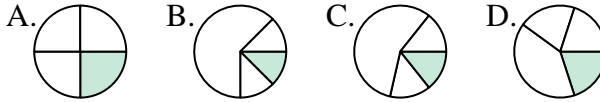
7. **D**

8) Which choice best represents  $\frac{3}{8}$ ?



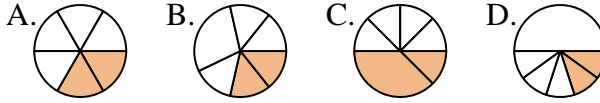
8. **B**

9) Which choice best represents  $\frac{1}{4}$ ?



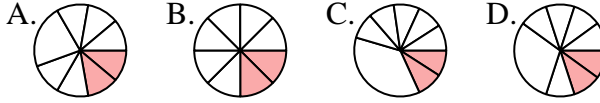
9. **A**

10) Which choice best represents  $\frac{2}{6}$ ?



10. **A**

11) Which choice best represents  $\frac{2}{8}$ ?



11. **B**

12) Which choice best represents  $\frac{5}{6}$ ?



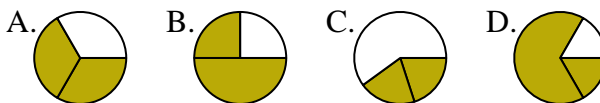
12. **C**



Determine which letter best represents each fraction.

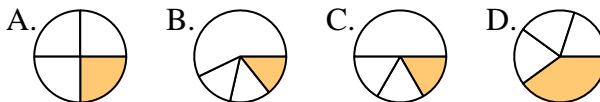
**Answers**

1) Which choice best represents  $\frac{2}{3}$ ?



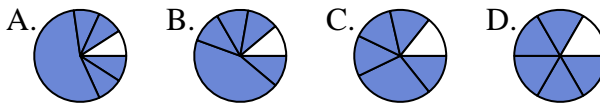
1. \_\_\_\_\_

2) Which choice best represents  $\frac{1}{4}$ ?



2. \_\_\_\_\_

3) Which choice best represents  $\frac{5}{6}$ ?



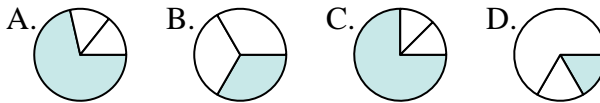
4. \_\_\_\_\_

4) Which choice best represents  $\frac{3}{8}$ ?



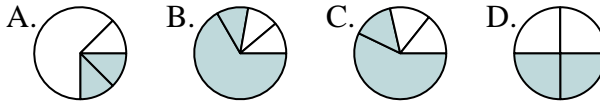
6. \_\_\_\_\_

5) Which choice best represents  $\frac{1}{3}$ ?



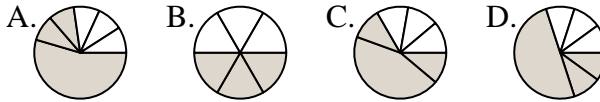
7. \_\_\_\_\_

6) Which choice best represents  $\frac{2}{4}$ ?



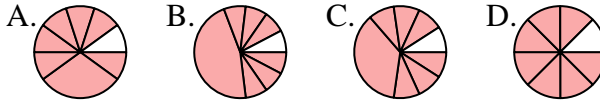
9. \_\_\_\_\_

7) Which choice best represents  $\frac{3}{6}$ ?



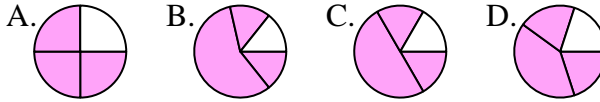
10. \_\_\_\_\_

8) Which choice best represents  $\frac{7}{8}$ ?



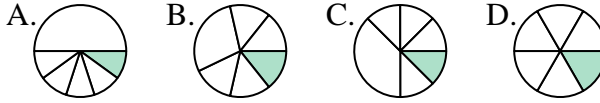
11. \_\_\_\_\_

9) Which choice best represents  $\frac{3}{4}$ ?

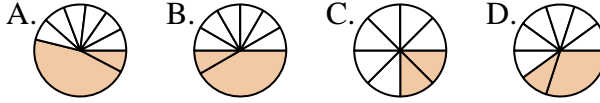


12. \_\_\_\_\_

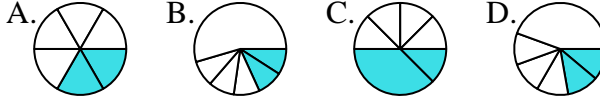
10) Which choice best represents  $\frac{1}{6}$ ?



11) Which choice best represents  $\frac{2}{8}$ ?



12) Which choice best represents  $\frac{2}{6}$ ?

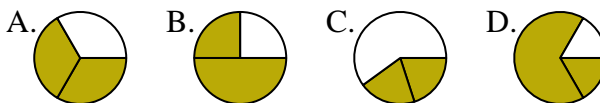




Determine which letter best represents each fraction.

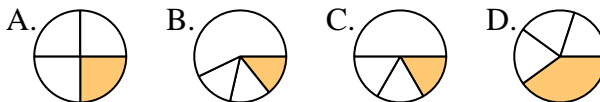
**Answers**

1) Which choice best represents  $\frac{2}{3}$ ?



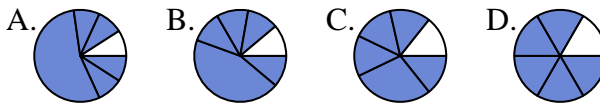
1. **A**

2) Which choice best represents  $\frac{1}{4}$ ?



2. **A**

3) Which choice best represents  $\frac{5}{6}$ ?



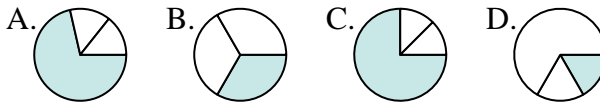
3. **D**

4) Which choice best represents  $\frac{3}{8}$ ?



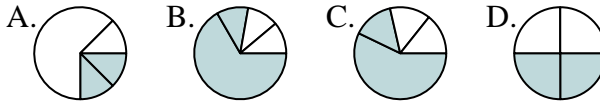
4. **D**

5) Which choice best represents  $\frac{1}{3}$ ?



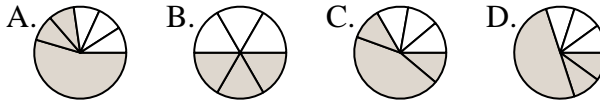
5. **B**

6) Which choice best represents  $\frac{2}{4}$ ?



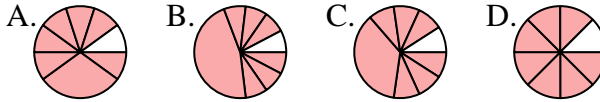
6. **D**

7) Which choice best represents  $\frac{3}{6}$ ?



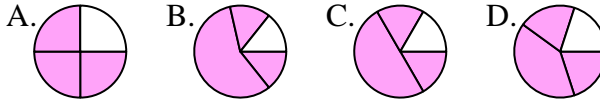
7. **B**

8) Which choice best represents  $\frac{7}{8}$ ?



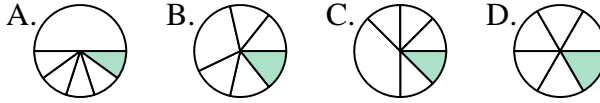
8. **D**

9) Which choice best represents  $\frac{3}{4}$ ?



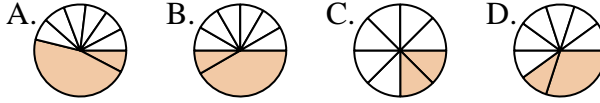
9. **A**

10) Which choice best represents  $\frac{1}{6}$ ?



10. **D**

11) Which choice best represents  $\frac{2}{8}$ ?



11. **C**

12) Which choice best represents  $\frac{2}{6}$ ?



12. **A**