

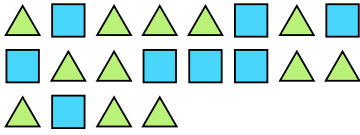







Solve each problem.

Ex) Express the triangles as a fraction of the entire set.



1) Express the stars as a fraction of the entire set.



**Answers**

Ex.  $\frac{12}{20}$

2) Express the moons as a fraction of the entire set.




3) Express the moons as a fraction of the entire set.



4) Express the stars as a fraction of the entire set.



5) Express the triangles as a fraction of the entire set.




6) Express the hearts as a fraction of the entire set.



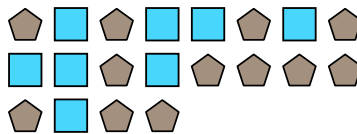
7) Express the hearts as a fraction of the entire set.



8) Express the hearts as a fraction of the entire set.




9) Express the squares as a fraction of the entire set.



10) Express the hearts as a fraction of the entire set.



11) Express the squares as a fraction of the entire set.

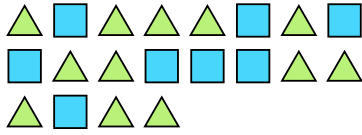


- 1. \_\_\_\_\_
- 2. \_\_\_\_\_
- 3. \_\_\_\_\_
- 4. \_\_\_\_\_
- 5. \_\_\_\_\_
- 6. \_\_\_\_\_
- 7. \_\_\_\_\_
- 8. \_\_\_\_\_
- 9. \_\_\_\_\_
- 10. \_\_\_\_\_
- 11. \_\_\_\_\_




Solve each problem.

Ex) Express the triangles as a fraction of the entire set.



1) Express the stars as a fraction of the entire set.



**Answers**

Ex.  $\frac{12}{20}$

2) Express the moons as a fraction of the entire set.



3) Express the moons as a fraction of the entire set.



1.  $\frac{3}{12}$

2.  $\frac{11}{13}$

3.  $\frac{10}{14}$


4.  $\frac{8}{19}$

5.  $\frac{8}{14}$

4) Express the stars as a fraction of the entire set.



5) Express the triangles as a fraction of the entire set.



6.  $\frac{2}{12}$

7.  $\frac{9}{22}$

8.  $\frac{9}{16}$

6) Express the hearts as a fraction of the entire set.



7) Express the hearts as a fraction of the entire set.




9.  $\frac{8}{20}$

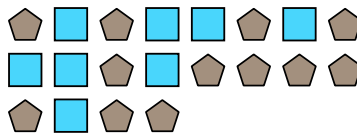
10.  $\frac{4}{6}$

11.  $\frac{13}{27}$

8) Express the hearts as a fraction of the entire set.




9) Express the squares as a fraction of the entire set.



10) Express the hearts as a fraction of the entire set.



11) Express the squares as a fraction of the entire set.





Solve each problem.

Ex) Express the moons as a fraction of the entire set.



1) Express the stars as a fraction of the entire set.



**Answers**

Ex.  $\frac{15}{22}$

1. \_\_\_\_\_

2. \_\_\_\_\_

3. \_\_\_\_\_

4. \_\_\_\_\_

5. \_\_\_\_\_

6. \_\_\_\_\_

7. \_\_\_\_\_

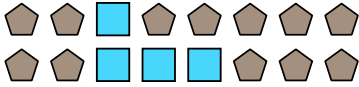
8. \_\_\_\_\_

9. \_\_\_\_\_


10. \_\_\_\_\_

11. \_\_\_\_\_


2) Express the squares as a fraction of the entire set.




3) Express the hearts as a fraction of the entire set.



4) Express the stars as a fraction of the entire set.



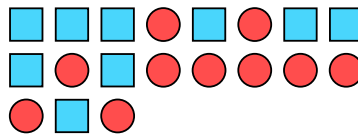
5) Express the hearts as a fraction of the entire set.



6) Express the moons as a fraction of the entire set.




7) Express the squares as a fraction of the entire set.



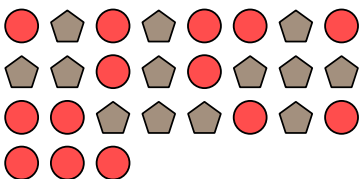
8) Express the stars as a fraction of the entire set.




9) Express the triangles as a fraction of the entire set.



10) Express the circles as a fraction of the entire set.



11) Express the stars as a fraction of the entire set.





Solve each problem.

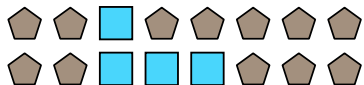
Ex) Express the moons as a fraction of the entire set.




1) Express the stars as a fraction of the entire set.




2) Express the squares as a fraction of the entire set.




3) Express the hearts as a fraction of the entire set.



4) Express the stars as a fraction of the entire set.



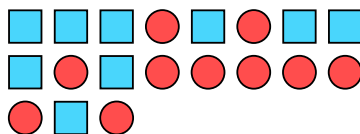
5) Express the hearts as a fraction of the entire set.



6) Express the moons as a fraction of the entire set.




7) Express the squares as a fraction of the entire set.



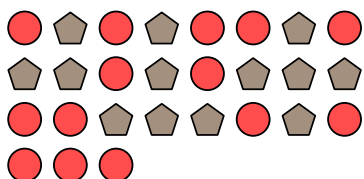
8) Express the stars as a fraction of the entire set.




9) Express the triangles as a fraction of the entire set.



10) Express the circles as a fraction of the entire set.



11) Express the stars as a fraction of the entire set.



**Answers**

Ex.  $\frac{15}{22}$

1.  $\frac{3}{13}$

2.  $\frac{4}{16}$

3.  $\frac{6}{9}$

4.  $\frac{2}{17}$

5.  $\frac{9}{19}$

6.  $\frac{4}{12}$

7.  $\frac{9}{19}$

8.  $\frac{2}{10}$

9.  $\frac{6}{11}$

10.  $\frac{14}{27}$

11.  $\frac{7}{17}$



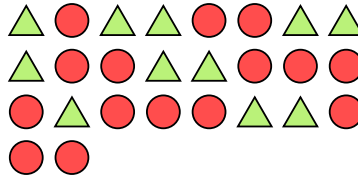


Solve each problem.

Ex) Express the triangles as a fraction of the entire set.



1) Express the circles as a fraction of the entire set.



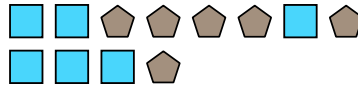
**Answers**

Ex.  $\frac{3}{12}$

2) Express the pentagons as a fraction of the entire set.




3) Express the squares as a fraction of the entire set.

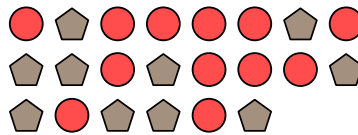


1.  $\frac{15}{26}$

4) Express the moons as a fraction of the entire set.



5) Express the circles as a fraction of the entire set.




2.  $\frac{4}{15}$

6) Express the triangles as a fraction of the entire set.




7) Express the hearts as a fraction of the entire set.




3.  $\frac{6}{12}$

8) Express the hearts as a fraction of the entire set.




9) Express the hearts as a fraction of the entire set.

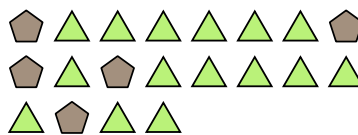


4.  $\frac{8}{22}$

10) Express the squares as a fraction of the entire set.



11) Express the triangles as a fraction of the entire set.



5.  $\frac{12}{22}$

6.  $\frac{6}{10}$

7.  $\frac{8}{19}$

8.  $\frac{15}{23}$

9.  $\frac{5}{14}$

10.  $\frac{6}{19}$

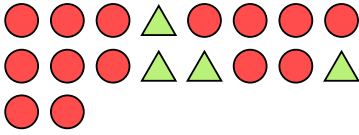
11.  $\frac{15}{20}$






Solve each problem.

Ex) Express the triangles as a fraction of the entire set.



1) Express the moons as a fraction of the entire set.



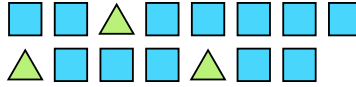
**Answers**

Ex.  $\frac{4}{18}$

2) Express the circles as a fraction of the entire set.



3) Express the squares as a fraction of the entire set.



1. \_\_\_\_\_

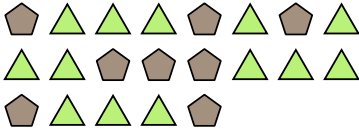
2. \_\_\_\_\_

3. \_\_\_\_\_


4. \_\_\_\_\_

5. \_\_\_\_\_

4) Express the triangles as a fraction of the entire set.



5) Express the triangles as a fraction of the entire set.



6. \_\_\_\_\_


7. \_\_\_\_\_

8. \_\_\_\_\_

6) Express the moons as a fraction of the entire set.



7) Express the circles as a fraction of the entire set.



9. \_\_\_\_\_


10. \_\_\_\_\_

11. \_\_\_\_\_


8) Express the moons as a fraction of the entire set.



9) Express the stars as a fraction of the entire set.



10) Express the circles as a fraction of the entire set.



11) Express the pentagons as a fraction of the entire set.





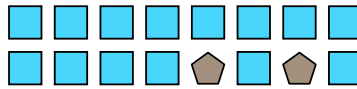


Solve each problem.

Ex) Express the moons as a fraction of the entire set.



1) Express the squares as a fraction of the entire set.



**Answers**

Ex.  $\frac{6}{8}$

1. \_\_\_\_\_

2. \_\_\_\_\_

3. \_\_\_\_\_

4. \_\_\_\_\_

5. \_\_\_\_\_

6. \_\_\_\_\_

7. \_\_\_\_\_

8. \_\_\_\_\_

9. \_\_\_\_\_


10. \_\_\_\_\_

11. \_\_\_\_\_


2) Express the stars as a fraction of the entire set.



3) Express the stars as a fraction of the entire set.



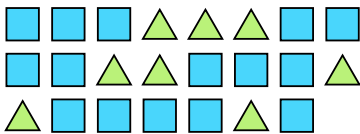
4) Express the moons as a fraction of the entire set.




5) Express the squares as a fraction of the entire set.



6) Express the triangles as a fraction of the entire set.



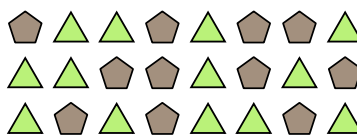
7) Express the stars as a fraction of the entire set.



8) Express the stars as a fraction of the entire set.



9) Express the triangles as a fraction of the entire set.



10) Express the circles as a fraction of the entire set.



11) Express the hearts as a fraction of the entire set.



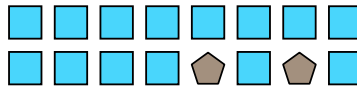


Solve each problem.

Ex) Express the moons as a fraction of the entire set.




1) Express the squares as a fraction of the entire set.




2) Express the stars as a fraction of the entire set.



3) Express the stars as a fraction of the entire set.



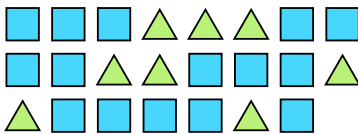
4) Express the moons as a fraction of the entire set.




5) Express the squares as a fraction of the entire set.



6) Express the triangles as a fraction of the entire set.



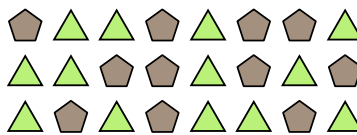
7) Express the stars as a fraction of the entire set.



8) Express the stars as a fraction of the entire set.



9) Express the triangles as a fraction of the entire set.



10) Express the circles as a fraction of the entire set.



11) Express the hearts as a fraction of the entire set.



**Answers**

Ex.  $\frac{6}{8}$

1.  $\frac{14}{16}$

2.  $\frac{11}{19}$

3.  $\frac{13}{25}$

4.  $\frac{5}{14}$

5.  $\frac{4}{7}$

6.  $\frac{8}{23}$

7.  $\frac{9}{24}$

8.  $\frac{6}{13}$

9.  $\frac{13}{24}$

10.  $\frac{3}{5}$


11.  $\frac{3}{12}$





Solve each problem.

Ex) Express the stars as a fraction of the entire set.



1) Express the pentagons as a fraction of the entire set.




2) Express the hearts as a fraction of the entire set.



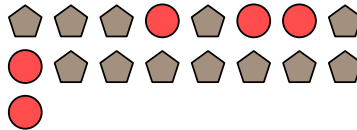
3) Express the pentagons as a fraction of the entire set.




4) Express the stars as a fraction of the entire set.



5) Express the circles as a fraction of the entire set.



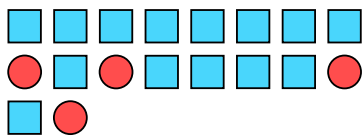
6) Express the pentagons as a fraction of the entire set.



7) Express the triangles as a fraction of the entire set.



8) Express the squares as a fraction of the entire set.



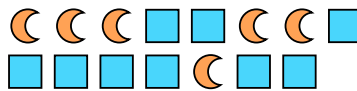
9) Express the stars as a fraction of the entire set.



10) Express the moons as a fraction of the entire set.



11) Express the moons as a fraction of the entire set.



**Answers**

Ex.  $\frac{15}{25}$

1.  $\frac{8}{20}$

2.  $\frac{10}{12}$

3.  $\frac{11}{16}$

4.  $\frac{3}{13}$

5.  $\frac{5}{17}$

6.  $\frac{14}{29}$

7.  $\frac{8}{14}$

8.  $\frac{14}{18}$

9.  $\frac{7}{12}$

10.  $\frac{8}{13}$

11.  $\frac{6}{15}$







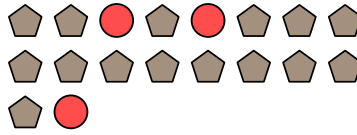


Solve each problem.

Ex) Express the stars as a fraction of the entire set.



1) Express the circles as a fraction of the entire set.




**Answers**

Ex.  $\frac{6}{9}$

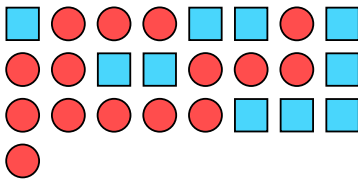
2) Express the circles as a fraction of the entire set.



3) Express the triangles as a fraction of the entire set.



4) Express the circles as a fraction of the entire set.



5) Express the hearts as a fraction of the entire set.



6) Express the circles as a fraction of the entire set.




7) Express the hearts as a fraction of the entire set.




8) Express the pentagons as a fraction of the entire set.




9) Express the stars as a fraction of the entire set.



10) Express the squares as a fraction of the entire set.



11) Express the stars as a fraction of the entire set.



- 1. \_\_\_\_\_
- 2. \_\_\_\_\_
- 3. \_\_\_\_\_
- 4. \_\_\_\_\_
- 5. \_\_\_\_\_
- 6. \_\_\_\_\_
- 7. \_\_\_\_\_
- 8. \_\_\_\_\_
- 9. \_\_\_\_\_
- 10. \_\_\_\_\_
- 11. \_\_\_\_\_

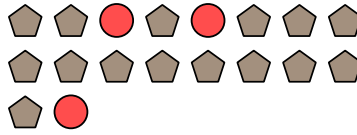


Solve each problem.

Ex) Express the stars as a fraction of the entire set.



1) Express the circles as a fraction of the entire set.




**Answers**

Ex.  $\frac{6}{9}$

2) Express the circles as a fraction of the entire set.



3) Express the triangles as a fraction of the entire set.



1.  $\frac{3}{18}$

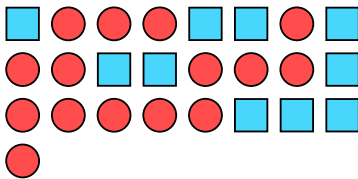
2.  $\frac{4}{9}$

3.  $\frac{4}{17}$

4.  $\frac{15}{25}$

5.  $\frac{2}{15}$

4) Express the circles as a fraction of the entire set.



5) Express the hearts as a fraction of the entire set.



6.  $\frac{3}{7}$

7.  $\frac{5}{11}$

8.  $\frac{5}{9}$

9.  $\frac{5}{20}$

6) Express the circles as a fraction of the entire set.



7) Express the hearts as a fraction of the entire set.




10.  $\frac{8}{23}$

11.  $\frac{13}{19}$


8) Express the pentagons as a fraction of the entire set.



9) Express the stars as a fraction of the entire set.



10) Express the squares as a fraction of the entire set.



11) Express the stars as a fraction of the entire set.

