

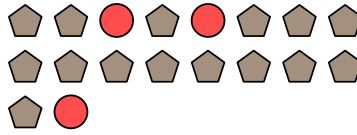


Solve each problem.

Ex) Express the stars as a fraction of the entire set.



1) Express the circles as a fraction of the entire set.




Answers

Ex. $\frac{6}{9}$

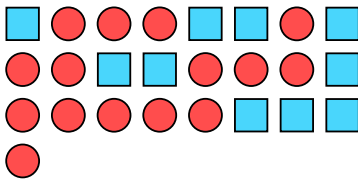
2) Express the circles as a fraction of the entire set.



3) Express the triangles as a fraction of the entire set.



4) Express the circles as a fraction of the entire set.



5) Express the hearts as a fraction of the entire set.



6) Express the circles as a fraction of the entire set.




7) Express the hearts as a fraction of the entire set.




8) Express the pentagons as a fraction of the entire set.




9) Express the stars as a fraction of the entire set.



10) Express the squares as a fraction of the entire set.



11) Express the stars as a fraction of the entire set.



1. _____

2. _____

3. _____

4. _____

5. _____

6. _____

7. _____

8. _____

9. _____

10. _____

11. _____

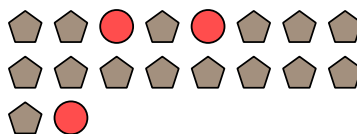


Solve each problem.

Ex) Express the stars as a fraction of the entire set.



1) Express the circles as a fraction of the entire set.




Answers

Ex. $\frac{6}{9}$

2) Express the circles as a fraction of the entire set.



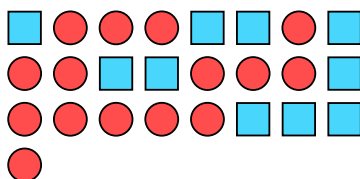
3) Express the triangles as a fraction of the entire set.



1. $\frac{3}{18}$

2. $\frac{4}{9}$

4) Express the circles as a fraction of the entire set.



5) Express the hearts as a fraction of the entire set.



3. $\frac{4}{17}$

4. $\frac{15}{25}$

5. $\frac{2}{15}$

6. $\frac{3}{7}$

7. $\frac{5}{11}$

8. $\frac{5}{9}$

6) Express the circles as a fraction of the entire set.



7) Express the hearts as a fraction of the entire set.



9. $\frac{5}{20}$

10. $\frac{8}{23}$

11. $\frac{13}{19}$


8) Express the pentagons as a fraction of the entire set.



9) Express the stars as a fraction of the entire set.



10) Express the squares as a fraction of the entire set.



11) Express the stars as a fraction of the entire set.

