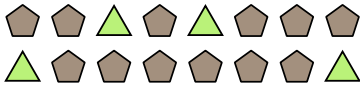






Solve each problem.

Ex) Express the triangles as a fraction of the entire set.




1) Express the stars as a fraction of the entire set.




**Answers**

Ex.  $\frac{4}{16}$

2) Express the moons as a fraction of the entire set.



3) Express the pentagons as a fraction of the entire set.




1.  $\frac{9}{21}$

4) Express the stars as a fraction of the entire set.



5) Express the moons as a fraction of the entire set.




2.  $\frac{2}{15}$

6) Express the stars as a fraction of the entire set.




7) Express the circles as a fraction of the entire set.



3.  $\frac{10}{23}$

8) Express the circles as a fraction of the entire set.

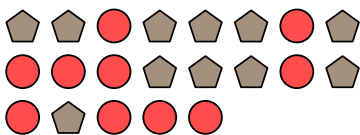


9) Express the pentagons as a fraction of the entire set.




4.  $\frac{12}{17}$

10) Express the pentagons as a fraction of the entire set.



11) Express the squares as a fraction of the entire set.



5.  $\frac{15}{26}$

6.  $\frac{7}{16}$

7.  $\frac{12}{19}$

8.  $\frac{8}{23}$

9.  $\frac{7}{11}$

10.  $\frac{11}{21}$

11.  $\frac{4}{10}$