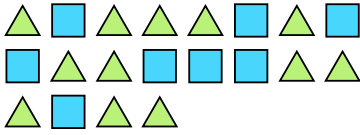





Solve each problem.

Ex) Express the triangles as a fraction of the entire set.



1) Express the stars as a fraction of the entire set.



Answers

Ex. $\frac{12}{20}$

2) Express the moons as a fraction of the entire set.



3) Express the moons as a fraction of the entire set.



1. $\frac{3}{12}$

2. $\frac{11}{13}$

3. $\frac{10}{14}$


4. $\frac{8}{19}$

5. $\frac{8}{14}$

4) Express the stars as a fraction of the entire set.



5) Express the triangles as a fraction of the entire set.



6. $\frac{2}{12}$

7. $\frac{9}{22}$

8. $\frac{9}{16}$

6) Express the hearts as a fraction of the entire set.



7) Express the hearts as a fraction of the entire set.



9. $\frac{8}{20}$

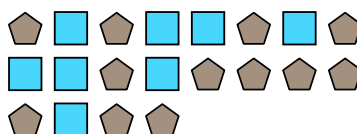
10. $\frac{4}{6}$

11. $\frac{13}{27}$

8) Express the hearts as a fraction of the entire set.



9) Express the squares as a fraction of the entire set.



10) Express the hearts as a fraction of the entire set.



11) Express the squares as a fraction of the entire set.

