




Solve each problem.

Ex) Express the moons as a fraction of the entire set.



1) Express the moons as a fraction of the entire set.



**Answers**

Ex.  $\frac{5}{15}$

1. \_\_\_\_\_

2. \_\_\_\_\_

3. \_\_\_\_\_

4. \_\_\_\_\_

5. \_\_\_\_\_

6. \_\_\_\_\_

7. \_\_\_\_\_


8. \_\_\_\_\_

9. \_\_\_\_\_


10. \_\_\_\_\_

11. \_\_\_\_\_

2) Express the hearts as a fraction of the entire set.



3) Express the triangles as a fraction of the entire set.



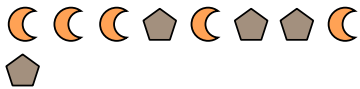
4) Express the stars as a fraction of the entire set.



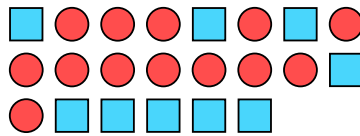
5) Express the stars as a fraction of the entire set.



6) Express the pentagons as a fraction of the entire set.



7) Express the circles as a fraction of the entire set.



8) Express the stars as a fraction of the entire set.



9) Express the triangles as a fraction of the entire set.



10) Express the stars as a fraction of the entire set.



11) Express the stars as a fraction of the entire set.



