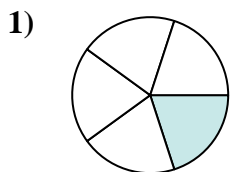


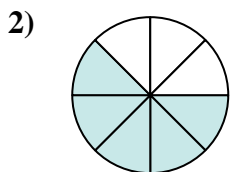


Determine which letter best represents an equivalent fraction.

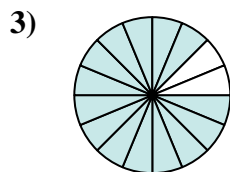
**Answers**



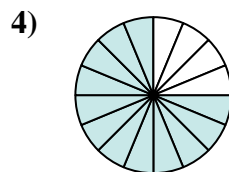
$$\frac{1}{5}$$



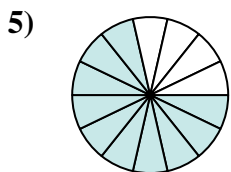
$$\frac{5}{8}$$




$$\frac{14}{16}$$



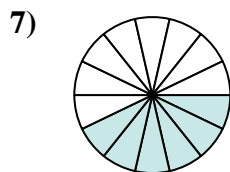
$$\frac{12}{16}$$



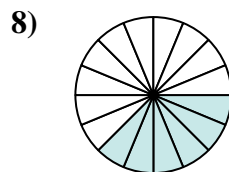
$$\frac{10}{14}$$



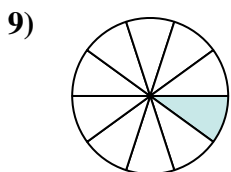
$$\frac{6}{20}$$



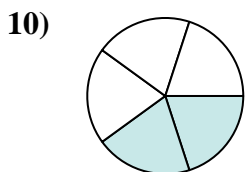
$$\frac{6}{14}$$



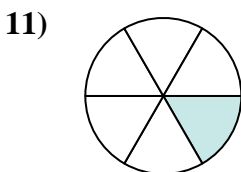
$$\frac{6}{16}$$



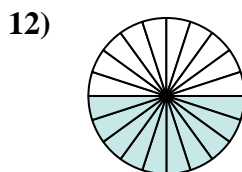
$$\frac{1}{10}$$



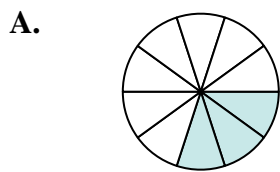
$$\frac{2}{5}$$



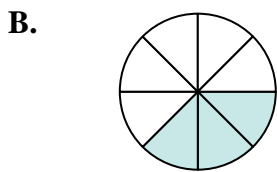
$$\frac{1}{6}$$



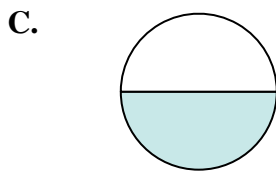
$$\frac{10}{20}$$



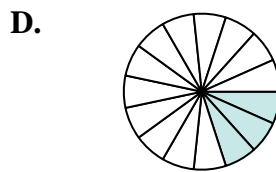
$$\frac{3}{10}$$



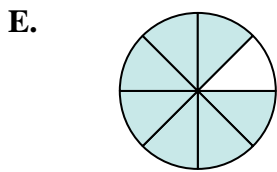
$$\frac{3}{8}$$



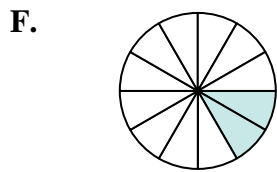
$$\frac{1}{2}$$



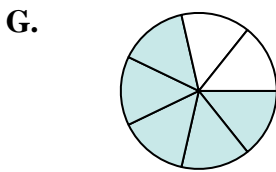
$$\frac{3}{15}$$



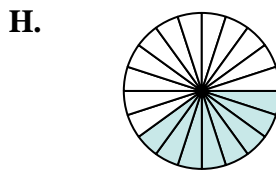
$$\frac{7}{8}$$



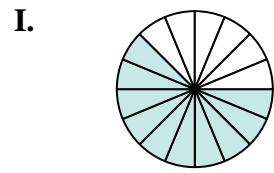
$$\frac{2}{12}$$



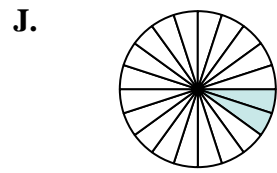
$$\frac{5}{7}$$



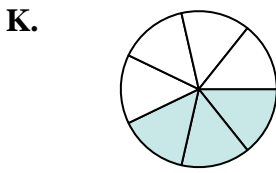
$$\frac{8}{20}$$



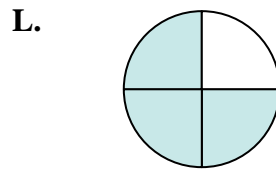
$$\frac{10}{16}$$



$$\frac{2}{20}$$



$$\frac{3}{7}$$

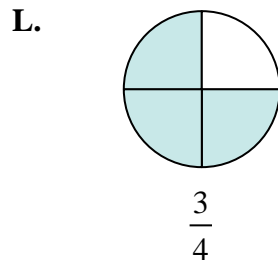
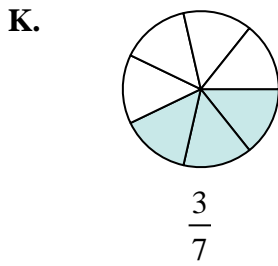
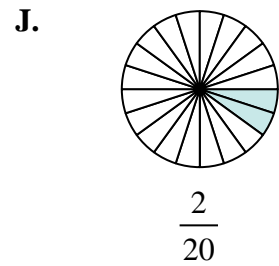
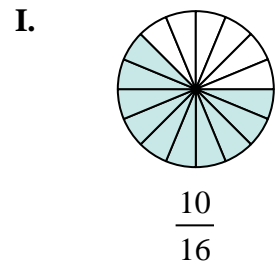
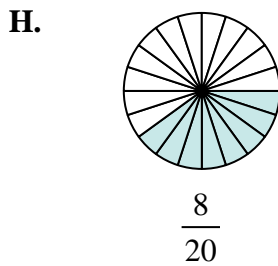
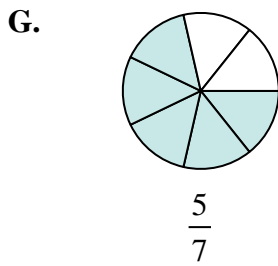
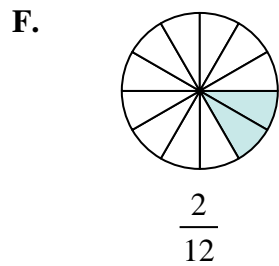
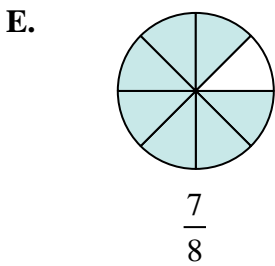
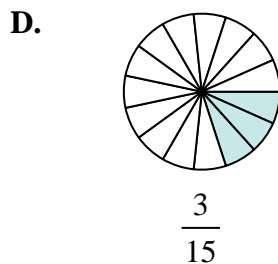
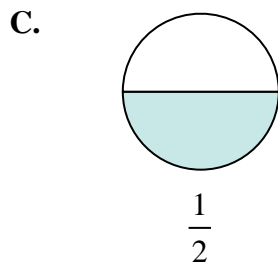
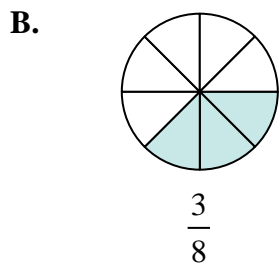
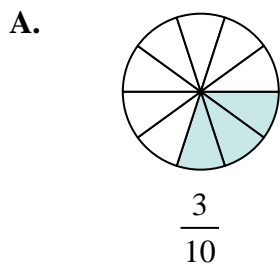
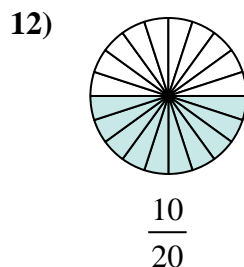
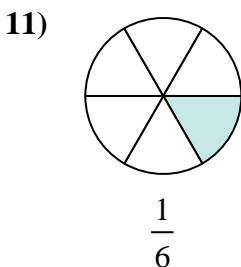
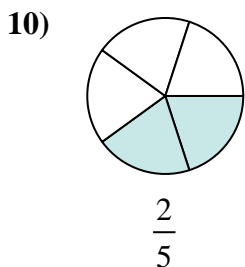
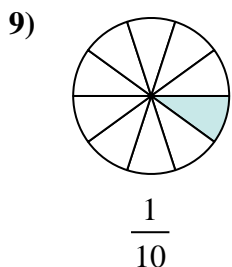
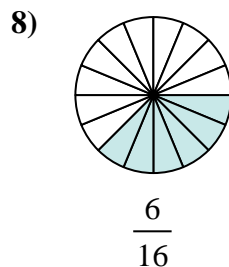
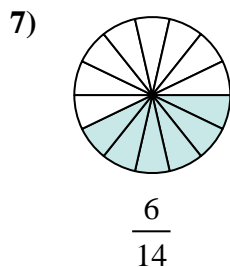
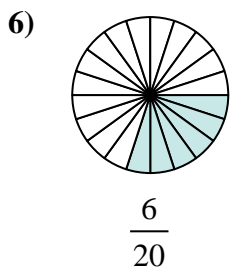
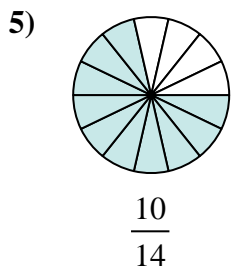
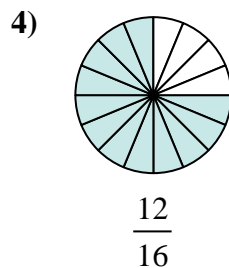
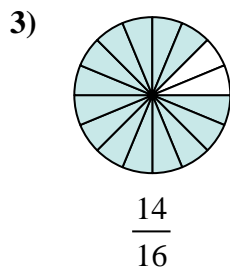
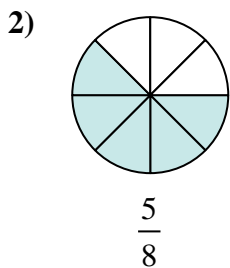
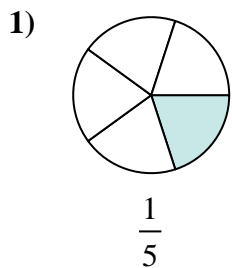


$$\frac{3}{4}$$

1. \_\_\_\_\_
2. \_\_\_\_\_
3. \_\_\_\_\_
4. \_\_\_\_\_
5. \_\_\_\_\_
6. \_\_\_\_\_
7. \_\_\_\_\_
8. \_\_\_\_\_
9. \_\_\_\_\_
10. \_\_\_\_\_
11. \_\_\_\_\_
12. \_\_\_\_\_



Determine which letter best represents an equivalent fraction.



**Answers**

1. **D**

2. **I**

3. **E**

4. **L**

5. **G**

6. **A**

7. **K**

8. **B**

9. **J**

10. **H**

11. **F**

12. **C**