



Shade in the visual fraction to find the equivalent fraction.

Ex)  $\frac{1}{4} = \frac{3}{12}$

1)  $\frac{4}{4} =$

2)  $\frac{4}{6} =$

3)  $\frac{0}{6} =$

4)  $\frac{4}{8} =$

5)  $\frac{2}{6} =$

6)  $\frac{6}{8} =$

7)  $\frac{4}{8} =$

8)  $\frac{3}{6} =$

9)  $\frac{1}{4} =$

**Answers**

Ex.  $\frac{3}{12}$

1. \_\_\_\_\_

2. \_\_\_\_\_

3. \_\_\_\_\_

4. \_\_\_\_\_

5. \_\_\_\_\_

6. \_\_\_\_\_

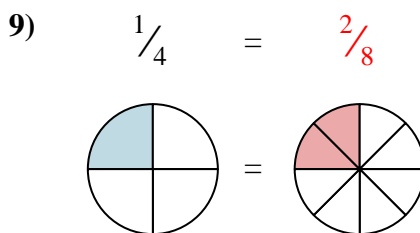
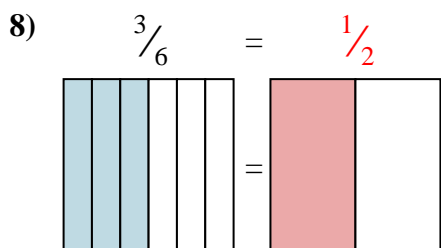
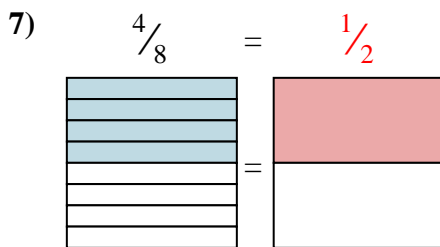
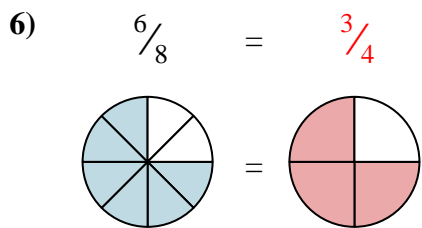
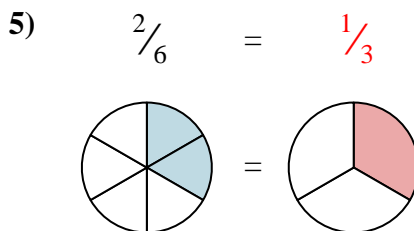
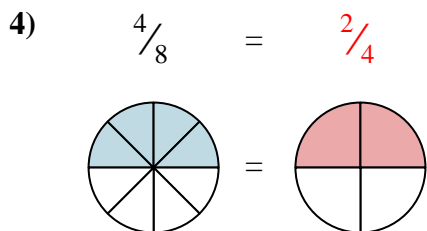
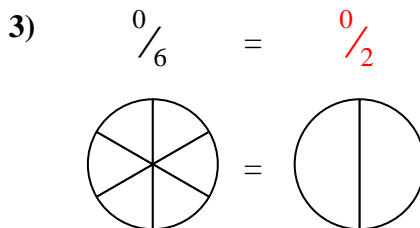
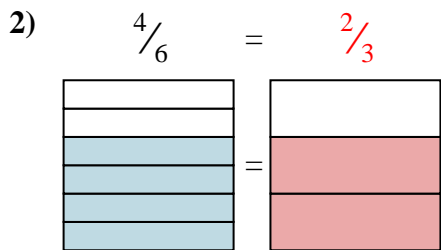
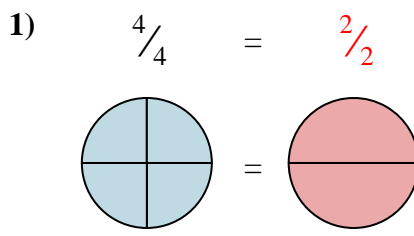
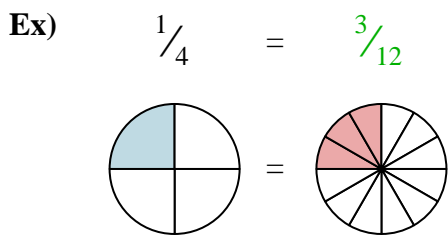
7. \_\_\_\_\_

8. \_\_\_\_\_

9. \_\_\_\_\_



Shade in the visual fraction to find the equivalent fraction.



Answers

- Ex.  $\frac{3}{12}$
1.  $\frac{2}{2}$
2.  $\frac{2}{3}$
3.  $\frac{0}{2}$
4.  $\frac{2}{4}$
5.  $\frac{1}{3}$
6.  $\frac{3}{4}$
7.  $\frac{1}{2}$
8.  $\frac{1}{2}$
9.  $\frac{2}{8}$