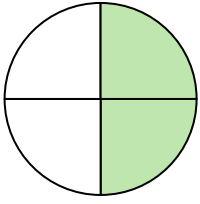


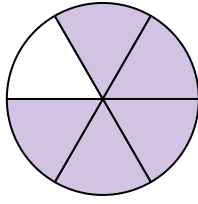


Write the shaded amount in word form.

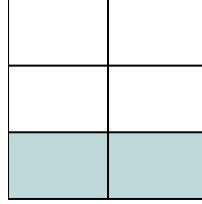
Ex)



1)



2)



**Answers**

Ex. two-fourths

1. \_\_\_\_\_

2. \_\_\_\_\_

3. \_\_\_\_\_

4. \_\_\_\_\_

5. \_\_\_\_\_

6. \_\_\_\_\_

7. \_\_\_\_\_

8. \_\_\_\_\_

9. \_\_\_\_\_

10. \_\_\_\_\_


11. \_\_\_\_\_

12. \_\_\_\_\_

13. \_\_\_\_\_

14. \_\_\_\_\_

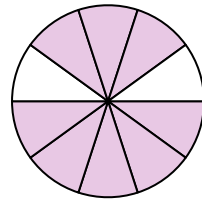
3)



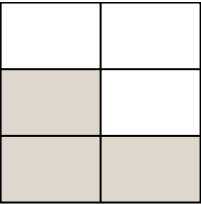
4)



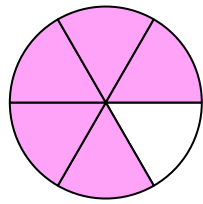
5)



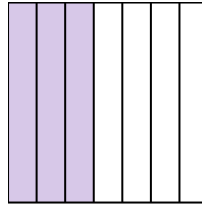
6)



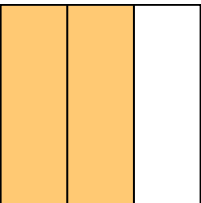
7)



8)



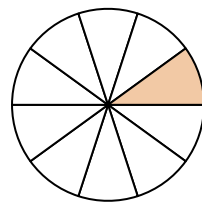
9)




10)




11)




12)



13)



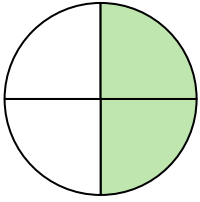
14)



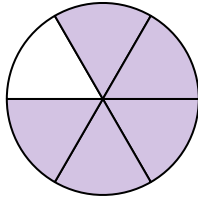


Write the shaded amount in word form.

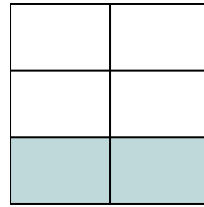
Ex)



1)



2)



Answers

Ex. two-fourths

1. five-sixths

2. two-fifths

3. seven-ninths

4. one-third

5. eight-tenths

6. three-fifths

7. five-sixths

8. three-sevenths

9. two-thirds

10. four-eighths


11. one-tenth

12. two-sevenths

13. seven-eighths

14. one-half

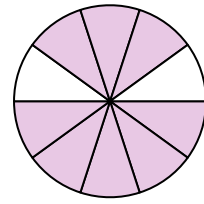
3)



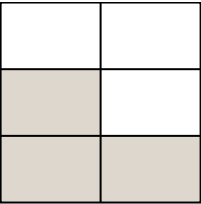
4)



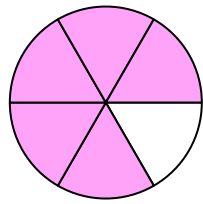
5)



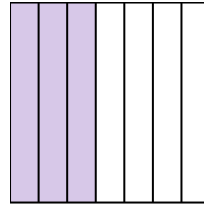
6)



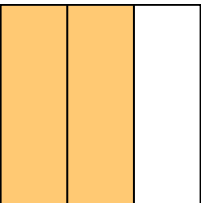
7)



8)



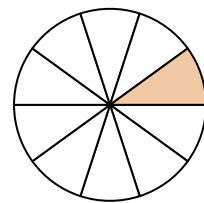
9)




10)




11)



12)



13)



14)

