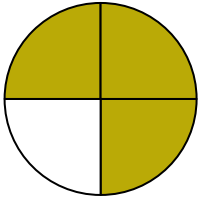





Write the shaded amount in word form.

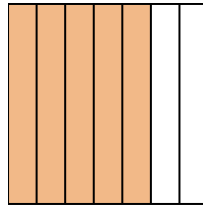
Ex)



1)



2)



Answers

Ex. three-fourths

1. _____

2. _____

3. _____

4. _____

5. _____

6. _____

7. _____

8. _____

9. _____

10. _____


11. _____

12. _____

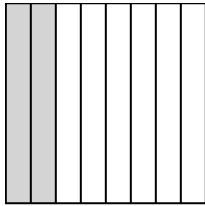
13. _____

14. _____

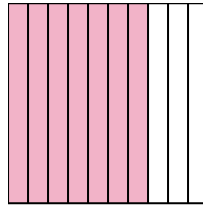
3)



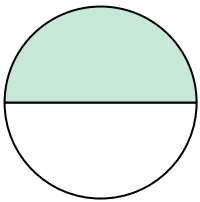
4)



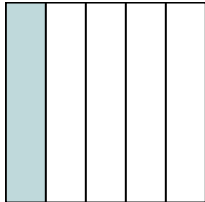
5)



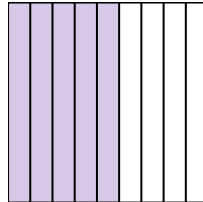
6)




7)




8)



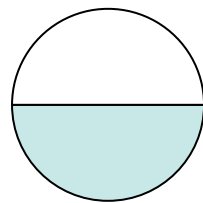
9)



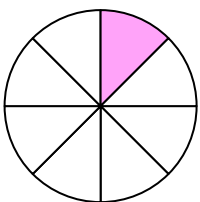
10)



11)



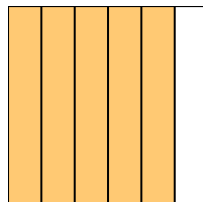
12)



13)



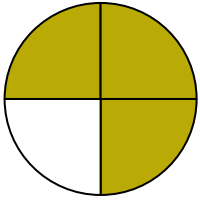
14)






Write the shaded amount in word form.

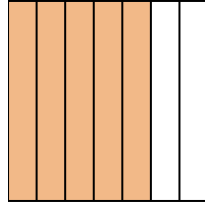
Ex)



1)



2)



Answers

Ex. three-fourths

1. one-fourth

2. five-sevenths

3. four-ninths

4. two-eighths

5. seven-tenths

6. one-half

7. one-fifth

8. five-ninths

9. two-fifths

10. one-third


11. one-half

12. one-eighth

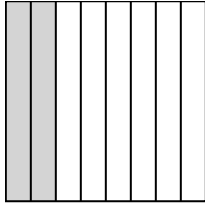
13. two-tenths

14. five-sixths

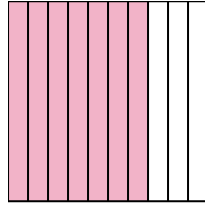
3)



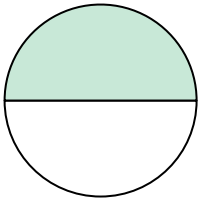
4)



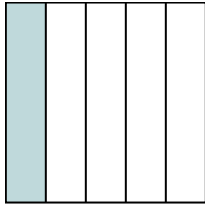
5)



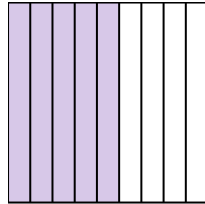
6)




7)



8)



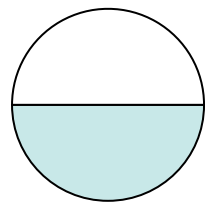
9)



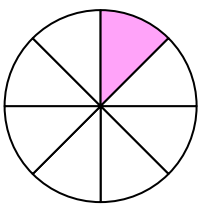
10)




11)



12)



13)



14)

