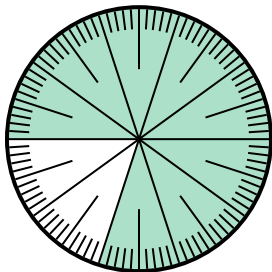


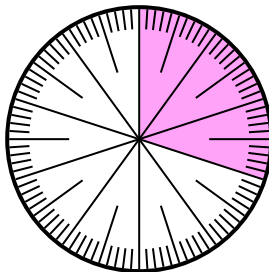


Solve each problem.

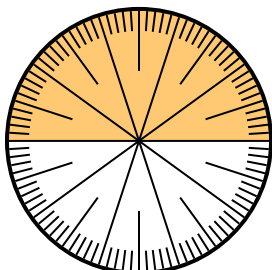
1) Express the shaded portion as a decimal of the whole.



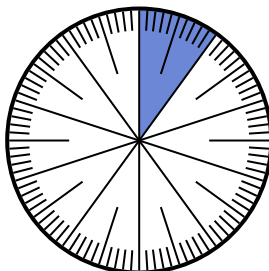
2) Express the shaded portion as a fraction of the whole with a 100 as the denominator.



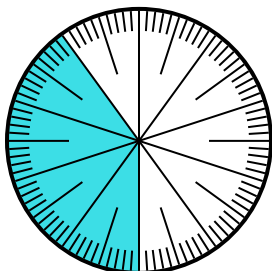
3) Express the shaded portion as a fraction of the whole with a 100 as the denominator.



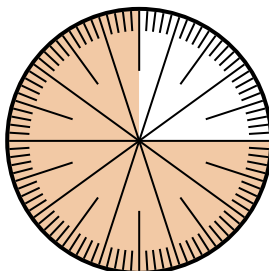
4) Express the un-shaded portion as a decimal of the whole.



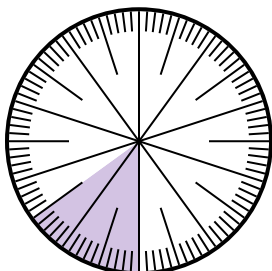
5) Express the shaded portion as a decimal of the whole.



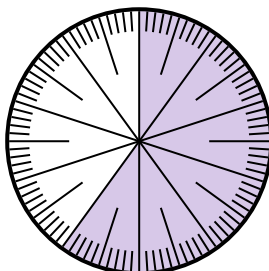
6) Express the un-shaded portion as a decimal of the whole.



7) Express the un-shaded portion as a decimal of the whole.



8) Express the un-shaded portion as a fraction of the whole with a 100 as the denominator.




**Answers**

1. \_\_\_\_\_
2. \_\_\_\_\_
3. \_\_\_\_\_
4. \_\_\_\_\_
5. \_\_\_\_\_
6. \_\_\_\_\_
7. \_\_\_\_\_
8. \_\_\_\_\_

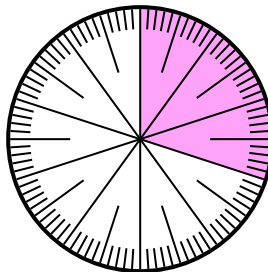


Solve each problem.

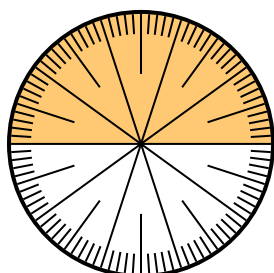
1) Express the shaded portion as a decimal of the whole.



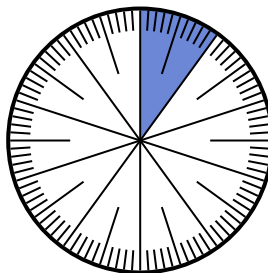
2) Express the shaded portion as a fraction of the whole with a 100 as the denominator.



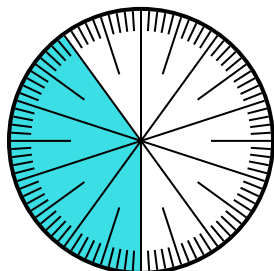
3) Express the shaded portion as a fraction of the whole with a 100 as the denominator.



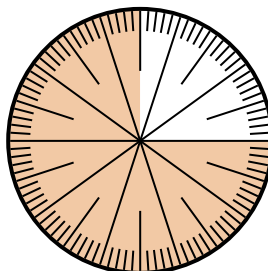
4) Express the un-shaded portion as a decimal of the whole.



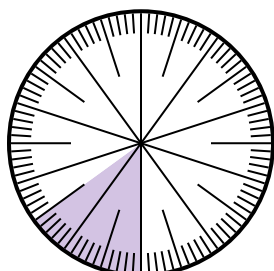
5) Express the shaded portion as a decimal of the whole.



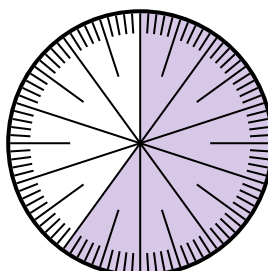
6) Express the un-shaded portion as a decimal of the whole.



7) Express the un-shaded portion as a decimal of the whole.



8) Express the un-shaded portion as a fraction of the whole with a 100 as the denominator.



Answers

1. 0.8

2.  $\frac{30}{100}$

3.  $\frac{50}{100}$

4. 0.9

5. 0.4

6. 0.25

7. 0.85

8.  $\frac{40}{100}$