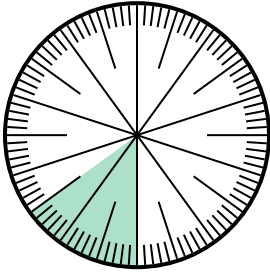


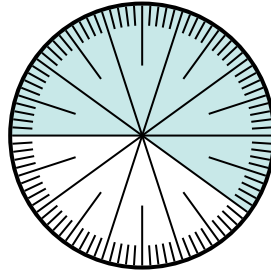


Solve each problem.

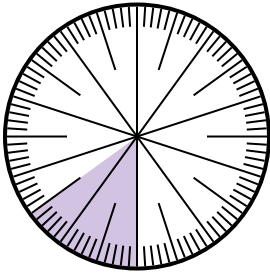
- 1) Express the un-shaded portion as a fraction of the whole with a 100 as the denominator.



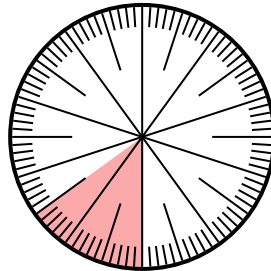
- 2) Express the shaded portion as a fraction of the whole with a 100 as the denominator.



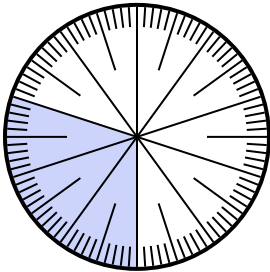
- 3) Express the shaded portion as a fraction of the whole with a 100 as the denominator.



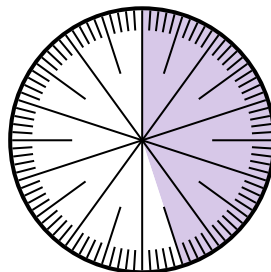
- 4) Express the shaded portion as a fraction of the whole with a 100 as the denominator.



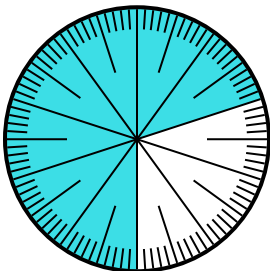
- 5) Express the shaded portion as a fraction of the whole with a 100 as the denominator.



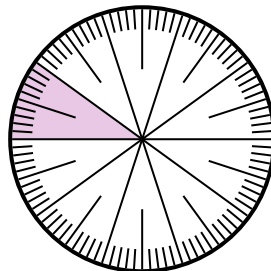
- 6) Express the shaded portion as a fraction of the whole with a 100 as the denominator.



- 7) Express the shaded portion as a fraction of the whole with a 100 as the denominator.



- 8) Express the shaded portion as a decimal of the whole.



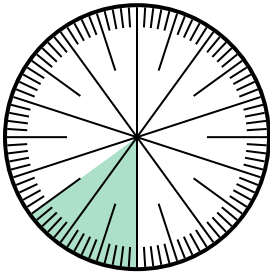
Answers

1. \_\_\_\_\_
2. \_\_\_\_\_
3. \_\_\_\_\_
4. \_\_\_\_\_
5. \_\_\_\_\_
6. \_\_\_\_\_
7. \_\_\_\_\_
8. \_\_\_\_\_

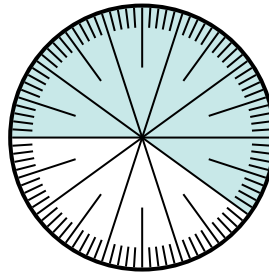


Solve each problem.

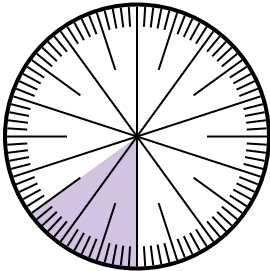
- 1) Express the un-shaded portion as a fraction of the whole with a 100 as the denominator.



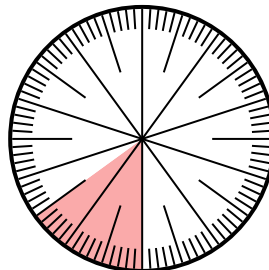
- 2) Express the shaded portion as a fraction of the whole with a 100 as the denominator.



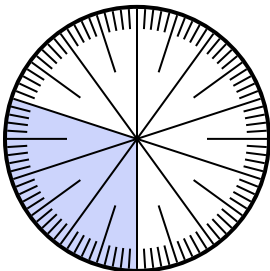
- 3) Express the shaded portion as a fraction of the whole with a 100 as the denominator.



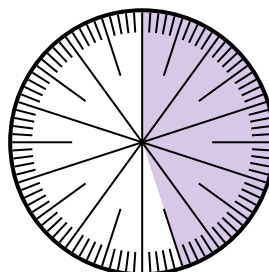
- 4) Express the shaded portion as a fraction of the whole with a 100 as the denominator.



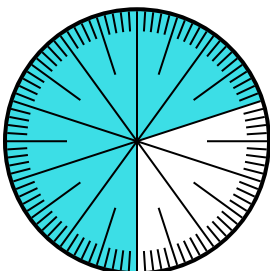
- 5) Express the shaded portion as a fraction of the whole with a 100 as the denominator.



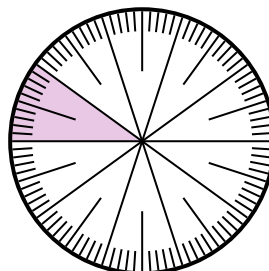
- 6) Express the shaded portion as a fraction of the whole with a 100 as the denominator.



- 7) Express the shaded portion as a fraction of the whole with a 100 as the denominator.



- 8) Express the shaded portion as a decimal of the whole.



Answers

1.  $\frac{85}{100}$
2.  $\frac{60}{100}$
3.  $\frac{15}{100}$
4.  $\frac{15}{100}$
5.  $\frac{30}{100}$
6.  $\frac{45}{100}$
7.  $\frac{70}{100}$
8. **0.1**