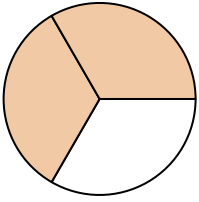


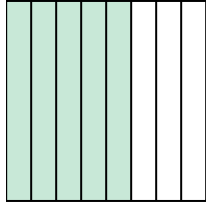


Write the shaded amount as a fraction.

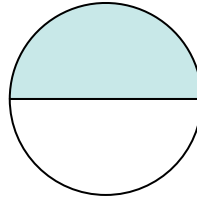
Ex)



1)



2)



Answers

Ex. $\frac{2}{3}$

1. _____

2. _____

3. _____

4. _____

5. _____

6. _____

7. _____

8. _____

9. _____

10. _____

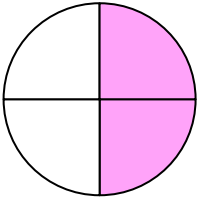
11. _____

12. _____


13. _____

14. _____

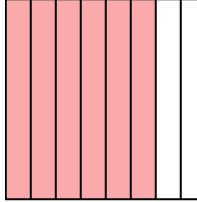
3)




4)



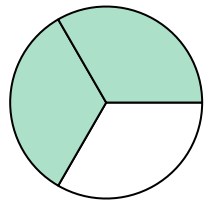
5)



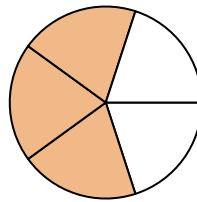
6)



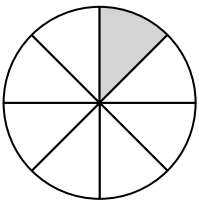
7)




8)



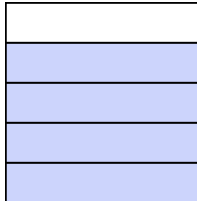
9)



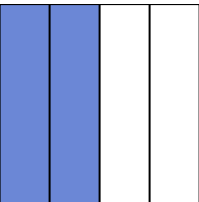
10)



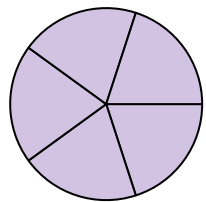
11)




12)



13)



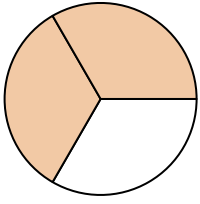
14)



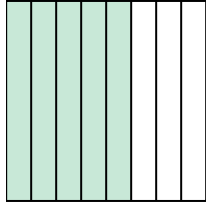


Write the shaded amount as a fraction.

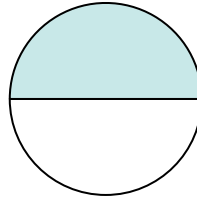
Ex)



1)



2)



Answers

Ex. 2/3

1. 5/8

2. 1/2

3. 2/4

4. 2/2

5. 6/8

6. 2/2

7. 2/3

8. 3/5

9. 1/8

10. 3/4

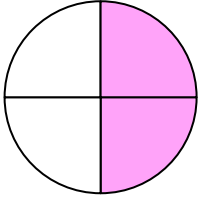
11. 4/5

12. 2/4


13. 5/5

14. 3/3

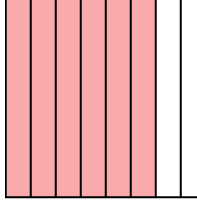
3)




4)



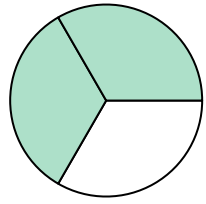
5)



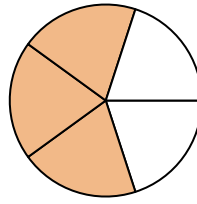
6)



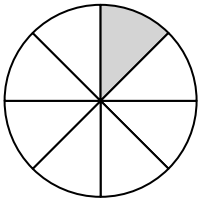
7)




8)



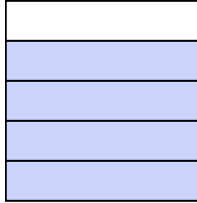
9)




10)



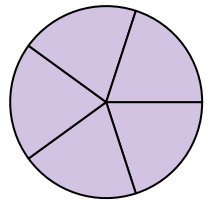
11)



12)



13)



14)

