


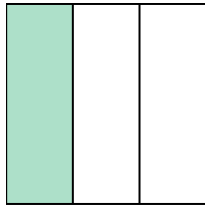


Write the shaded amount as a fraction.

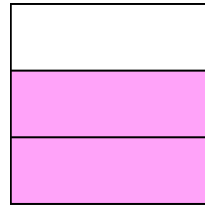
Ex)



1)



2)



Answers

Ex.  $\frac{7}{8}$

\_\_\_\_\_

1. \_\_\_\_\_

2. \_\_\_\_\_

3. \_\_\_\_\_

4. \_\_\_\_\_

5. \_\_\_\_\_

6. \_\_\_\_\_

7. \_\_\_\_\_

8. \_\_\_\_\_

9. \_\_\_\_\_

10. \_\_\_\_\_

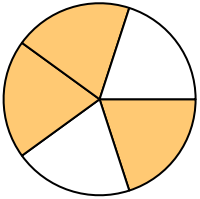
11. \_\_\_\_\_

12. \_\_\_\_\_


13. \_\_\_\_\_

14. \_\_\_\_\_


3)



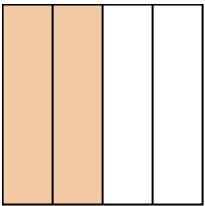
4)



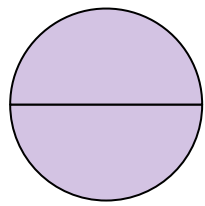
5)



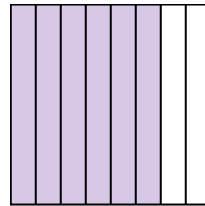
6)




7)




8)



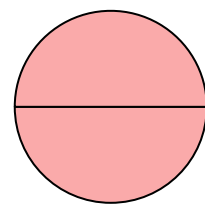
9)




10)




11)




12)



13)

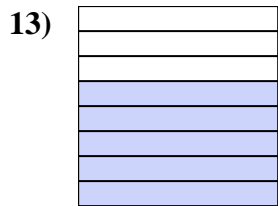
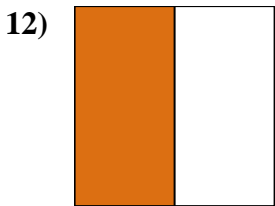
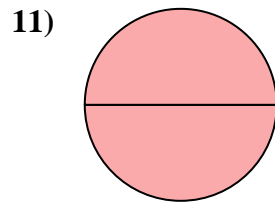
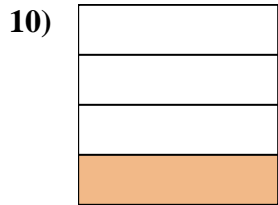

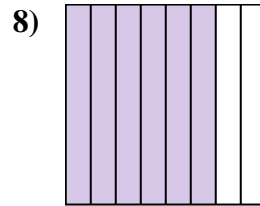
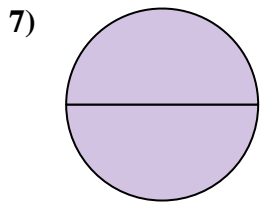
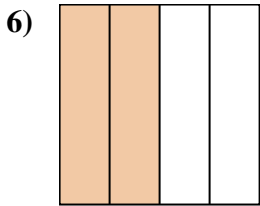
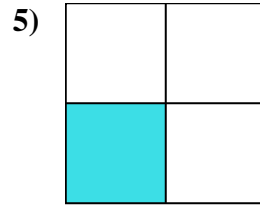
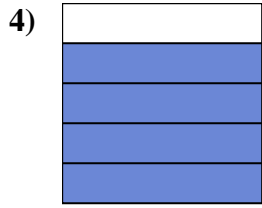
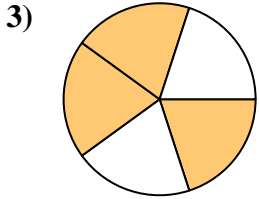
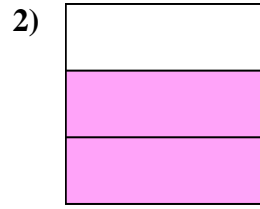
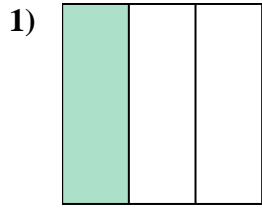
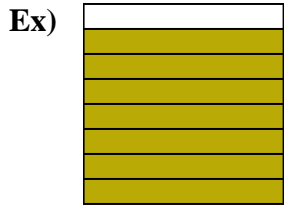


14)





Write the shaded amount as a fraction.



Answers

Ex. 7/8

1. 1/3

2. 2/3

3. 3/5

4. 4/5

5. 1/4

6. 2/4

7. 2/2

8. 6/8

9. 4/5

10. 1/4

11. 2/2

12. 1/2

13. 5/8

14. 3/3