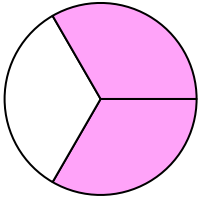


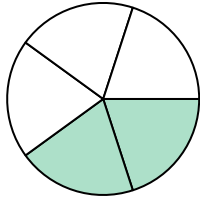


Write the shaded amount as a fraction.

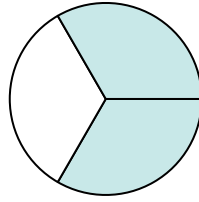
Ex)



1)



2)



Answers

Ex. $\frac{2}{3}$

1. _____

2. _____

3. _____

4. _____

5. _____

6. _____

7. _____

8. _____

9. _____

10. _____

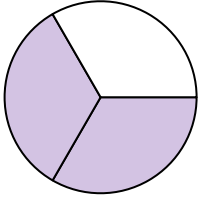
11. _____

12. _____

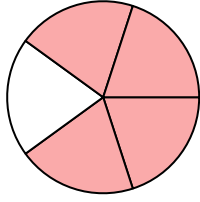
13. _____

14. _____

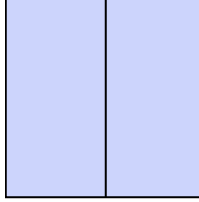
3)




4)



5)



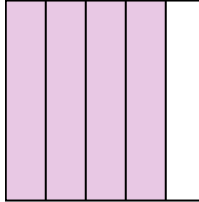
6)



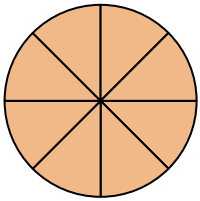
7)



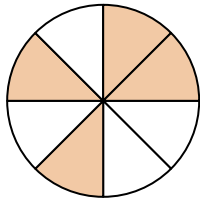
8)




9)



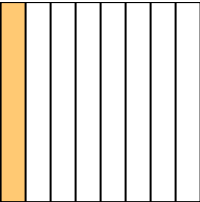
10)



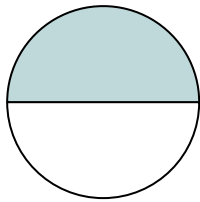
11)



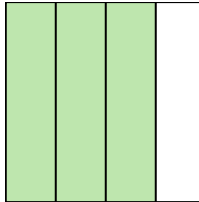
12)



13)

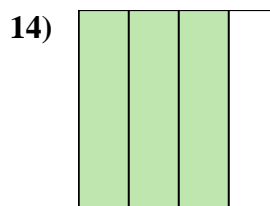
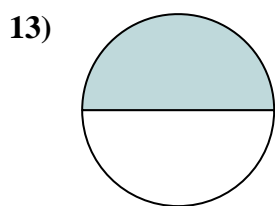
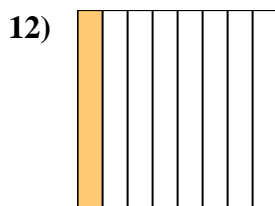
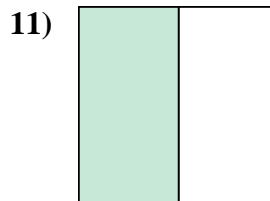
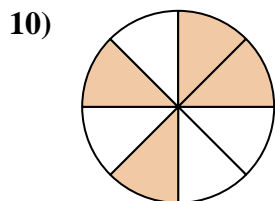
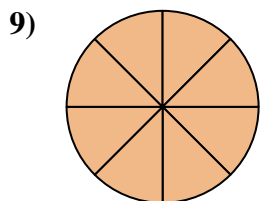
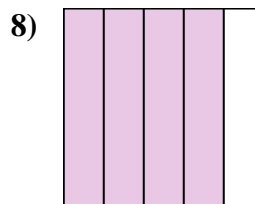
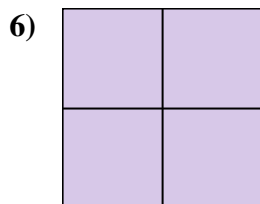
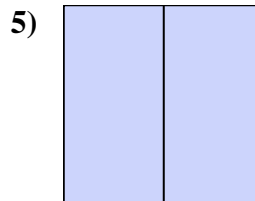
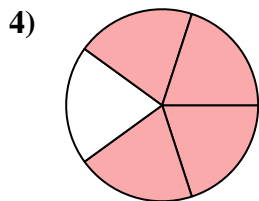
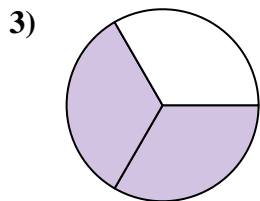
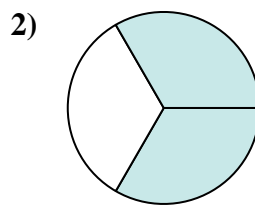
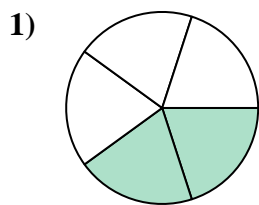
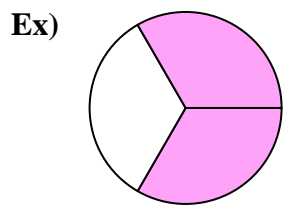


14)





Write the shaded amount as a fraction.



Answers

Ex. 2/3

1. 2/5

2. 2/3

3. 2/3

4. 4/5

5. 2/2

6. 4/4

7. 1/4

8. 4/5

9. 8/8

10. 4/8

11. 1/2

12. 1/8

13. 1/2

14. 3/4