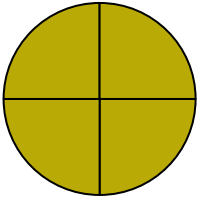


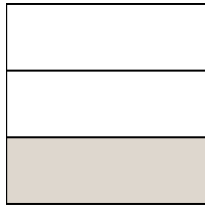


Write the shaded amount as a fraction.

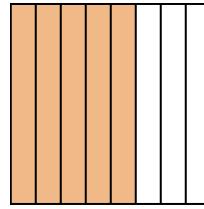
Ex)



1)



2)

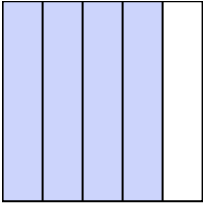


**Answers**

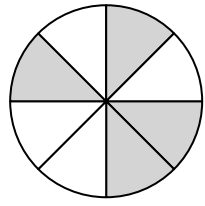
Ex.  $\frac{4}{4}$

- 1. \_\_\_\_\_
- 2. \_\_\_\_\_
- 3. \_\_\_\_\_
- 4. \_\_\_\_\_
- 5. \_\_\_\_\_
- 6. \_\_\_\_\_
- 7. \_\_\_\_\_
- 8. \_\_\_\_\_
- 9. \_\_\_\_\_
- 10. \_\_\_\_\_
- 11. \_\_\_\_\_
- 12. \_\_\_\_\_
- 13. \_\_\_\_\_
- 14. \_\_\_\_\_

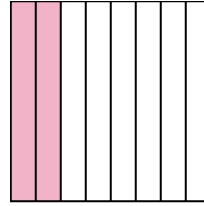
3)




4)



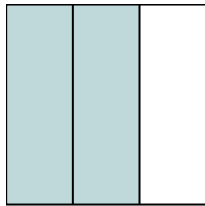
5)



6)




7)




8)



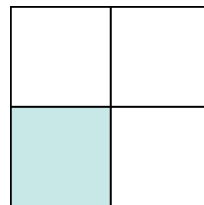
9)




10)



11)




12)



13)



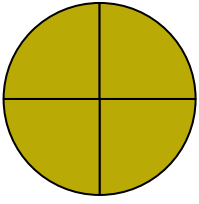
14)






Write the shaded amount as a fraction.

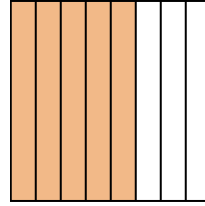
Ex)



1)



2)



Answers

Ex. 4/4

1. 1/3

2. 5/8

3. 4/5

4. 4/8

5. 2/8

6. 1/2

7. 2/3

8. 5/5

9. 2/4

10. 1/2

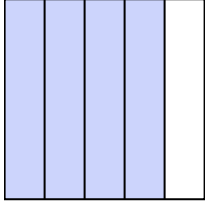
11. 1/4

12. 2/2

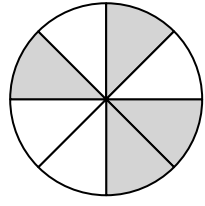
13. 1/5

14. 1/3

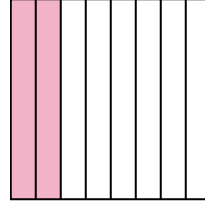
3)




4)



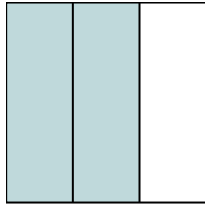
5)



6)



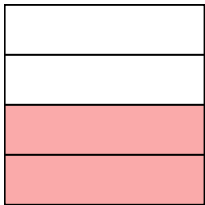
7)




8)



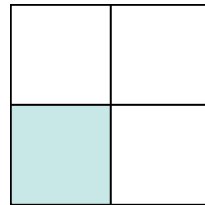
9)




10)




11)



12)



13)



14)

