

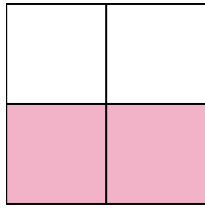


Write the shaded amount as a fraction.

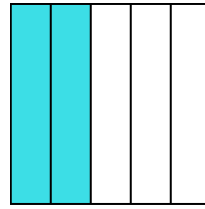
Ex)



1)



2)



Answers

Ex. $\frac{1}{4}$

1. _____

2. _____

3. _____

4. _____

5. _____

6. _____

7. _____

8. _____

9. _____

10. _____


11. _____

12. _____

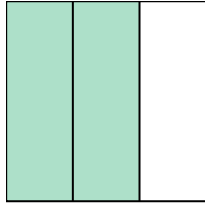
13. _____

14. _____

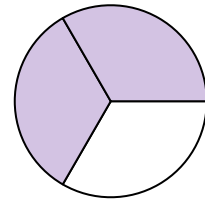
3)



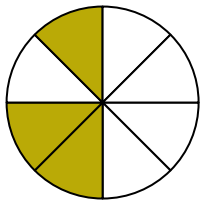
4)



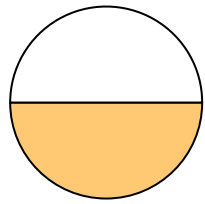
5)



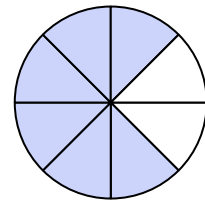
6)




7)




8)




9)




10)



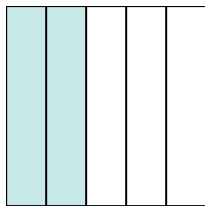
11)



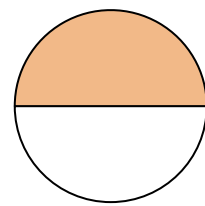
12)



13)

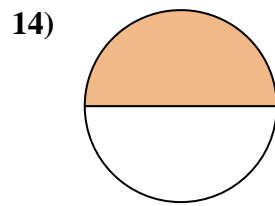
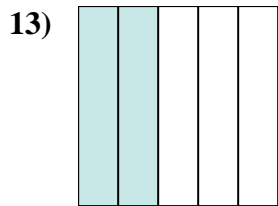
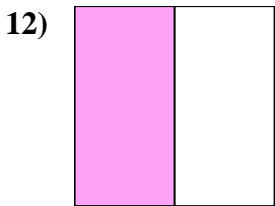
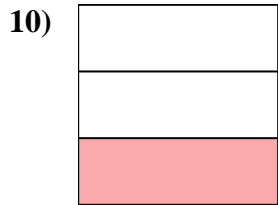
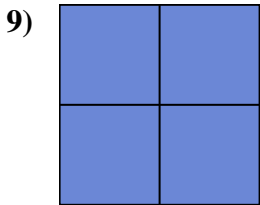
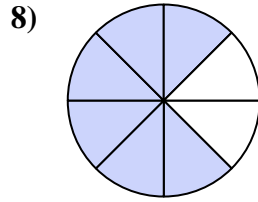
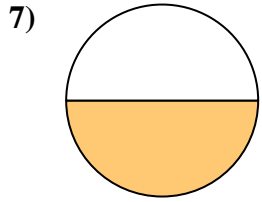
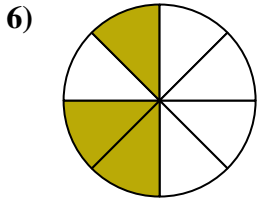
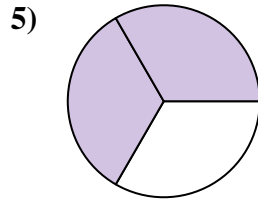
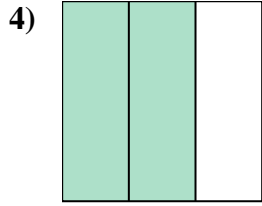
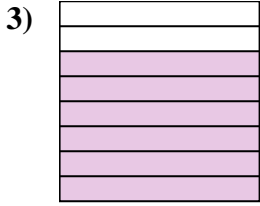
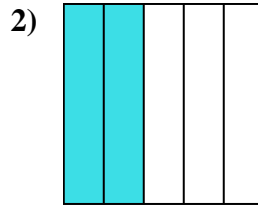
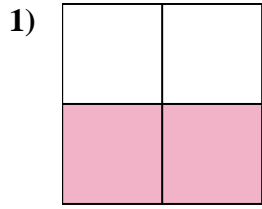
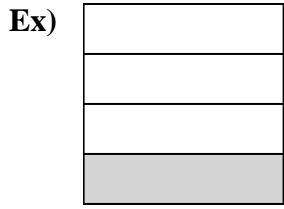


14)





Write the shaded amount as a fraction.



Answers

Ex. 1/4

1. 2/4

2. 2/5

3. 6/8

4. 2/3

5. 2/3

6. 3/8

7. 1/2

8. 6/8

9. 4/4

10. 1/3

11. 5/5

12. 1/2

13. 2/5

14. 1/2