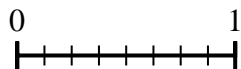
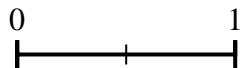




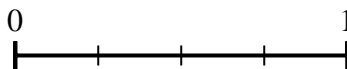
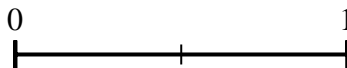
Use the number lines to answer the questions.

Answers

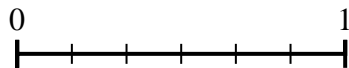
1) Using the number lines shown, what is the equivalent fraction to $\frac{2}{2}$?



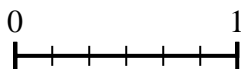
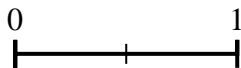
2) Using the number lines shown, what is the equivalent fraction to $\frac{2}{2}$?



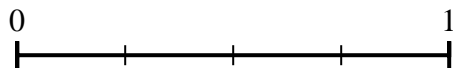
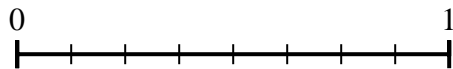
3) Using the number lines shown, what is the equivalent fraction to $\frac{2}{6}$?



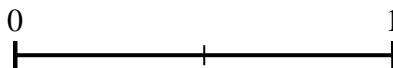
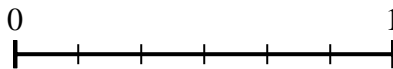
4) Using the number lines shown, what is the equivalent fraction to $\frac{0}{2}$?



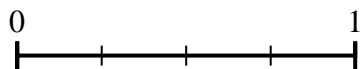
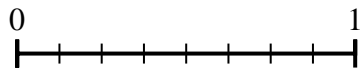
5) Using the number lines shown, what is the equivalent fraction to $\frac{6}{8}$?



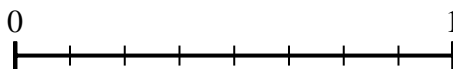
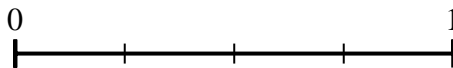
6) Using the number lines shown, what is the equivalent fraction to $\frac{6}{6}$?



7) Using the number lines shown, what is the equivalent fraction to $\frac{2}{8}$?



8) Using the number lines shown, what is the equivalent fraction to $\frac{4}{4}$?

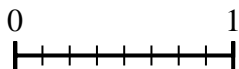
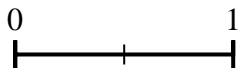


1. _____
2. _____
3. _____
4. _____
5. _____
6. _____
7. _____
8. _____

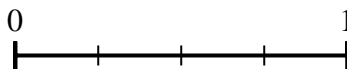
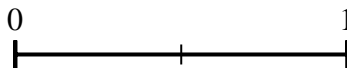


Use the number lines to answer the questions.


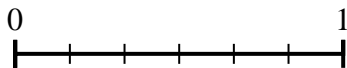
1) Using the number lines shown, what is the equivalent fraction to $\frac{2}{2}$?



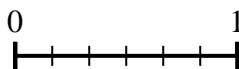
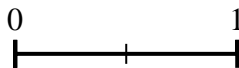
2) Using the number lines shown, what is the equivalent fraction to $\frac{2}{2}$?



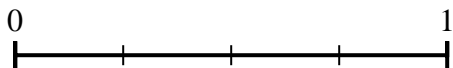
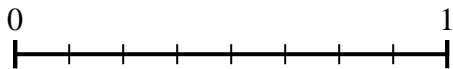
3) Using the number lines shown, what is the equivalent fraction to $\frac{2}{6}$?



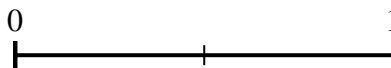
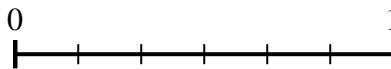
4) Using the number lines shown, what is the equivalent fraction to $\frac{0}{2}$?



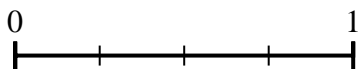
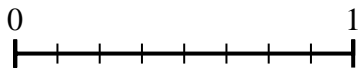
5) Using the number lines shown, what is the equivalent fraction to $\frac{6}{8}$?



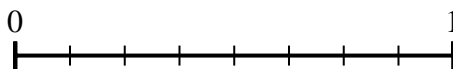
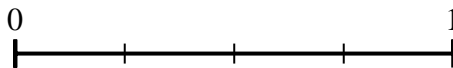
6) Using the number lines shown, what is the equivalent fraction to $\frac{6}{6}$?



7) Using the number lines shown, what is the equivalent fraction to $\frac{2}{8}$?



8) Using the number lines shown, what is the equivalent fraction to $\frac{4}{4}$?



Answers

1. $\frac{8}{8}$

2. $\frac{4}{4}$

3. $\frac{1}{3}$

4. $\frac{0}{6}$

5. $\frac{3}{4}$

6. $\frac{2}{2}$

7. $\frac{1}{4}$

8. $\frac{8}{8}$