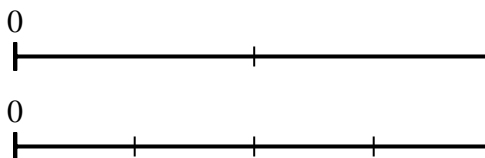




Use the number lines to answer the questions.

Answers

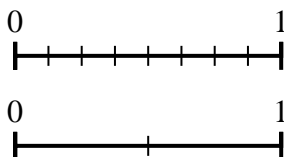
1) Using the number lines shown, what is the equivalent fraction to $\frac{2}{2}$?



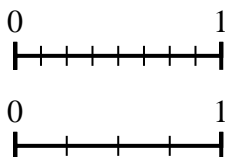
2) Using the number lines shown, what is the equivalent fraction to $\frac{4}{8}$?



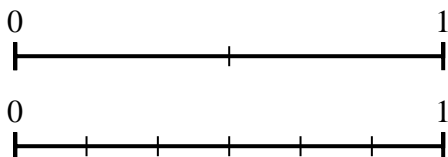
3) Using the number lines shown, what is the equivalent fraction to $\frac{8}{8}$?



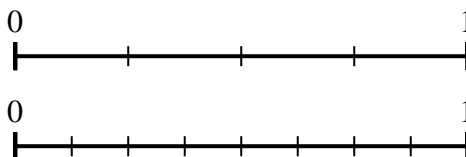
4) Using the number lines shown, what is the equivalent fraction to $\frac{8}{8}$?



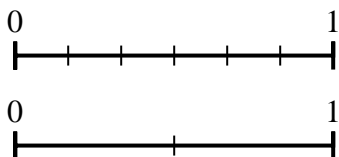
5) Using the number lines shown, what is the equivalent fraction to $\frac{0}{2}$?



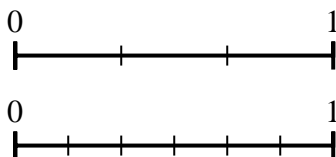
6) Using the number lines shown, what is the equivalent fraction to $\frac{2}{4}$?



7) Using the number lines shown, what is the equivalent fraction to $\frac{3}{6}$?



8) Using the number lines shown, what is the equivalent fraction to $\frac{2}{3}$?

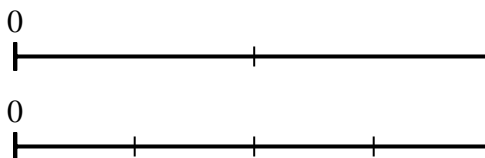


1. _____
2. _____
3. _____
4. _____
5. _____
6. _____
7. _____
8. _____



Use the number lines to answer the questions.

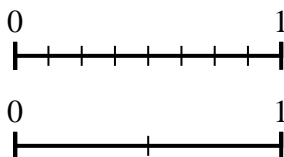
1) Using the number lines shown, what is the equivalent fraction to $\frac{2}{2}$?



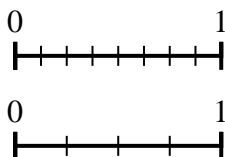
2) Using the number lines shown, what is the equivalent fraction to $\frac{4}{8}$?



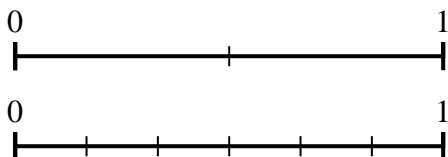
3) Using the number lines shown, what is the equivalent fraction to $\frac{8}{8}$?



4) Using the number lines shown, what is the equivalent fraction to $\frac{8}{8}$?



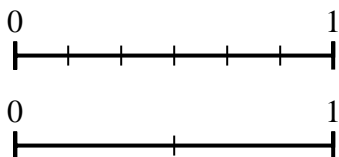
5) Using the number lines shown, what is the equivalent fraction to $\frac{0}{2}$?



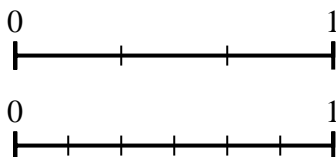
6) Using the number lines shown, what is the equivalent fraction to $\frac{2}{4}$?



7) Using the number lines shown, what is the equivalent fraction to $\frac{3}{6}$?



8) Using the number lines shown, what is the equivalent fraction to $\frac{2}{3}$?



Answers

1. $\frac{4}{4}$
2. $\frac{1}{2}$
3. $\frac{2}{2}$
4. $\frac{4}{4}$
5. $\frac{0}{6}$
6. $\frac{4}{8}$
7. $\frac{1}{2}$
8. $\frac{4}{6}$