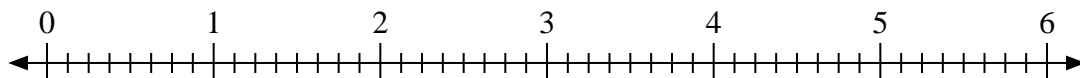




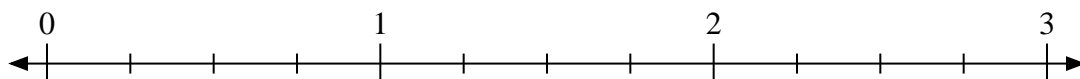
Use the numberline to solve.

Answers

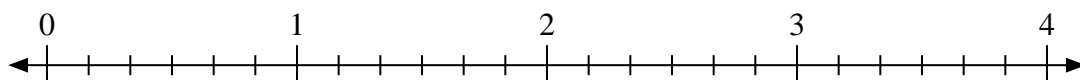
1) $5 \div \frac{1}{8}$



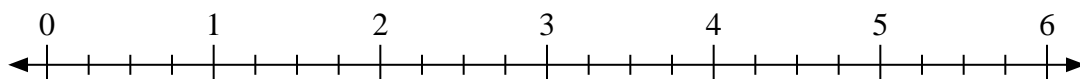
2) $2 \div \frac{1}{4}$



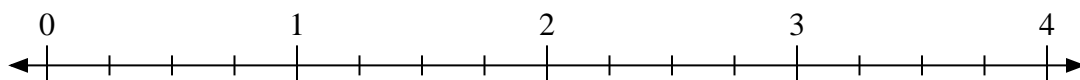
3) $4 \div \frac{1}{6}$



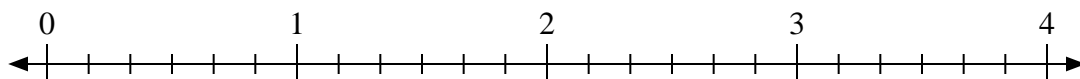
4) $3 \div \frac{1}{4}$



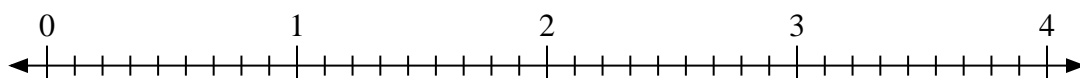
5) $4 \div \frac{2}{4}$



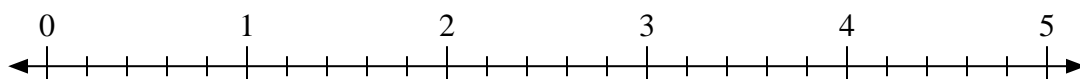
6) $4 \div \frac{5}{6}$



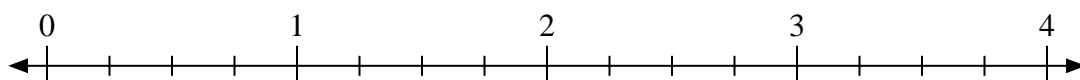
7) $2 \div \frac{5}{9}$



8) $2 \div \frac{3}{5}$



9) $2 \div \frac{3}{4}$



1. _____

2. _____

3. _____

4. _____

5. _____

6. _____

7. _____

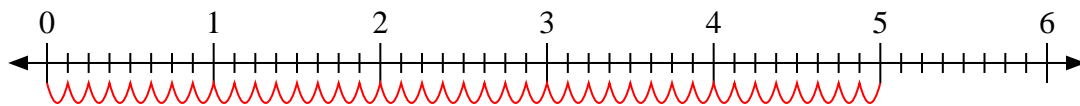
8. _____

9. _____

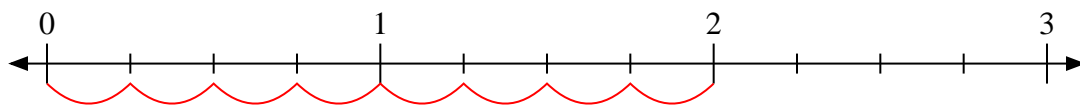


Use the numberline to solve.

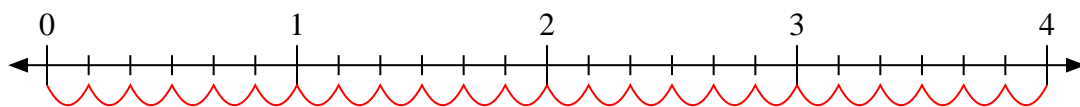
1) $5 \div \frac{1}{8}$



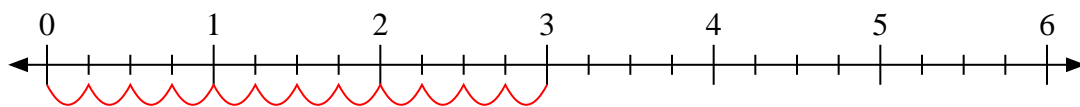
2) $2 \div \frac{1}{4}$



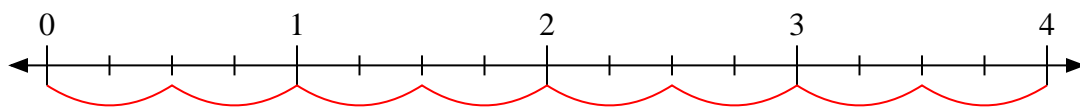
3) $4 \div \frac{1}{6}$



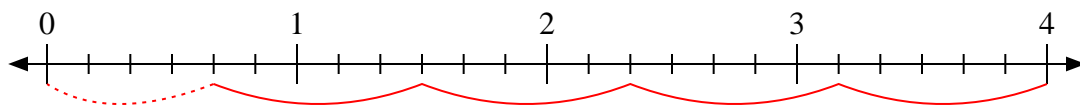
4) $3 \div \frac{1}{4}$



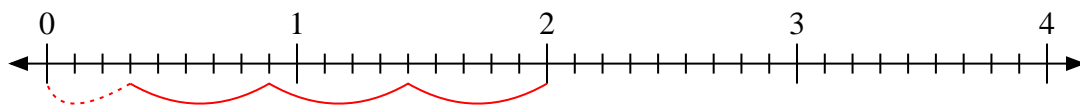
5) $4 \div \frac{2}{4}$



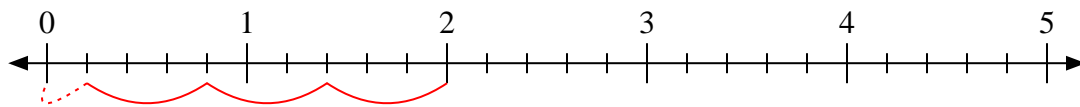
6) $4 \div \frac{5}{6}$



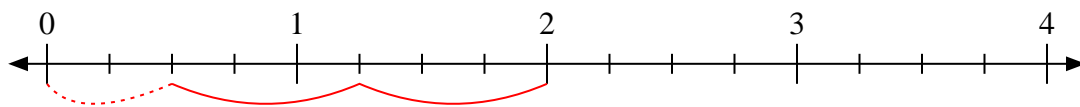
7) $2 \div \frac{5}{9}$



8) $2 \div \frac{3}{5}$



9) $2 \div \frac{3}{4}$



Answers

1. 40

2. 8

3. 24

4. 12

5. 8

6. $4 \frac{4}{5}$

7. $3 \frac{3}{5}$

8. $3 \frac{1}{3}$

9. $2 \frac{2}{3}$