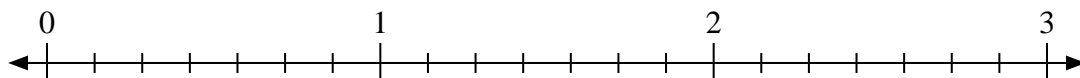


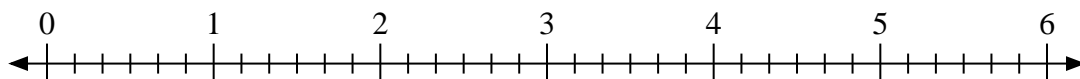


Use the numberline to solve.

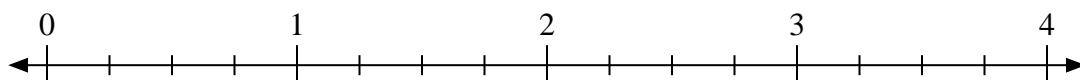
1)  $2 \div \frac{3}{7}$



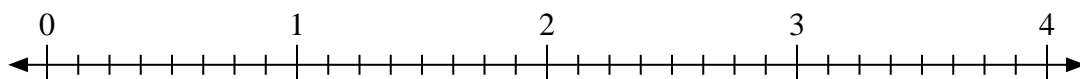
2)  $6 \div \frac{3}{6}$



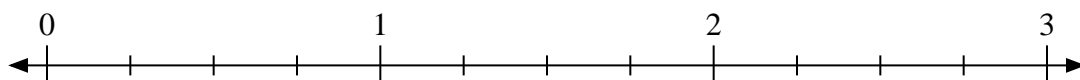
3)  $2 \div \frac{1}{4}$



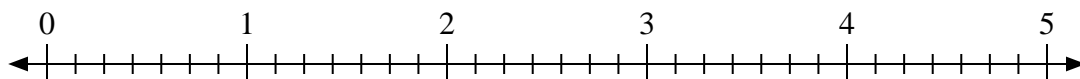
4)  $2 \div \frac{2}{8}$



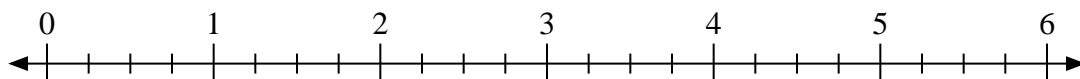
5)  $3 \div \frac{2}{4}$



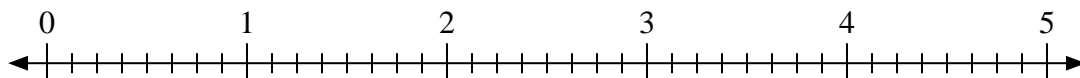
6)  $5 \div \frac{4}{7}$



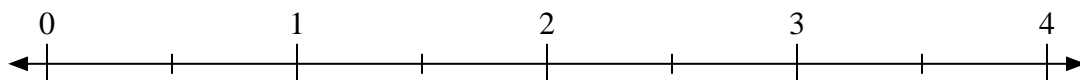
7)  $6 \div \frac{1}{4}$



8)  $5 \div \frac{5}{8}$



9)  $3 \div \frac{1}{2}$



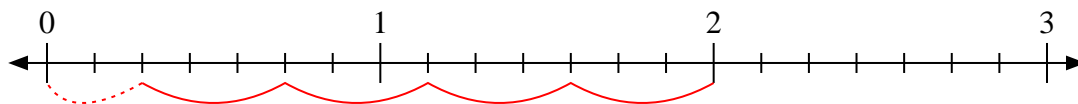
Answers

1. \_\_\_\_\_
2. \_\_\_\_\_
3. \_\_\_\_\_
4. \_\_\_\_\_
5. \_\_\_\_\_
6. \_\_\_\_\_
7. \_\_\_\_\_
8. \_\_\_\_\_
9. \_\_\_\_\_

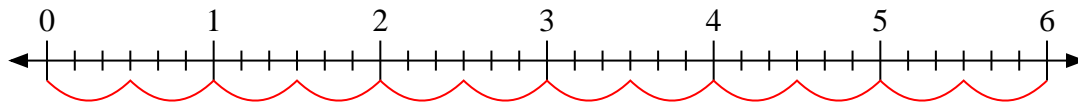


Use the numberline to solve.

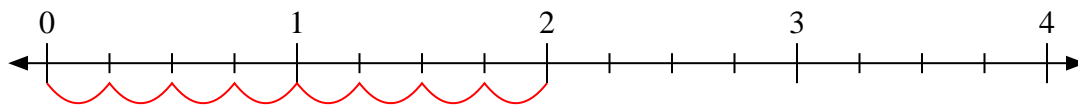
1)  $2 \div \frac{3}{7}$



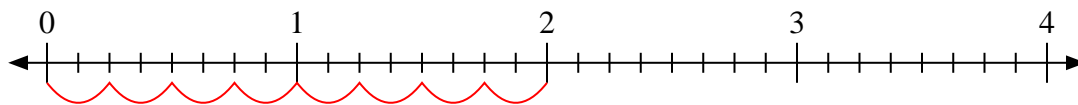
2)  $6 \div \frac{3}{6}$



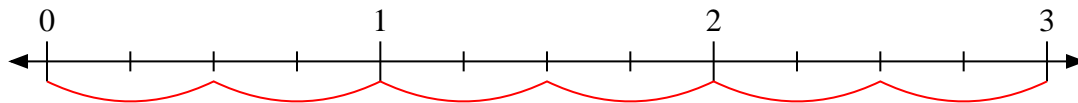
3)  $2 \div \frac{1}{4}$



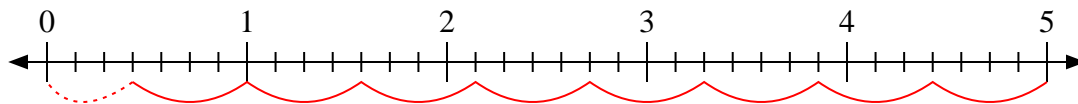
4)  $2 \div \frac{2}{8}$



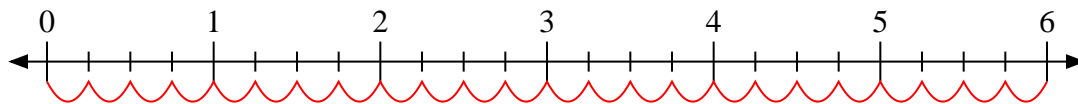
5)  $3 \div \frac{2}{4}$



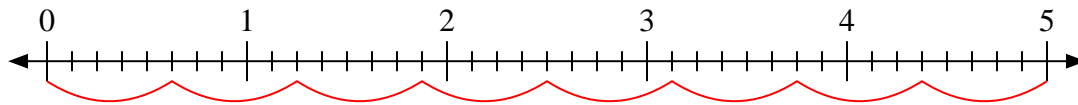
6)  $5 \div \frac{4}{7}$



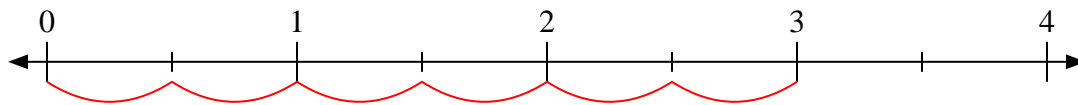
7)  $6 \div \frac{1}{4}$



8)  $5 \div \frac{5}{8}$



9)  $3 \div \frac{1}{2}$



Answers

1. 4 <sup>2</sup>/<sub>3</sub>

2. 12

3. 8

4. 8

5. 6

6. 8 <sup>3</sup>/<sub>4</sub>

7. 24

8. 8

9. 6