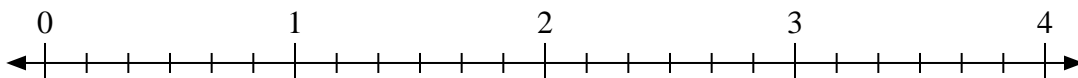




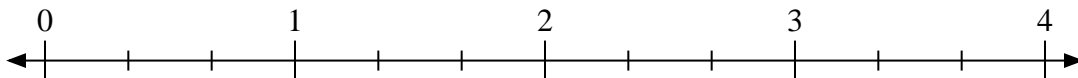
Use the numberline to solve.

Answers

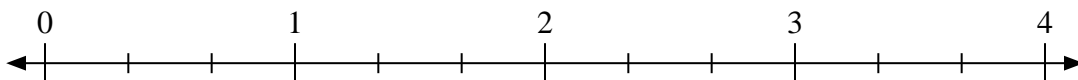
1)  $3 \div \frac{2}{6}$



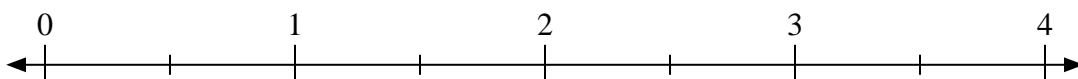
2)  $2 \div \frac{2}{3}$



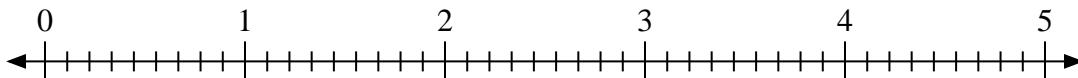
3)  $4 \div \frac{1}{3}$



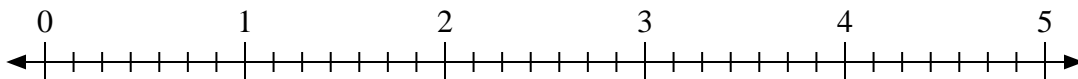
4)  $2 \div \frac{1}{2}$



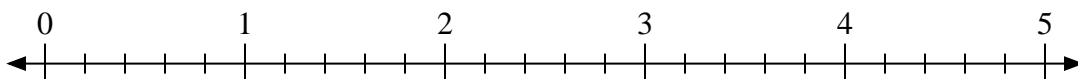
5)  $3 \div \frac{5}{9}$



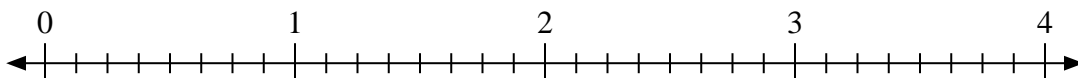
6)  $4 \div \frac{1}{7}$



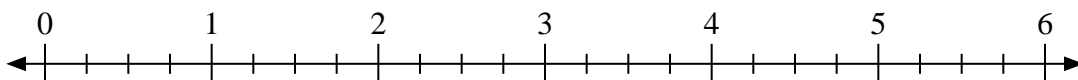
7)  $4 \div \frac{2}{5}$



8)  $4 \div \frac{3}{8}$



9)  $2 \div \frac{1}{4}$



1. \_\_\_\_\_

2. \_\_\_\_\_

3. \_\_\_\_\_

4. \_\_\_\_\_

5. \_\_\_\_\_

6. \_\_\_\_\_

7. \_\_\_\_\_

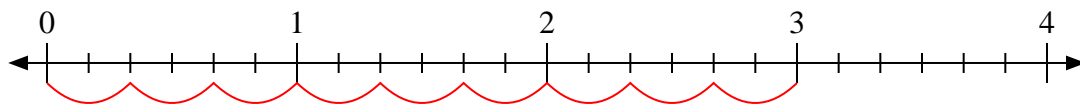
8. \_\_\_\_\_

9. \_\_\_\_\_

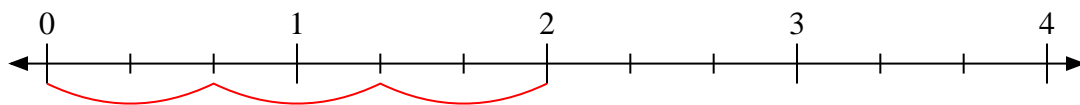


Use the numberline to solve.

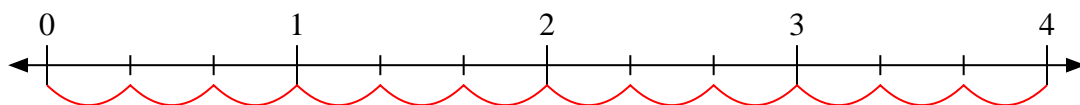
1)  $3 \div \frac{2}{6}$



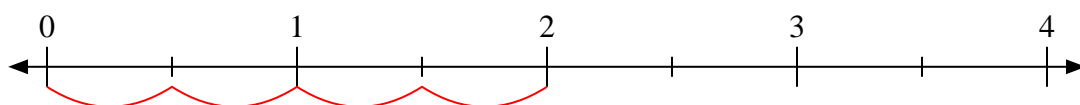
2)  $2 \div \frac{2}{3}$



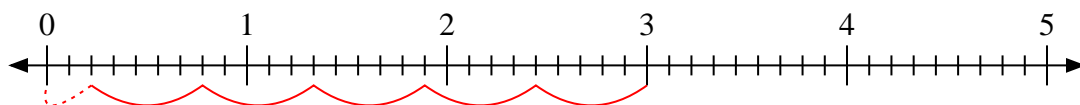
3)  $4 \div \frac{1}{3}$



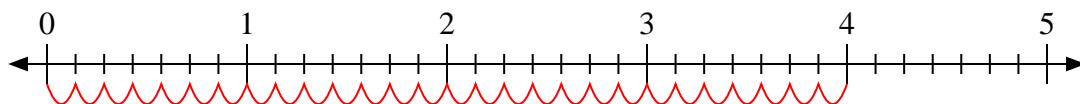
4)  $2 \div \frac{1}{2}$



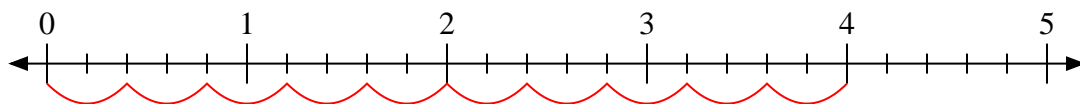
5)  $3 \div \frac{5}{9}$



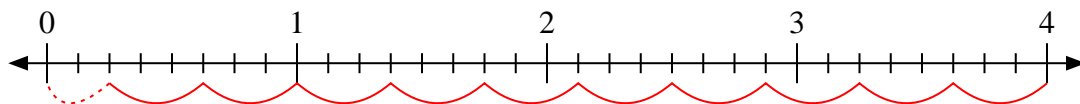
6)  $4 \div \frac{1}{7}$



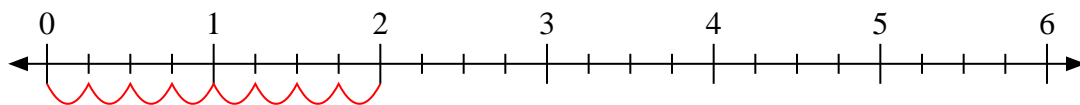
7)  $4 \div \frac{2}{5}$



8)  $4 \div \frac{3}{8}$



9)  $2 \div \frac{1}{4}$



Answers

1. 9

2. 3

3. 12

4. 4

5.  $5 \frac{2}{5}$

6. 28

7. 10

8.  $10 \frac{2}{3}$

9. 8