



Solve each problem by marking off the fractions. The first is completed for you.

Answers

Ex) $3 \div \frac{1}{4} = ?$ This is the same as saying: How many $\frac{1}{4}$ are there in 3 wholes?

Ex. **12**

1 Whole				1 Whole				1 Whole			

1. _____

1) $4 \div \frac{1}{4} =$

2. _____

1 Whole			1 Whole			1 Whole			1 Whole		

3. _____

2) $6 \div \frac{1}{7} =$

4. _____

1 Whole		1 Whole		1 Whole		1 Whole		1 Whole		1 Whole	

5. _____

3) $6 \div \frac{1}{3} =$

6. _____

1 Whole		1 Whole		1 Whole		1 Whole		1 Whole		1 Whole	

7. _____

4) $6 \div \frac{1}{2} =$

8. _____

1 Whole		1 Whole		1 Whole		1 Whole		1 Whole		1 Whole	

9. _____

5) $3 \div \frac{1}{6} =$

1 Whole		1 Whole		1 Whole	

6) $5 \div \frac{1}{2} =$

1 Whole		1 Whole		1 Whole		1 Whole		1 Whole	

7) $2 \div \frac{1}{3} =$

1 Whole		1 Whole	

8) $3 \div \frac{1}{3} =$

1 Whole		1 Whole		1 Whole	

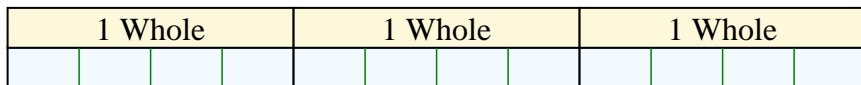
9) $4 \div \frac{1}{5} =$

1 Whole		1 Whole		1 Whole		1 Whole	

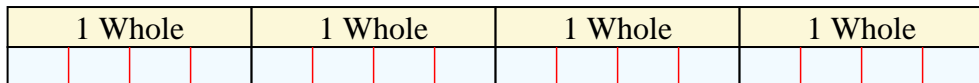


Solve each problem by marking off the fractions. The first is completed for you.


Ex) $3 \div \frac{1}{4} = ?$ This is the same as saying: How many $\frac{1}{4}$ are the in 3 wholes?



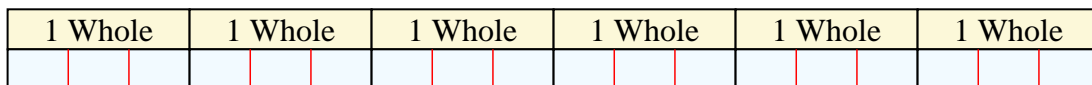
1) $4 \div \frac{1}{4} =$ This is the same as saying: How many $\frac{1}{4}$ are the in 4 wholes?



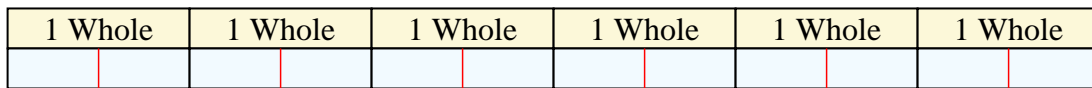
2) $6 \div \frac{1}{7} =$ This is the same as saying: How many $\frac{1}{7}$ are the in 6 wholes?



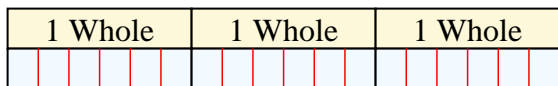
3) $6 \div \frac{1}{3} =$ This is the same as saying: How many $\frac{1}{3}$ are the in 6 wholes?



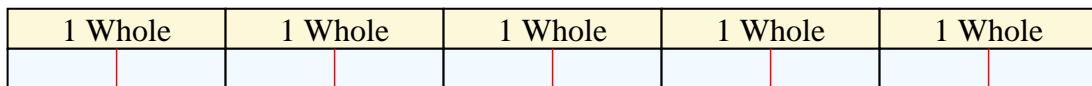
4) $6 \div \frac{1}{2} =$ This is the same as saying: How many $\frac{1}{2}$ are the in 6 wholes?




5) $3 \div \frac{1}{6} =$ This is the same as saying: How many $\frac{1}{6}$ are the in 3 wholes?



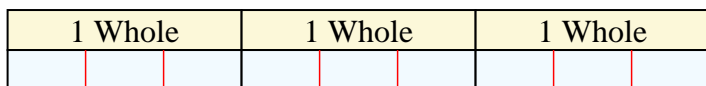
6) $5 \div \frac{1}{2} =$ This is the same as saying: How many $\frac{1}{2}$ are the in 5 wholes?



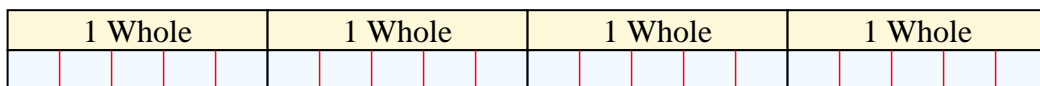
7) $2 \div \frac{1}{3} =$ This is the same as saying: How many $\frac{1}{3}$ are the in 2 wholes?



8) $3 \div \frac{1}{3} =$ This is the same as saying: How many $\frac{1}{3}$ are the in 3 wholes?



9) $4 \div \frac{1}{5} =$ This is the same as saying: How many $\frac{1}{5}$ are the in 4 wholes?



Answers

Ex. 12

1. 16

2. 42

3. 18

4. 12

5. 18

6. 10

7. 6

8. 9

9. 20