



Solve each problem by marking off the fractions. The first is completed for you.

Answers

Ex) $3 \div \frac{1}{5} = ?$ This is the same as saying: How many $\frac{1}{5}$ are there in 3 wholes?

Ex. **15**

1 Whole					1 Whole					1 Whole				

1. _____

1) $4 \div \frac{1}{4} =$

2. _____

1 Whole				1 Whole				1 Whole				1 Whole			

3. _____

2) $2 \div \frac{1}{3} =$

4. _____

1 Whole						1 Whole					

5. _____

3) $3 \div \frac{1}{3} =$

6. _____

1 Whole			1 Whole			1 Whole		

7. _____

4) $3 \div \frac{1}{4} =$

8. _____

1 Whole				1 Whole				1 Whole			

9. _____

5) $2 \div \frac{1}{6} =$

1 Whole			1 Whole		

6) $6 \div \frac{1}{2} =$

1 Whole		1 Whole		1 Whole		1 Whole		1 Whole		1 Whole	

7) $5 \div \frac{1}{6} =$

1 Whole		1 Whole		1 Whole		1 Whole		1 Whole	

8) $6 \div \frac{1}{4} =$

1 Whole		1 Whole		1 Whole		1 Whole		1 Whole		1 Whole	

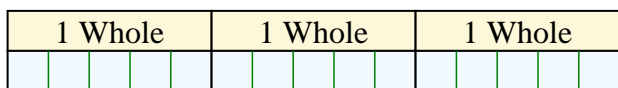
9) $5 \div \frac{1}{3} =$

1 Whole		1 Whole		1 Whole		1 Whole		1 Whole	

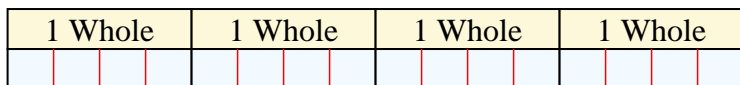


Solve each problem by marking off the fractions. The first is completed for you.


Ex) $3 \div \frac{1}{5} = ?$ This is the same as saying: How many $\frac{1}{5}$ are the in 3 wholes?



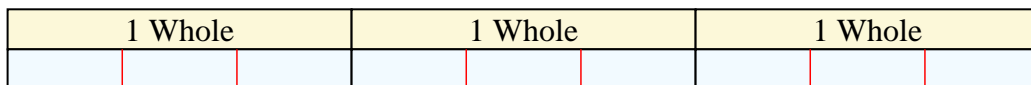
1) $4 \div \frac{1}{4} =$ This is the same as saying: How many $\frac{1}{4}$ are the in 4 wholes?



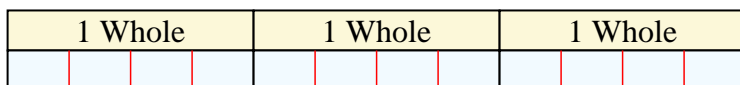
2) $2 \div \frac{1}{3} =$ This is the same as saying: How many $\frac{1}{3}$ are the in 2 wholes?




3) $3 \div \frac{1}{3} =$ This is the same as saying: How many $\frac{1}{3}$ are the in 3 wholes?



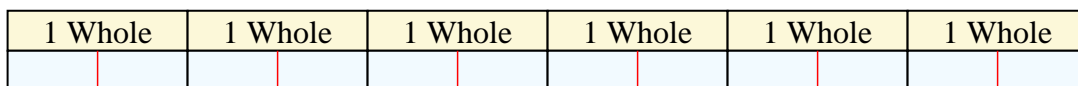
4) $3 \div \frac{1}{4} =$ This is the same as saying: How many $\frac{1}{4}$ are the in 3 wholes?



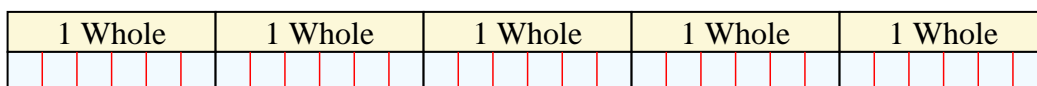
5) $2 \div \frac{1}{6} =$ This is the same as saying: How many $\frac{1}{6}$ are the in 2 wholes?



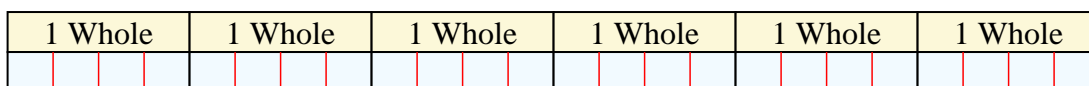
6) $6 \div \frac{1}{2} =$ This is the same as saying: How many $\frac{1}{2}$ are the in 6 wholes?



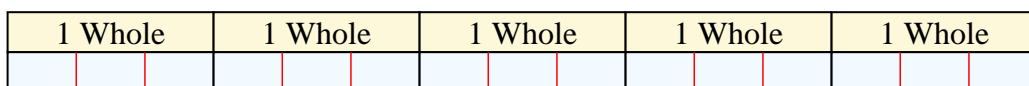
7) $5 \div \frac{1}{6} =$ This is the same as saying: How many $\frac{1}{6}$ are the in 5 wholes?



8) $6 \div \frac{1}{4} =$ This is the same as saying: How many $\frac{1}{4}$ are the in 6 wholes?



9) $5 \div \frac{1}{3} =$ This is the same as saying: How many $\frac{1}{3}$ are the in 5 wholes?



Answers

Ex. 15

1. 16

2. 6

3. 9

4. 12

5. 12

6. 12

7. 30

8. 24

9. 15