



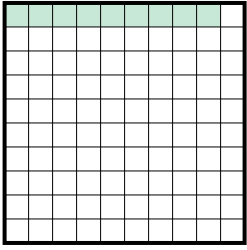




Determine the value written as a fraction , decimal & a percent.

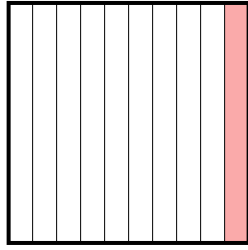
**Answers**

Ex)



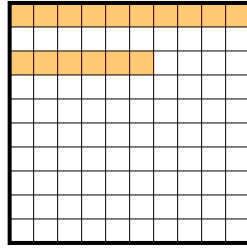
fraction  $\frac{9}{100}$   
decimal 0.09  
percent 9

1)



fraction \_\_\_\_\_  
decimal \_\_\_\_\_  
percent \_\_\_\_\_

2)



fraction \_\_\_\_\_  
decimal \_\_\_\_\_  
percent \_\_\_\_\_

Ex.  $\frac{9}{100}$  0.09 9%

1. \_\_\_\_\_

2. \_\_\_\_\_

3. \_\_\_\_\_

4. \_\_\_\_\_

5. \_\_\_\_\_

6. \_\_\_\_\_

7. \_\_\_\_\_

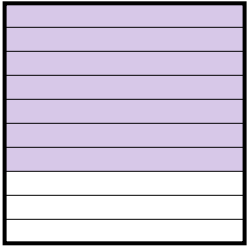
8. \_\_\_\_\_

9. \_\_\_\_\_

10. \_\_\_\_\_

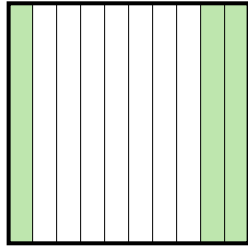
11. \_\_\_\_\_

3)



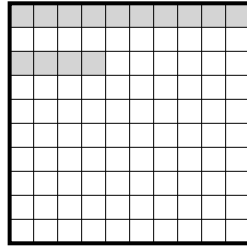
fraction \_\_\_\_\_  
decimal \_\_\_\_\_  
percent \_\_\_\_\_

4)



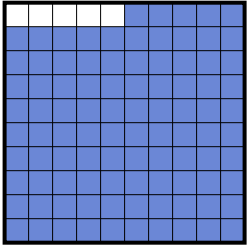
fraction \_\_\_\_\_  
decimal \_\_\_\_\_  
percent \_\_\_\_\_

5)



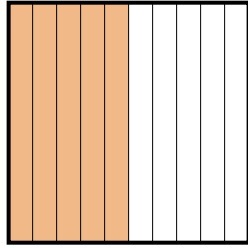
fraction \_\_\_\_\_  
decimal \_\_\_\_\_  
percent \_\_\_\_\_

6)



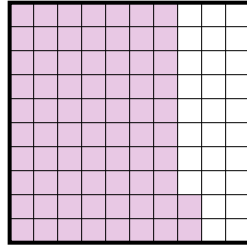
fraction \_\_\_\_\_  
decimal \_\_\_\_\_  
percent \_\_\_\_\_

7)



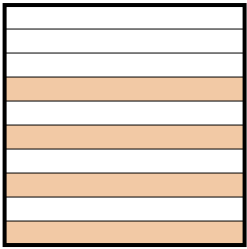
fraction \_\_\_\_\_  
decimal \_\_\_\_\_  
percent \_\_\_\_\_

8)




fraction \_\_\_\_\_  
decimal \_\_\_\_\_  
percent \_\_\_\_\_

9)




fraction \_\_\_\_\_  
decimal \_\_\_\_\_  
percent \_\_\_\_\_

10)



fraction \_\_\_\_\_  
decimal \_\_\_\_\_  
percent \_\_\_\_\_

11)

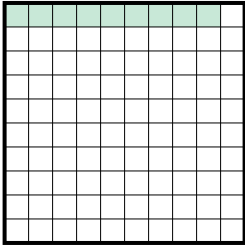


fraction \_\_\_\_\_  
decimal \_\_\_\_\_  
percent \_\_\_\_\_



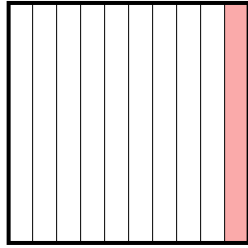
Determine the value written as a fraction , decimal & a percent.

Ex)



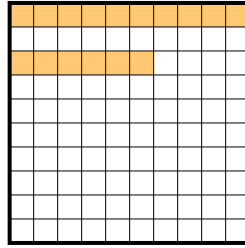
fraction  $\frac{9}{100}$   
 decimal  $0.09$   
 percent  $9$

1)




fraction  $\frac{1}{10}$   
 decimal  $0.1$   
 percent  $10$

2)



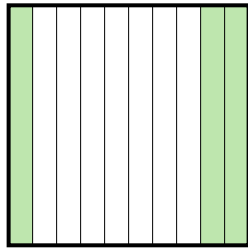
fraction  $\frac{16}{100}$   
 decimal  $0.16$   
 percent  $16$

3)




fraction  $\frac{7}{10}$   
 decimal  $0.7$   
 percent  $70$

4)



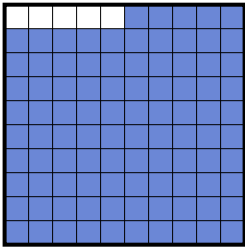
fraction  $\frac{3}{10}$   
 decimal  $0.3$   
 percent  $30$

5)



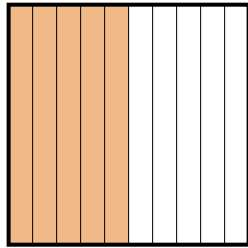
fraction  $\frac{14}{100}$   
 decimal  $0.14$   
 percent  $14$

6)



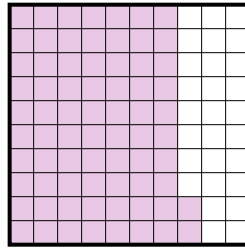
fraction  $\frac{95}{100}$   
 decimal  $0.95$   
 percent  $95$

7)



fraction  $\frac{5}{10}$   
 decimal  $0.5$   
 percent  $50$

8)




fraction  $\frac{72}{100}$   
 decimal  $0.72$   
 percent  $72$

9)




fraction  $\frac{4}{10}$   
 decimal  $0.4$   
 percent  $40$

10)



fraction  $\frac{2}{10}$   
 decimal  $0.2$   
 percent  $20$

11)



fraction  $\frac{6}{10}$   
 decimal  $0.6$   
 percent  $60$

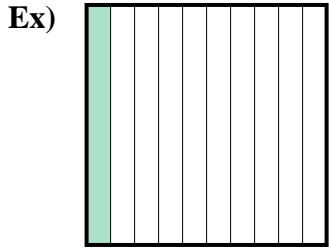
**Answers**

Ex.	$\frac{9}{100}$	<b>0.09</b>	<b>9%</b>
1.	$\frac{1}{10}$	<b>0.1</b>	<b>10%</b>
2.	$\frac{16}{100}$	<b>0.16</b>	<b>16%</b>
3.	$\frac{7}{10}$	<b>0.7</b>	<b>70%</b>
4.	$\frac{3}{10}$	<b>0.3</b>	<b>30%</b>
5.	$\frac{14}{100}$	<b>0.14</b>	<b>14%</b>
6.	$\frac{95}{100}$	<b>0.95</b>	<b>95%</b>
7.	$\frac{5}{10}$	<b>0.5</b>	<b>50%</b>
8.	$\frac{72}{100}$	<b>0.72</b>	<b>72%</b>
9.	$\frac{4}{10}$	<b>0.4</b>	<b>40%</b>
10.	$\frac{2}{10}$	<b>0.2</b>	<b>20%</b>
11.	$\frac{6}{10}$	<b>0.6</b>	<b>60%</b>

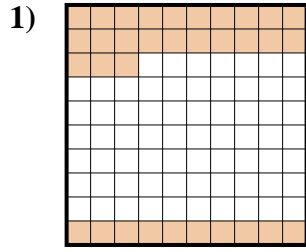


Determine the value written as a fraction , decimal & a percent.

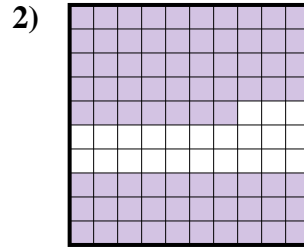
**Answers**



fraction  $\frac{1}{10}$   
 decimal 0.1  
 percent 10



fraction \_\_\_\_\_  
 decimal \_\_\_\_\_  
 percent \_\_\_\_\_



fraction \_\_\_\_\_  
 decimal \_\_\_\_\_  
 percent \_\_\_\_\_

Ex.  $\frac{1}{10}$  0.1 10%

1. \_\_\_\_\_

2. \_\_\_\_\_

3. \_\_\_\_\_

4. \_\_\_\_\_

5. \_\_\_\_\_

6. \_\_\_\_\_

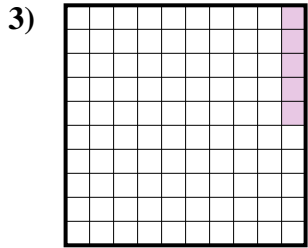
7. \_\_\_\_\_

8. \_\_\_\_\_

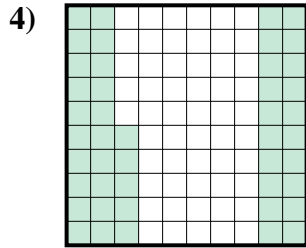
9. \_\_\_\_\_

10. \_\_\_\_\_

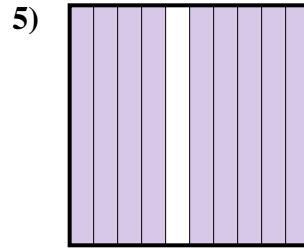
11. \_\_\_\_\_



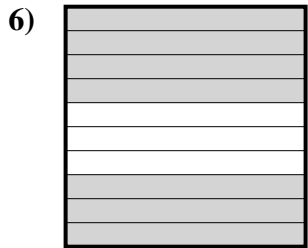
fraction \_\_\_\_\_  
 decimal \_\_\_\_\_  
 percent \_\_\_\_\_



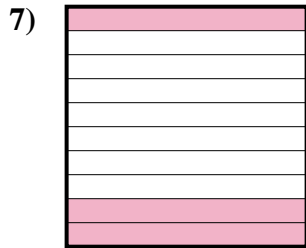
fraction \_\_\_\_\_  
 decimal \_\_\_\_\_  
 percent \_\_\_\_\_



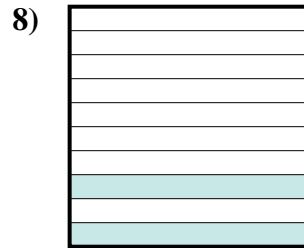
fraction \_\_\_\_\_  
 decimal \_\_\_\_\_  
 percent \_\_\_\_\_



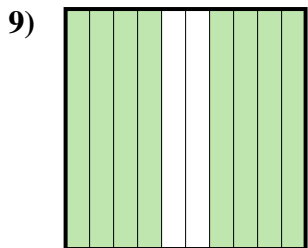
fraction \_\_\_\_\_  
 decimal \_\_\_\_\_  
 percent \_\_\_\_\_



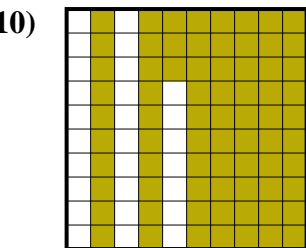
fraction \_\_\_\_\_  
 decimal \_\_\_\_\_  
 percent \_\_\_\_\_



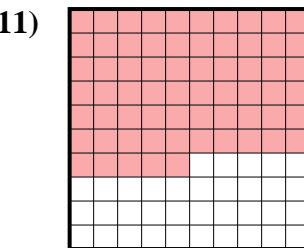
fraction \_\_\_\_\_  
 decimal \_\_\_\_\_  
 percent \_\_\_\_\_



fraction \_\_\_\_\_  
 decimal \_\_\_\_\_  
 percent \_\_\_\_\_



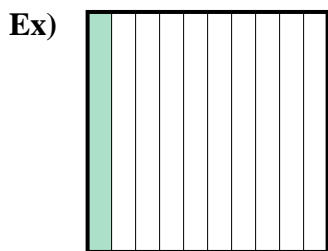
fraction \_\_\_\_\_  
 decimal \_\_\_\_\_  
 percent \_\_\_\_\_



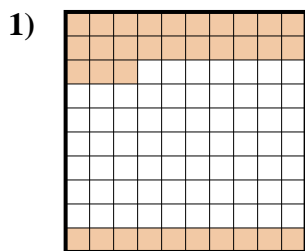
fraction \_\_\_\_\_  
 decimal \_\_\_\_\_  
 percent \_\_\_\_\_



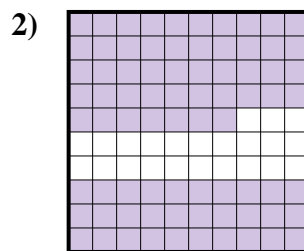
Determine the value written as a fraction , decimal & a percent.



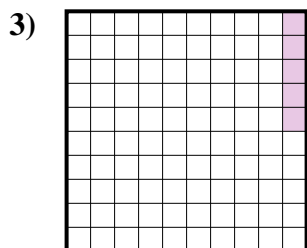
fraction  $\frac{1}{10}$   
 decimal  $0.1$   
 percent  $10$



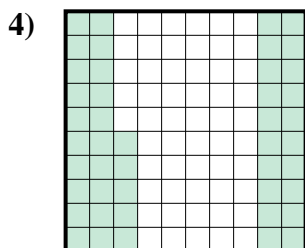
fraction  $\frac{33}{100}$   
 decimal  $0.33$   
 percent  $33$



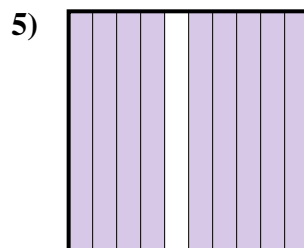
fraction  $\frac{77}{100}$   
 decimal  $0.77$   
 percent  $77$




fraction  $\frac{5}{100}$   
 decimal  $0.05$   
 percent  $5$



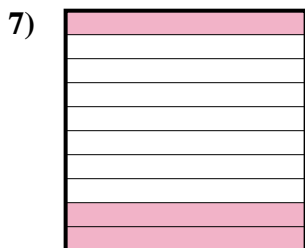
fraction  $\frac{45}{100}$   
 decimal  $0.45$   
 percent  $45$




fraction  $\frac{9}{10}$   
 decimal  $0.9$   
 percent  $90$



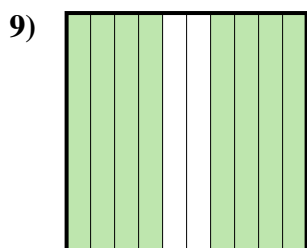
fraction  $\frac{7}{10}$   
 decimal  $0.7$   
 percent  $70$



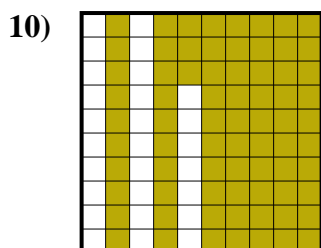
fraction  $\frac{3}{10}$   
 decimal  $0.3$   
 percent  $30$



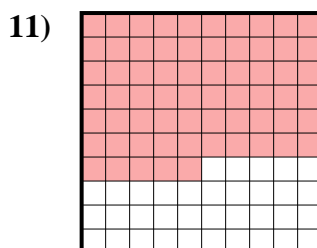
fraction  $\frac{2}{10}$   
 decimal  $0.2$   
 percent  $20$



fraction  $\frac{8}{10}$   
 decimal  $0.8$   
 percent  $80$



fraction  $\frac{73}{100}$   
 decimal  $0.73$   
 percent  $73$



fraction  $\frac{65}{100}$   
 decimal  $0.65$   
 percent  $65$

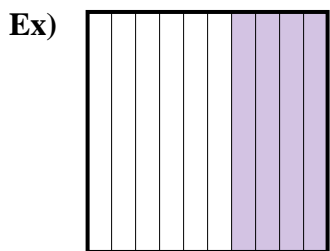
**Answers**

- Ex.  $\frac{1}{10}$  **0.1** **10%**  
 1.  $\frac{33}{100}$  **0.33** **33%**  
 2.  $\frac{77}{100}$  **0.77** **77%**  
 3.  $\frac{5}{100}$  **0.05** **5%**  
 4.  $\frac{45}{100}$  **0.45** **45%**  
 5.  $\frac{9}{10}$  **0.9** **90%**  
 6.  $\frac{7}{10}$  **0.7** **70%**  
 7.  $\frac{3}{10}$  **0.3** **30%**  
 8.  $\frac{2}{10}$  **0.2** **20%**  
 9.  $\frac{8}{10}$  **0.8** **80%**  
 10.  $\frac{73}{100}$  **0.73** **73%**  
 11.  $\frac{65}{100}$  **0.65** **65%**

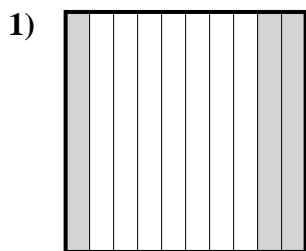




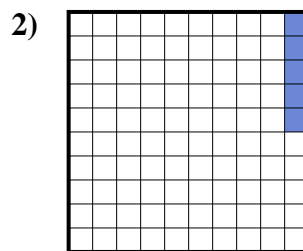
Determine the value written as a fraction , decimal & a percent.



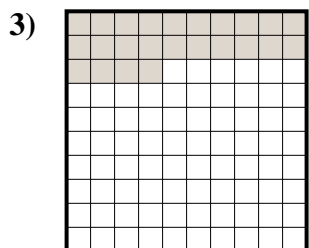
fraction  $\frac{4}{10}$   
 decimal  $0.4$   
 percent  $40$



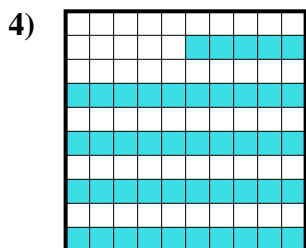
fraction  $\frac{3}{10}$   
 decimal  $0.3$   
 percent  $30$



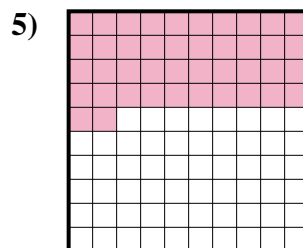
fraction  $\frac{5}{100}$   
 decimal  $0.05$   
 percent  $5$



fraction  $\frac{24}{100}$   
 decimal  $0.24$   
 percent  $24$




fraction  $\frac{45}{100}$   
 decimal  $0.45$   
 percent  $45$



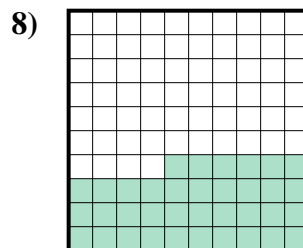
fraction  $\frac{42}{100}$   
 decimal  $0.42$   
 percent  $42$



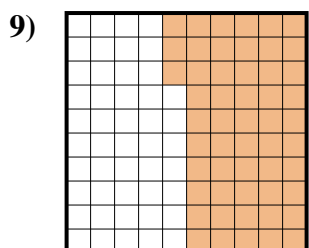
fraction  $\frac{2}{10}$   
 decimal  $0.2$   
 percent  $20$



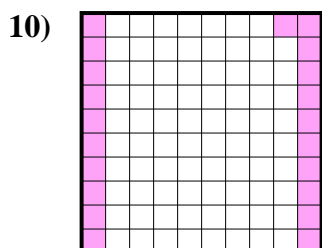
fraction  $\frac{1}{10}$   
 decimal  $0.1$   
 percent  $10$



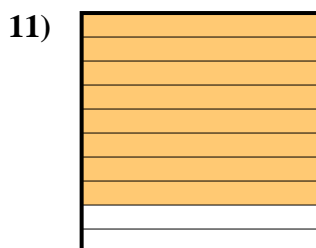
fraction  $\frac{36}{100}$   
 decimal  $0.36$   
 percent  $36$



fraction  $\frac{53}{100}$   
 decimal  $0.53$   
 percent  $53$



fraction  $\frac{21}{100}$   
 decimal  $0.21$   
 percent  $21$



fraction  $\frac{8}{10}$   
 decimal  $0.8$   
 percent  $80$

**Answers**

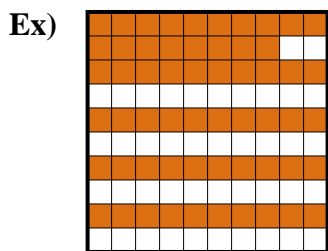
Ex.	$\frac{4}{10}$	<b>0.4</b>	<b>40%</b>
1.	$\frac{3}{10}$	<b>0.3</b>	<b>30%</b>
2.	$\frac{5}{100}$	<b>0.05</b>	<b>5%</b>
3.	$\frac{24}{100}$	<b>0.24</b>	<b>24%</b>
4.	$\frac{45}{100}$	<b>0.45</b>	<b>45%</b>
5.	$\frac{42}{100}$	<b>0.42</b>	<b>42%</b>
6.	$\frac{2}{10}$	<b>0.2</b>	<b>20%</b>
7.	$\frac{1}{10}$	<b>0.1</b>	<b>10%</b>
8.	$\frac{36}{100}$	<b>0.36</b>	<b>36%</b>
9.	$\frac{53}{100}$	<b>0.53</b>	<b>53%</b>
10.	$\frac{21}{100}$	<b>0.21</b>	<b>21%</b>
11.	$\frac{8}{10}$	<b>0.8</b>	<b>80%</b>



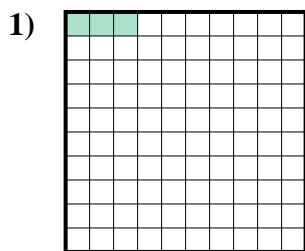




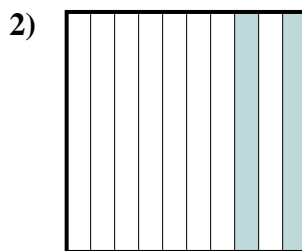
Determine the value written as a fraction , decimal & a percent.



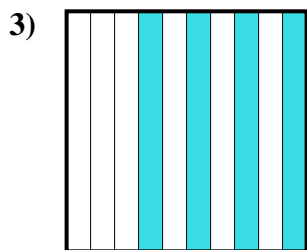
fraction  $\frac{58}{100}$   
 decimal  $0.58$   
 percent  $58$



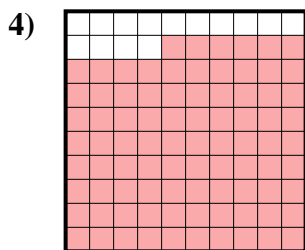
fraction  $\frac{3}{100}$   
 decimal  $0.03$   
 percent  $3$



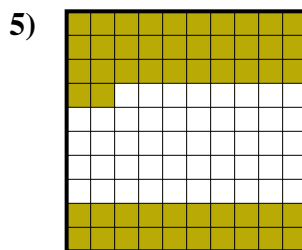
fraction  $\frac{2}{10}$   
 decimal  $0.2$   
 percent  $20$




fraction  $\frac{4}{10}$   
 decimal  $0.4$   
 percent  $40$



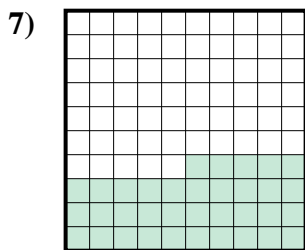
fraction  $\frac{86}{100}$   
 decimal  $0.86$   
 percent  $86$



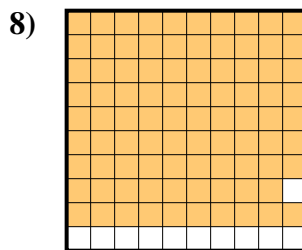
fraction  $\frac{52}{100}$   
 decimal  $0.52$   
 percent  $52$



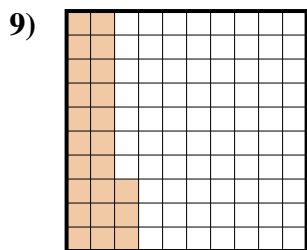
fraction  $\frac{5}{10}$   
 decimal  $0.5$   
 percent  $50$



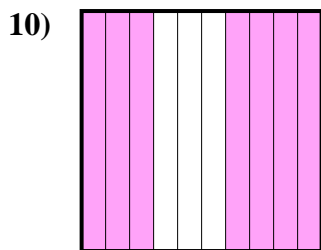
fraction  $\frac{35}{100}$   
 decimal  $0.35$   
 percent  $35$



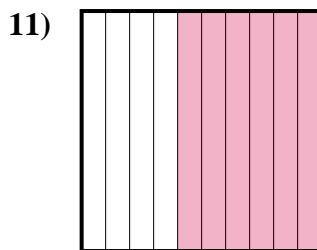
fraction  $\frac{89}{100}$   
 decimal  $0.89$   
 percent  $89$



fraction  $\frac{23}{100}$   
 decimal  $0.23$   
 percent  $23$



fraction  $\frac{7}{10}$   
 decimal  $0.7$   
 percent  $70$



fraction  $\frac{6}{10}$   
 decimal  $0.6$   
 percent  $60$

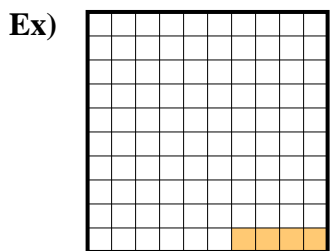
**Answers**

Ex.	$\frac{58}{100}$	<b>0.58</b>	<b>58%</b>
1.	$\frac{3}{100}$	<b>0.03</b>	<b>3%</b>
2.	$\frac{2}{10}$	<b>0.2</b>	<b>20%</b>
3.	$\frac{4}{10}$	<b>0.4</b>	<b>40%</b>
4.	$\frac{86}{100}$	<b>0.86</b>	<b>86%</b>
5.	$\frac{52}{100}$	<b>0.52</b>	<b>52%</b>
6.	$\frac{5}{10}$	<b>0.5</b>	<b>50%</b>
7.	$\frac{35}{100}$	<b>0.35</b>	<b>35%</b>
8.	$\frac{89}{100}$	<b>0.89</b>	<b>89%</b>
9.	$\frac{23}{100}$	<b>0.23</b>	<b>23%</b>
10.	$\frac{7}{10}$	<b>0.7</b>	<b>70%</b>
11.	$\frac{6}{10}$	<b>0.6</b>	<b>60%</b>

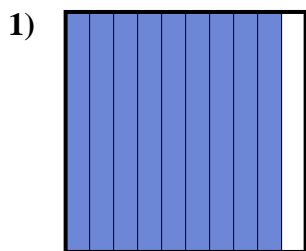




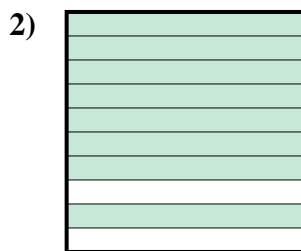
Determine the value written as a fraction , decimal & a percent.




fraction  $\frac{4}{100}$   
 decimal  $0.04$   
 percent  $4$



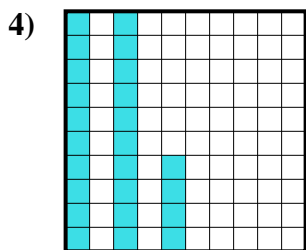
fraction  $\frac{9}{10}$   
 decimal  $0.9$   
 percent  $90$



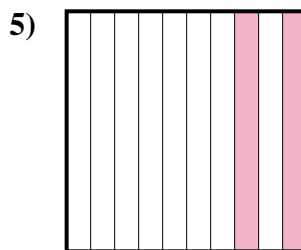
fraction  $\frac{8}{10}$   
 decimal  $0.8$   
 percent  $80$



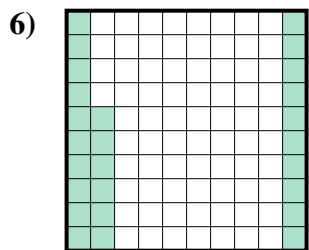
fraction  $\frac{3}{10}$   
 decimal  $0.3$   
 percent  $30$



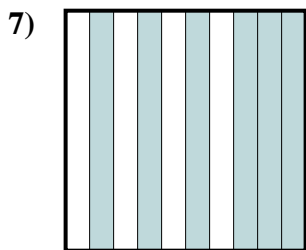
fraction  $\frac{24}{100}$   
 decimal  $0.24$   
 percent  $24$



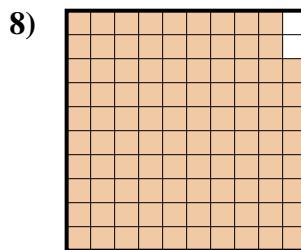
fraction  $\frac{2}{10}$   
 decimal  $0.2$   
 percent  $20$



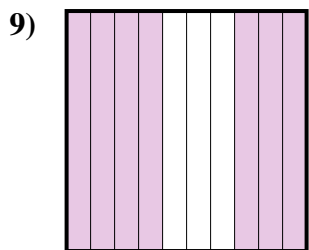
fraction  $\frac{26}{100}$   
 decimal  $0.26$   
 percent  $26$



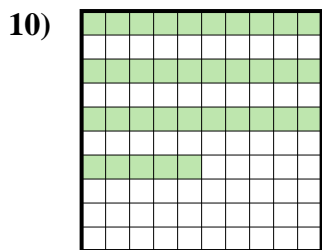
fraction  $\frac{6}{10}$   
 decimal  $0.6$   
 percent  $60$



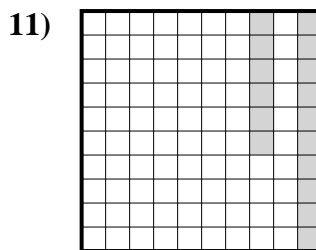
fraction  $\frac{98}{100}$   
 decimal  $0.98$   
 percent  $98$



fraction  $\frac{7}{10}$   
 decimal  $0.7$   
 percent  $70$



fraction  $\frac{35}{100}$   
 decimal  $0.35$   
 percent  $35$



fraction  $\frac{16}{100}$   
 decimal  $0.16$   
 percent  $16$


**Answers**

- Ex.  $\frac{4}{100}$  **0.04** **4%**  
 1.  $\frac{9}{10}$  **0.9** **90%**  
 2.  $\frac{8}{10}$  **0.8** **80%**  
 3.  $\frac{3}{10}$  **0.3** **30%**  
 4.  $\frac{24}{100}$  **0.24** **24%**  
 5.  $\frac{2}{10}$  **0.2** **20%**  
 6.  $\frac{26}{100}$  **0.26** **26%**  
 7.  $\frac{6}{10}$  **0.6** **60%**  
 8.  $\frac{98}{100}$  **0.98** **98%**  
 9.  $\frac{7}{10}$  **0.7** **70%**  
 10.  $\frac{35}{100}$  **0.35** **35%**  
 11.  $\frac{16}{100}$  **0.16** **16%**






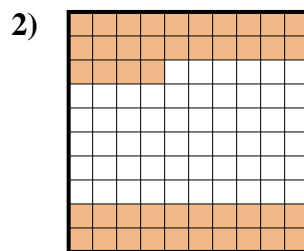
Determine the value written as a fraction , decimal & a percent.



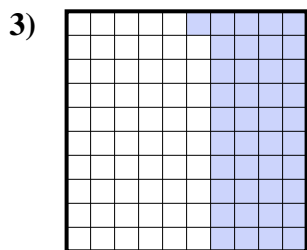
fraction  $\frac{9}{10}$   
 decimal  $0.9$   
 percent  $90$




fraction  $\frac{2}{10}$   
 decimal  $0.2$   
 percent  $20$



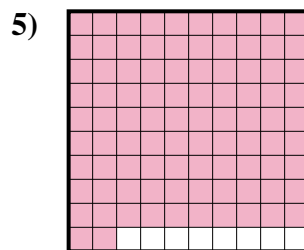
fraction  $\frac{44}{100}$   
 decimal  $0.44$   
 percent  $44$



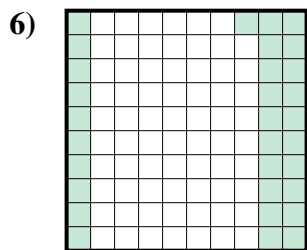
fraction  $\frac{41}{100}$   
 decimal  $0.41$   
 percent  $41$



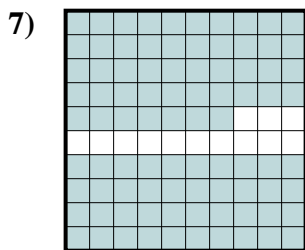
fraction  $\frac{6}{10}$   
 decimal  $0.6$   
 percent  $60$



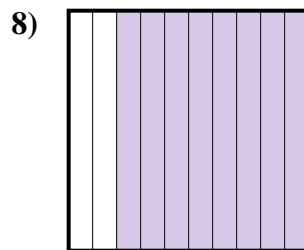
fraction  $\frac{92}{100}$   
 decimal  $0.92$   
 percent  $92$



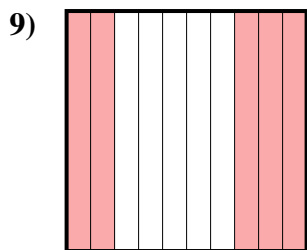
fraction  $\frac{31}{100}$   
 decimal  $0.31$   
 percent  $31$



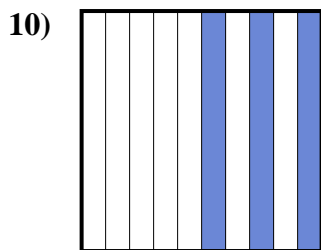
fraction  $\frac{87}{100}$   
 decimal  $0.87$   
 percent  $87$



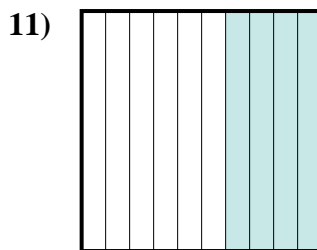
fraction  $\frac{8}{10}$   
 decimal  $0.8$   
 percent  $80$



fraction  $\frac{5}{10}$   
 decimal  $0.5$   
 percent  $50$



fraction  $\frac{3}{10}$   
 decimal  $0.3$   
 percent  $30$



fraction  $\frac{4}{10}$   
 decimal  $0.4$   
 percent  $40$

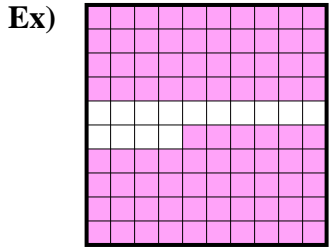
**Answers**

Ex.	$\frac{9}{10}$	<b>0.9</b>	<b>90%</b>
1.	$\frac{2}{10}$	<b>0.2</b>	<b>20%</b>
2.	$\frac{44}{100}$	<b>0.44</b>	<b>44%</b>
3.	$\frac{41}{100}$	<b>0.41</b>	<b>41%</b>
4.	$\frac{6}{10}$	<b>0.6</b>	<b>60%</b>
5.	$\frac{92}{100}$	<b>0.92</b>	<b>92%</b>
6.	$\frac{31}{100}$	<b>0.31</b>	<b>31%</b>
7.	$\frac{87}{100}$	<b>0.87</b>	<b>87%</b>
8.	$\frac{8}{10}$	<b>0.8</b>	<b>80%</b>
9.	$\frac{5}{10}$	<b>0.5</b>	<b>50%</b>
10.	$\frac{3}{10}$	<b>0.3</b>	<b>30%</b>
11.	$\frac{4}{10}$	<b>0.4</b>	<b>40%</b>

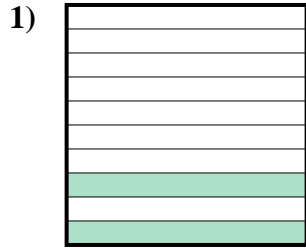


Determine the value written as a fraction , decimal & a percent.

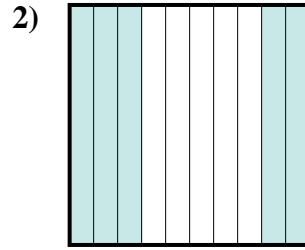
**Answers**



fraction  $\frac{86}{100}$   
 decimal 0.86  
 percent 86



fraction \_\_\_\_\_  
 decimal \_\_\_\_\_  
 percent \_\_\_\_\_



fraction \_\_\_\_\_  
 decimal \_\_\_\_\_  
 percent \_\_\_\_\_

Ex.  $\frac{86}{100}$  **0.86** **86%**

1. \_\_\_\_\_

2. \_\_\_\_\_

3. \_\_\_\_\_

4. \_\_\_\_\_

5. \_\_\_\_\_

6. \_\_\_\_\_

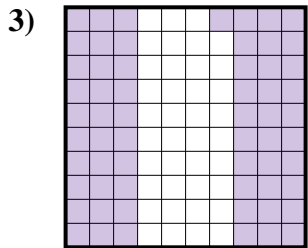
7. \_\_\_\_\_

8. \_\_\_\_\_

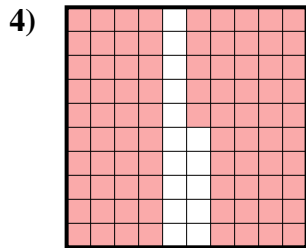
9. \_\_\_\_\_

10. \_\_\_\_\_

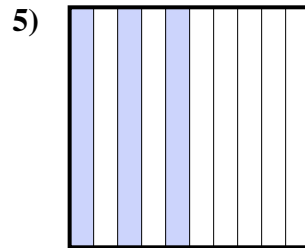
11. \_\_\_\_\_



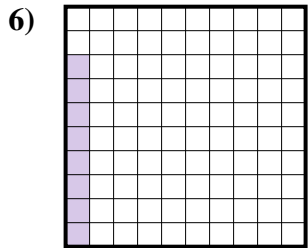
fraction \_\_\_\_\_  
 decimal \_\_\_\_\_  
 percent \_\_\_\_\_



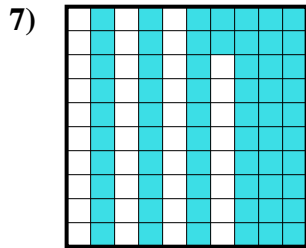
fraction \_\_\_\_\_  
 decimal \_\_\_\_\_  
 percent \_\_\_\_\_



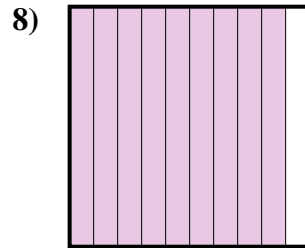
fraction \_\_\_\_\_  
 decimal \_\_\_\_\_  
 percent \_\_\_\_\_



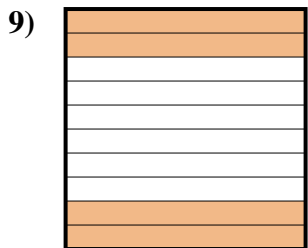
fraction \_\_\_\_\_  
 decimal \_\_\_\_\_  
 percent \_\_\_\_\_



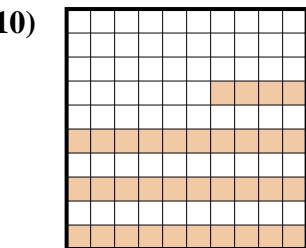
fraction \_\_\_\_\_  
 decimal \_\_\_\_\_  
 percent \_\_\_\_\_




fraction \_\_\_\_\_  
 decimal \_\_\_\_\_  
 percent \_\_\_\_\_



fraction \_\_\_\_\_  
 decimal \_\_\_\_\_  
 percent \_\_\_\_\_



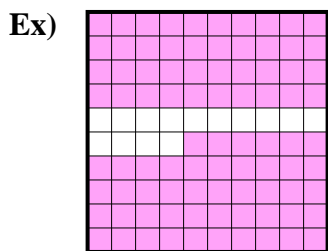
fraction \_\_\_\_\_  
 decimal \_\_\_\_\_  
 percent \_\_\_\_\_




fraction \_\_\_\_\_  
 decimal \_\_\_\_\_  
 percent \_\_\_\_\_



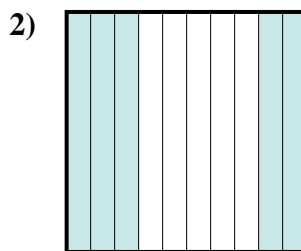
Determine the value written as a fraction , decimal & a percent.



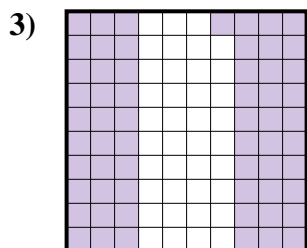
fraction  $\frac{86}{100}$   
 decimal  $0.86$   
 percent  $86$



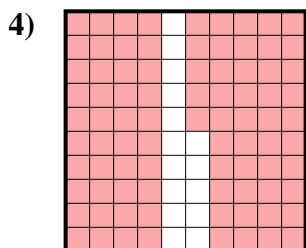
fraction  $\frac{2}{10}$   
 decimal  $0.2$   
 percent  $20$



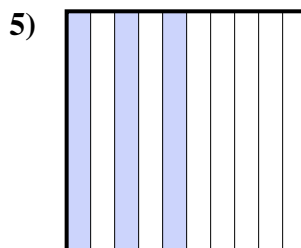
fraction  $\frac{5}{10}$   
 decimal  $0.5$   
 percent  $50$



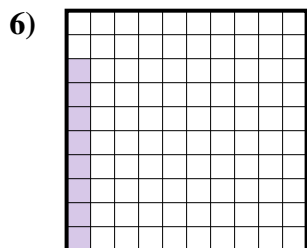
fraction  $\frac{61}{100}$   
 decimal  $0.61$   
 percent  $61$



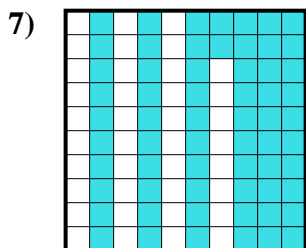
fraction  $\frac{85}{100}$   
 decimal  $0.85$   
 percent  $85$



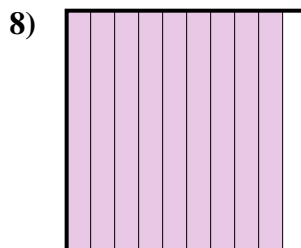
fraction  $\frac{3}{10}$   
 decimal  $0.3$   
 percent  $30$



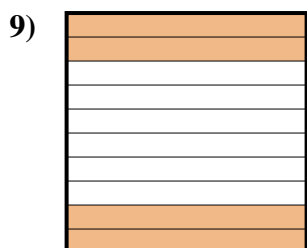
fraction  $\frac{8}{100}$   
 decimal  $0.08$   
 percent  $8$



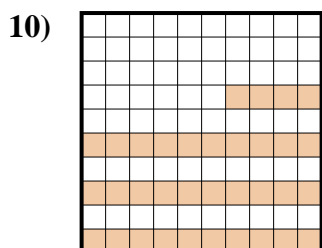
fraction  $\frac{62}{100}$   
 decimal  $0.62$   
 percent  $62$



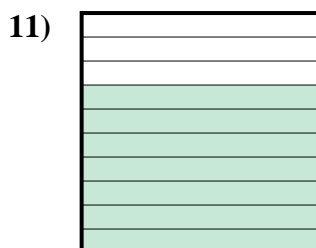
fraction  $\frac{9}{10}$   
 decimal  $0.9$   
 percent  $90$



fraction  $\frac{4}{10}$   
 decimal  $0.4$   
 percent  $40$



fraction  $\frac{34}{100}$   
 decimal  $0.34$   
 percent  $34$



fraction  $\frac{7}{10}$   
 decimal  $0.7$   
 percent  $70$

**Answers**

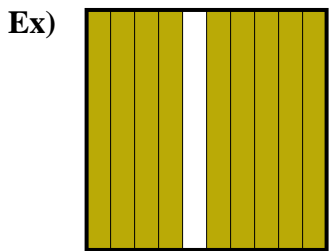
Ex.	$\frac{86}{100}$	<b>0.86</b>	<b>86%</b>
1.	$\frac{2}{10}$	<b>0.2</b>	<b>20%</b>
2.	$\frac{5}{10}$	<b>0.5</b>	<b>50%</b>
3.	$\frac{61}{100}$	<b>0.61</b>	<b>61%</b>
4.	$\frac{85}{100}$	<b>0.85</b>	<b>85%</b>
5.	$\frac{3}{10}$	<b>0.3</b>	<b>30%</b>
6.	$\frac{8}{100}$	<b>0.08</b>	<b>8%</b>
7.	$\frac{62}{100}$	<b>0.62</b>	<b>62%</b>
8.	$\frac{9}{10}$	<b>0.9</b>	<b>90%</b>
9.	$\frac{4}{10}$	<b>0.4</b>	<b>40%</b>
10.	$\frac{34}{100}$	<b>0.34</b>	<b>34%</b>
11.	$\frac{7}{10}$	<b>0.7</b>	<b>70%</b>



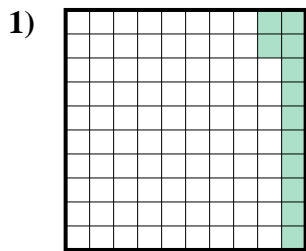


Determine the value written as a fraction , decimal & a percent.

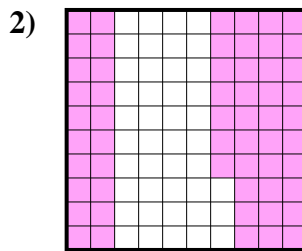
**Answers**



fraction  $\frac{9}{10}$   
 decimal 0.9  
 percent 90



fraction \_\_\_\_\_  
 decimal \_\_\_\_\_  
 percent \_\_\_\_\_



fraction \_\_\_\_\_  
 decimal \_\_\_\_\_  
 percent \_\_\_\_\_

Ex.  $\frac{9}{10}$  0.9 90%

1. \_\_\_\_\_

2. \_\_\_\_\_

3. \_\_\_\_\_

4. \_\_\_\_\_

5. \_\_\_\_\_

6. \_\_\_\_\_

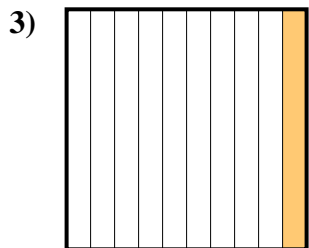
7. \_\_\_\_\_

8. \_\_\_\_\_

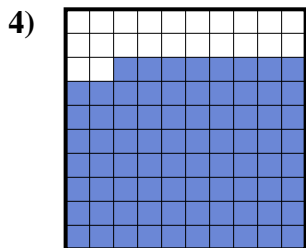
9. \_\_\_\_\_

10. \_\_\_\_\_

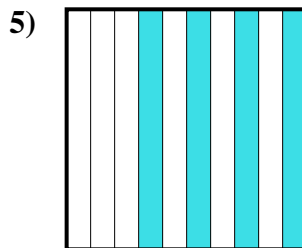
11. \_\_\_\_\_



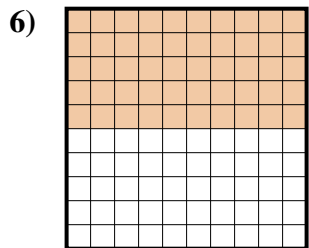
fraction \_\_\_\_\_  
 decimal \_\_\_\_\_  
 percent \_\_\_\_\_



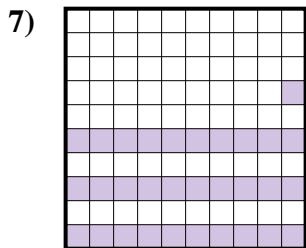
fraction \_\_\_\_\_  
 decimal \_\_\_\_\_  
 percent \_\_\_\_\_



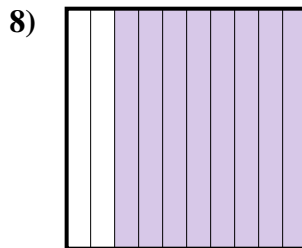
fraction \_\_\_\_\_  
 decimal \_\_\_\_\_  
 percent \_\_\_\_\_



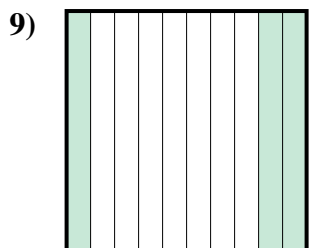
fraction \_\_\_\_\_  
 decimal \_\_\_\_\_  
 percent \_\_\_\_\_



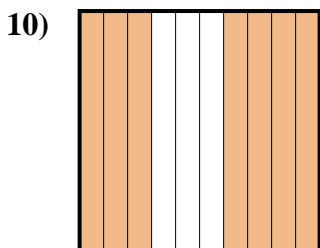
fraction \_\_\_\_\_  
 decimal \_\_\_\_\_  
 percent \_\_\_\_\_



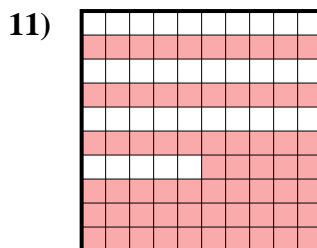
fraction \_\_\_\_\_  
 decimal \_\_\_\_\_  
 percent \_\_\_\_\_



fraction \_\_\_\_\_  
 decimal \_\_\_\_\_  
 percent \_\_\_\_\_



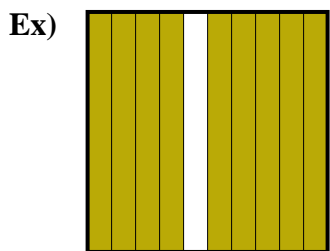
fraction \_\_\_\_\_  
 decimal \_\_\_\_\_  
 percent \_\_\_\_\_



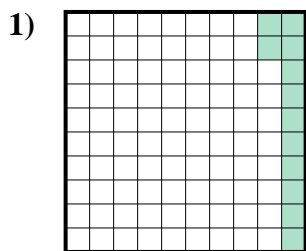
fraction \_\_\_\_\_  
 decimal \_\_\_\_\_  
 percent \_\_\_\_\_



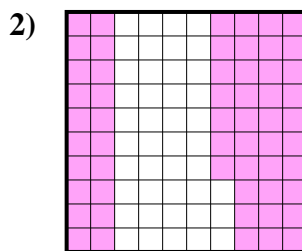
Determine the value written as a fraction , decimal & a percent.



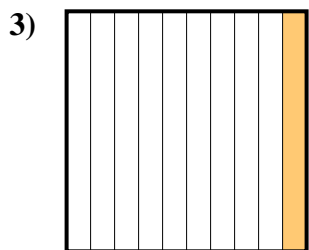
fraction  $\frac{9}{10}$   
 decimal  $0.9$   
 percent  $90$



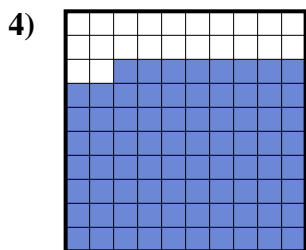
fraction  $\frac{12}{100}$   
 decimal  $0.12$   
 percent  $12$



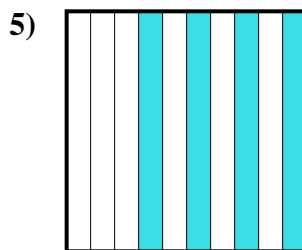
fraction  $\frac{57}{100}$   
 decimal  $0.57$   
 percent  $57$



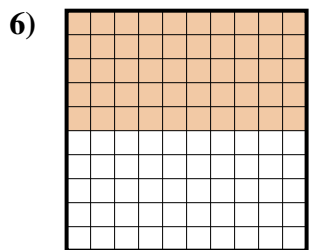
fraction  $\frac{1}{10}$   
 decimal  $0.1$   
 percent  $10$



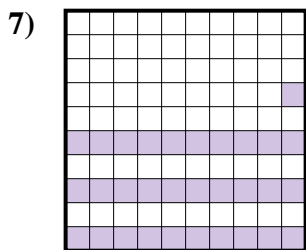
fraction  $\frac{78}{100}$   
 decimal  $0.78$   
 percent  $78$



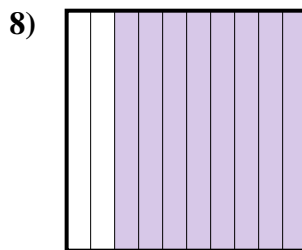
fraction  $\frac{4}{10}$   
 decimal  $0.4$   
 percent  $40$



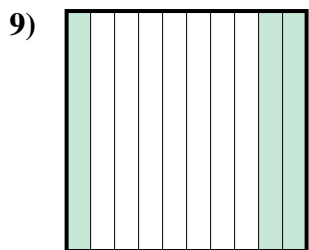
fraction  $\frac{50}{100}$   
 decimal  $0.50$   
 percent  $50$



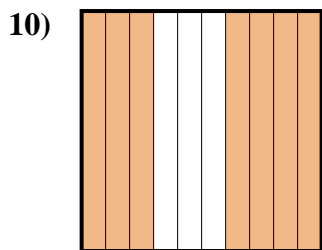
fraction  $\frac{31}{100}$   
 decimal  $0.31$   
 percent  $31$



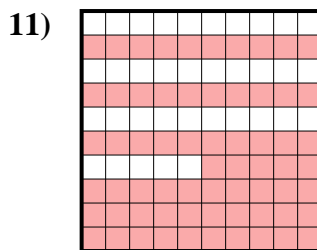
fraction  $\frac{8}{10}$   
 decimal  $0.8$   
 percent  $80$



fraction  $\frac{3}{10}$   
 decimal  $0.3$   
 percent  $30$



fraction  $\frac{7}{10}$   
 decimal  $0.7$   
 percent  $70$



fraction  $\frac{65}{100}$   
 decimal  $0.65$   
 percent  $65$

Answers

- Ex.  $\frac{9}{10}$  **0.9** **90%**  
 1.  $\frac{12}{100}$  **0.12** **12%**  
 2.  $\frac{57}{100}$  **0.57** **57%**  
 3.  $\frac{1}{10}$  **0.1** **10%**  
 4.  $\frac{78}{100}$  **0.78** **78%**  
 5.  $\frac{4}{10}$  **0.4** **40%**  
 6.  $\frac{50}{100}$  **0.50** **50%**  
 7.  $\frac{31}{100}$  **0.31** **31%**  
 8.  $\frac{8}{10}$  **0.8** **80%**  
 9.  $\frac{3}{10}$  **0.3** **30%**  
 10.  $\frac{7}{10}$  **0.7** **70%**  
 11.  $\frac{65}{100}$  **0.65** **65%**



