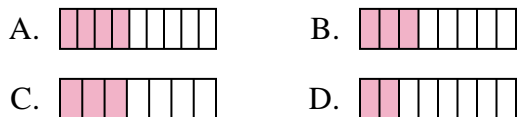




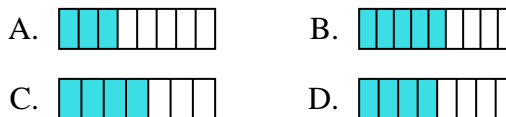
Determine which choice best answers each question.

**Answers**

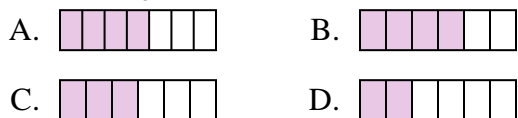
1) Which of the shapes below is shaded to represent  $\frac{3}{8}$ ?



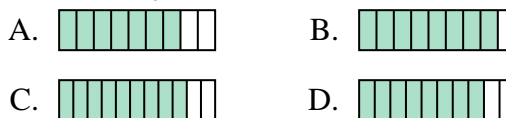
2) Which of the shapes below is shaded to represent  $\frac{4}{8}$ ?



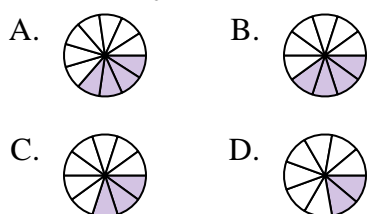
3) Which of the shapes below is shaded to represent  $\frac{3}{6}$ ?



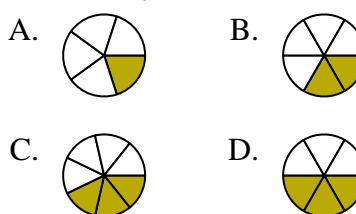
4) Which of the shapes below is shaded to represent  $\frac{8}{10}$ ?



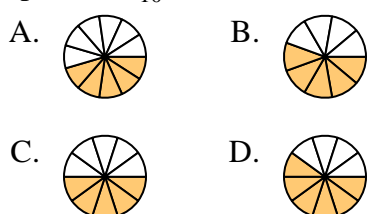
5) Which of the shapes below is shaded to represent  $\frac{3}{10}$ ?



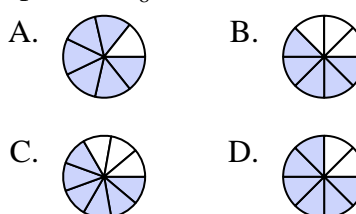
6) Which of the shapes below is shaded to represent  $\frac{2}{6}$ ?



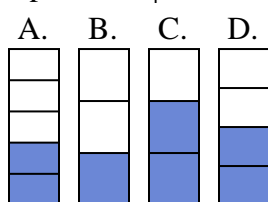
7) Which of the shapes below is shaded to represent  $\frac{5}{10}$ ?



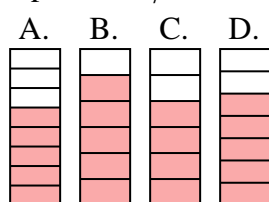
8) Which of the shapes below is shaded to represent  $\frac{6}{8}$ ?



9) Which of the shapes below is shaded to represent  $\frac{2}{4}$ ?



10) Which of the shapes below is shaded to represent  $\frac{5}{7}$ ?



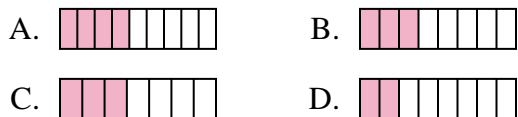
1. \_\_\_\_\_
2. \_\_\_\_\_
3. \_\_\_\_\_
4. \_\_\_\_\_
5. \_\_\_\_\_
6. \_\_\_\_\_
7. \_\_\_\_\_
8. \_\_\_\_\_
9. \_\_\_\_\_
10. \_\_\_\_\_



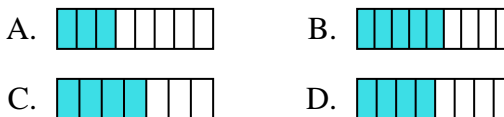
Determine which choice best answers each question.

**Answers**

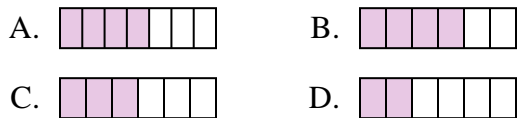
1) Which of the shapes below is shaded to represent  $\frac{3}{8}$ ?



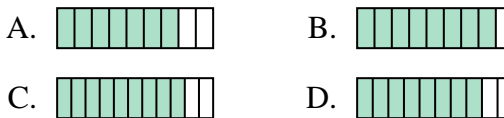
2) Which of the shapes below is shaded to represent  $\frac{4}{8}$ ?



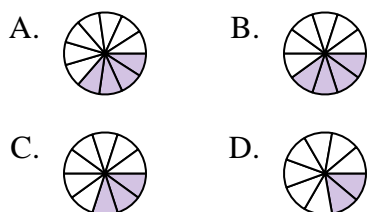
3) Which of the shapes below is shaded to represent  $\frac{3}{6}$ ?



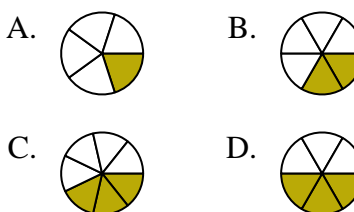
4) Which of the shapes below is shaded to represent  $\frac{8}{10}$ ?



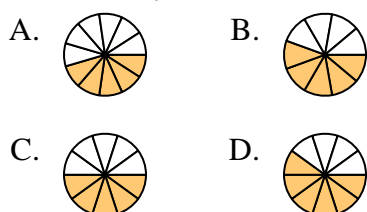
5) Which of the shapes below is shaded to represent  $\frac{3}{10}$ ?



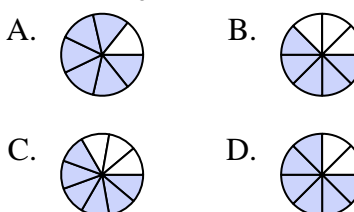
6) Which of the shapes below is shaded to represent  $\frac{2}{6}$ ?



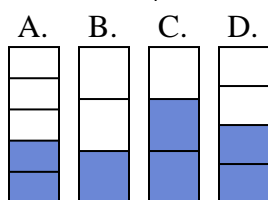
7) Which of the shapes below is shaded to represent  $\frac{5}{10}$ ?



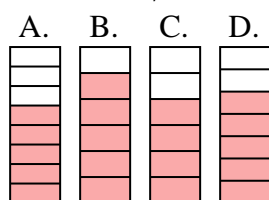
8) Which of the shapes below is shaded to represent  $\frac{6}{8}$ ?



9) Which of the shapes below is shaded to represent  $\frac{2}{4}$ ?



10) Which of the shapes below is shaded to represent  $\frac{5}{7}$ ?



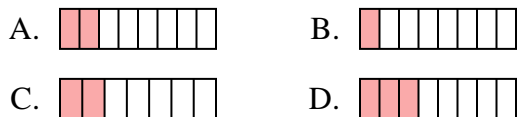
1.     **B**
2.     **D**
3.     **C**
4.     **D**
5.     **C**
6.     **B**
7.     **C**
8.     **D**
9.     **D**
10.     **D**



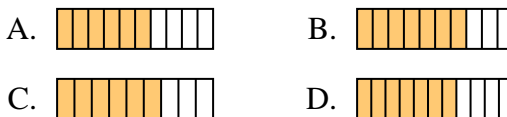
Determine which choice best answers each question.

**Answers**

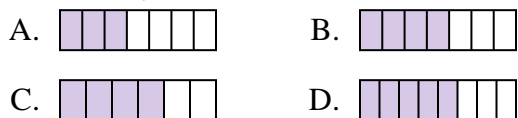
1) Which of the shapes below is shaded to represent  $\frac{2}{8}$ ?



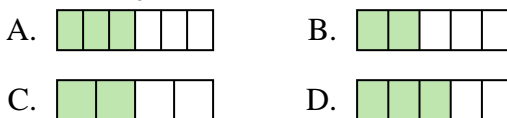
2) Which of the shapes below is shaded to represent  $\frac{6}{10}$ ?



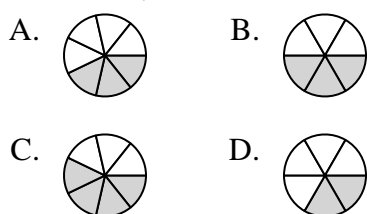
3) Which of the shapes below is shaded to represent  $\frac{4}{7}$ ?



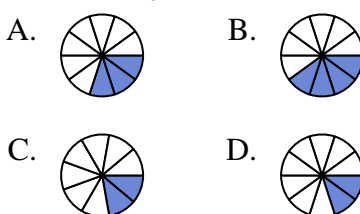
4) Which of the shapes below is shaded to represent  $\frac{3}{5}$ ?



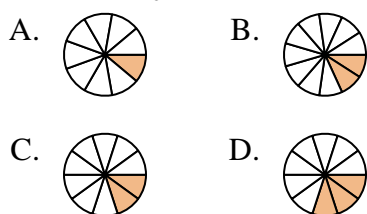
5) Which of the shapes below is shaded to represent  $\frac{3}{7}$ ?



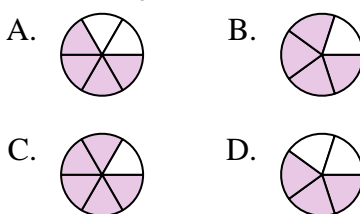
6) Which of the shapes below is shaded to represent  $\frac{3}{10}$ ?



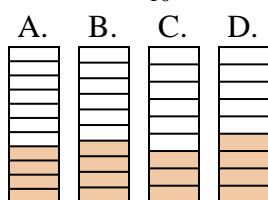
7) Which of the shapes below is shaded to represent  $\frac{2}{10}$ ?



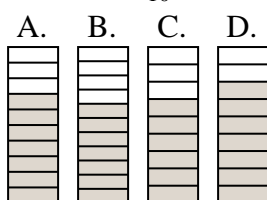
8) Which of the shapes below is shaded to represent  $\frac{4}{6}$ ?



9) Which of the shapes below is shaded to represent  $\frac{4}{10}$ ?



10) Which of the shapes below is shaded to represent  $\frac{7}{10}$ ?

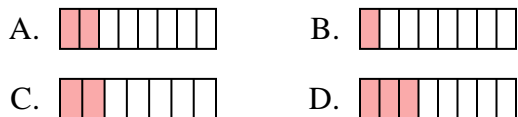


1. \_\_\_\_\_
2. \_\_\_\_\_
3. \_\_\_\_\_
4. \_\_\_\_\_
5. \_\_\_\_\_
6. \_\_\_\_\_
7. \_\_\_\_\_
8. \_\_\_\_\_
9. \_\_\_\_\_
10. \_\_\_\_\_

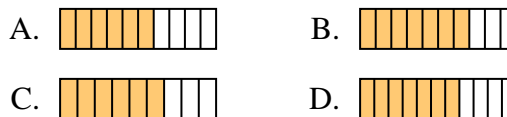


Determine which choice best answers each question.

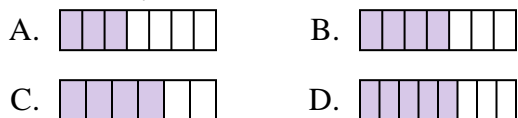
1) Which of the shapes below is shaded to represent  $\frac{2}{8}$ ?



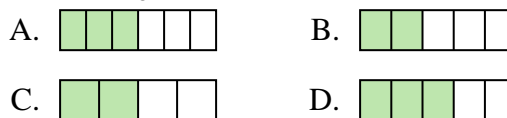
2) Which of the shapes below is shaded to represent  $\frac{6}{10}$ ?



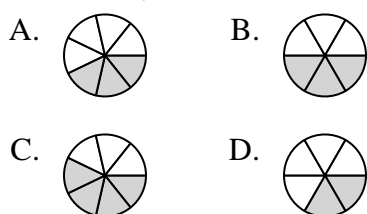
3) Which of the shapes below is shaded to represent  $\frac{4}{7}$ ?



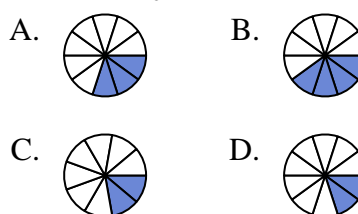
4) Which of the shapes below is shaded to represent  $\frac{3}{5}$ ?



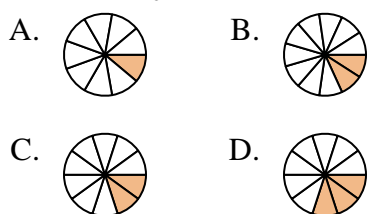
5) Which of the shapes below is shaded to represent  $\frac{3}{7}$ ?



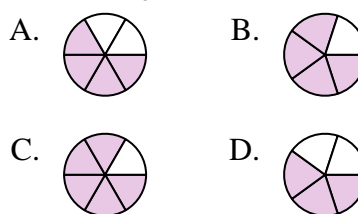
6) Which of the shapes below is shaded to represent  $\frac{3}{10}$ ?



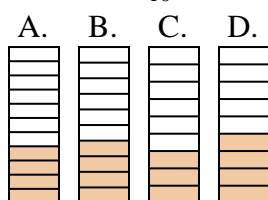
7) Which of the shapes below is shaded to represent  $\frac{2}{10}$ ?



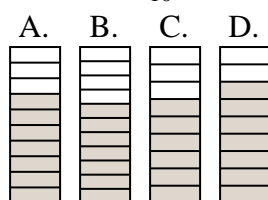
8) Which of the shapes below is shaded to represent  $\frac{4}{6}$ ?



9) Which of the shapes below is shaded to represent  $\frac{4}{10}$ ?



10) Which of the shapes below is shaded to represent  $\frac{7}{10}$ ?



**Answers**

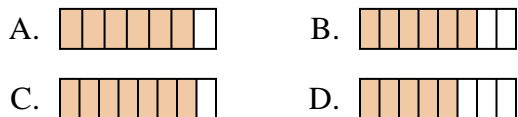
1.     **A**
2.     **A**
3.     **B**
4.     **D**
5.     **A**
6.     **A**
7.     **C**
8.     **A**
9.     **B**
10.     **A**



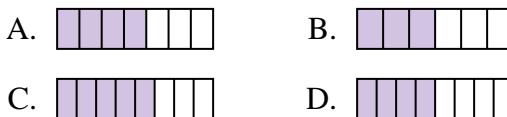
Determine which choice best answers each question.

**Answers**

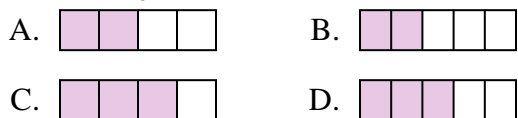
1) Which of the shapes below is shaded to represent  $\frac{6}{8}$ ?



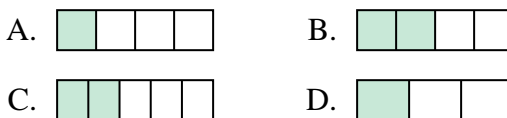
2) Which of the shapes below is shaded to represent  $\frac{4}{7}$ ?



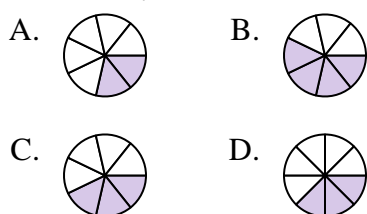
3) Which of the shapes below is shaded to represent  $\frac{3}{5}$ ?



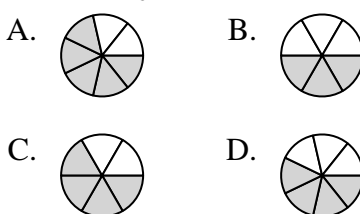
4) Which of the shapes below is shaded to represent  $\frac{2}{4}$ ?



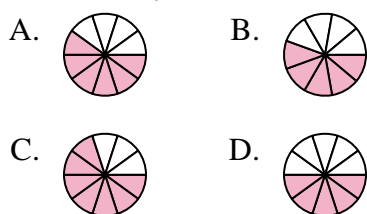
5) Which of the shapes below is shaded to represent  $\frac{3}{7}$ ?



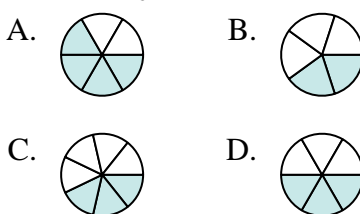
6) Which of the shapes below is shaded to represent  $\frac{4}{6}$ ?



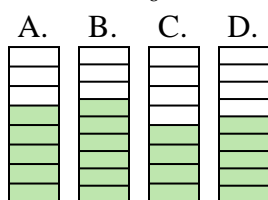
7) Which of the shapes below is shaded to represent  $\frac{6}{10}$ ?



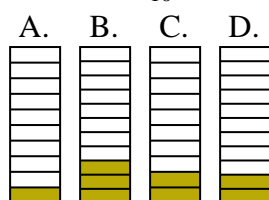
8) Which of the shapes below is shaded to represent  $\frac{3}{6}$ ?



9) Which of the shapes below is shaded to represent  $\frac{5}{8}$ ?



10) Which of the shapes below is shaded to represent  $\frac{2}{10}$ ?



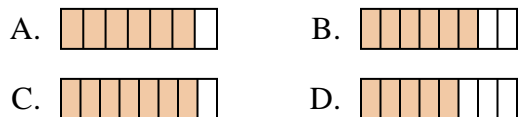
1. \_\_\_\_\_
2. \_\_\_\_\_
3. \_\_\_\_\_
4. \_\_\_\_\_
5. \_\_\_\_\_
6. \_\_\_\_\_
7. \_\_\_\_\_
8. \_\_\_\_\_
9. \_\_\_\_\_
10. \_\_\_\_\_



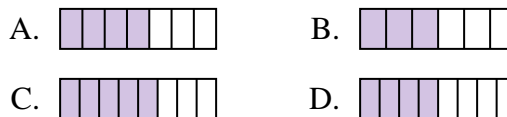
Determine which choice best answers each question.

**Answers**

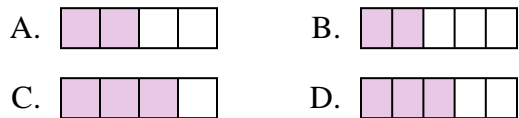
1) Which of the shapes below is shaded to represent  $\frac{6}{8}$ ?



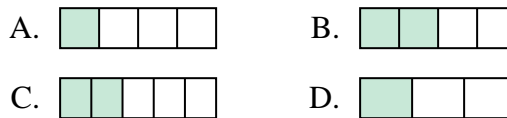
2) Which of the shapes below is shaded to represent  $\frac{4}{7}$ ?



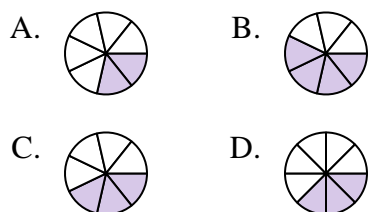
3) Which of the shapes below is shaded to represent  $\frac{3}{5}$ ?



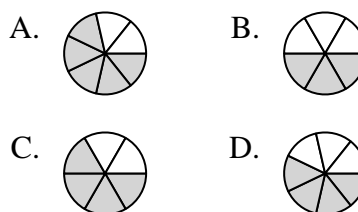
4) Which of the shapes below is shaded to represent  $\frac{2}{4}$ ?



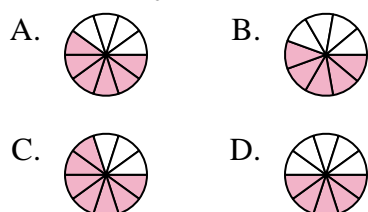
5) Which of the shapes below is shaded to represent  $\frac{3}{7}$ ?



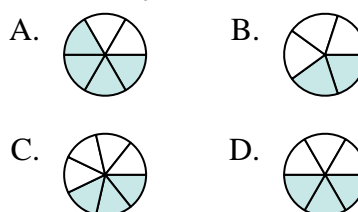
6) Which of the shapes below is shaded to represent  $\frac{4}{6}$ ?



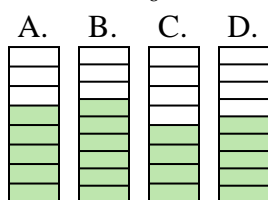
7) Which of the shapes below is shaded to represent  $\frac{6}{10}$ ?



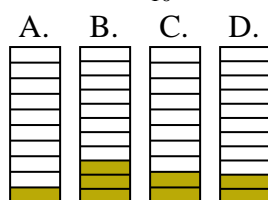
8) Which of the shapes below is shaded to represent  $\frac{3}{6}$ ?



9) Which of the shapes below is shaded to represent  $\frac{5}{8}$ ?



10) Which of the shapes below is shaded to represent  $\frac{2}{10}$ ?



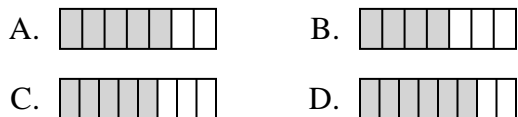
1.     **B**
2.     **A**
3.     **D**
4.     **B**
5.     **C**
6.     **C**
7.     **A**
8.     **D**
9.     **A**
10.     **C**



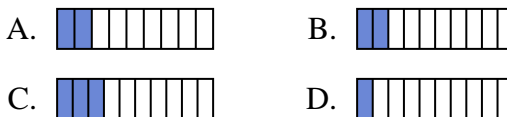
Determine which choice best answers each question.

**Answers**

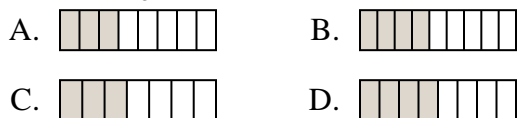
1) Which of the shapes below is shaded to represent  $\frac{5}{8}$ ?



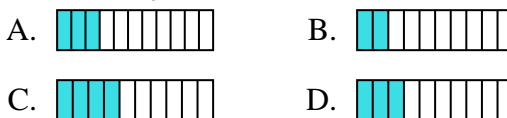
2) Which of the shapes below is shaded to represent  $\frac{2}{10}$ ?



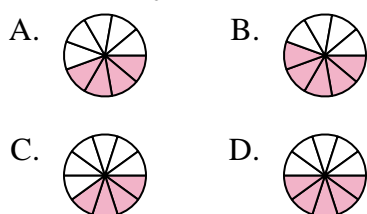
3) Which of the shapes below is shaded to represent  $\frac{4}{8}$ ?



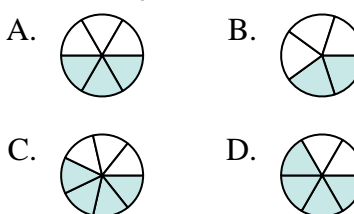
4) Which of the shapes below is shaded to represent  $\frac{3}{10}$ ?



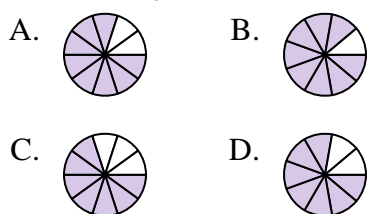
5) Which of the shapes below is shaded to represent  $\frac{5}{10}$ ?



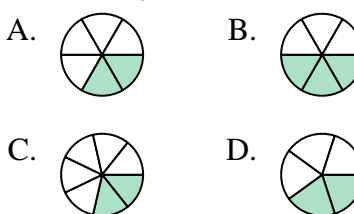
6) Which of the shapes below is shaded to represent  $\frac{3}{6}$ ?



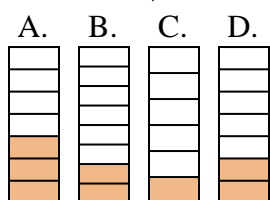
7) Which of the shapes below is shaded to represent  $\frac{8}{10}$ ?



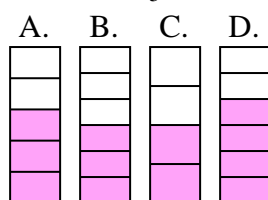
8) Which of the shapes below is shaded to represent  $\frac{2}{6}$ ?



9) Which of the shapes below is shaded to represent  $\frac{2}{7}$ ?



10) Which of the shapes below is shaded to represent  $\frac{3}{5}$ ?

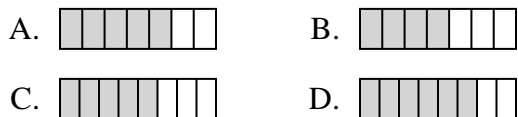


1. \_\_\_\_\_
2. \_\_\_\_\_
3. \_\_\_\_\_
4. \_\_\_\_\_
5. \_\_\_\_\_
6. \_\_\_\_\_
7. \_\_\_\_\_
8. \_\_\_\_\_
9. \_\_\_\_\_
10. \_\_\_\_\_

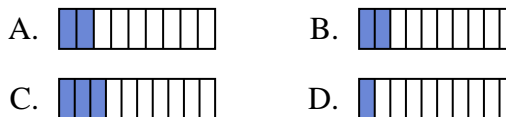


Determine which choice best answers each question.

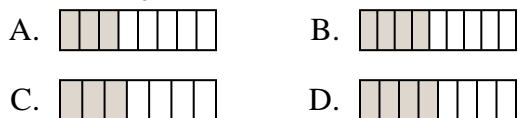
1) Which of the shapes below is shaded to represent  $\frac{5}{8}$ ?



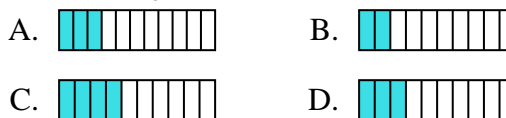
2) Which of the shapes below is shaded to represent  $\frac{2}{10}$ ?



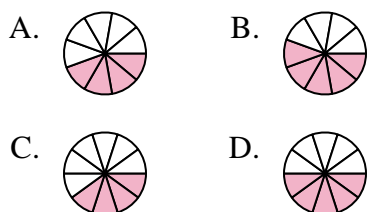
3) Which of the shapes below is shaded to represent  $\frac{4}{8}$ ?



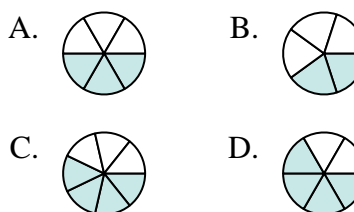
4) Which of the shapes below is shaded to represent  $\frac{3}{10}$ ?



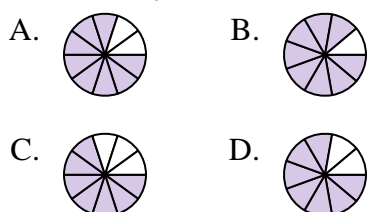
5) Which of the shapes below is shaded to represent  $\frac{5}{10}$ ?



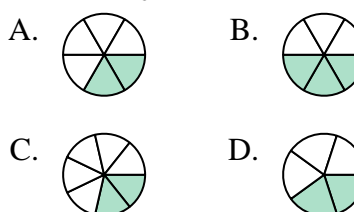
6) Which of the shapes below is shaded to represent  $\frac{3}{6}$ ?



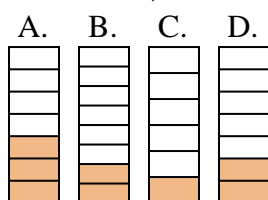
7) Which of the shapes below is shaded to represent  $\frac{8}{10}$ ?



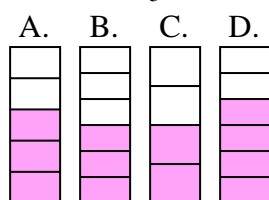
8) Which of the shapes below is shaded to represent  $\frac{2}{6}$ ?



9) Which of the shapes below is shaded to represent  $\frac{2}{7}$ ?



10) Which of the shapes below is shaded to represent  $\frac{3}{5}$ ?



**Answers**

1.     **C**
2.     **B**
3.     **D**
4.     **D**
5.     **D**
6.     **A**
7.     **A**
8.     **A**
9.     **D**
10.     **A**

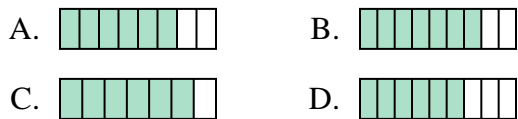




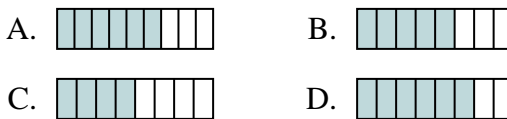
Determine which choice best answers each question.

**Answers**

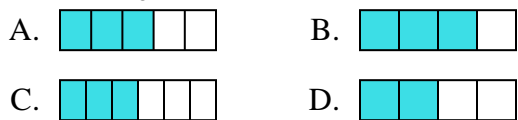
1) Which of the shapes below is shaded to represent  $\frac{6}{8}$ ?



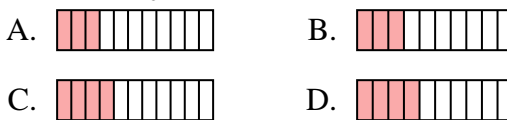
2) Which of the shapes below is shaded to represent  $\frac{5}{8}$ ?



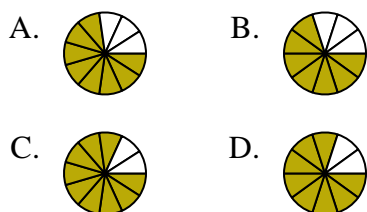
3) Which of the shapes below is shaded to represent  $\frac{3}{5}$ ?



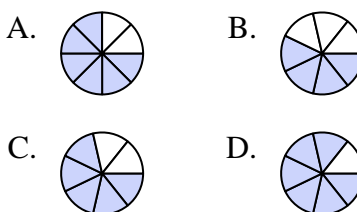
4) Which of the shapes below is shaded to represent  $\frac{3}{10}$ ?



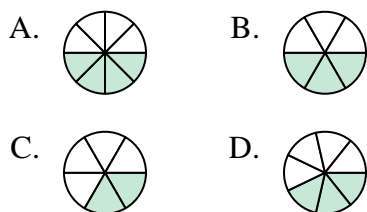
5) Which of the shapes below is shaded to represent  $\frac{8}{10}$ ?



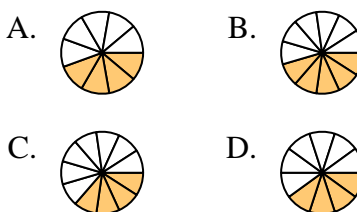
6) Which of the shapes below is shaded to represent  $\frac{5}{7}$ ?



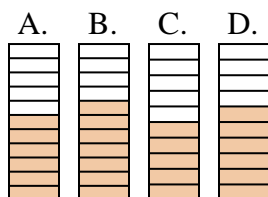
7) Which of the shapes below is shaded to represent  $\frac{3}{7}$ ?



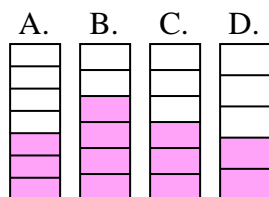
8) Which of the shapes below is shaded to represent  $\frac{4}{10}$ ?



9) Which of the shapes below is shaded to represent  $\frac{6}{10}$ ?



10) Which of the shapes below is shaded to represent  $\frac{3}{6}$ ?



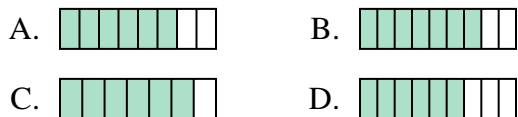
1. \_\_\_\_\_
2. \_\_\_\_\_
3. \_\_\_\_\_
4. \_\_\_\_\_
5. \_\_\_\_\_
6. \_\_\_\_\_
7. \_\_\_\_\_
8. \_\_\_\_\_
9. \_\_\_\_\_
10. \_\_\_\_\_



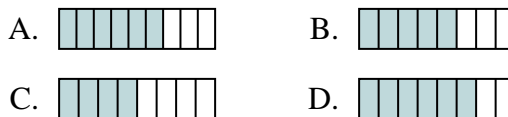
Determine which choice best answers each question.

**Answers**

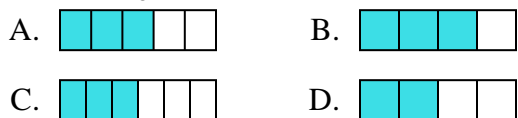
1) Which of the shapes below is shaded to represent  $\frac{6}{8}$ ?



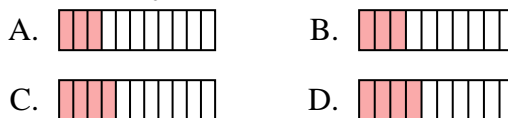
2) Which of the shapes below is shaded to represent  $\frac{5}{8}$ ?



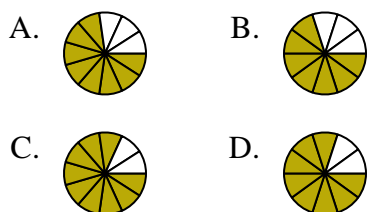
3) Which of the shapes below is shaded to represent  $\frac{3}{5}$ ?



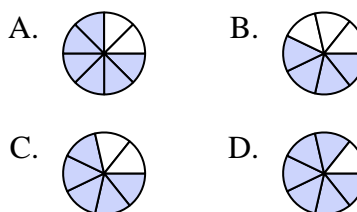
4) Which of the shapes below is shaded to represent  $\frac{3}{10}$ ?



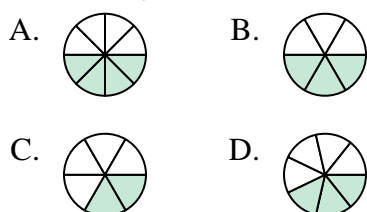
5) Which of the shapes below is shaded to represent  $\frac{8}{10}$ ?



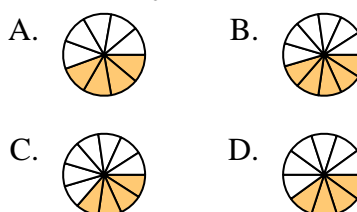
6) Which of the shapes below is shaded to represent  $\frac{5}{7}$ ?



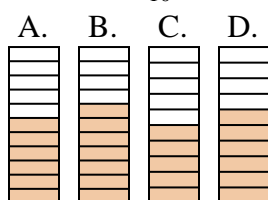
7) Which of the shapes below is shaded to represent  $\frac{3}{7}$ ?



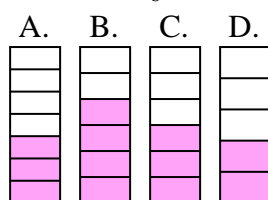
8) Which of the shapes below is shaded to represent  $\frac{4}{10}$ ?



9) Which of the shapes below is shaded to represent  $\frac{6}{10}$ ?



10) Which of the shapes below is shaded to represent  $\frac{3}{6}$ ?



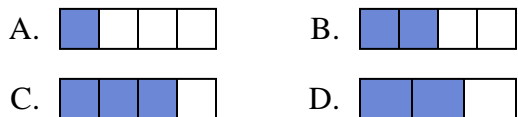
1.     **A**
2.     **B**
3.     **A**
4.     **B**
5.     **D**
6.     **C**
7.     **D**
8.     **D**
9.     **D**
10.     **C**



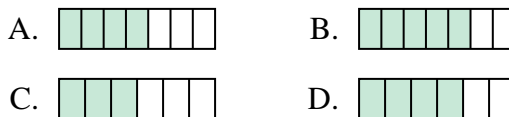
Determine which choice best answers each question.

**Answers**

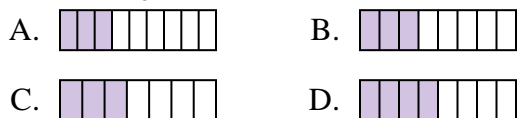
1) Which of the shapes below is shaded to represent  $\frac{2}{4}$ ?



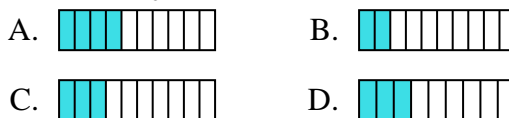
2) Which of the shapes below is shaded to represent  $\frac{4}{6}$ ?



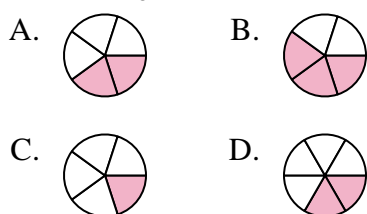
3) Which of the shapes below is shaded to represent  $\frac{3}{8}$ ?



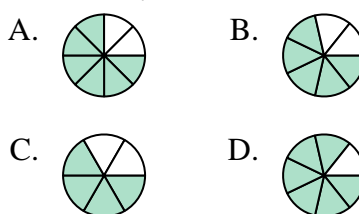
4) Which of the shapes below is shaded to represent  $\frac{3}{10}$ ?



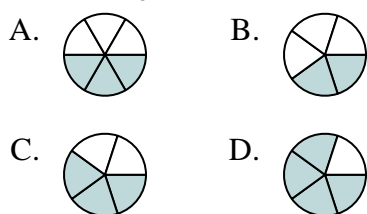
5) Which of the shapes below is shaded to represent  $\frac{2}{5}$ ?



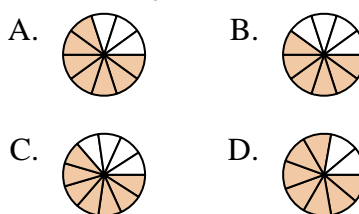
6) Which of the shapes below is shaded to represent  $\frac{5}{7}$ ?



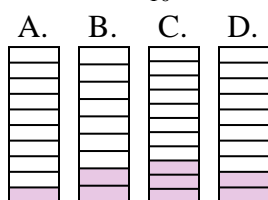
7) Which of the shapes below is shaded to represent  $\frac{3}{5}$ ?



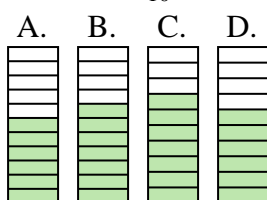
8) Which of the shapes below is shaded to represent  $\frac{7}{10}$ ?



9) Which of the shapes below is shaded to represent  $\frac{2}{10}$ ?



10) Which of the shapes below is shaded to represent  $\frac{6}{10}$ ?

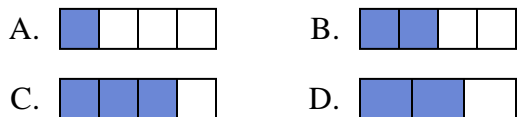


1. \_\_\_\_\_
2. \_\_\_\_\_
3. \_\_\_\_\_
4. \_\_\_\_\_
5. \_\_\_\_\_
6. \_\_\_\_\_
7. \_\_\_\_\_
8. \_\_\_\_\_
9. \_\_\_\_\_
10. \_\_\_\_\_

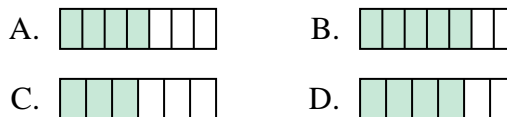


Determine which choice best answers each question.

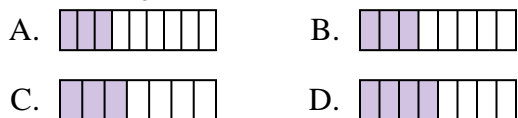
1) Which of the shapes below is shaded to represent  $\frac{2}{4}$ ?



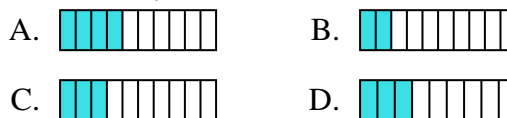
2) Which of the shapes below is shaded to represent  $\frac{4}{6}$ ?



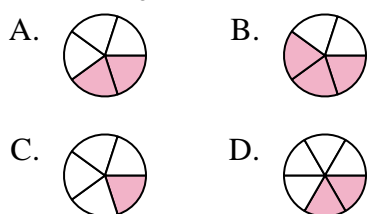
3) Which of the shapes below is shaded to represent  $\frac{3}{8}$ ?



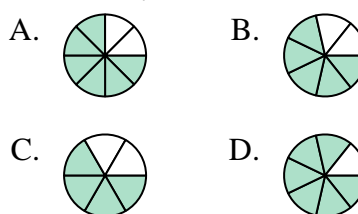
4) Which of the shapes below is shaded to represent  $\frac{3}{10}$ ?



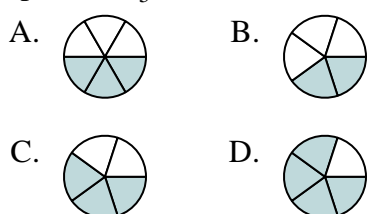
5) Which of the shapes below is shaded to represent  $\frac{2}{5}$ ?



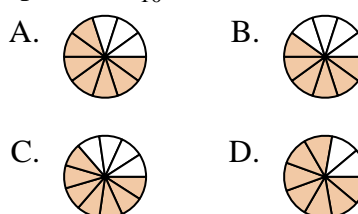
6) Which of the shapes below is shaded to represent  $\frac{5}{7}$ ?



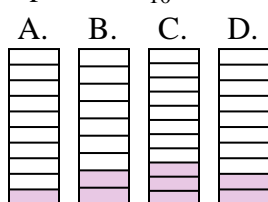
7) Which of the shapes below is shaded to represent  $\frac{3}{5}$ ?



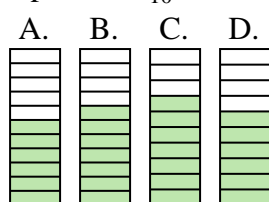
8) Which of the shapes below is shaded to represent  $\frac{7}{10}$ ?



9) Which of the shapes below is shaded to represent  $\frac{2}{10}$ ?



10) Which of the shapes below is shaded to represent  $\frac{6}{10}$ ?



**Answers**

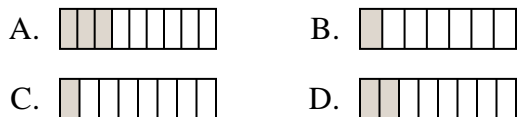
1.     **B**
2.     **D**
3.     **B**
4.     **C**
5.     **A**
6.     **B**
7.     **C**
8.     **A**
9.     **D**
10.     **D**



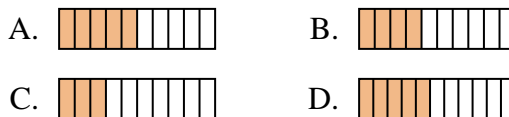
Determine which choice best answers each question.

**Answers**

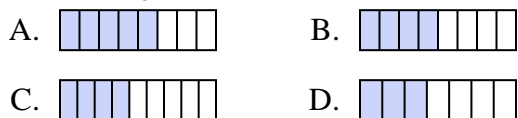
1) Which of the shapes below is shaded to represent  $\frac{2}{8}$ ?



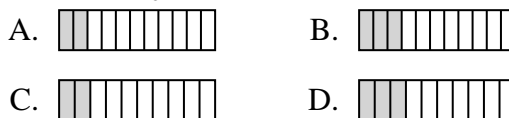
2) Which of the shapes below is shaded to represent  $\frac{4}{10}$ ?



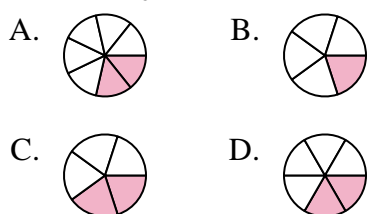
3) Which of the shapes below is shaded to represent  $\frac{4}{8}$ ?



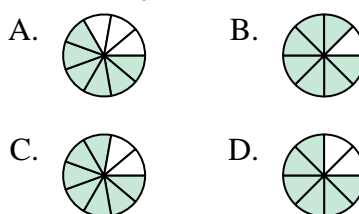
4) Which of the shapes below is shaded to represent  $\frac{2}{10}$ ?



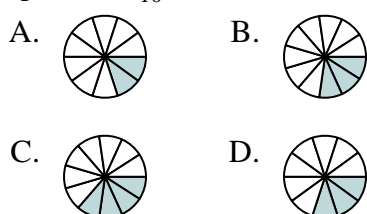
5) Which of the shapes below is shaded to represent  $\frac{2}{6}$ ?



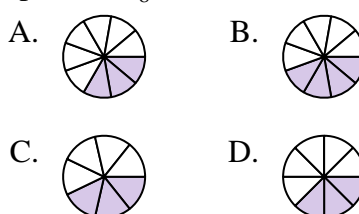
6) Which of the shapes below is shaded to represent  $\frac{6}{8}$ ?



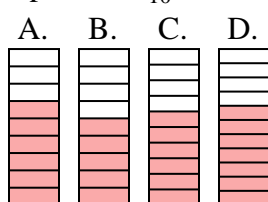
7) Which of the shapes below is shaded to represent  $\frac{3}{10}$ ?



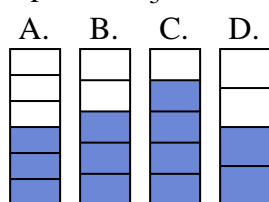
8) Which of the shapes below is shaded to represent  $\frac{3}{8}$ ?



9) Which of the shapes below is shaded to represent  $\frac{6}{10}$ ?



10) Which of the shapes below is shaded to represent  $\frac{3}{5}$ ?

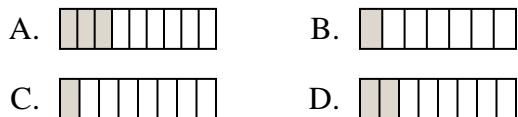


1. \_\_\_\_\_
2. \_\_\_\_\_
3. \_\_\_\_\_
4. \_\_\_\_\_
5. \_\_\_\_\_
6. \_\_\_\_\_
7. \_\_\_\_\_
8. \_\_\_\_\_
9. \_\_\_\_\_
10. \_\_\_\_\_

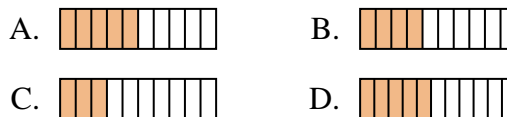


Determine which choice best answers each question.

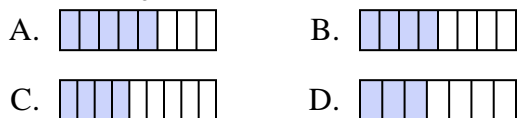
1) Which of the shapes below is shaded to represent  $\frac{2}{8}$ ?



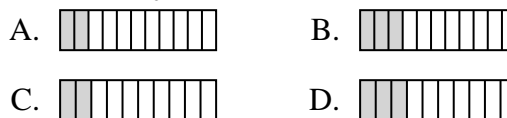
2) Which of the shapes below is shaded to represent  $\frac{4}{10}$ ?



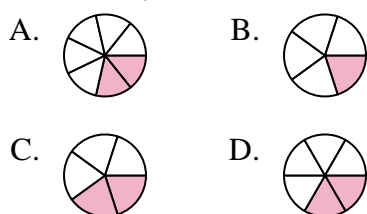
3) Which of the shapes below is shaded to represent  $\frac{4}{8}$ ?



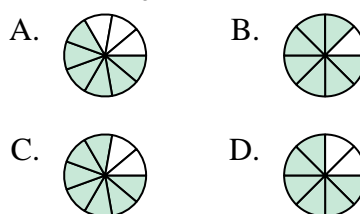
4) Which of the shapes below is shaded to represent  $\frac{2}{10}$ ?



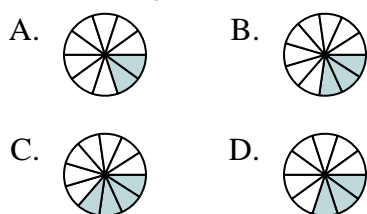
5) Which of the shapes below is shaded to represent  $\frac{2}{6}$ ?



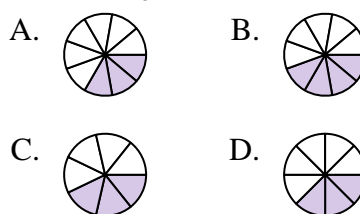
6) Which of the shapes below is shaded to represent  $\frac{6}{8}$ ?



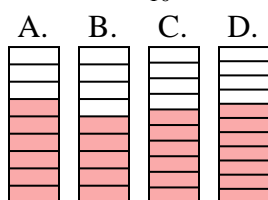
7) Which of the shapes below is shaded to represent  $\frac{3}{10}$ ?



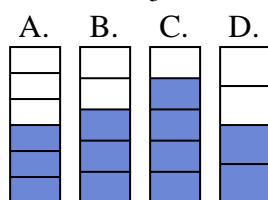
8) Which of the shapes below is shaded to represent  $\frac{3}{8}$ ?



9) Which of the shapes below is shaded to represent  $\frac{6}{10}$ ?



10) Which of the shapes below is shaded to represent  $\frac{3}{5}$ ?



**Answers**

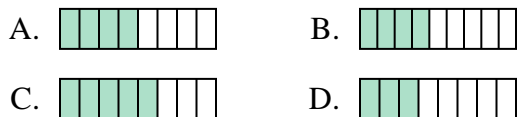
1.     **D**
2.     **B**
3.     **B**
4.     **C**
5.     **D**
6.     **D**
7.     **D**
8.     **D**
9.     **C**
10.     **B**



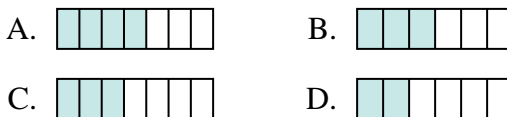
Determine which choice best answers each question.

**Answers**

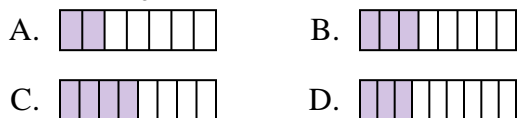
1) Which of the shapes below is shaded to represent  $\frac{4}{8}$ ?



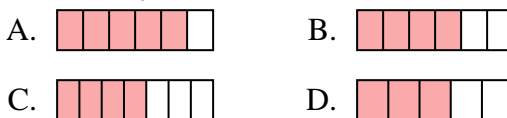
2) Which of the shapes below is shaded to represent  $\frac{3}{6}$ ?



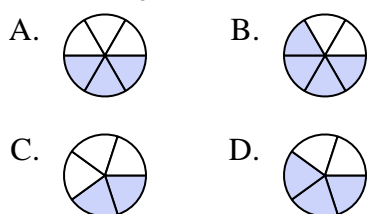
3) Which of the shapes below is shaded to represent  $\frac{3}{8}$ ?



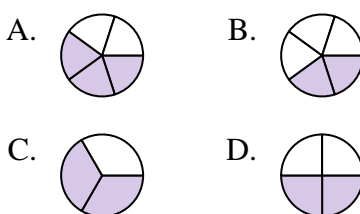
4) Which of the shapes below is shaded to represent  $\frac{4}{6}$ ?



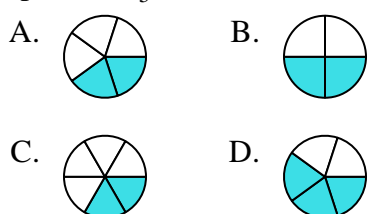
5) Which of the shapes below is shaded to represent  $\frac{3}{5}$ ?



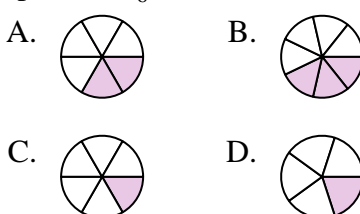
6) Which of the shapes below is shaded to represent  $\frac{2}{4}$ ?



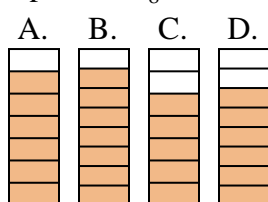
7) Which of the shapes below is shaded to represent  $\frac{2}{5}$ ?



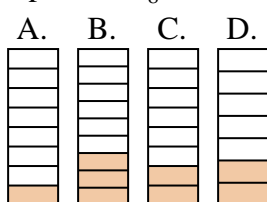
8) Which of the shapes below is shaded to represent  $\frac{2}{6}$ ?



9) Which of the shapes below is shaded to represent  $\frac{6}{8}$ ?



10) Which of the shapes below is shaded to represent  $\frac{2}{8}$ ?







1. \_\_\_\_\_
2. \_\_\_\_\_
3. \_\_\_\_\_
4. \_\_\_\_\_
5. \_\_\_\_\_
6. \_\_\_\_\_
7. \_\_\_\_\_
8. \_\_\_\_\_
9. \_\_\_\_\_
10. \_\_\_\_\_






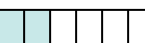
Determine which choice best answers each question.

**Answers**




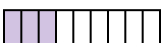
1) Which of the shapes below is shaded to represent  $\frac{4}{8}$ ?

- A.  B.   
 C.  D. 





2) Which of the shapes below is shaded to represent  $\frac{3}{6}$ ?

- A.  B.   
 C.  D. 





3) Which of the shapes below is shaded to represent  $\frac{3}{8}$ ?

- A.  B.   
 C.  D. 





4) Which of the shapes below is shaded to represent  $\frac{4}{6}$ ?

- A.  B.   
 C.  D. 





5) Which of the shapes below is shaded to represent  $\frac{3}{5}$ ?

- A.  B.   
 C.  D. 





6) Which of the shapes below is shaded to represent  $\frac{2}{4}$ ?

- A.  B.   
 C.  D. 





7) Which of the shapes below is shaded to represent  $\frac{2}{5}$ ?

- A.  B.   
 C.  D. 





8) Which of the shapes below is shaded to represent  $\frac{2}{6}$ ?

- A.  B.   
 C.  D. 

9) Which of the shapes below is shaded to represent  $\frac{6}{8}$ ?

- A.  B.   
 C.  D. 

10) Which of the shapes below is shaded to represent  $\frac{2}{8}$ ?

- A.  B.   
 C.  D. 

1.   **A**    
 2.   **B**    
 3.   **B**    
 4.   **B**    
 5.   **D**    
 6.   **D**    
 7.   **A**    
 8.   **A**    
 9.   **D**    
 10.   **C**

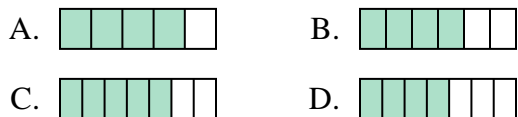




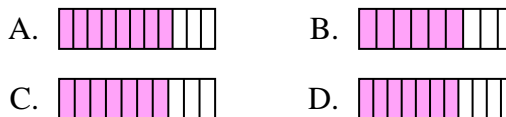
Determine which choice best answers each question.

**Answers**

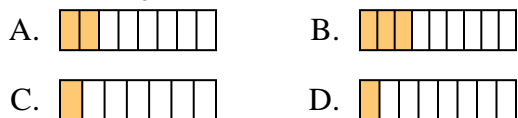
1) Which of the shapes below is shaded to represent  $\frac{4}{6}$ ?



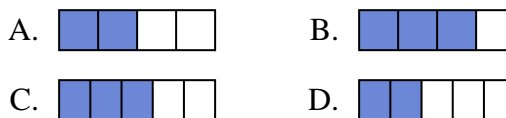
2) Which of the shapes below is shaded to represent  $\frac{7}{10}$ ?



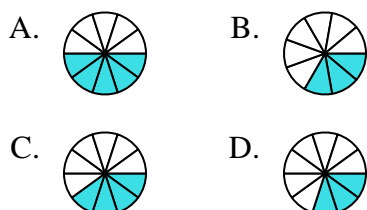
3) Which of the shapes below is shaded to represent  $\frac{2}{8}$ ?



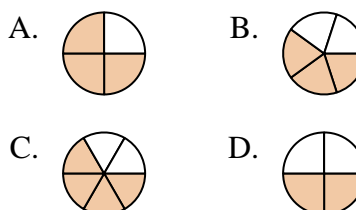
4) Which of the shapes below is shaded to represent  $\frac{2}{4}$ ?



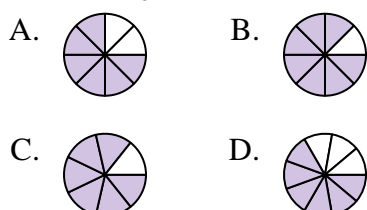
5) Which of the shapes below is shaded to represent  $\frac{4}{10}$ ?



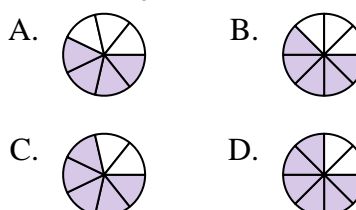
6) Which of the shapes below is shaded to represent  $\frac{3}{5}$ ?



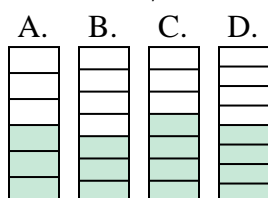
7) Which of the shapes below is shaded to represent  $\frac{6}{8}$ ?



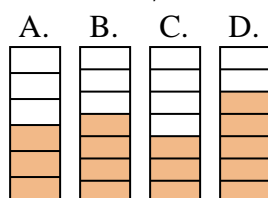
8) Which of the shapes below is shaded to represent  $\frac{5}{8}$ ?



9) Which of the shapes below is shaded to represent  $\frac{3}{7}$ ?



10) Which of the shapes below is shaded to represent  $\frac{4}{7}$ ?

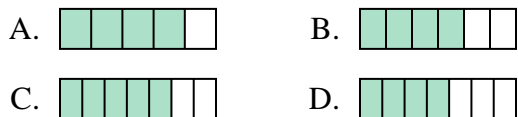


1. \_\_\_\_\_
2. \_\_\_\_\_
3. \_\_\_\_\_
4. \_\_\_\_\_
5. \_\_\_\_\_
6. \_\_\_\_\_
7. \_\_\_\_\_
8. \_\_\_\_\_
9. \_\_\_\_\_
10. \_\_\_\_\_

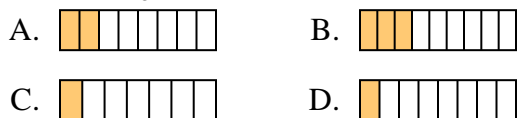


Determine which choice best answers each question.

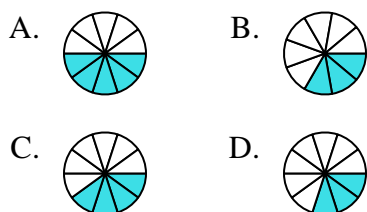
1) Which of the shapes below is shaded to represent  $\frac{4}{6}$ ?



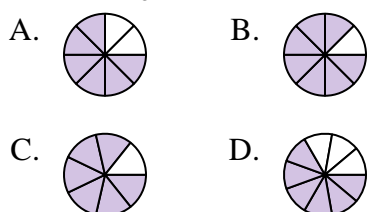
3) Which of the shapes below is shaded to represent  $\frac{2}{8}$ ?



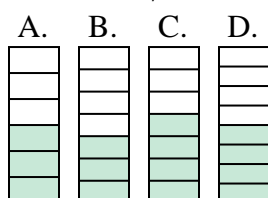
5) Which of the shapes below is shaded to represent  $\frac{4}{10}$ ?



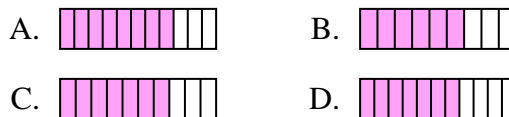
7) Which of the shapes below is shaded to represent  $\frac{6}{8}$ ?



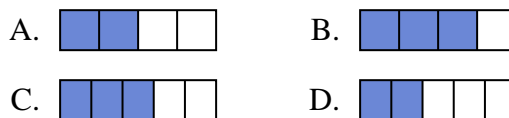
9) Which of the shapes below is shaded to represent  $\frac{3}{7}$ ?



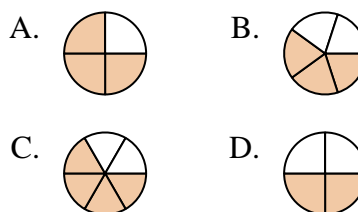
2) Which of the shapes below is shaded to represent  $\frac{7}{10}$ ?



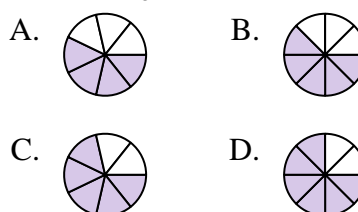
4) Which of the shapes below is shaded to represent  $\frac{2}{4}$ ?



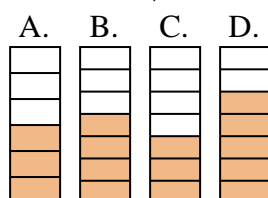
6) Which of the shapes below is shaded to represent  $\frac{3}{5}$ ?



8) Which of the shapes below is shaded to represent  $\frac{5}{8}$ ?



10) Which of the shapes below is shaded to represent  $\frac{4}{7}$ ?



**Answers**

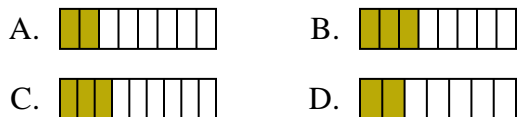
1.     **B**
2.     **C**
3.     **A**
4.     **A**
5.     **C**
6.     **B**
7.     **A**
8.     **B**
9.     **B**
10.     **B**



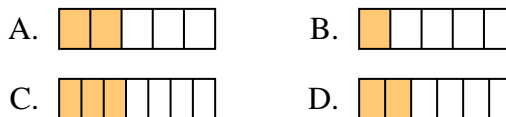
Determine which choice best answers each question.

**Answers**

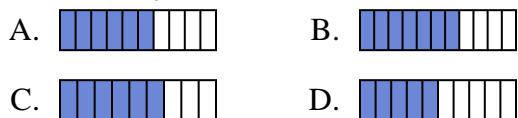
1) Which of the shapes below is shaded to represent  $\frac{3}{8}$ ?



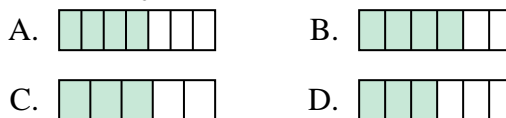
2) Which of the shapes below is shaded to represent  $\frac{2}{6}$ ?



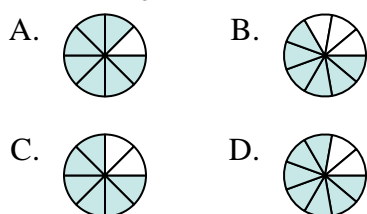
3) Which of the shapes below is shaded to represent  $\frac{6}{10}$ ?



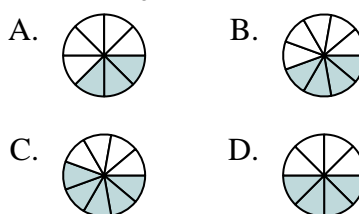
4) Which of the shapes below is shaded to represent  $\frac{4}{6}$ ?



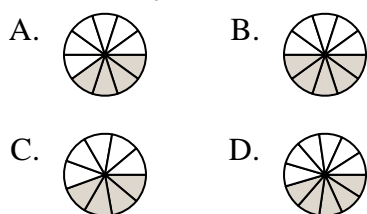
5) Which of the shapes below is shaded to represent  $\frac{6}{8}$ ?



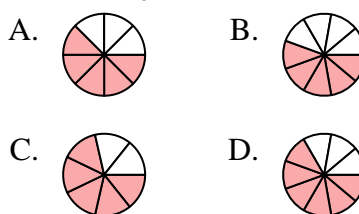
6) Which of the shapes below is shaded to represent  $\frac{4}{8}$ ?



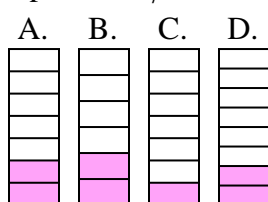
7) Which of the shapes below is shaded to represent  $\frac{4}{10}$ ?



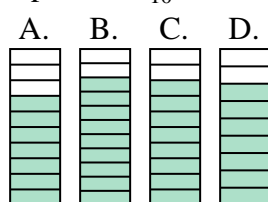
8) Which of the shapes below is shaded to represent  $\frac{5}{8}$ ?



9) Which of the shapes below is shaded to represent  $\frac{2}{7}$ ?



10) Which of the shapes below is shaded to represent  $\frac{8}{10}$ ?

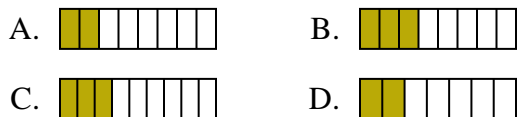


1. \_\_\_\_\_
2. \_\_\_\_\_
3. \_\_\_\_\_
4. \_\_\_\_\_
5. \_\_\_\_\_
6. \_\_\_\_\_
7. \_\_\_\_\_
8. \_\_\_\_\_
9. \_\_\_\_\_
10. \_\_\_\_\_

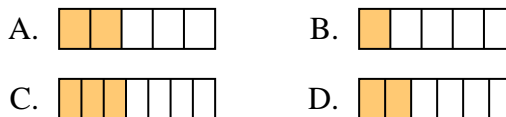


Determine which choice best answers each question.

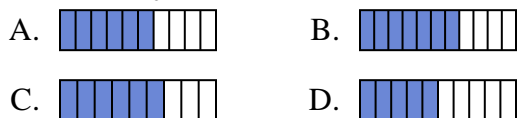
1) Which of the shapes below is shaded to represent  $\frac{3}{8}$ ?



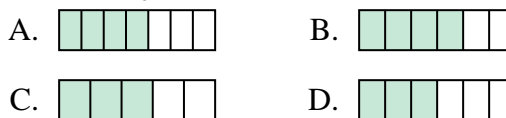
2) Which of the shapes below is shaded to represent  $\frac{2}{6}$ ?



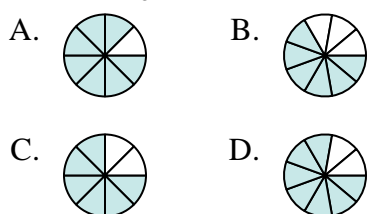
3) Which of the shapes below is shaded to represent  $\frac{6}{10}$ ?



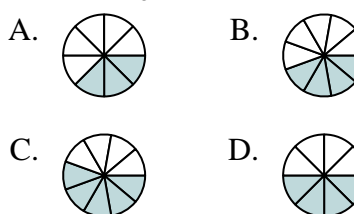
4) Which of the shapes below is shaded to represent  $\frac{4}{6}$ ?



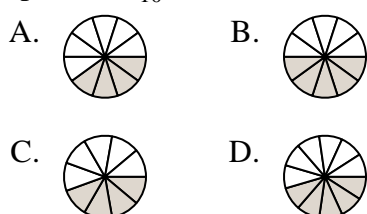
5) Which of the shapes below is shaded to represent  $\frac{6}{8}$ ?



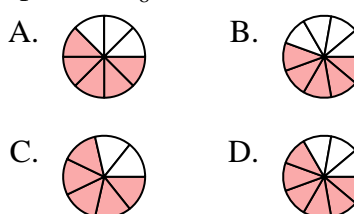
6) Which of the shapes below is shaded to represent  $\frac{4}{8}$ ?



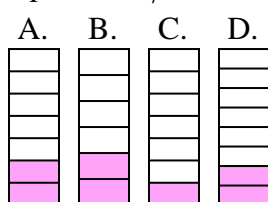
7) Which of the shapes below is shaded to represent  $\frac{4}{10}$ ?



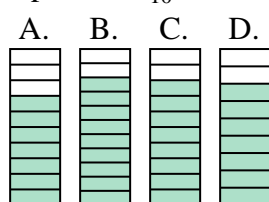
8) Which of the shapes below is shaded to represent  $\frac{5}{8}$ ?



9) Which of the shapes below is shaded to represent  $\frac{2}{7}$ ?



10) Which of the shapes below is shaded to represent  $\frac{8}{10}$ ?



**Answers**

1.     **B**
2.     **D**
3.     **A**
4.     **B**
5.     **C**
6.     **D**
7.     **A**
8.     **A**
9.     **A**
10.     **C**