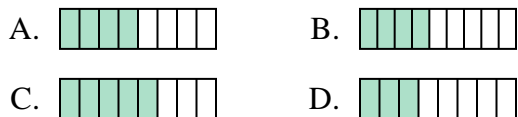




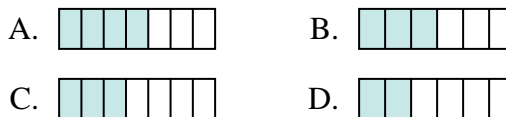
Determine which choice best answers each question.

**Answers**

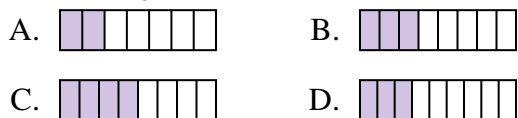
1) Which of the shapes below is shaded to represent  $\frac{4}{8}$ ?



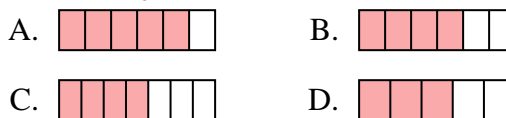
2) Which of the shapes below is shaded to represent  $\frac{3}{6}$ ?



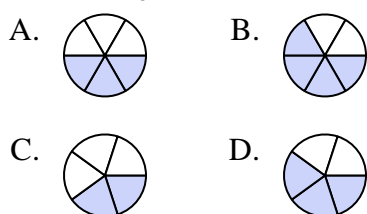
3) Which of the shapes below is shaded to represent  $\frac{3}{8}$ ?



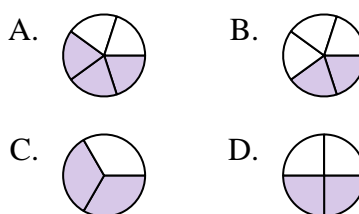
4) Which of the shapes below is shaded to represent  $\frac{4}{6}$ ?



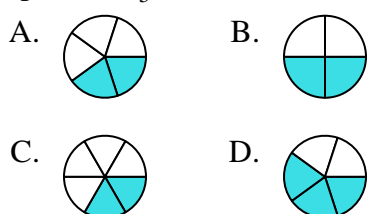
5) Which of the shapes below is shaded to represent  $\frac{3}{5}$ ?



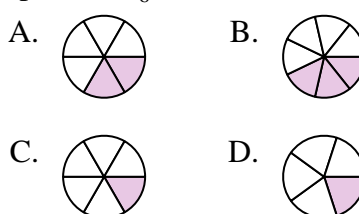
6) Which of the shapes below is shaded to represent  $\frac{2}{4}$ ?



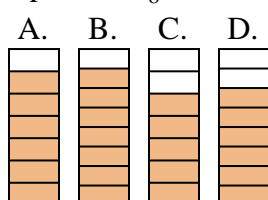
7) Which of the shapes below is shaded to represent  $\frac{2}{5}$ ?



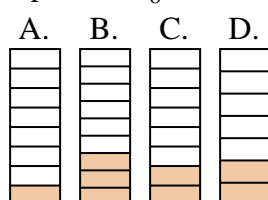
8) Which of the shapes below is shaded to represent  $\frac{2}{6}$ ?



9) Which of the shapes below is shaded to represent  $\frac{6}{8}$ ?



10) Which of the shapes below is shaded to represent  $\frac{2}{8}$ ?







1. \_\_\_\_\_
2. \_\_\_\_\_
3. \_\_\_\_\_
4. \_\_\_\_\_
5. \_\_\_\_\_
6. \_\_\_\_\_
7. \_\_\_\_\_
8. \_\_\_\_\_
9. \_\_\_\_\_
10. \_\_\_\_\_






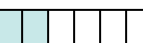
Determine which choice best answers each question.

**Answers**




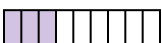
1) Which of the shapes below is shaded to represent  $\frac{4}{8}$ ?

- A.  B.   
 C.  D. 



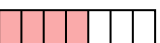

2) Which of the shapes below is shaded to represent  $\frac{3}{6}$ ?

- A.  B.   
 C.  D. 





3) Which of the shapes below is shaded to represent  $\frac{3}{8}$ ?

- A.  B.   
 C.  D. 





4) Which of the shapes below is shaded to represent  $\frac{4}{6}$ ?

- A.  B.   
 C.  D. 





5) Which of the shapes below is shaded to represent  $\frac{3}{5}$ ?

- A.  B.   
 C.  D. 





6) Which of the shapes below is shaded to represent  $\frac{2}{4}$ ?

- A.  B.   
 C.  D. 





7) Which of the shapes below is shaded to represent  $\frac{2}{5}$ ?

- A.  B.   
 C.  D. 





8) Which of the shapes below is shaded to represent  $\frac{2}{6}$ ?

- A.  B.   
 C.  D. 

9) Which of the shapes below is shaded to represent  $\frac{6}{8}$ ?

- A.  B.   
 C.  D. 

10) Which of the shapes below is shaded to represent  $\frac{2}{8}$ ?

- A.  B.   
 C.  D. 

1.   **A**    
 2.   **B**    
 3.   **B**    
 4.   **B**    
 5.   **D**    
 6.   **D**    
 7.   **A**    
 8.   **A**    
 9.   **D**    
 10.   **C**