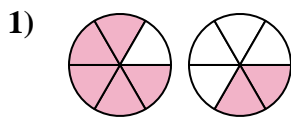


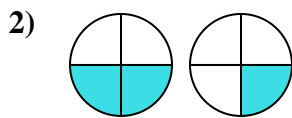


Determine which letter best compares the fractions shown.

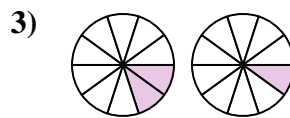
**Answers**



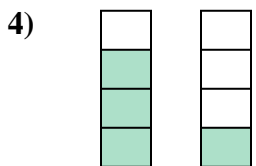
- A.  $\frac{5}{1} < \frac{2}{4}$
- B.  $\frac{5}{6} < \frac{2}{6}$
- C.  $\frac{6}{5} > \frac{6}{2}$
- D.  $\frac{5}{6} > \frac{2}{6}$



- A.  $\frac{2}{2} > \frac{1}{3}$
- B.  $\frac{4}{2} > \frac{4}{1}$
- C.  $\frac{2}{4} < \frac{1}{4}$
- D.  $\frac{2}{4} > \frac{1}{4}$



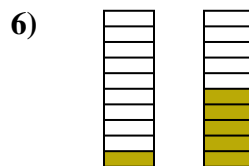
- A.  $\frac{2}{10} > \frac{1}{10}$
- B.  $\frac{2}{10} < \frac{1}{10}$
- C.  $\frac{2}{8} < \frac{1}{9}$
- D.  $\frac{8}{2} > \frac{9}{1}$



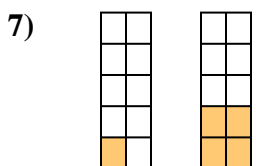
- A.  $\frac{3}{1} > \frac{1}{3}$
- B.  $\frac{4}{3} > \frac{4}{1}$
- C.  $\frac{3}{1} < \frac{1}{3}$
- D.  $\frac{3}{4} > \frac{1}{4}$



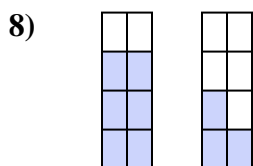
- A.  $\frac{2}{4} < \frac{3}{3}$
- B.  $\frac{6}{2} > \frac{6}{3}$
- C.  $\frac{2}{6} < \frac{3}{6}$
- D.  $\frac{4}{2} > \frac{3}{3}$



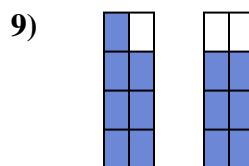
- A.  $\frac{1}{9} < \frac{5}{5}$
- B.  $\frac{9}{1} < \frac{5}{5}$
- C.  $\frac{10}{1} > \frac{10}{5}$
- D.  $\frac{1}{10} < \frac{5}{10}$



- A.  $\frac{9}{1} > \frac{6}{4}$
- B.  $\frac{10}{1} > \frac{10}{4}$
- C.  $\frac{1}{10} < \frac{4}{10}$
- D.  $\frac{1}{10} > \frac{4}{10}$



- A.  $\frac{6}{8} > \frac{3}{8}$
- B.  $\frac{8}{6} > \frac{8}{3}$
- C.  $\frac{6}{2} < \frac{3}{5}$
- D.  $\frac{2}{6} > \frac{5}{3}$

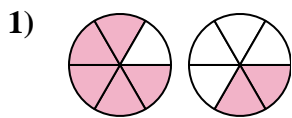


- A.  $\frac{1}{7} > \frac{2}{6}$
- B.  $\frac{7}{8} > \frac{6}{8}$
- C.  $\frac{7}{1} < \frac{6}{2}$
- D.  $\frac{1}{7} < \frac{2}{6}$

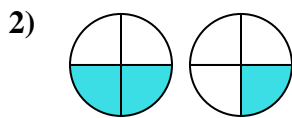
- 1. \_\_\_\_\_
- 2. \_\_\_\_\_
- 3. \_\_\_\_\_
- 4. \_\_\_\_\_
- 5. \_\_\_\_\_
- 6. \_\_\_\_\_
- 7. \_\_\_\_\_
- 8. \_\_\_\_\_
- 9. \_\_\_\_\_



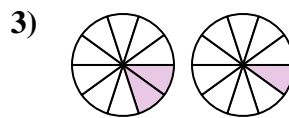
Determine which letter best compares the fractions shown.



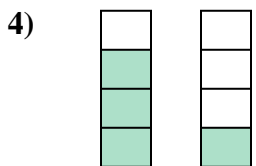
- A.  $\frac{5}{1} < \frac{2}{4}$   
 B.  $\frac{5}{6} < \frac{2}{6}$   
 C.  $\frac{6}{5} > \frac{6}{2}$   
 D.  $\frac{5}{6} > \frac{2}{6}$



- A.  $\frac{2}{2} > \frac{1}{3}$   
 B.  $\frac{4}{2} > \frac{4}{1}$   
 C.  $\frac{2}{4} < \frac{1}{4}$   
 D.  $\frac{2}{4} > \frac{1}{4}$



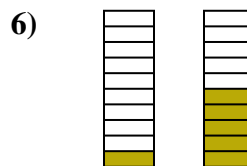
- A.  $\frac{2}{10} > \frac{1}{10}$   
 B.  $\frac{2}{10} < \frac{1}{10}$   
 C.  $\frac{2}{8} < \frac{1}{9}$   
 D.  $\frac{8}{2} > \frac{9}{1}$



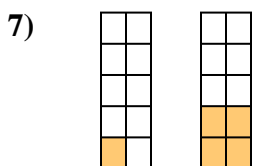
- A.  $\frac{3}{1} > \frac{1}{3}$   
 B.  $\frac{4}{3} > \frac{4}{1}$   
 C.  $\frac{3}{1} < \frac{1}{3}$   
 D.  $\frac{3}{4} > \frac{1}{4}$



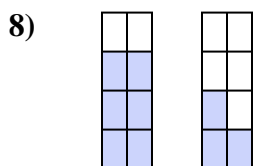
- A.  $\frac{2}{4} < \frac{3}{3}$   
 B.  $\frac{6}{2} > \frac{6}{3}$   
 C.  $\frac{2}{6} < \frac{3}{6}$   
 D.  $\frac{4}{2} > \frac{3}{3}$



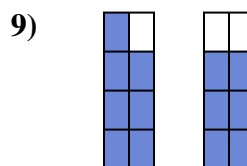
- A.  $\frac{1}{9} < \frac{5}{5}$   
 B.  $\frac{9}{1} < \frac{5}{5}$   
 C.  $\frac{10}{1} > \frac{10}{5}$   
 D.  $\frac{1}{10} < \frac{5}{10}$



- A.  $\frac{9}{1} > \frac{6}{4}$   
 B.  $\frac{10}{1} > \frac{10}{4}$   
 C.  $\frac{1}{10} < \frac{4}{10}$   
 D.  $\frac{1}{10} > \frac{4}{10}$



- A.  $\frac{6}{8} > \frac{3}{8}$   
 B.  $\frac{8}{6} > \frac{8}{3}$   
 C.  $\frac{6}{2} < \frac{3}{5}$   
 D.  $\frac{2}{6} > \frac{5}{3}$



- A.  $\frac{1}{7} > \frac{2}{6}$   
 B.  $\frac{7}{8} > \frac{6}{8}$   
 C.  $\frac{7}{1} < \frac{6}{2}$   
 D.  $\frac{1}{7} < \frac{2}{6}$

**Answers**1. **D**2. **D**3. **A**4. **D**5. **C**6. **D**7. **C**8. **A**9. **B**