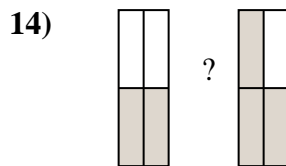
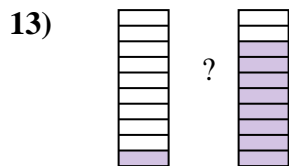
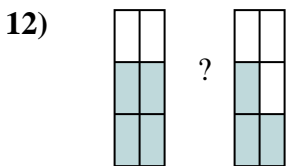
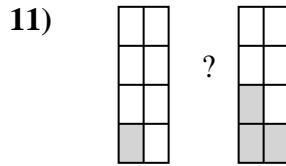
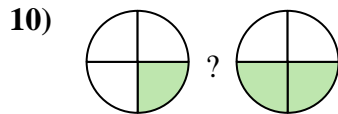
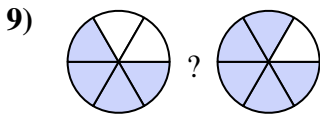
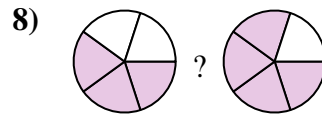
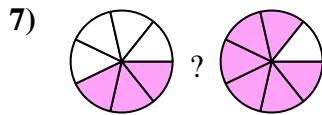
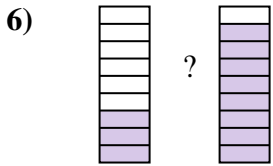
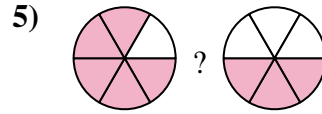
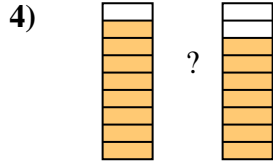

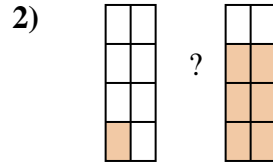
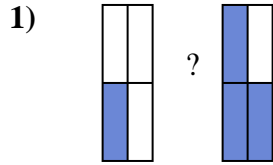





Compare the size of the fractions using $<$, $>$ or $=$.



Answers

Ex. $\frac{5}{6} > \frac{3}{6}$

1. _____

2. _____

3. _____

4. _____

5. _____

6. _____

7. _____

8. _____

9. _____

10. _____

11. _____

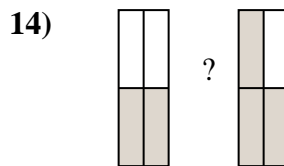
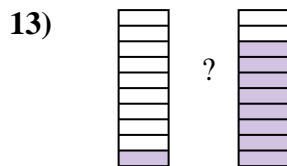
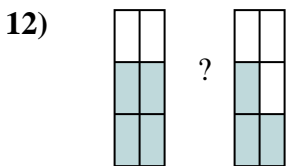
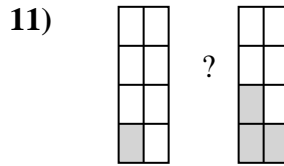
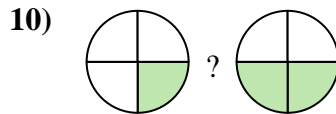
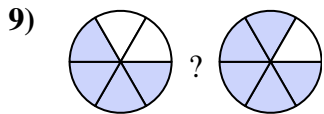
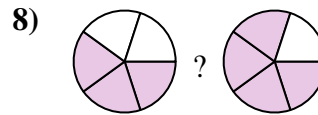
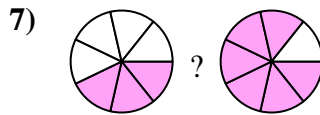
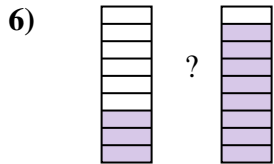
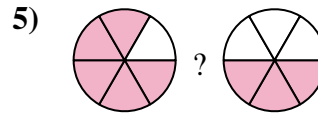
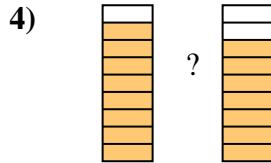
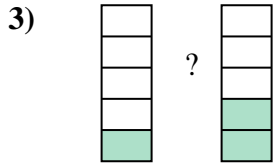
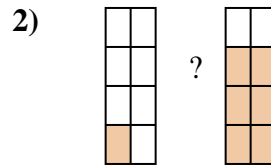
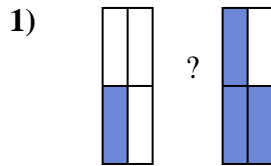
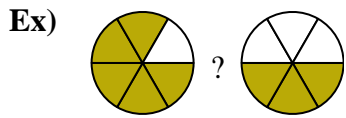
12. _____

13. _____

14. _____



Compare the size of the fractions using $<$, $>$ or $=$.



Answers

Ex. $\frac{5}{6} > \frac{3}{6}$

1. $\frac{1}{4} < \frac{3}{4}$

2. $\frac{1}{8} < \frac{6}{8}$

3. $\frac{1}{5} < \frac{2}{5}$

4. $\frac{8}{9} > \frac{7}{9}$

5. $\frac{5}{6} > \frac{3}{6}$

6. $\frac{3}{9} < \frac{8}{9}$

7. $\frac{3}{7} < \frac{6}{7}$

8. $\frac{3}{5} < \frac{4}{5}$

9. $\frac{4}{6} < \frac{5}{6}$

10. $\frac{1}{4} < \frac{2}{4}$

11. $\frac{1}{8} < \frac{3}{8}$

12. $\frac{4}{6} > \frac{3}{6}$

13. $\frac{1}{10} < \frac{8}{10}$

14. $\frac{2}{4} < \frac{3}{4}$