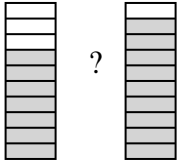


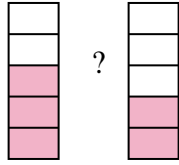


Compare the size of the fractions using $<$, $>$ or $=$.

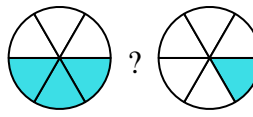
Ex)



1)



2)



Answers

Ex. $\frac{7}{10} < \frac{9}{10}$

1. _____

2. _____

3. _____

4. _____

5. _____

6. _____

7. _____

8. _____

9. _____

10. _____

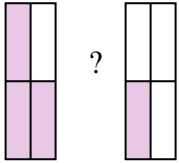
11. _____

12. _____

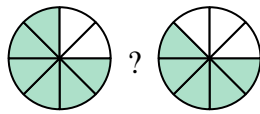
13. _____

14. _____

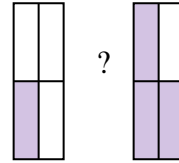
3)



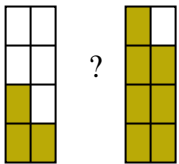
4)



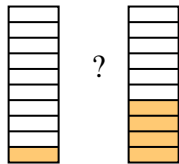
5)



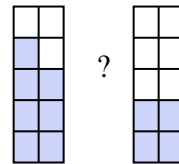
6)



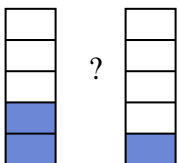
7)



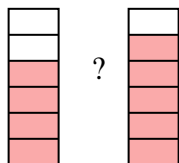
8)



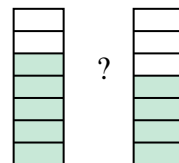
9)



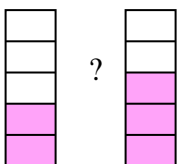
10)



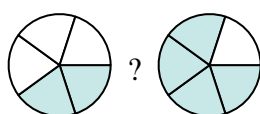
11)



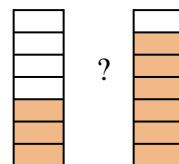
12)



13)

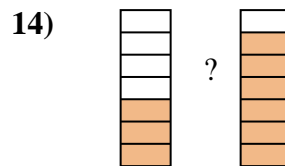
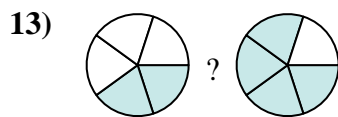
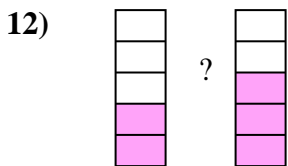
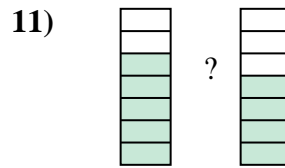
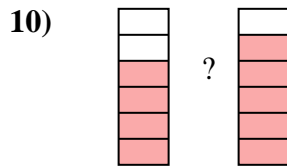
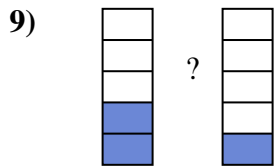
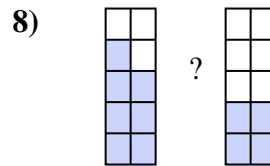
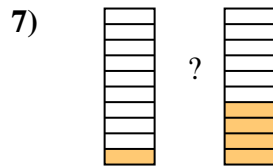
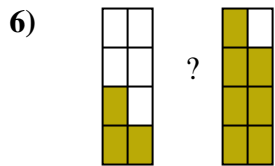
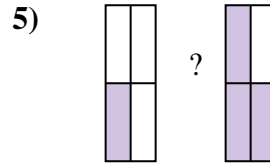
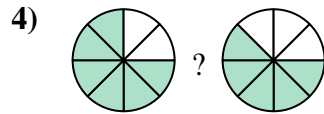
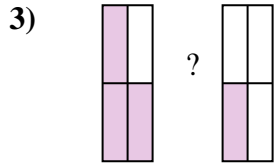
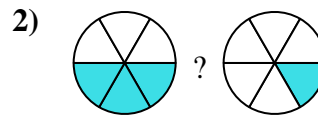
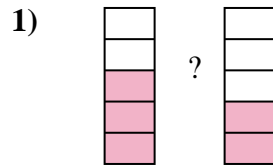
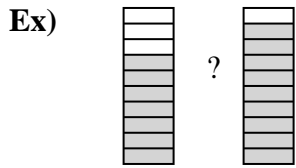


14)





Compare the size of the fractions using $<$, $>$ or $=$.



Answers

Ex. $\frac{7}{10} < \frac{9}{10}$

1. $\frac{3}{5} > \frac{2}{5}$

2. $\frac{3}{6} > \frac{1}{6}$

3. $\frac{3}{4} > \frac{1}{4}$

4. $\frac{6}{8} > \frac{5}{8}$

5. $\frac{1}{4} < \frac{3}{4}$

6. $\frac{3}{8} < \frac{7}{8}$

7. $\frac{1}{10} < \frac{4}{10}$

8. $\frac{7}{10} > \frac{4}{10}$

9. $\frac{2}{5} > \frac{1}{5}$

10. $\frac{4}{6} < \frac{5}{6}$

11. $\frac{5}{7} > \frac{4}{7}$

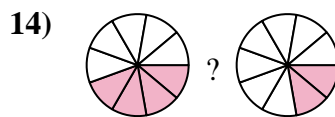
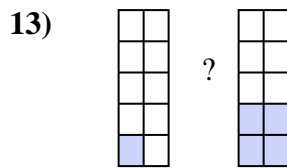
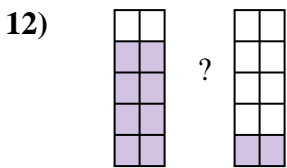
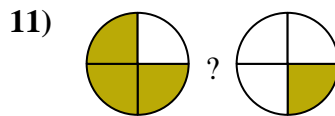
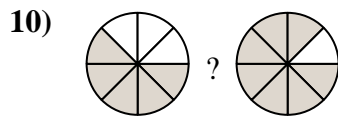
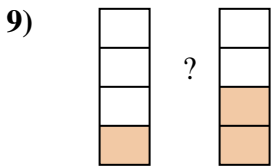
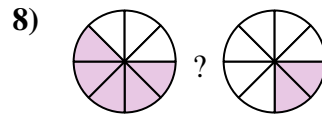
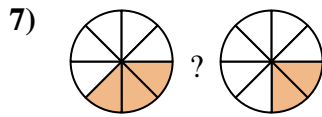
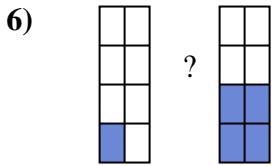
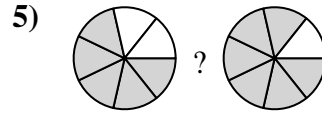
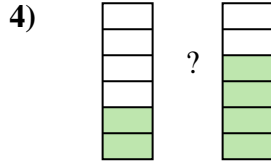
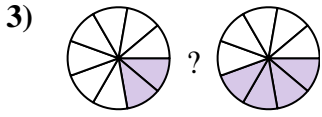
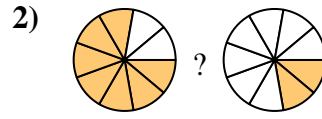
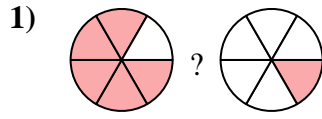
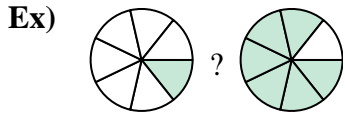
12. $\frac{2}{5} < \frac{3}{5}$

13. $\frac{2}{5} < \frac{4}{5}$

14. $\frac{3}{7} < \frac{6}{7}$



Compare the size of the fractions using $<$, $>$ or $=$.



Answers

Ex. $\frac{1}{7} < \frac{6}{7}$

1. _____

2. _____

3. _____

4. _____

5. _____

6. _____

7. _____

8. _____

9. _____

10. _____

11. _____

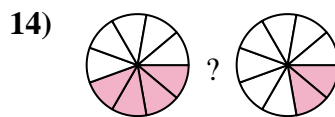
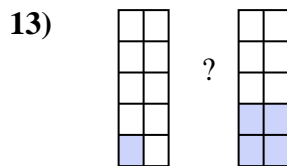
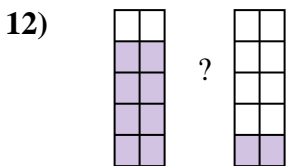
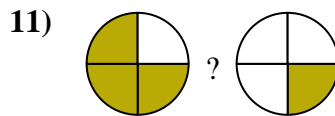
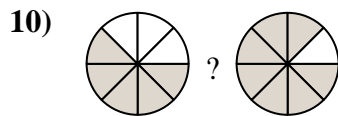
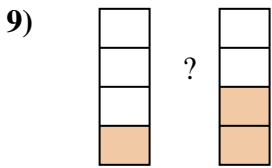
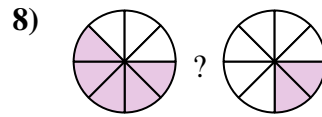
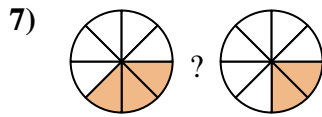
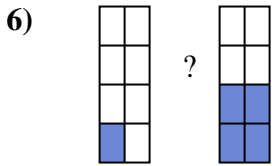
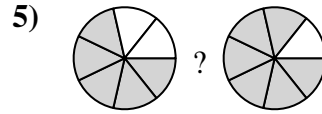
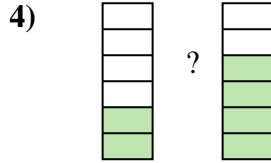
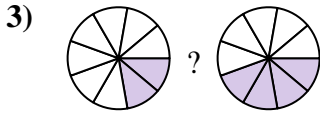
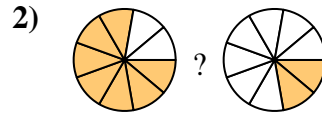
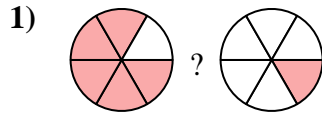
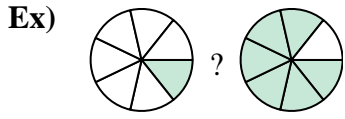
12. _____

13. _____

14. _____



Compare the size of the fractions using $<$, $>$ or $=$.

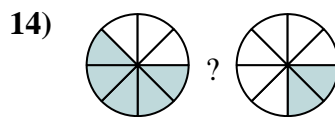
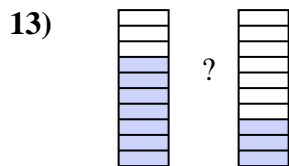
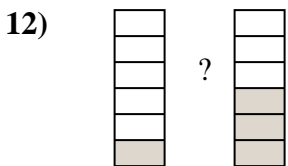
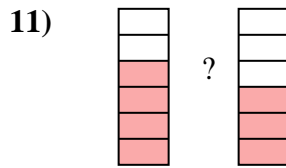
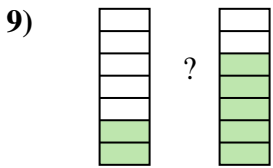
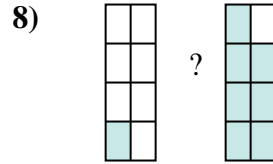
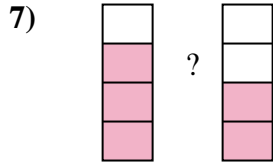
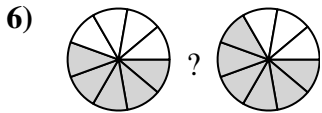
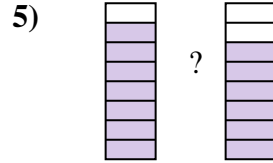
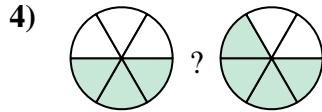
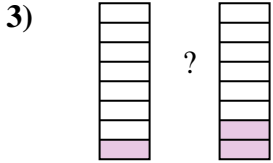
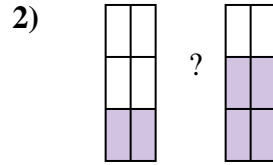
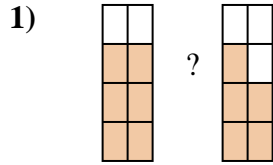
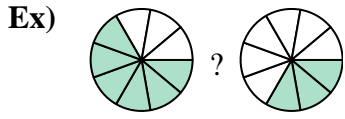


Answers

Ex.	$\frac{1}{7}$	$<$	$\frac{6}{7}$
1.	$\frac{5}{6}$	$>$	$\frac{1}{6}$
2.	$\frac{7}{9}$	$>$	$\frac{2}{9}$
3.	$\frac{2}{9}$	$<$	$\frac{4}{9}$
4.	$\frac{2}{6}$	$<$	$\frac{4}{6}$
5.	$\frac{5}{7}$	$<$	$\frac{6}{7}$
6.	$\frac{1}{8}$	$<$	$\frac{4}{8}$
7.	$\frac{3}{8}$	$>$	$\frac{2}{8}$
8.	$\frac{5}{8}$	$>$	$\frac{2}{8}$
9.	$\frac{1}{4}$	$<$	$\frac{2}{4}$
10.	$\frac{5}{8}$	$<$	$\frac{7}{8}$
11.	$\frac{3}{4}$	$>$	$\frac{1}{4}$
12.	$\frac{8}{10}$	$>$	$\frac{2}{10}$
13.	$\frac{1}{10}$	$<$	$\frac{4}{10}$
14.	$\frac{4}{9}$	$>$	$\frac{2}{9}$



Compare the size of the fractions using $<$, $>$ or $=$.



Answers

Ex. $\frac{6}{9} > \frac{3}{9}$

1. _____

2. _____

3. _____

4. _____

5. _____

6. _____

7. _____

8. _____

9. _____

10. _____

11. _____

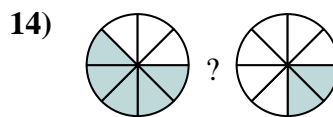
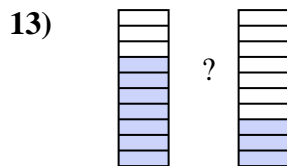
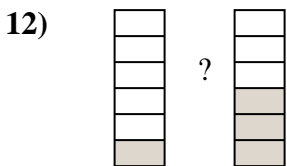
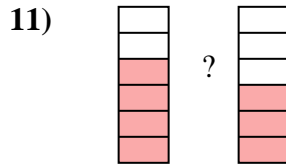
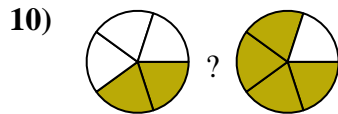
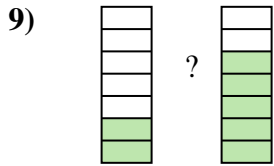
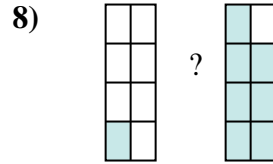
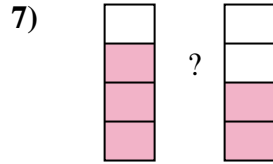
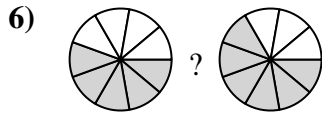
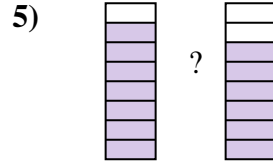
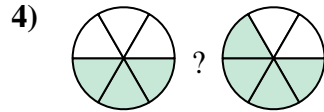
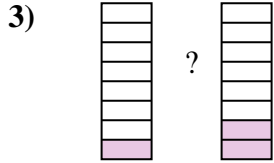
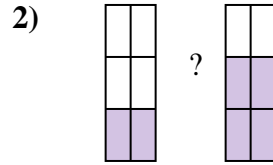
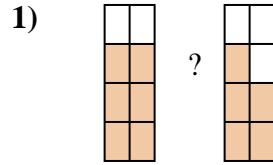
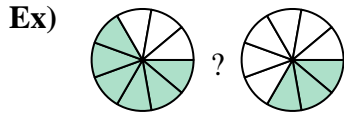
12. _____

13. _____

14. _____



Compare the size of the fractions using $<$, $>$ or $=$.

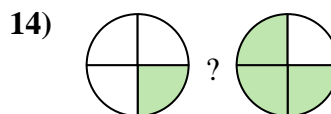
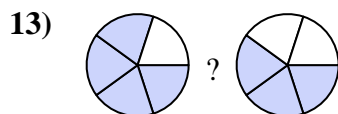
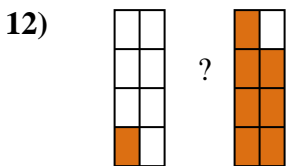
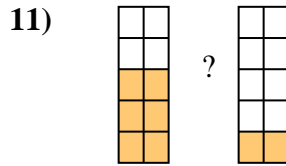
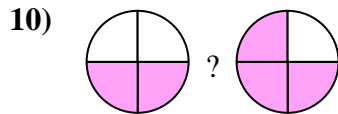
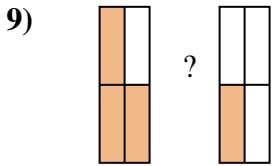
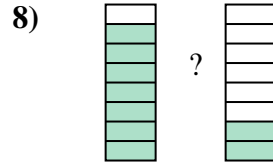
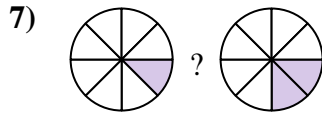
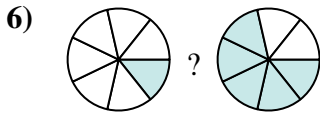
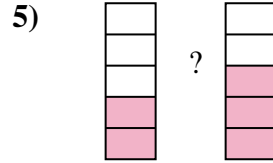
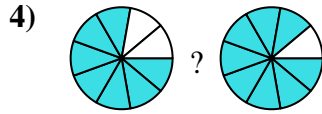
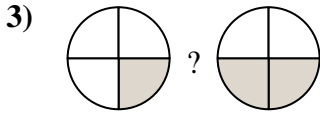
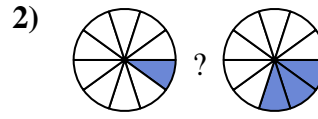

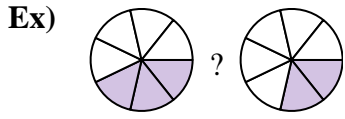


Answers

Ex.	$\frac{6}{9}$	$>$	$\frac{3}{9}$
1.	$\frac{6}{8}$	$>$	$\frac{5}{8}$
2.	$\frac{2}{6}$	$<$	$\frac{4}{6}$
3.	$\frac{1}{8}$	$<$	$\frac{2}{8}$
4.	$\frac{3}{6}$	$<$	$\frac{4}{6}$
5.	$\frac{7}{8}$	$>$	$\frac{6}{8}$
6.	$\frac{5}{9}$	$<$	$\frac{6}{9}$
7.	$\frac{3}{4}$	$>$	$\frac{2}{4}$
8.	$\frac{1}{8}$	$<$	$\frac{7}{8}$
9.	$\frac{2}{7}$	$<$	$\frac{5}{7}$
10.	$\frac{2}{5}$	$<$	$\frac{4}{5}$
11.	$\frac{4}{6}$	$>$	$\frac{3}{6}$
12.	$\frac{1}{6}$	$<$	$\frac{3}{6}$
13.	$\frac{7}{10}$	$>$	$\frac{3}{10}$
14.	$\frac{5}{8}$	$>$	$\frac{2}{8}$



Compare the size of the fractions using $<$, $>$ or $=$.



Answers

Ex. $\frac{3}{7} > \frac{2}{7}$

1. _____

2. _____

3. _____

4. _____

5. _____

6. _____

7. _____

8. _____

9. _____

10. _____

11. _____

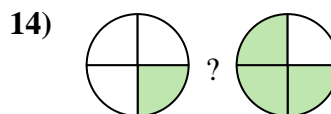
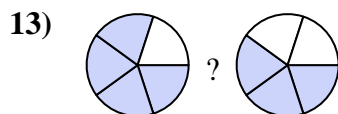
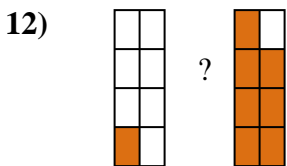
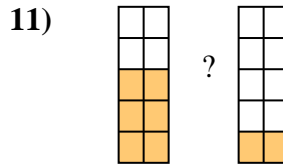
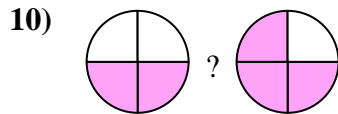
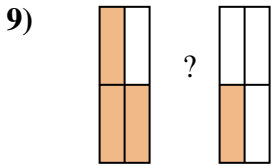
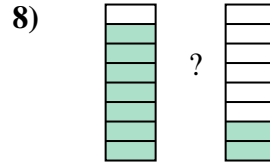
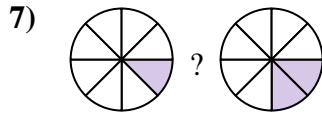
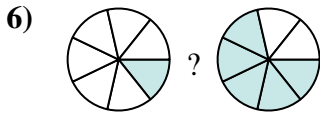
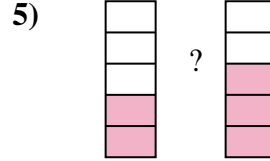
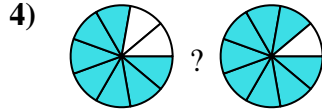
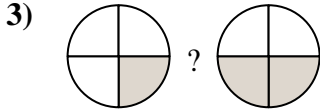
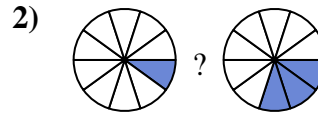

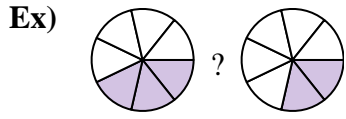
12. _____

13. _____

14. _____



Compare the size of the fractions using $<$, $>$ or $=$.



Answers

Ex. $\frac{3}{7} > \frac{2}{7}$

1. $\frac{4}{5} > \frac{3}{5}$

2. $\frac{1}{10} < \frac{3}{10}$

3. $\frac{1}{4} < \frac{2}{4}$

4. $\frac{7}{9} < \frac{8}{9}$

5. $\frac{2}{5} < \frac{3}{5}$

6. $\frac{1}{7} < \frac{5}{7}$

7. $\frac{1}{8} < \frac{2}{8}$

8. $\frac{7}{8} > \frac{2}{8}$

9. $\frac{3}{4} > \frac{1}{4}$

10. $\frac{2}{4} < \frac{3}{4}$

11. $\frac{6}{10} > \frac{2}{10}$

12. $\frac{1}{8} < \frac{7}{8}$

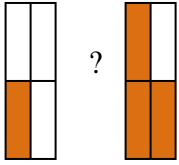
13. $\frac{4}{5} > \frac{3}{5}$

14. $\frac{1}{4} < \frac{3}{4}$

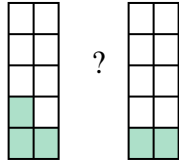


Compare the size of the fractions using $<$, $>$ or $=$.

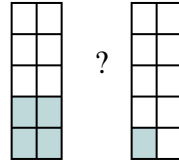
Ex)



1)



2)



Answers

Ex. $\frac{1}{4}$ $<$ $\frac{3}{4}$

1. _____

2. _____

3. _____

4. _____

5. _____

6. _____

7. _____

8. _____

9. _____

10. _____

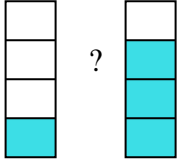
11. _____

12. _____

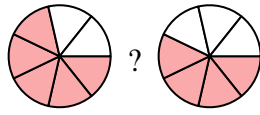
13. _____

14. _____

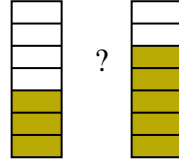
3)



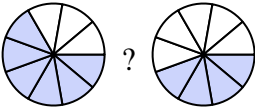
4)



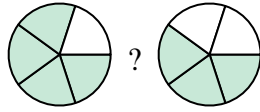
5)



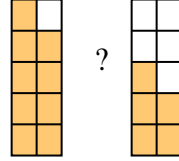
6)



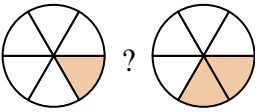
7)



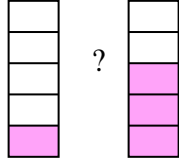
8)



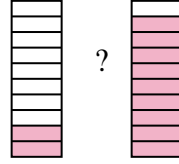
9)



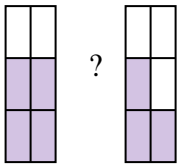
10)



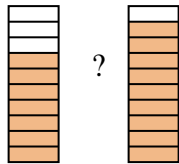
11)



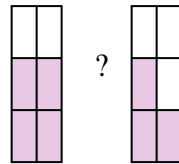
12)



13)

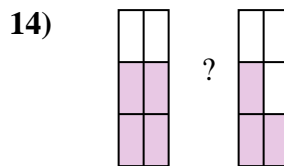
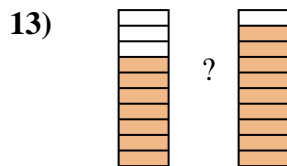
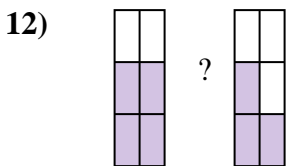
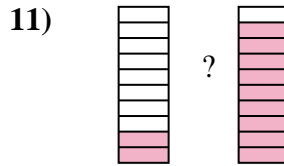
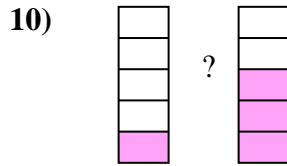
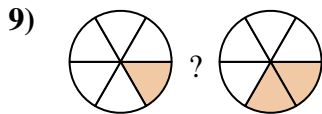
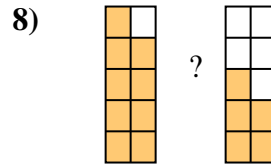
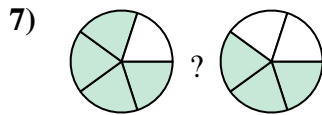
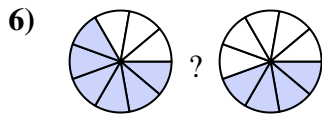

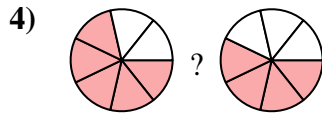

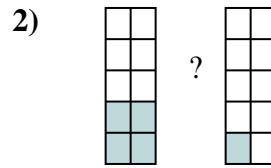
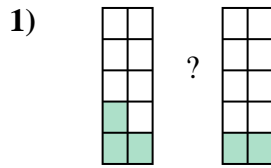
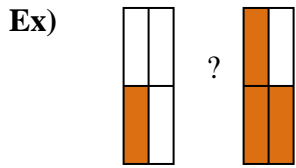


14)





Compare the size of the fractions using $<$, $>$ or $=$.



Answers

Ex. $\frac{1}{4} < \frac{3}{4}$

1. $\frac{3}{10} > \frac{2}{10}$

2. $\frac{4}{10} > \frac{1}{10}$

3. $\frac{1}{4} < \frac{3}{4}$

4. $\frac{5}{7} > \frac{4}{7}$

5. $\frac{3}{7} < \frac{5}{7}$

6. $\frac{6}{9} > \frac{4}{9}$

7. $\frac{4}{5} > \frac{3}{5}$

8. $\frac{9}{10} > \frac{5}{10}$

9. $\frac{1}{6} < \frac{2}{6}$

10. $\frac{1}{5} < \frac{3}{5}$

11. $\frac{2}{10} < \frac{9}{10}$

12. $\frac{4}{6} > \frac{3}{6}$

13. $\frac{7}{10} < \frac{9}{10}$

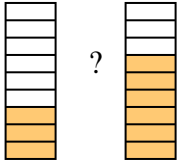
14. $\frac{4}{6} > \frac{3}{6}$



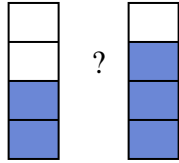
Compare the size of the fractions using < , > or =.

Answers

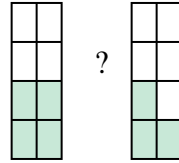
Ex)



1)



2)



Ex. $\frac{3}{9}$ < $\frac{6}{9}$

1. _____

2. _____

3. _____

4. _____

5. _____

6. _____

7. _____

8. _____

9. _____

10. _____

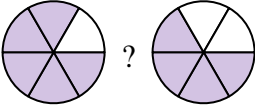
11. _____

12. _____

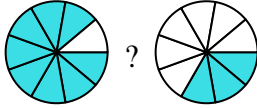
13. _____

14. _____

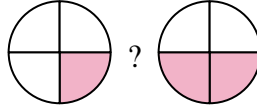
3)



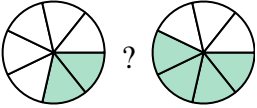
4)



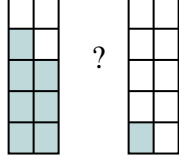
5)



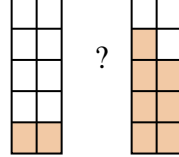
6)



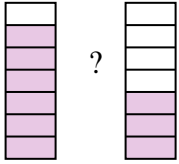
7)



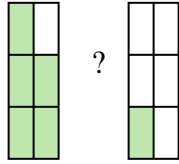
8)



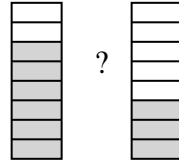
9)



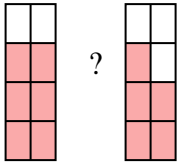
10)



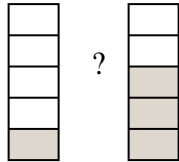
11)



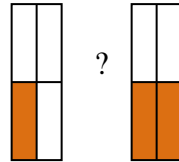
12)



13)

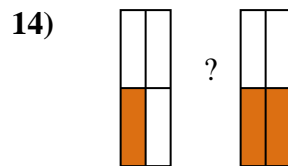
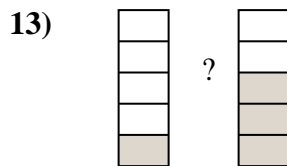
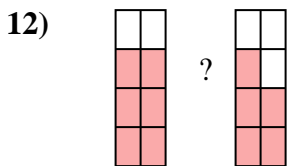

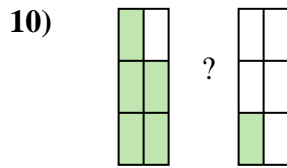
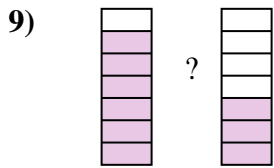
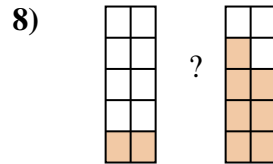
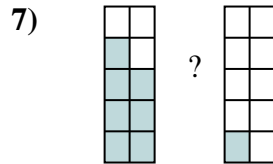
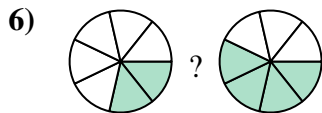
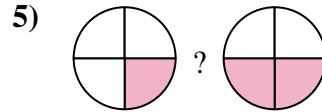
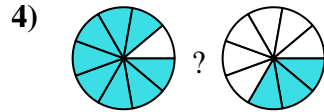
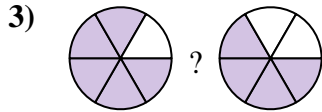
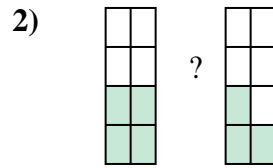
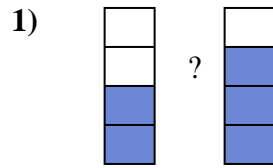
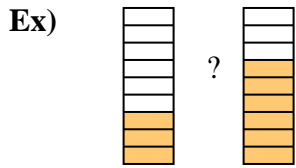


14)





Compare the size of the fractions using $<$, $>$ or $=$.



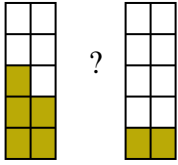
Answers

Ex.	$\frac{3}{9}$	$<$	$\frac{6}{9}$
1.	$\frac{2}{4}$	$<$	$\frac{3}{4}$
2.	$\frac{4}{8}$	$>$	$\frac{3}{8}$
3.	$\frac{5}{6}$	$>$	$\frac{4}{6}$
4.	$\frac{8}{9}$	$>$	$\frac{3}{9}$
5.	$\frac{1}{4}$	$<$	$\frac{2}{4}$
6.	$\frac{2}{7}$	$<$	$\frac{4}{7}$
7.	$\frac{7}{10}$	$>$	$\frac{1}{10}$
8.	$\frac{2}{10}$	$<$	$\frac{7}{10}$
9.	$\frac{6}{7}$	$>$	$\frac{3}{7}$
10.	$\frac{5}{6}$	$>$	$\frac{1}{6}$
11.	$\frac{6}{8}$	$>$	$\frac{3}{8}$
12.	$\frac{6}{8}$	$>$	$\frac{5}{8}$
13.	$\frac{1}{5}$	$<$	$\frac{3}{5}$
14.	$\frac{1}{4}$	$<$	$\frac{2}{4}$



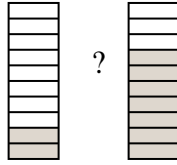
Compare the size of the fractions using $<$, $>$ or $=$.

Ex)



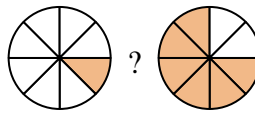
?

1)



?

2)



?

Answers

Ex. $\frac{5}{10}$ $>$ $\frac{2}{10}$

1. _____

2. _____

3. _____

4. _____

5. _____

6. _____

7. _____

8. _____

9. _____

10. _____

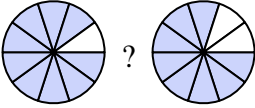
11. _____

12. _____

13. _____

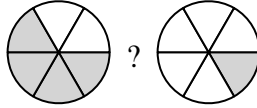
14. _____

3)



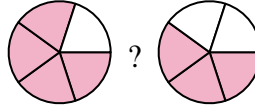
?

4)



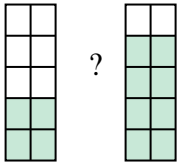
?

5)



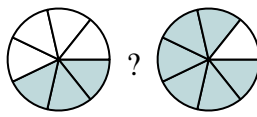
?

6)



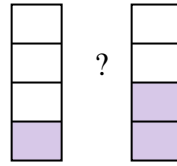
?

7)



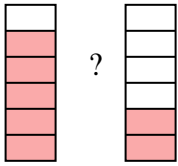
?

8)



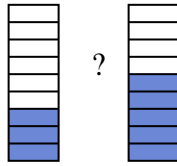
?

9)



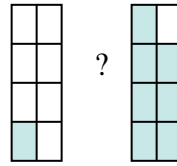
?

10)



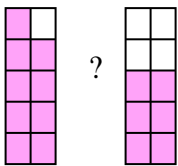
?

11)



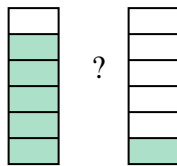
?

12)



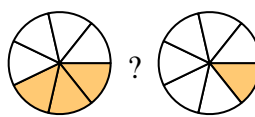
?

13)



?

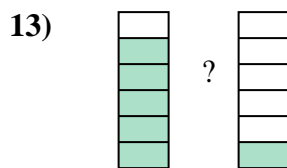
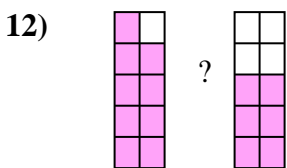
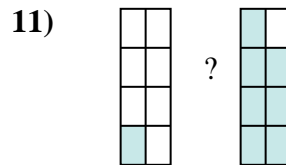
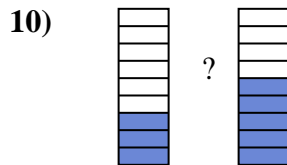
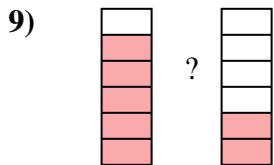
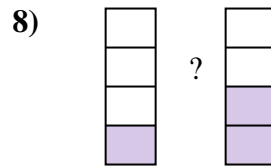
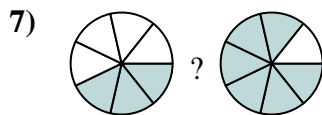
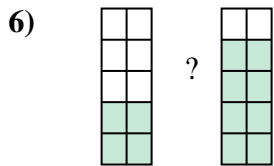
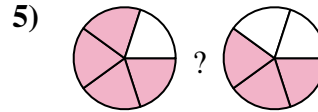
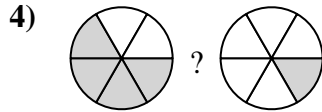
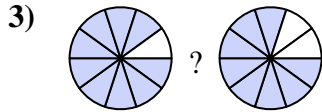
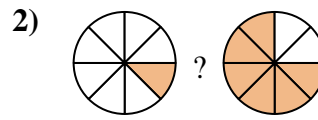

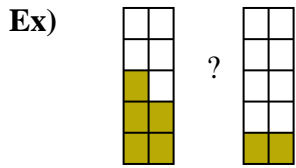
14)



?



Compare the size of the fractions using $<$, $>$ or $=$.



Answers

Ex. $\frac{5}{10} > \frac{2}{10}$

1. $\frac{2}{10} < \frac{7}{10}$

2. $\frac{1}{8} < \frac{6}{8}$

3. $\frac{9}{10} > \frac{8}{10}$

4. $\frac{4}{6} > \frac{1}{6}$

5. $\frac{4}{5} > \frac{3}{5}$

6. $\frac{4}{10} < \frac{8}{10}$

7. $\frac{3}{7} < \frac{6}{7}$

8. $\frac{1}{4} < \frac{2}{4}$

9. $\frac{5}{6} > \frac{2}{6}$

10. $\frac{3}{9} < \frac{5}{9}$

11. $\frac{1}{8} < \frac{7}{8}$

12. $\frac{9}{10} > \frac{6}{10}$

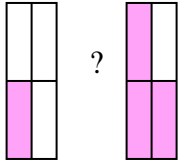
13. $\frac{5}{6} > \frac{1}{6}$

14. $\frac{3}{7} > \frac{1}{7}$

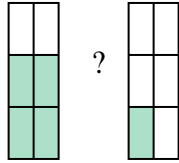


Compare the size of the fractions using $<$, $>$ or $=$.

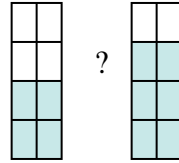
Ex)



1)



2)



Answers

Ex. $\frac{1}{4}$ $<$ $\frac{3}{4}$

1. _____

2. _____

3. _____

4. _____

5. _____

6. _____

7. _____

8. _____

9. _____

10. _____

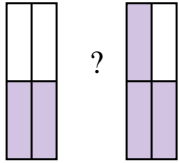
11. _____

12. _____

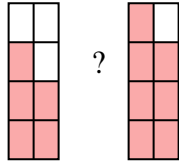
13. _____

14. _____

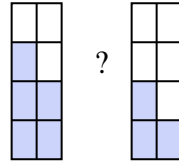
3)



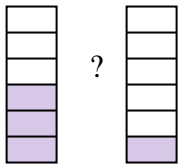
4)



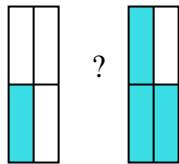
5)



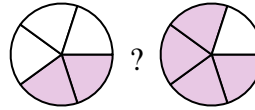
6)



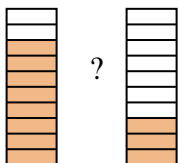
7)



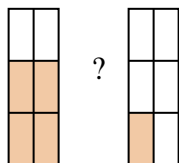
8)



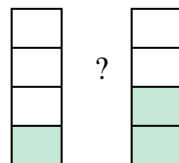
9)



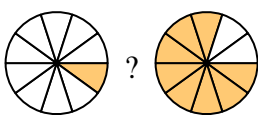
10)



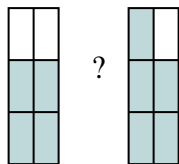
11)



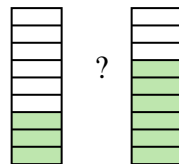
12)



13)

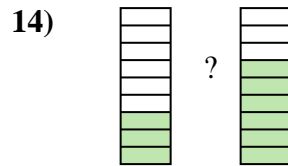
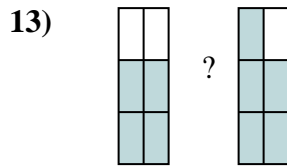
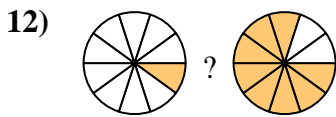
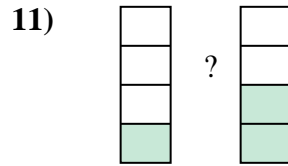
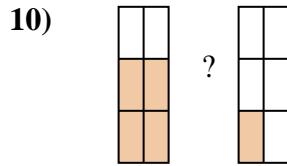
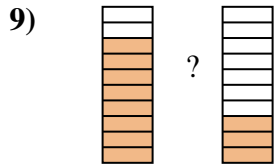
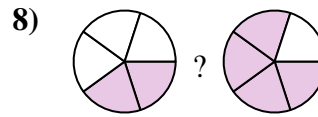
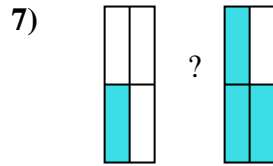
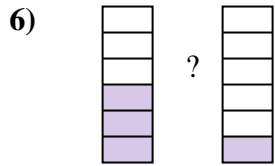
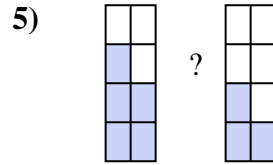
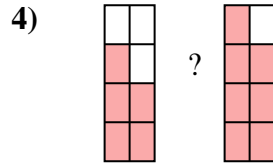
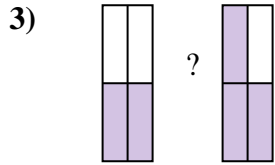
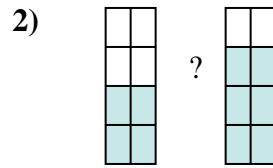
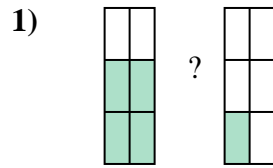
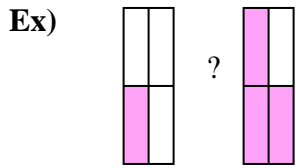


14)





Compare the size of the fractions using $<$, $>$ or $=$.



Answers

Ex. $\frac{1}{4} < \frac{3}{4}$

1. $\frac{4}{6} > \frac{1}{6}$

2. $\frac{4}{8} < \frac{6}{8}$

3. $\frac{2}{4} < \frac{3}{4}$

4. $\frac{5}{8} < \frac{7}{8}$

5. $\frac{5}{8} > \frac{3}{8}$

6. $\frac{3}{6} > \frac{1}{6}$

7. $\frac{1}{4} < \frac{3}{4}$

8. $\frac{2}{5} < \frac{4}{5}$

9. $\frac{8}{10} > \frac{3}{10}$

10. $\frac{4}{6} > \frac{1}{6}$

11. $\frac{1}{4} < \frac{2}{4}$

12. $\frac{1}{10} < \frac{8}{10}$

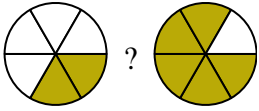
13. $\frac{4}{6} < \frac{5}{6}$

14. $\frac{3}{9} < \frac{6}{9}$

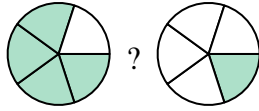


Compare the size of the fractions using $<$, $>$ or $=$.

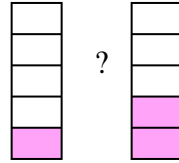
Ex)



1)



2)



Answers

Ex. $\frac{2}{6}$ $<$ $\frac{5}{6}$

1. _____

2. _____

3. _____

4. _____

5. _____

6. _____

7. _____

8. _____

9. _____

10. _____

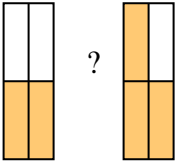
11. _____

12. _____

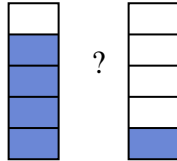
13. _____

14. _____

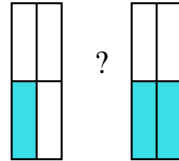
3)



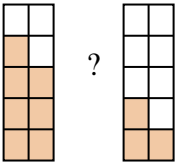
4)



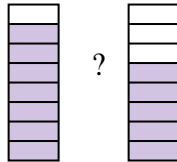
5)



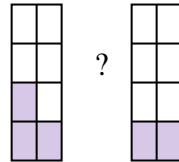
6)



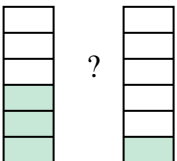
7)



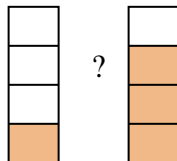
8)



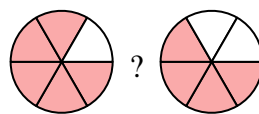
9)



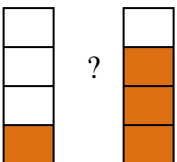
10)



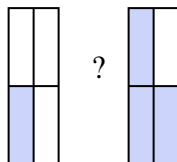
11)



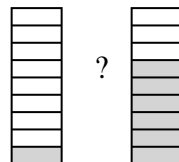
12)



13)

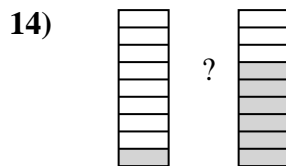
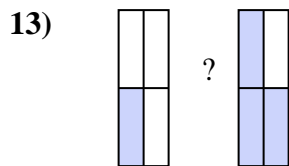
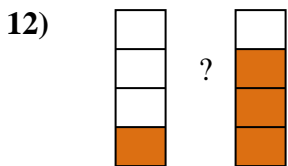
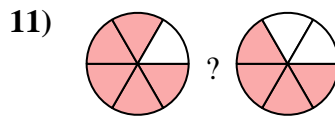
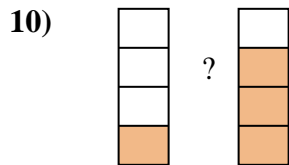

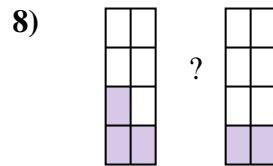
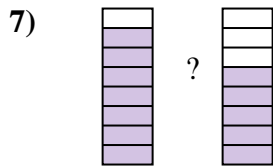
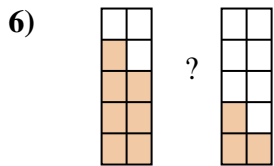
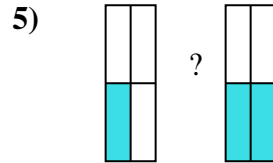
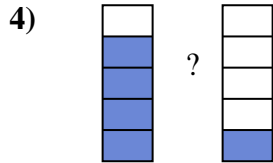
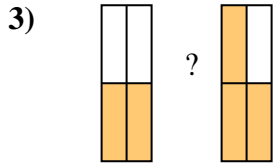
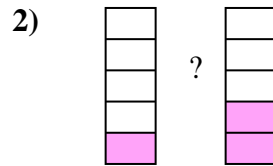
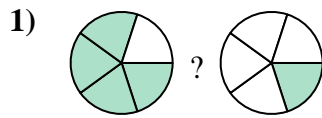
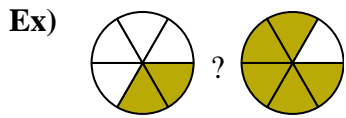


14)





Compare the size of the fractions using $<$, $>$ or $=$.



Answers

Ex. $\frac{2}{6} < \frac{5}{6}$

1. $\frac{4}{5} > \frac{1}{5}$

2. $\frac{1}{5} < \frac{2}{5}$

3. $\frac{2}{4} < \frac{3}{4}$

4. $\frac{4}{5} > \frac{1}{5}$

5. $\frac{1}{4} < \frac{2}{4}$

6. $\frac{7}{10} > \frac{3}{10}$

7. $\frac{7}{8} > \frac{5}{8}$

8. $\frac{3}{8} > \frac{2}{8}$

9. $\frac{3}{6} > \frac{1}{6}$

10. $\frac{1}{4} < \frac{3}{4}$

11. $\frac{5}{6} > \frac{4}{6}$

12. $\frac{1}{4} < \frac{3}{4}$

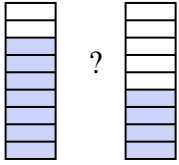
13. $\frac{1}{4} < \frac{3}{4}$

14. $\frac{1}{9} < \frac{6}{9}$



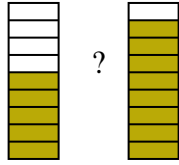
Compare the size of the fractions using $<$, $>$ or $=$.

Ex)



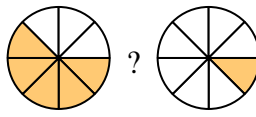
?

1)



?

2)



?

Answers

Ex. $\frac{7}{9}$ $>$ $\frac{4}{9}$

1. _____

2. _____

3. _____

4. _____

5. _____

6. _____

7. _____

8. _____

9. _____

10. _____

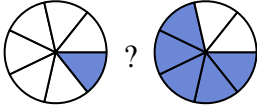
11. _____

12. _____

13. _____

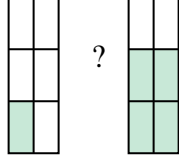
14. _____

3)



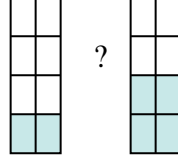
?

4)



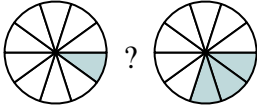
?

5)



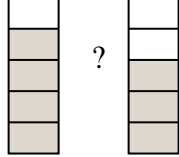
?

6)



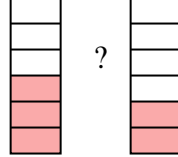
?

7)



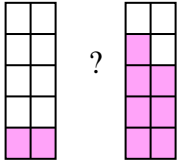
?

8)



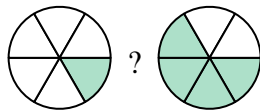
?

9)



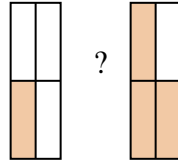
?

10)



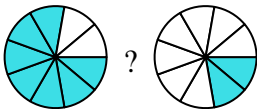
?

11)



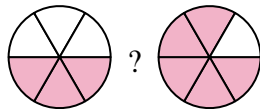
?

12)



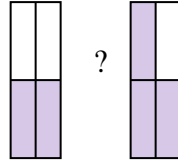
?

13)



?

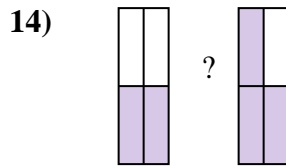
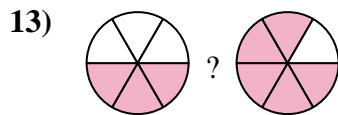
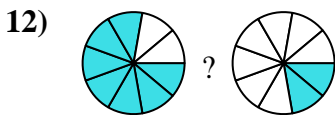
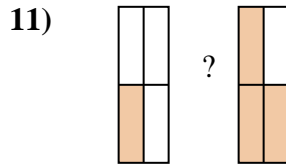
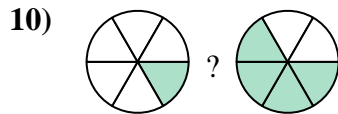
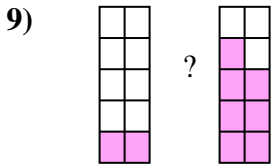
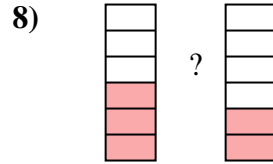

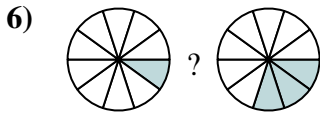
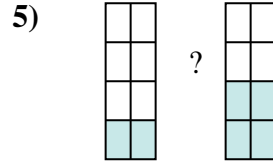
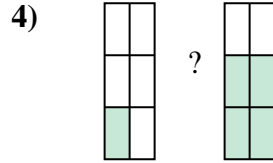
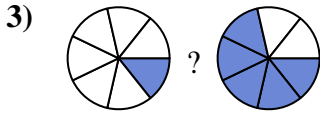
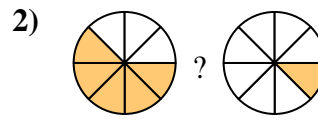
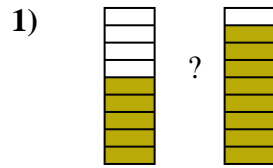
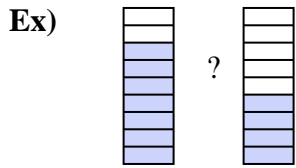
14)



?



Compare the size of the fractions using $<$, $>$ or $=$.



Answers

Ex. $\frac{7}{9} > \frac{4}{9}$

1. $\frac{5}{9} < \frac{8}{9}$

2. $\frac{5}{8} > \frac{1}{8}$

3. $\frac{1}{7} < \frac{5}{7}$

4. $\frac{1}{6} < \frac{4}{6}$

5. $\frac{2}{8} < \frac{4}{8}$

6. $\frac{1}{10} < \frac{3}{10}$

7. $\frac{4}{5} > \frac{3}{5}$

8. $\frac{3}{6} > \frac{2}{6}$

9. $\frac{2}{10} < \frac{7}{10}$

10. $\frac{1}{6} < \frac{4}{6}$

11. $\frac{1}{4} < \frac{3}{4}$

12. $\frac{7}{9} > \frac{2}{9}$

13. $\frac{3}{6} < \frac{5}{6}$

14. $\frac{2}{4} < \frac{3}{4}$