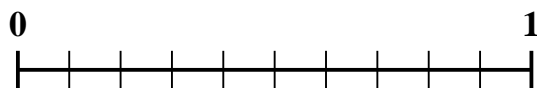




Use the number line to solve each problem.

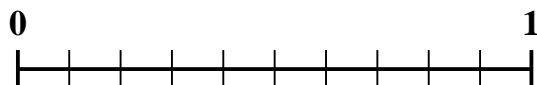
1) Which amount is larger, $\frac{6}{10}$ or 0.47?



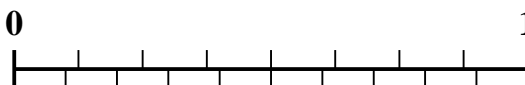
2) Which amount is larger, $\frac{3}{4}$ or 0.89?




3) Which amount is larger, $\frac{5}{10}$ or 0.6?



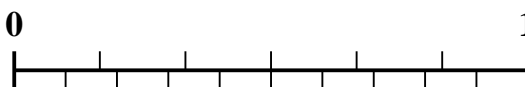
4) Which amount is larger, $\frac{7}{8}$ or 0.78?



5) Which amount is larger, $\frac{1}{3}$ or 0.19?



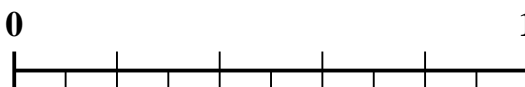
6) Which amount is larger, $\frac{2}{6}$ or 0.44?



7) Which amount is larger, $\frac{3}{5}$ or 0.43?



8) Which amount is larger, $\frac{2}{5}$ or 0.56?



9) Which amount is larger, $\frac{4}{5}$ or 0.69?



10) Which amount is larger, $\frac{1}{2}$ or 0.6?



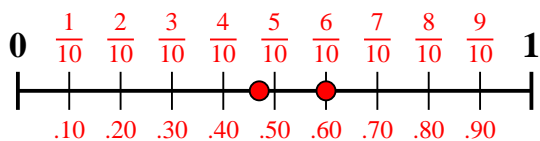
Answers

1. _____
2. _____
3. _____
4. _____
5. _____
6. _____
7. _____
8. _____
9. _____
10. _____

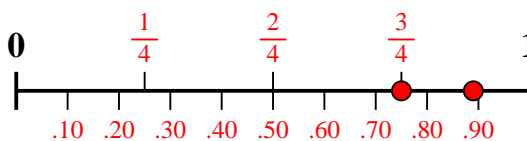


Use the number line to solve each problem.

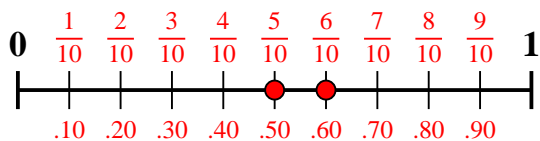
1) Which amount is larger, $\frac{6}{10}$ or 0.47?



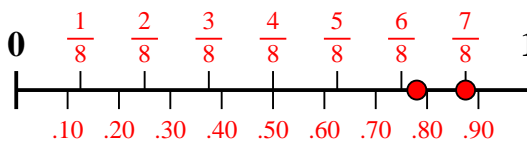
2) Which amount is larger, $\frac{3}{4}$ or 0.89?



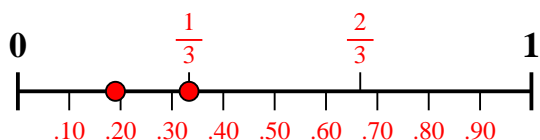
3) Which amount is larger, $\frac{5}{10}$ or 0.6?



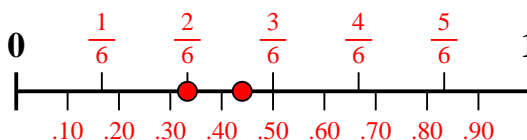
4) Which amount is larger, $\frac{7}{8}$ or 0.78?



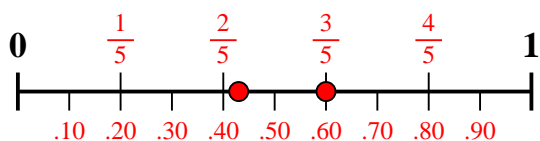
5) Which amount is larger, $\frac{1}{3}$ or 0.19?



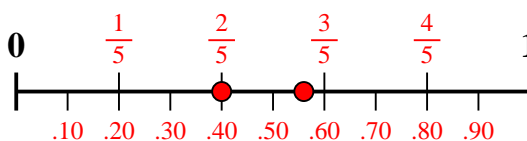
6) Which amount is larger, $\frac{2}{6}$ or 0.44?



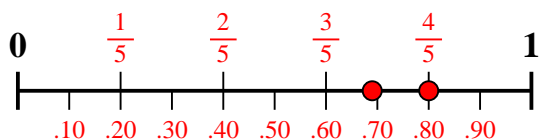
7) Which amount is larger, $\frac{3}{5}$ or 0.43?



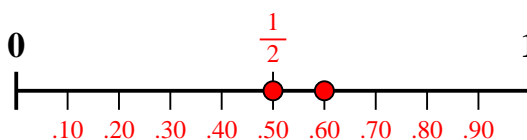
8) Which amount is larger, $\frac{2}{5}$ or 0.56?



9) Which amount is larger, $\frac{4}{5}$ or 0.69?



10) Which amount is larger, $\frac{1}{2}$ or 0.6?



Answers

1. $\frac{6}{10}$
2. **0.89**
3. **0.6**
4. $\frac{7}{8}$
5. $\frac{1}{3}$
6. **0.44**
7. $\frac{3}{5}$
8. **0.56**
9. $\frac{4}{5}$
10. **0.6**