



Match each equation to the answer and write the answer.

**Answers**

Ex)  $\frac{1}{6} + \frac{1}{6} + \frac{1}{6}$




Ex.     A    

1)  $\frac{1}{8} + \frac{1}{8} + \frac{1}{8} + \frac{1}{8}$




1. \_\_\_\_\_

2)  $\frac{1}{6} + \frac{1}{6}$




2. \_\_\_\_\_

3)  $\frac{1}{4} + \frac{1}{4}$



3. \_\_\_\_\_

4)  $\frac{1}{12} + \frac{1}{12} + \frac{1}{12} + \frac{1}{12}$



4. \_\_\_\_\_

5)  $\frac{1}{10} + \frac{1}{10} + \frac{1}{10}$



5. \_\_\_\_\_

6)  $\frac{1}{10} + \frac{1}{10} + \frac{1}{10} + \frac{1}{10} + \frac{1}{10} + \frac{1}{10}$



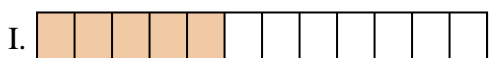
6. \_\_\_\_\_

7)  $\frac{1}{3} + \frac{1}{3}$



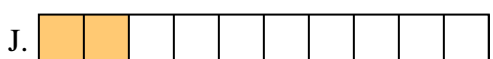
7. \_\_\_\_\_

8)  $\frac{1}{6} + \frac{1}{6} + \frac{1}{6} + \frac{1}{6} + \frac{1}{6}$



8. \_\_\_\_\_

9)  $\frac{1}{5} + \frac{1}{5}$




9. \_\_\_\_\_

10)  $\frac{1}{10} + \frac{1}{10}$



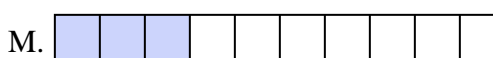
10. \_\_\_\_\_

11)  $\frac{1}{10} + \frac{1}{10} + \frac{1}{10} + \frac{1}{10} + \frac{1}{10} + \frac{1}{10} + \frac{1}{10}$



11. \_\_\_\_\_

12)  $\frac{1}{12} + \frac{1}{12} + \frac{1}{12} + \frac{1}{12} + \frac{1}{12}$



12. \_\_\_\_\_

13)  $\frac{1}{4} + \frac{1}{4} + \frac{1}{4}$




13. \_\_\_\_\_

14)  $\frac{1}{6} + \frac{1}{6} + \frac{1}{6} + \frac{1}{6}$



14. \_\_\_\_\_

15)  $\frac{1}{5} + \frac{1}{5} + \frac{1}{5} + \frac{1}{5}$



15. \_\_\_\_\_



Match each equation to the answer and write the answer.

Ex)  $\frac{1}{6} + \frac{1}{6} + \frac{1}{6}$



Answers


Ex.     **A**    

1)  $\frac{1}{8} + \frac{1}{8} + \frac{1}{8} + \frac{1}{8}$



1.     **L**    

2)  $\frac{1}{6} + \frac{1}{6}$




2.     **O**    

3)  $\frac{1}{4} + \frac{1}{4}$



3.     **P**    

4)  $\frac{1}{12} + \frac{1}{12} + \frac{1}{12} + \frac{1}{12}$



4.     **B**    

5)  $\frac{1}{10} + \frac{1}{10} + \frac{1}{10}$



5.     **M**    

6)  $\frac{1}{10} + \frac{1}{10} + \frac{1}{10} + \frac{1}{10} + \frac{1}{10} + \frac{1}{10}$



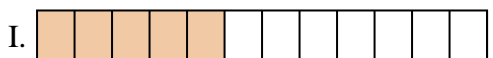
6.     **G**    

7)  $\frac{1}{3} + \frac{1}{3}$



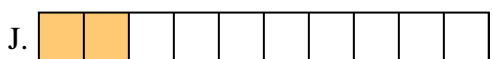
7.     **F**    

8)  $\frac{1}{6} + \frac{1}{6} + \frac{1}{6} + \frac{1}{6} + \frac{1}{6}$



8.     **N**    

9)  $\frac{1}{5} + \frac{1}{5}$




9.     **D**    

10)  $\frac{1}{10} + \frac{1}{10}$



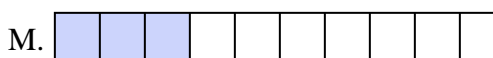
10.     **J**    

11)  $\frac{1}{10} + \frac{1}{10} + \frac{1}{10} + \frac{1}{10} + \frac{1}{10} + \frac{1}{10} + \frac{1}{10}$



11.     **E**    

12)  $\frac{1}{12} + \frac{1}{12} + \frac{1}{12} + \frac{1}{12} + \frac{1}{12}$




12.     **I**    

13)  $\frac{1}{4} + \frac{1}{4} + \frac{1}{4}$




13.     **K**    

14)  $\frac{1}{6} + \frac{1}{6} + \frac{1}{6} + \frac{1}{6}$



14.     **H**    

15)  $\frac{1}{5} + \frac{1}{5} + \frac{1}{5} + \frac{1}{5}$




15.     **C**



Match each equation to the answer and write the answer.

Answers

Ex)  $\frac{1}{5} + \frac{1}{5}$



Ex.         **G**        

1)  $\frac{1}{10} + \frac{1}{10}$



1. \_\_\_\_\_

2)  $\frac{1}{5} + \frac{1}{5} + \frac{1}{5}$



2. \_\_\_\_\_

3)  $\frac{1}{3} + \frac{1}{3}$




3. \_\_\_\_\_

4)  $\frac{1}{12} + \frac{1}{12}$



4. \_\_\_\_\_

5)  $\frac{1}{12} + \frac{1}{12} + \frac{1}{12} + \frac{1}{12}$



5. \_\_\_\_\_

6)  $\frac{1}{4} + \frac{1}{4}$



6. \_\_\_\_\_

7)  $\frac{1}{6} + \frac{1}{6}$



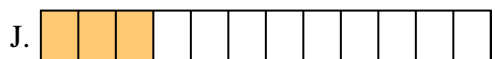
7. \_\_\_\_\_

8)  $\frac{1}{4} + \frac{1}{4} + \frac{1}{4}$



8. \_\_\_\_\_

9)  $\frac{1}{10} + \frac{1}{10} + \frac{1}{10} + \frac{1}{10}$




9. \_\_\_\_\_

10)  $\frac{1}{6} + \frac{1}{6} + \frac{1}{6} + \frac{1}{6} + \frac{1}{6}$



10. \_\_\_\_\_

11)  $\frac{1}{8} + \frac{1}{8} + \frac{1}{8} + \frac{1}{8}$




11. \_\_\_\_\_

12)  $\frac{1}{12} + \frac{1}{12} + \frac{1}{12}$




12. \_\_\_\_\_

13)  $\frac{1}{8} + \frac{1}{8}$




13. \_\_\_\_\_

14)  $\frac{1}{6} + \frac{1}{6} + \frac{1}{6} + \frac{1}{6}$



14. \_\_\_\_\_

15)  $\frac{1}{8} + \frac{1}{8} + \frac{1}{8} + \frac{1}{8} + \frac{1}{8}$




15. \_\_\_\_\_



Match each equation to the answer and write the answer.

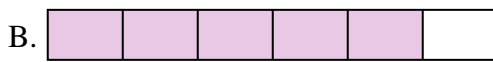
Ex)  $\frac{1}{5} + \frac{1}{5}$



Answers

Ex.     **G**    

1)  $\frac{1}{10} + \frac{1}{10}$




1.     **E**    

2)  $\frac{1}{5} + \frac{1}{5} + \frac{1}{5}$



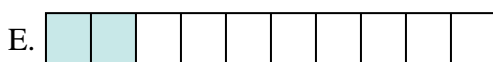
2.     **O**    

3)  $\frac{1}{3} + \frac{1}{3}$



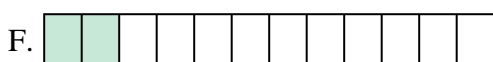
3.     **K**    

4)  $\frac{1}{12} + \frac{1}{12}$



4.     **F**    

5)  $\frac{1}{12} + \frac{1}{12} + \frac{1}{12} + \frac{1}{12}$



5.     **M**    

6)  $\frac{1}{4} + \frac{1}{4}$



6.     **D**    

7)  $\frac{1}{6} + \frac{1}{6}$



7.     **A**    

8)  $\frac{1}{4} + \frac{1}{4} + \frac{1}{4}$



8.     **P**    

9)  $\frac{1}{10} + \frac{1}{10} + \frac{1}{10} + \frac{1}{10}$




9.     **I**    

10)  $\frac{1}{6} + \frac{1}{6} + \frac{1}{6} + \frac{1}{6} + \frac{1}{6}$



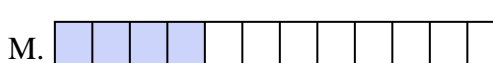
10.     **B**    

11)  $\frac{1}{8} + \frac{1}{8} + \frac{1}{8} + \frac{1}{8}$



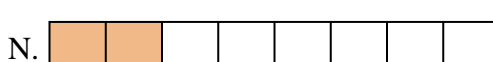
11.     **C**    

12)  $\frac{1}{12} + \frac{1}{12} + \frac{1}{12}$




12.     **J**    

13)  $\frac{1}{8} + \frac{1}{8}$




13.     **N**    

14)  $\frac{1}{6} + \frac{1}{6} + \frac{1}{6} + \frac{1}{6}$



14.     **L**    

15)  $\frac{1}{8} + \frac{1}{8} + \frac{1}{8} + \frac{1}{8} + \frac{1}{8}$



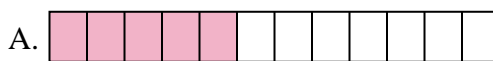
15.     **H**



Match each equation to the answer and write the answer.

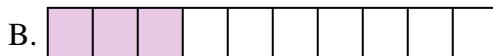
Answers

Ex)  $\frac{1}{10} + \frac{1}{10} + \frac{1}{10} + \frac{1}{10} + \frac{1}{10} + \frac{1}{10} + \frac{1}{10}$



Ex.     H    

1)  $\frac{1}{12} + \frac{1}{12} + \frac{1}{12} + \frac{1}{12}$



1. \_\_\_\_\_

2)  $\frac{1}{5} + \frac{1}{5} + \frac{1}{5} + \frac{1}{5}$




2. \_\_\_\_\_

3)  $\frac{1}{6} + \frac{1}{6} + \frac{1}{6}$



3. \_\_\_\_\_

4)  $\frac{1}{8} + \frac{1}{8} + \frac{1}{8} + \frac{1}{8}$



4. \_\_\_\_\_

5)  $\frac{1}{4} + \frac{1}{4}$



5. \_\_\_\_\_

6)  $\frac{1}{5} + \frac{1}{5} + \frac{1}{5}$




6. \_\_\_\_\_

7)  $\frac{1}{8} + \frac{1}{8} + \frac{1}{8} + \frac{1}{8} + \frac{1}{8}$



7. \_\_\_\_\_

8)  $\frac{1}{3} + \frac{1}{3}$



8. \_\_\_\_\_

9)  $\frac{1}{5} + \frac{1}{5}$




9. \_\_\_\_\_

10)  $\frac{1}{12} + \frac{1}{12}$




10. \_\_\_\_\_

11)  $\frac{1}{8} + \frac{1}{8}$



11. \_\_\_\_\_

12)  $\frac{1}{10} + \frac{1}{10} + \frac{1}{10}$



12. \_\_\_\_\_

13)  $\frac{1}{4} + \frac{1}{4} + \frac{1}{4}$




13. \_\_\_\_\_

14)  $\frac{1}{12} + \frac{1}{12} + \frac{1}{12} + \frac{1}{12} + \frac{1}{12}$



14. \_\_\_\_\_

15)  $\frac{1}{6} + \frac{1}{6} + \frac{1}{6} + \frac{1}{6} + \frac{1}{6}$

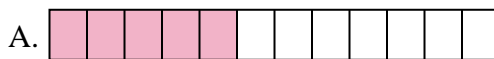


15. \_\_\_\_\_

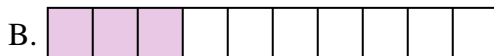


Match each equation to the answer and write the answer.

Ex)  $\frac{1}{10} + \frac{1}{10} + \frac{1}{10} + \frac{1}{10} + \frac{1}{10} + \frac{1}{10} + \frac{1}{10}$



1)  $\frac{1}{12} + \frac{1}{12} + \frac{1}{12} + \frac{1}{12}$




2)  $\frac{1}{5} + \frac{1}{5} + \frac{1}{5} + \frac{1}{5}$



3)  $\frac{1}{6} + \frac{1}{6} + \frac{1}{6}$



4)  $\frac{1}{8} + \frac{1}{8} + \frac{1}{8} + \frac{1}{8}$



5)  $\frac{1}{4} + \frac{1}{4}$




6)  $\frac{1}{5} + \frac{1}{5} + \frac{1}{5}$



7)  $\frac{1}{8} + \frac{1}{8} + \frac{1}{8} + \frac{1}{8} + \frac{1}{8}$



8)  $\frac{1}{3} + \frac{1}{3}$




9)  $\frac{1}{5} + \frac{1}{5}$




10)  $\frac{1}{12} + \frac{1}{12}$



11)  $\frac{1}{8} + \frac{1}{8}$



12)  $\frac{1}{10} + \frac{1}{10} + \frac{1}{10}$




13)  $\frac{1}{4} + \frac{1}{4} + \frac{1}{4}$



14)  $\frac{1}{12} + \frac{1}{12} + \frac{1}{12} + \frac{1}{12} + \frac{1}{12}$



15)  $\frac{1}{6} + \frac{1}{6} + \frac{1}{6} + \frac{1}{6} + \frac{1}{6}$



Answers

Ex.     **H**    

1.     **G**    

2.     **M**    

3.     **J**    

4.     **O**    

5.     **L**    

6.     **P**    

7.     **C**    

8.     **F**    

9.     **K**    

10.     **D**    

11.     **I**    

12.     **B**    

13.     **N**    

14.     **A**    

15.     **E**



Match each equation to the answer and write the answer.

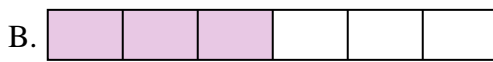
**Answers**

Ex)  $\frac{1}{4} + \frac{1}{4}$



Ex.     **I**    

1)  $\frac{1}{10} + \frac{1}{10} + \frac{1}{10} + \frac{1}{10} + \frac{1}{10} + \frac{1}{10} + \frac{1}{10}$



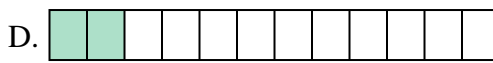
1. \_\_\_\_\_

2)  $\frac{1}{5} + \frac{1}{5}$



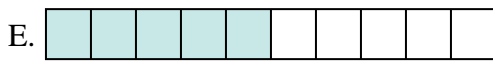
2. \_\_\_\_\_

3)  $\frac{1}{5} + \frac{1}{5} + \frac{1}{5}$



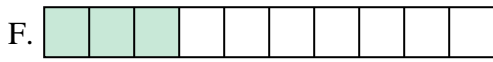
3. \_\_\_\_\_

4)  $\frac{1}{8} + \frac{1}{8}$



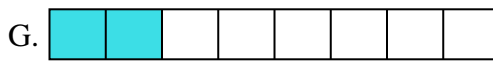
5. \_\_\_\_\_

5)  $\frac{1}{10} + \frac{1}{10} + \frac{1}{10} + \frac{1}{10} + \frac{1}{10}$



6. \_\_\_\_\_

6)  $\frac{1}{3} + \frac{1}{3}$



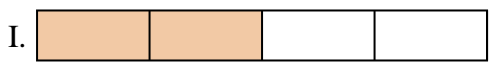
7. \_\_\_\_\_

7)  $\frac{1}{10} + \frac{1}{10} + \frac{1}{10} + \frac{1}{10}$




8. \_\_\_\_\_

8)  $\frac{1}{4} + \frac{1}{4} + \frac{1}{4}$




9. \_\_\_\_\_

9)  $\frac{1}{12} + \frac{1}{12}$




10. \_\_\_\_\_

10)  $\frac{1}{8} + \frac{1}{8} + \frac{1}{8} + \frac{1}{8} + \frac{1}{8} + \frac{1}{8}$




11. \_\_\_\_\_

11)  $\frac{1}{12} + \frac{1}{12} + \frac{1}{12} + \frac{1}{12}$



12. \_\_\_\_\_

12)  $\frac{1}{6} + \frac{1}{6} + \frac{1}{6}$




13. \_\_\_\_\_

13)  $\frac{1}{5} + \frac{1}{5} + \frac{1}{5} + \frac{1}{5}$




14. \_\_\_\_\_

14)  $\frac{1}{8} + \frac{1}{8} + \frac{1}{8} + \frac{1}{8}$



15. \_\_\_\_\_

15)  $\frac{1}{10} + \frac{1}{10} + \frac{1}{10}$





Match each equation to the answer and write the answer.

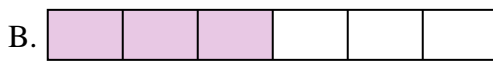
Ex)  $\frac{1}{4} + \frac{1}{4}$



Answers

Ex. I

1)  $\frac{1}{10} + \frac{1}{10} + \frac{1}{10} + \frac{1}{10} + \frac{1}{10} + \frac{1}{10} + \frac{1}{10}$



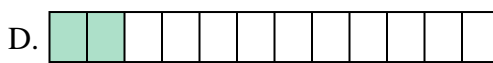
1. L

2)  $\frac{1}{5} + \frac{1}{5}$




2. K

3)  $\frac{1}{5} + \frac{1}{5} + \frac{1}{5}$




3. M

4)  $\frac{1}{8} + \frac{1}{8}$



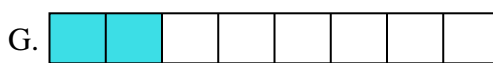
4. G

5)  $\frac{1}{10} + \frac{1}{10} + \frac{1}{10} + \frac{1}{10} + \frac{1}{10}$



5. E

6)  $\frac{1}{3} + \frac{1}{3}$




6. N

7)  $\frac{1}{10} + \frac{1}{10} + \frac{1}{10} + \frac{1}{10}$



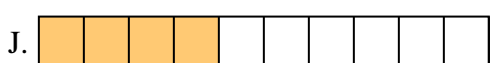
7. J

8)  $\frac{1}{4} + \frac{1}{4} + \frac{1}{4}$



8. A

9)  $\frac{1}{12} + \frac{1}{12}$



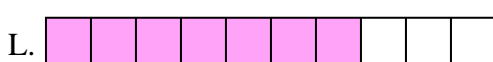
9. D

10)  $\frac{1}{8} + \frac{1}{8} + \frac{1}{8} + \frac{1}{8} + \frac{1}{8} + \frac{1}{8}$




10. C

11)  $\frac{1}{12} + \frac{1}{12} + \frac{1}{12} + \frac{1}{12}$



11. H

12)  $\frac{1}{6} + \frac{1}{6} + \frac{1}{6}$




12. B

13)  $\frac{1}{5} + \frac{1}{5} + \frac{1}{5} + \frac{1}{5}$




13. P

14)  $\frac{1}{8} + \frac{1}{8} + \frac{1}{8} + \frac{1}{8}$



14. O

15)  $\frac{1}{10} + \frac{1}{10} + \frac{1}{10}$



15. F






Match each equation to the answer and write the answer.

**Answers**

Ex)  $\frac{1}{12} + \frac{1}{12} + \frac{1}{12}$



Ex.          **N**

1)  $\frac{1}{6} + \frac{1}{6} + \frac{1}{6} + \frac{1}{6} + \frac{1}{6}$




1. \_\_\_\_\_

2)  $\frac{1}{8} + \frac{1}{8} + \frac{1}{8} + \frac{1}{8} + \frac{1}{8}$



2. \_\_\_\_\_

3)  $\frac{1}{5} + \frac{1}{5}$




3. \_\_\_\_\_

4)  $\frac{1}{3} + \frac{1}{3}$



4. \_\_\_\_\_

5)  $\frac{1}{10} + \frac{1}{10} + \frac{1}{10} + \frac{1}{10} + \frac{1}{10} + \frac{1}{10} + \frac{1}{10} + \frac{1}{10}$



5. \_\_\_\_\_

6)  $\frac{1}{5} + \frac{1}{5} + \frac{1}{5} + \frac{1}{5}$




6. \_\_\_\_\_

7)  $\frac{1}{4} + \frac{1}{4}$




7. \_\_\_\_\_

8)  $\frac{1}{6} + \frac{1}{6}$



8. \_\_\_\_\_

9)  $\frac{1}{10} + \frac{1}{10} + \frac{1}{10} + \frac{1}{10} + \frac{1}{10}$




9. \_\_\_\_\_

10)  $\frac{1}{6} + \frac{1}{6} + \frac{1}{6}$



10. \_\_\_\_\_

11)  $\frac{1}{8} + \frac{1}{8} + \frac{1}{8}$



11. \_\_\_\_\_

12)  $\frac{1}{12} + \frac{1}{12} + \frac{1}{12} + \frac{1}{12}$



12. \_\_\_\_\_

13)  $\frac{1}{6} + \frac{1}{6} + \frac{1}{6} + \frac{1}{6}$




13. \_\_\_\_\_

14)  $\frac{1}{10} + \frac{1}{10}$



14. \_\_\_\_\_

15)  $\frac{1}{12} + \frac{1}{12} + \frac{1}{12} + \frac{1}{12} + \frac{1}{12} + \frac{1}{12} + \frac{1}{12}$




15. \_\_\_\_\_



Match each equation to the answer and write the answer.


Ex)  $\frac{1}{12} + \frac{1}{12} + \frac{1}{12}$



Answers


Ex.     N    

1)  $\frac{1}{6} + \frac{1}{6} + \frac{1}{6} + \frac{1}{6} + \frac{1}{6}$



1.     I    

2)  $\frac{1}{8} + \frac{1}{8} + \frac{1}{8} + \frac{1}{8} + \frac{1}{8}$




2.     C    

3)  $\frac{1}{5} + \frac{1}{5}$




3.     D    

4)  $\frac{1}{3} + \frac{1}{3}$



4.     M    

5)  $\frac{1}{10} + \frac{1}{10} + \frac{1}{10} + \frac{1}{10} + \frac{1}{10} + \frac{1}{10} + \frac{1}{10} + \frac{1}{10}$



5.     F    

6)  $\frac{1}{5} + \frac{1}{5} + \frac{1}{5} + \frac{1}{5}$




6.     A    

7)  $\frac{1}{4} + \frac{1}{4}$



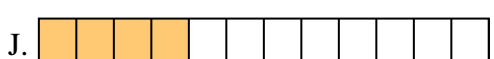
7.     E    

8)  $\frac{1}{6} + \frac{1}{6}$



8.     B    

9)  $\frac{1}{10} + \frac{1}{10} + \frac{1}{10} + \frac{1}{10} + \frac{1}{10}$




9.     P    

10)  $\frac{1}{6} + \frac{1}{6} + \frac{1}{6}$



10.     G    

11)  $\frac{1}{8} + \frac{1}{8} + \frac{1}{8}$



11.     L    

12)  $\frac{1}{12} + \frac{1}{12} + \frac{1}{12} + \frac{1}{12}$



12.     J    

13)  $\frac{1}{6} + \frac{1}{6} + \frac{1}{6} + \frac{1}{6}$



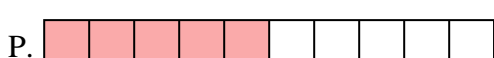
13.     K    

14)  $\frac{1}{10} + \frac{1}{10}$



14.     O    

15)  $\frac{1}{12} + \frac{1}{12} + \frac{1}{12} + \frac{1}{12} + \frac{1}{12} + \frac{1}{12} + \frac{1}{12} + \frac{1}{12}$




15.     H



Match each equation to the answer and write the answer.

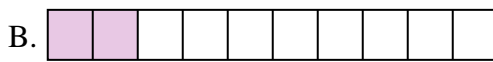
**Answers**

Ex)  $\frac{1}{4} + \frac{1}{4} + \frac{1}{4}$



Ex.          **N**

1)  $\frac{1}{8} + \frac{1}{8} + \frac{1}{8} + \frac{1}{8} + \frac{1}{8} + \frac{1}{8} + \frac{1}{8}$



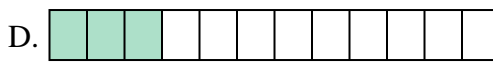
1. \_\_\_\_\_

2)  $\frac{1}{10} + \frac{1}{10} + \frac{1}{10}$




2. \_\_\_\_\_

3)  $\frac{1}{6} + \frac{1}{6} + \frac{1}{6} + \frac{1}{6}$




3. \_\_\_\_\_

4)  $\frac{1}{10} + \frac{1}{10} + \frac{1}{10} + \frac{1}{10} + \frac{1}{10} + \frac{1}{10} + \frac{1}{10}$



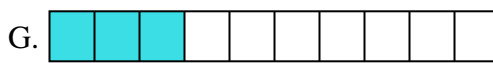
5. \_\_\_\_\_

5)  $\frac{1}{8} + \frac{1}{8} + \frac{1}{8}$




6. \_\_\_\_\_

6)  $\frac{1}{12} + \frac{1}{12} + \frac{1}{12} + \frac{1}{12} + \frac{1}{12} + \frac{1}{12}$



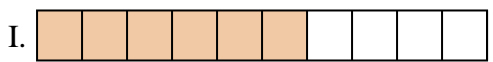
7. \_\_\_\_\_

7)  $\frac{1}{5} + \frac{1}{5} + \frac{1}{5}$



8. \_\_\_\_\_

8)  $\frac{1}{3} + \frac{1}{3}$




9. \_\_\_\_\_

9)  $\frac{1}{5} + \frac{1}{5} + \frac{1}{5} + \frac{1}{5}$




10. \_\_\_\_\_

10)  $\frac{1}{12} + \frac{1}{12} + \frac{1}{12}$




11. \_\_\_\_\_

11)  $\frac{1}{10} + \frac{1}{10} + \frac{1}{10} + \frac{1}{10} + \frac{1}{10} + \frac{1}{10}$



12. \_\_\_\_\_

12)  $\frac{1}{12} + \frac{1}{12}$



13. \_\_\_\_\_

13)  $\frac{1}{10} + \frac{1}{10}$



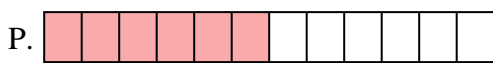
14. \_\_\_\_\_

14)  $\frac{1}{6} + \frac{1}{6} + \frac{1}{6}$



15. \_\_\_\_\_

15)  $\frac{1}{8} + \frac{1}{8} + \frac{1}{8} + \frac{1}{8} + \frac{1}{8} + \frac{1}{8}$






Match each equation to the answer and write the answer.

Answers

Ex)  $\frac{1}{4} + \frac{1}{4} + \frac{1}{4}$



Ex.     **N**    

1)  $\frac{1}{8} + \frac{1}{8} + \frac{1}{8} + \frac{1}{8} + \frac{1}{8} + \frac{1}{8} + \frac{1}{8}$



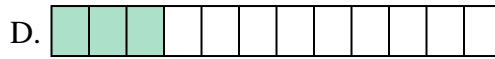
1.     **J**    

2)  $\frac{1}{10} + \frac{1}{10} + \frac{1}{10}$




2.     **G**    

3)  $\frac{1}{6} + \frac{1}{6} + \frac{1}{6} + \frac{1}{6}$




3.     **E**    

4)  $\frac{1}{10} + \frac{1}{10} + \frac{1}{10} + \frac{1}{10} + \frac{1}{10} + \frac{1}{10} + \frac{1}{10}$



5.     **O**    

5)  $\frac{1}{8} + \frac{1}{8} + \frac{1}{8}$




6.     **P**    

6)  $\frac{1}{12} + \frac{1}{12} + \frac{1}{12} + \frac{1}{12} + \frac{1}{12} + \frac{1}{12}$



7.     **H**    

7)  $\frac{1}{5} + \frac{1}{5} + \frac{1}{5}$




8.     **C**    

8)  $\frac{1}{3} + \frac{1}{3}$



9.     **F**    

9)  $\frac{1}{5} + \frac{1}{5} + \frac{1}{5} + \frac{1}{5}$



10.     **D**    

10)  $\frac{1}{12} + \frac{1}{12} + \frac{1}{12}$



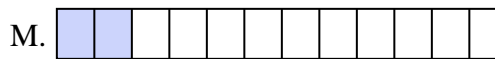
11.     **I**    

11)  $\frac{1}{10} + \frac{1}{10} + \frac{1}{10} + \frac{1}{10} + \frac{1}{10} + \frac{1}{10}$



12.     **M**    

12)  $\frac{1}{12} + \frac{1}{12}$



13.     **B**    

13)  $\frac{1}{10} + \frac{1}{10}$



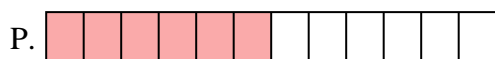
14.     **L**    

14)  $\frac{1}{6} + \frac{1}{6} + \frac{1}{6}$



15.     **A**    

15)  $\frac{1}{8} + \frac{1}{8} + \frac{1}{8} + \frac{1}{8} + \frac{1}{8} + \frac{1}{8}$






Match each equation to the answer and write the answer.


**Answers**

Ex)  $\frac{1}{10} + \frac{1}{10}$




Ex. **G**

1)  $\frac{1}{5} + \frac{1}{5} + \frac{1}{5}$




1. \_\_\_\_\_

2)  $\frac{1}{10} + \frac{1}{10} + \frac{1}{10} + \frac{1}{10} + \frac{1}{10} + \frac{1}{10}$




2. \_\_\_\_\_

3)  $\frac{1}{8} + \frac{1}{8} + \frac{1}{8}$




3. \_\_\_\_\_

4)  $\frac{1}{6} + \frac{1}{6} + \frac{1}{6} + \frac{1}{6} + \frac{1}{6}$



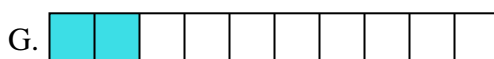
4. \_\_\_\_\_

5)  $\frac{1}{4} + \frac{1}{4}$



6. \_\_\_\_\_

6)  $\frac{1}{3} + \frac{1}{3}$




7. \_\_\_\_\_

7)  $\frac{1}{12} + \frac{1}{12} + \frac{1}{12} + \frac{1}{12} + \frac{1}{12}$



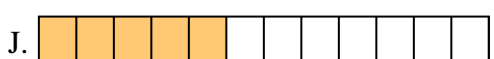
8. \_\_\_\_\_

8)  $\frac{1}{10} + \frac{1}{10} + \frac{1}{10} + \frac{1}{10} + \frac{1}{10} + \frac{1}{10} + \frac{1}{10}$



9. \_\_\_\_\_

9)  $\frac{1}{8} + \frac{1}{8}$



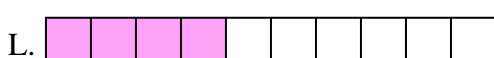
10. \_\_\_\_\_

10)  $\frac{1}{10} + \frac{1}{10} + \frac{1}{10} + \frac{1}{10}$




11. \_\_\_\_\_

11)  $\frac{1}{10} + \frac{1}{10} + \frac{1}{10} + \frac{1}{10} + \frac{1}{10}$




12. \_\_\_\_\_

12)  $\frac{1}{5} + \frac{1}{5} + \frac{1}{5} + \frac{1}{5}$



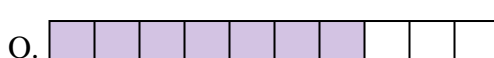
13. \_\_\_\_\_

13)  $\frac{1}{4} + \frac{1}{4} + \frac{1}{4}$




14. \_\_\_\_\_

14)  $\frac{1}{6} + \frac{1}{6} + \frac{1}{6} + \frac{1}{6}$



15. \_\_\_\_\_

15)  $\frac{1}{12} + \frac{1}{12} + \frac{1}{12} + \frac{1}{12}$





Match each equation to the answer and write the answer.

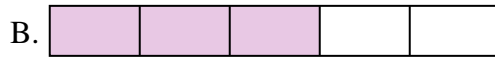
Ex)  $\frac{1}{10} + \frac{1}{10}$



Answers


Ex.     **G**    

1)  $\frac{1}{5} + \frac{1}{5} + \frac{1}{5}$



1.     **B**    

2)  $\frac{1}{10} + \frac{1}{10} + \frac{1}{10} + \frac{1}{10} + \frac{1}{10} + \frac{1}{10}$




2.     **E**    

3)  $\frac{1}{8} + \frac{1}{8} + \frac{1}{8}$



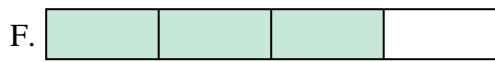
3.     **N**    

4)  $\frac{1}{6} + \frac{1}{6} + \frac{1}{6} + \frac{1}{6} + \frac{1}{6}$



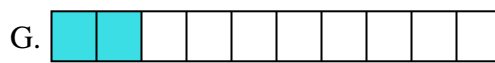
4.     **I**    

5)  $\frac{1}{4} + \frac{1}{4}$




5.     **C**    

6)  $\frac{1}{3} + \frac{1}{3}$



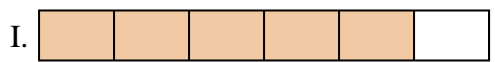
6.     **H**    

7)  $\frac{1}{12} + \frac{1}{12} + \frac{1}{12} + \frac{1}{12} + \frac{1}{12}$



7.     **J**    

8)  $\frac{1}{10} + \frac{1}{10} + \frac{1}{10} + \frac{1}{10} + \frac{1}{10} + \frac{1}{10} + \frac{1}{10}$




8.     **O**    

9)  $\frac{1}{8} + \frac{1}{8}$



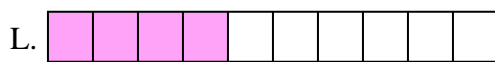
9.     **K**    

10)  $\frac{1}{10} + \frac{1}{10} + \frac{1}{10} + \frac{1}{10}$



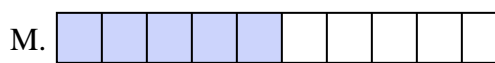
10.     **L**    

11)  $\frac{1}{10} + \frac{1}{10} + \frac{1}{10} + \frac{1}{10} + \frac{1}{10}$



11.     **M**    

12)  $\frac{1}{5} + \frac{1}{5} + \frac{1}{5} + \frac{1}{5}$



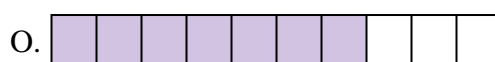
12.     **D**    

13)  $\frac{1}{4} + \frac{1}{4} + \frac{1}{4}$




13.     **F**    

14)  $\frac{1}{6} + \frac{1}{6} + \frac{1}{6} + \frac{1}{6}$



14.     **P**    

15)  $\frac{1}{12} + \frac{1}{12} + \frac{1}{12} + \frac{1}{12}$




15.     **A**



Match each equation to the answer and write the answer.


**Answers**

Ex)  $\frac{1}{5} + \frac{1}{5}$




Ex.     E    

1)  $\frac{1}{10} + \frac{1}{10} + \frac{1}{10} + \frac{1}{10} + \frac{1}{10} + \frac{1}{10} + \frac{1}{10}$



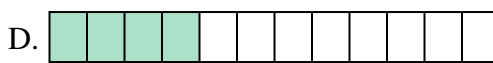
1. \_\_\_\_\_

2)  $\frac{1}{12} + \frac{1}{12} + \frac{1}{12} + \frac{1}{12}$




2. \_\_\_\_\_

3)  $\frac{1}{6} + \frac{1}{6}$




3. \_\_\_\_\_

4)  $\frac{1}{8} + \frac{1}{8} + \frac{1}{8} + \frac{1}{8} + \frac{1}{8} + \frac{1}{8} + \frac{1}{8}$



4. \_\_\_\_\_

5)  $\frac{1}{10} + \frac{1}{10} + \frac{1}{10} + \frac{1}{10} + \frac{1}{10} + \frac{1}{10}$



5. \_\_\_\_\_

6)  $\frac{1}{5} + \frac{1}{5} + \frac{1}{5} + \frac{1}{5}$




6. \_\_\_\_\_

7)  $\frac{1}{10} + \frac{1}{10} + \frac{1}{10} + \frac{1}{10}$



7. \_\_\_\_\_

8)  $\frac{1}{4} + \frac{1}{4}$



8. \_\_\_\_\_

9)  $\frac{1}{3} + \frac{1}{3}$




9. \_\_\_\_\_

10)  $\frac{1}{8} + \frac{1}{8} + \frac{1}{8} + \frac{1}{8} + \frac{1}{8}$



10. \_\_\_\_\_

11)  $\frac{1}{4} + \frac{1}{4} + \frac{1}{4}$




11. \_\_\_\_\_

12)  $\frac{1}{10} + \frac{1}{10} + \frac{1}{10} + \frac{1}{10} + \frac{1}{10}$



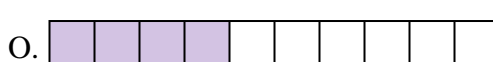
12. \_\_\_\_\_

13)  $\frac{1}{8} + \frac{1}{8} + \frac{1}{8}$




13. \_\_\_\_\_

14)  $\frac{1}{8} + \frac{1}{8} + \frac{1}{8} + \frac{1}{8} + \frac{1}{8} + \frac{1}{8}$



14. \_\_\_\_\_

15)  $\frac{1}{8} + \frac{1}{8} + \frac{1}{8} + \frac{1}{8}$




15. \_\_\_\_\_



Match each equation to the answer and write the answer.


Ex)  $\frac{1}{5} + \frac{1}{5}$



Answers


Ex. E

1)  $\frac{1}{10} + \frac{1}{10} + \frac{1}{10} + \frac{1}{10} + \frac{1}{10} + \frac{1}{10} + \frac{1}{10}$



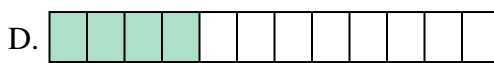
1. K

2)  $\frac{1}{12} + \frac{1}{12} + \frac{1}{12} + \frac{1}{12}$



2. D

3)  $\frac{1}{6} + \frac{1}{6}$




3. B

4)  $\frac{1}{8} + \frac{1}{8} + \frac{1}{8} + \frac{1}{8} + \frac{1}{8} + \frac{1}{8} + \frac{1}{8}$



4. G

5)  $\frac{1}{10} + \frac{1}{10} + \frac{1}{10} + \frac{1}{10} + \frac{1}{10} + \frac{1}{10}$




5. P

6)  $\frac{1}{5} + \frac{1}{5} + \frac{1}{5} + \frac{1}{5}$




6. A

7)  $\frac{1}{10} + \frac{1}{10} + \frac{1}{10} + \frac{1}{10}$



7. O

8)  $\frac{1}{4} + \frac{1}{4}$



8. M

9)  $\frac{1}{3} + \frac{1}{3}$




9. J

10)  $\frac{1}{8} + \frac{1}{8} + \frac{1}{8} + \frac{1}{8} + \frac{1}{8}$



10. H

11)  $\frac{1}{4} + \frac{1}{4} + \frac{1}{4}$



11. L

12)  $\frac{1}{10} + \frac{1}{10} + \frac{1}{10} + \frac{1}{10} + \frac{1}{10}$



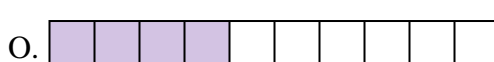
12. C

13)  $\frac{1}{8} + \frac{1}{8} + \frac{1}{8}$




13. F

14)  $\frac{1}{8} + \frac{1}{8} + \frac{1}{8} + \frac{1}{8} + \frac{1}{8} + \frac{1}{8}$



14. N

15)  $\frac{1}{8} + \frac{1}{8} + \frac{1}{8} + \frac{1}{8}$



15. I





Match each equation to the answer and write the answer.


**Answers**

Ex)  $\frac{1}{8} + \frac{1}{8} + \frac{1}{8} + \frac{1}{8} + \frac{1}{8}$



Ex.     A    

1)  $\frac{1}{4} + \frac{1}{4} + \frac{1}{4}$



1. \_\_\_\_\_

2)  $\frac{1}{10} + \frac{1}{10} + \frac{1}{10} + \frac{1}{10} + \frac{1}{10} + \frac{1}{10}$



2. \_\_\_\_\_

3)  $\frac{1}{6} + \frac{1}{6}$




3. \_\_\_\_\_

4)  $\frac{1}{8} + \frac{1}{8} + \frac{1}{8} + \frac{1}{8} + \frac{1}{8} + \frac{1}{8} + \frac{1}{8}$




4. \_\_\_\_\_

5)  $\frac{1}{6} + \frac{1}{6} + \frac{1}{6} + \frac{1}{6}$



5. \_\_\_\_\_

6)  $\frac{1}{12} + \frac{1}{12} + \frac{1}{12} + \frac{1}{12} + \frac{1}{12}$



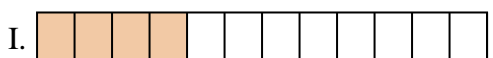
6. \_\_\_\_\_

7)  $\frac{1}{8} + \frac{1}{8} + \frac{1}{8} + \frac{1}{8}$



7. \_\_\_\_\_

8)  $\frac{1}{3} + \frac{1}{3}$



8. \_\_\_\_\_

9)  $\frac{1}{6} + \frac{1}{6} + \frac{1}{6} + \frac{1}{6} + \frac{1}{6}$




9. \_\_\_\_\_

10)  $\frac{1}{12} + \frac{1}{12} + \frac{1}{12} + \frac{1}{12}$



10. \_\_\_\_\_

11)  $\frac{1}{10} + \frac{1}{10} + \frac{1}{10} + \frac{1}{10}$




11. \_\_\_\_\_

12)  $\frac{1}{5} + \frac{1}{5} + \frac{1}{5} + \frac{1}{5}$




12. \_\_\_\_\_

13)  $\frac{1}{4} + \frac{1}{4}$




13. \_\_\_\_\_

14)  $\frac{1}{8} + \frac{1}{8} + \frac{1}{8} + \frac{1}{8} + \frac{1}{8} + \frac{1}{8}$



14. \_\_\_\_\_

15)  $\frac{1}{5} + \frac{1}{5}$




15. \_\_\_\_\_



Match each equation to the answer and write the answer.


Ex)  $\frac{1}{8} + \frac{1}{8} + \frac{1}{8} + \frac{1}{8} + \frac{1}{8}$



Answers

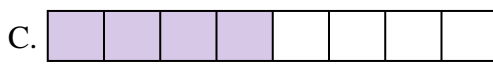
Ex.     **A**    

1)  $\frac{1}{4} + \frac{1}{4} + \frac{1}{4}$



1.     **F**    

2)  $\frac{1}{10} + \frac{1}{10} + \frac{1}{10} + \frac{1}{10} + \frac{1}{10} + \frac{1}{10}$




2.     **P**    

3)  $\frac{1}{6} + \frac{1}{6}$




3.     **N**    

4)  $\frac{1}{8} + \frac{1}{8} + \frac{1}{8} + \frac{1}{8} + \frac{1}{8} + \frac{1}{8} + \frac{1}{8}$



4.     **O**    

5)  $\frac{1}{6} + \frac{1}{6} + \frac{1}{6} + \frac{1}{6}$




5.     **H**    

6)  $\frac{1}{12} + \frac{1}{12} + \frac{1}{12} + \frac{1}{12} + \frac{1}{12}$




6.     **J**    

7)  $\frac{1}{8} + \frac{1}{8} + \frac{1}{8} + \frac{1}{8}$



7.     **C**    

8)  $\frac{1}{3} + \frac{1}{3}$




8.     **K**    

9)  $\frac{1}{6} + \frac{1}{6} + \frac{1}{6} + \frac{1}{6} + \frac{1}{6}$




9.     **L**    

10)  $\frac{1}{12} + \frac{1}{12} + \frac{1}{12} + \frac{1}{12}$



10.     **I**    

11)  $\frac{1}{10} + \frac{1}{10} + \frac{1}{10} + \frac{1}{10}$




11.     **D**    

12)  $\frac{1}{5} + \frac{1}{5} + \frac{1}{5} + \frac{1}{5}$




12.     **B**    

13)  $\frac{1}{4} + \frac{1}{4}$



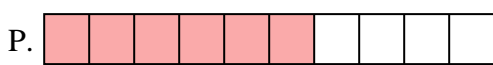
13.     **M**    

14)  $\frac{1}{8} + \frac{1}{8} + \frac{1}{8} + \frac{1}{8} + \frac{1}{8} + \frac{1}{8}$



14.     **G**    

15)  $\frac{1}{5} + \frac{1}{5}$



15.     **E**



Match each equation to the answer and write the answer.

Answers

Ex)  $\frac{1}{8} + \frac{1}{8} + \frac{1}{8} + \frac{1}{8} + \frac{1}{8}$



Ex.     **J**    

1)  $\frac{1}{5} + \frac{1}{5} + \frac{1}{5}$




1. \_\_\_\_\_

2)  $\frac{1}{4} + \frac{1}{4}$




2. \_\_\_\_\_

3)  $\frac{1}{5} + \frac{1}{5} + \frac{1}{5} + \frac{1}{5}$



3. \_\_\_\_\_

4)  $\frac{1}{8} + \frac{1}{8}$



5. \_\_\_\_\_

5)  $\frac{1}{4} + \frac{1}{4} + \frac{1}{4}$




6. \_\_\_\_\_

6)  $\frac{1}{5} + \frac{1}{5}$




7. \_\_\_\_\_

7)  $\frac{1}{8} + \frac{1}{8} + \frac{1}{8} + \frac{1}{8} + \frac{1}{8} + \frac{1}{8}$



8. \_\_\_\_\_

8)  $\frac{1}{6} + \frac{1}{6} + \frac{1}{6} + \frac{1}{6} + \frac{1}{6}$




9. \_\_\_\_\_

9)  $\frac{1}{6} + \frac{1}{6} + \frac{1}{6} + \frac{1}{6}$




10. \_\_\_\_\_

10)  $\frac{1}{12} + \frac{1}{12} + \frac{1}{12} + \frac{1}{12} + \frac{1}{12} + \frac{1}{12}$



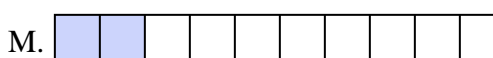
11. \_\_\_\_\_

11)  $\frac{1}{10} + \frac{1}{10} + \frac{1}{10}$



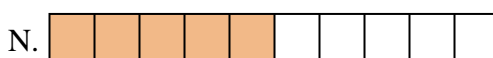
12. \_\_\_\_\_

12)  $\frac{1}{10} + \frac{1}{10} + \frac{1}{10} + \frac{1}{10} + \frac{1}{10}$



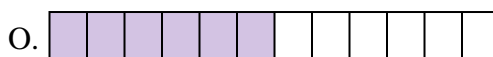
13. \_\_\_\_\_

13)  $\frac{1}{3} + \frac{1}{3}$




14. \_\_\_\_\_

14)  $\frac{1}{8} + \frac{1}{8} + \frac{1}{8} + \frac{1}{8}$



15. \_\_\_\_\_


15)  $\frac{1}{10} + \frac{1}{10}$





Match each equation to the answer and write the answer.

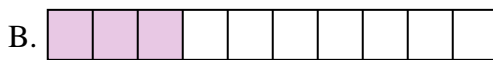
Ex)  $\frac{1}{8} + \frac{1}{8} + \frac{1}{8} + \frac{1}{8} + \frac{1}{8}$



Answers

Ex.     **J**    

1)  $\frac{1}{5} + \frac{1}{5} + \frac{1}{5}$




1.     **L**    

2)  $\frac{1}{4} + \frac{1}{4}$



2.     **D**    

3)  $\frac{1}{5} + \frac{1}{5} + \frac{1}{5} + \frac{1}{5}$




3.     **H**    

4)  $\frac{1}{8} + \frac{1}{8}$



4.     **K**    

5)  $\frac{1}{4} + \frac{1}{4} + \frac{1}{4}$




5.     **E**    

6)  $\frac{1}{5} + \frac{1}{5}$



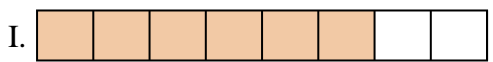
6.     **P**    

7)  $\frac{1}{8} + \frac{1}{8} + \frac{1}{8} + \frac{1}{8} + \frac{1}{8} + \frac{1}{8}$




7.     **I**    

8)  $\frac{1}{6} + \frac{1}{6} + \frac{1}{6} + \frac{1}{6} + \frac{1}{6}$



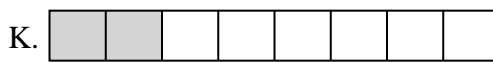
8.     **G**    

9)  $\frac{1}{6} + \frac{1}{6} + \frac{1}{6} + \frac{1}{6}$



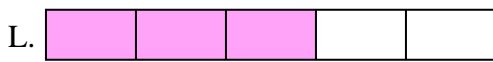
9.     **A**    

10)  $\frac{1}{12} + \frac{1}{12} + \frac{1}{12} + \frac{1}{12} + \frac{1}{12} + \frac{1}{12}$



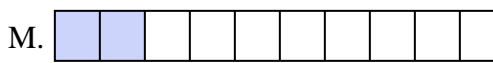
10.     **O**    

11)  $\frac{1}{10} + \frac{1}{10} + \frac{1}{10}$



11.     **B**    

12)  $\frac{1}{10} + \frac{1}{10} + \frac{1}{10} + \frac{1}{10} + \frac{1}{10}$



12.     **N**    

13)  $\frac{1}{3} + \frac{1}{3}$



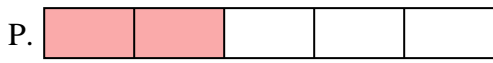
13.     **F**    

14)  $\frac{1}{8} + \frac{1}{8} + \frac{1}{8} + \frac{1}{8}$



14.     **C**    

15)  $\frac{1}{10} + \frac{1}{10}$



15.     **M**